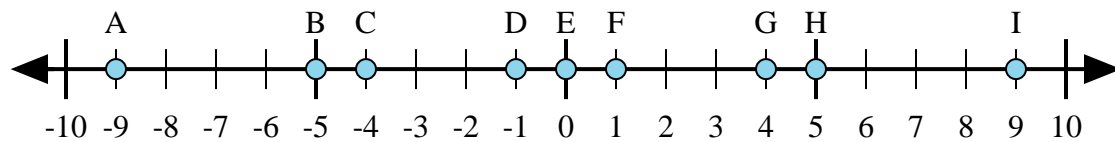




Determina quale lettera nella linea dei numeri rappresenta meglio la risposta a ciascun problema.



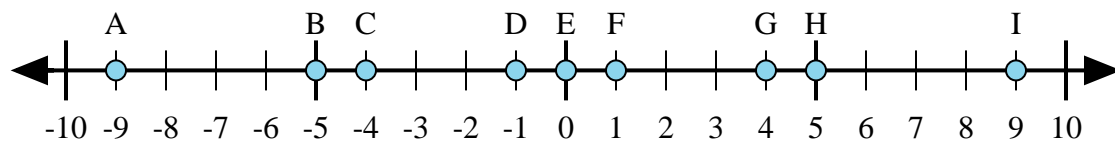
1) $(-5) + 4 =$

2) $(-4) + (-5) =$

3) $4 + 5 =$

4) $(-4) + 5 =$

5) $5 + (-4) =$



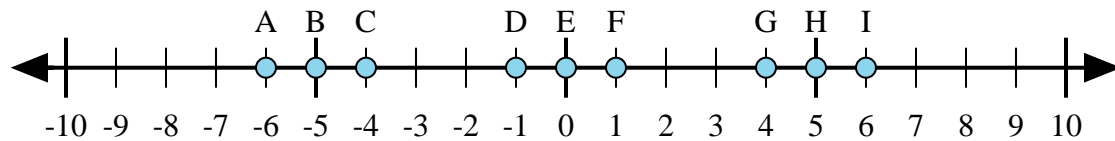
6) $(-5) + (-4) =$

7) $5 + (-4) =$

8) $4 + (-5) =$

9) $(-5) + 4 =$

10) $5 + 4 =$



11) $(-5) + (-1) =$

12) $(-5) + 1 =$

13) $5 + 1 =$

14) $1 + (-5) =$

15) $(-1) + 5 =$

Risposte

1. _____

2. _____

3. _____

4. _____

5. _____

6. _____

7. _____

8. _____

9. _____

10. _____

11. _____

12. _____

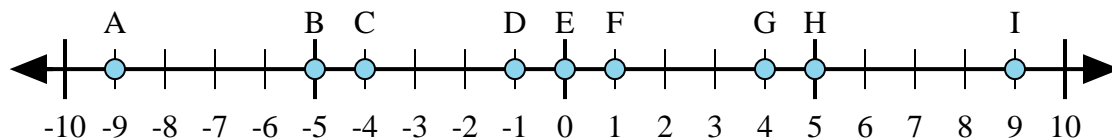
13. _____

14. _____

15. _____



Determina quale lettera nella linea dei numeri rappresenta meglio la risposta a ciascun problema.



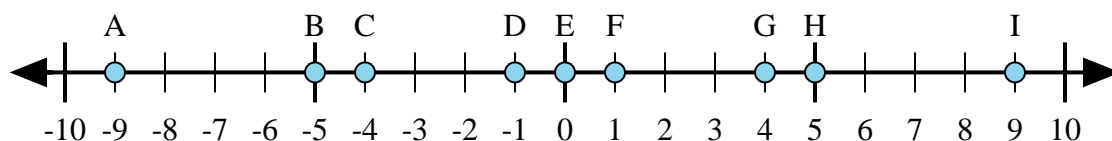
1) $(-5) + 4 =$

2) $(-4) + (-5) =$

3) $4 + 5 =$

4) $(-4) + 5 =$

5) $5 + (-4) =$



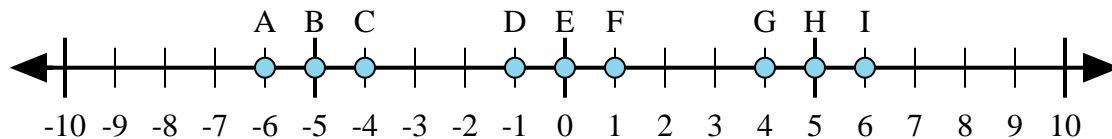
6) $(-5) + (-4) =$

7) $5 + (-4) =$

8) $4 + (-5) =$

9) $(-5) + 4 =$

10) $5 + 4 =$



11) $(-5) + (-1) =$

12) $(-5) + 1 =$

13) $5 + 1 =$

14) $1 + (-5) =$

15) $(-1) + 5 =$

Risposte1. **D**2. **A**3. **I**4. **F**5. **F**6. **A**7. **F**8. **D**9. **D**10. **I**11. **A**12. **C**13. **I**14. **C**15. **G**