




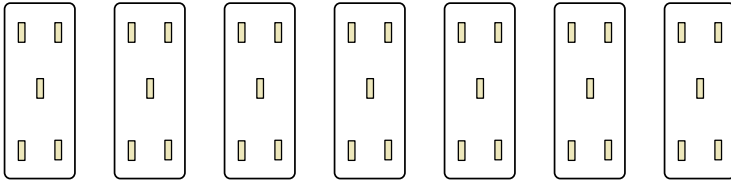
Determina come scriveresti ogni gruppo sotto forma di moltiplicazione.

**Risposte**

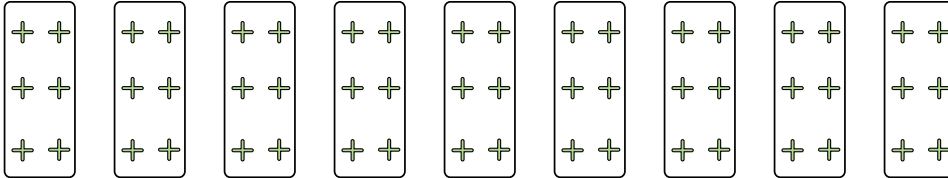
Es)

Es.  $8 \times 2 = 16$ 


1)



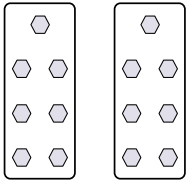
2)



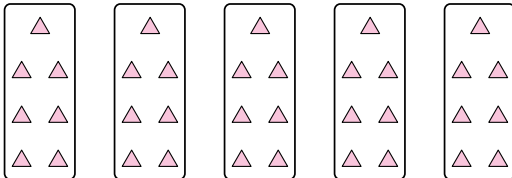
3)



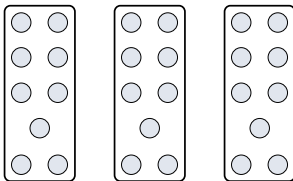
4)




5)



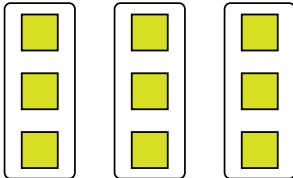
6)



7)



8)



1. \_\_\_\_\_

2. \_\_\_\_\_

3. \_\_\_\_\_

4. \_\_\_\_\_

5. \_\_\_\_\_


6. \_\_\_\_\_

7. \_\_\_\_\_

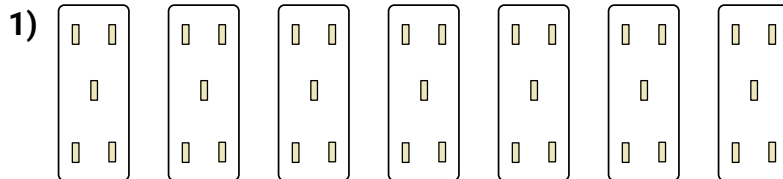
8. \_\_\_\_\_



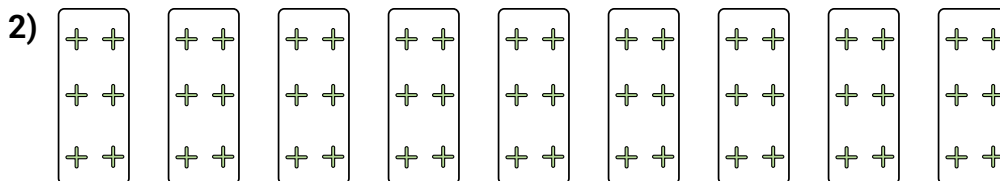
Determina come scriveresti ogni gruppo sotto forma di moltiplicazione.

**Risposte**


Es.  $8 \times 2 = 16$



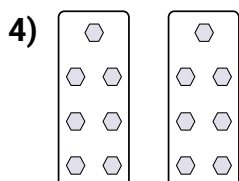
1.  $7 \times 5 = 35$



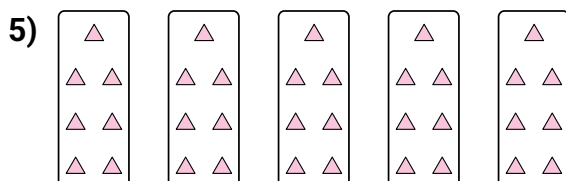
2.  $9 \times 6 = 54$



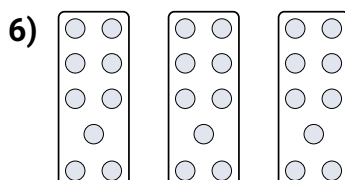
3.  $7 \times 3 = 21$




4.  $2 \times 7 = 14$



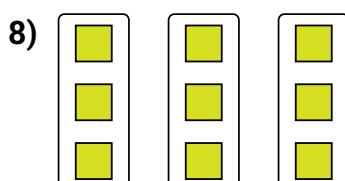
5.  $5 \times 7 = 35$



6.  $3 \times 9 = 27$



7.  $6 \times 3 = 18$



8.  $3 \times 3 = 9$