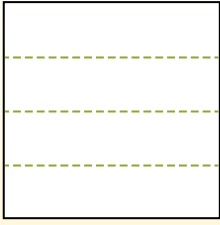


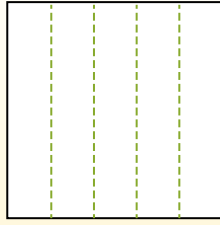


Dividi i rettangoli come descritto e poi conta per trovare il numero delle divisioni.

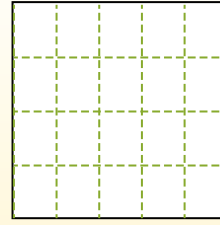
Las filas van de izquierda a derecha.




Las columnas van de arriba a abajo.




Aqui tem 4 linhas e 5 colunas .
Existem 20 caixas no total.




1) 3 righe
3 colonne




2) 2 righe
3 colonne




3) 4 righe
3 colonne




4) 5 righe
4 colonne




5) 2 righe
5 colonne




6) 3 righe
2 colonne




7) 2 righe
4 colonne



8) 4 righe
4 colonne



9) 5 righe
3 colonne



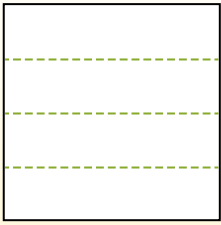
Risposte

- 1. _____
- 2. _____
- 3. _____
- 4. _____
- 5. _____
- 6. _____
- 7. _____
- 8. _____
- 9. _____

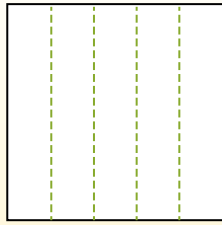


Dividi i rettangoli come descritto e poi conta per trovare il numero delle divisioni.

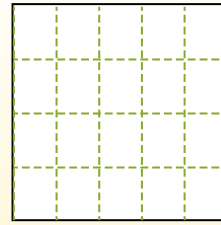
Las filas van de izquierda a derecha.



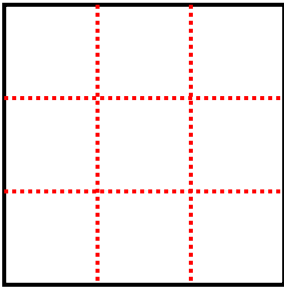
Las columnas van de arriba a abajo.



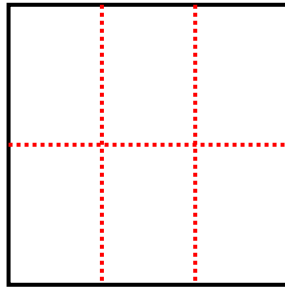
Aqui tem 4 linhas e 5 colunas .
Existem 20 caixas no total.



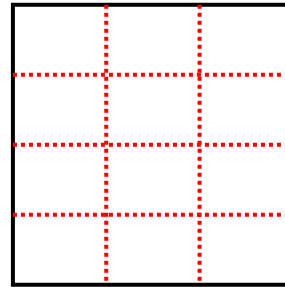
1) 3 righe
3 colonne



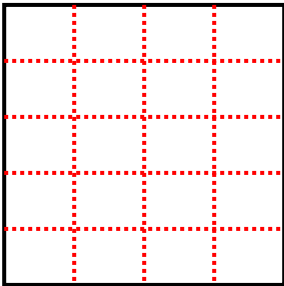
2) 2 righe
3 colonne



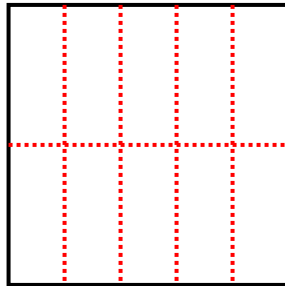
3) 4 righe
3 colonne



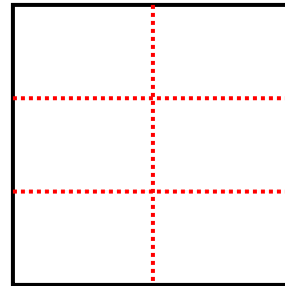
4) 5 righe
4 colonne



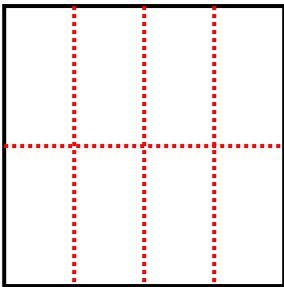
5) 2 righe
5 colonne



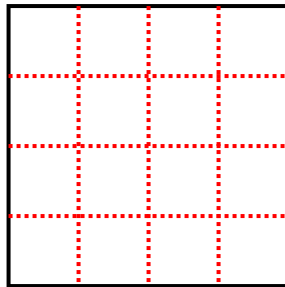
6) 3 righe
2 colonne



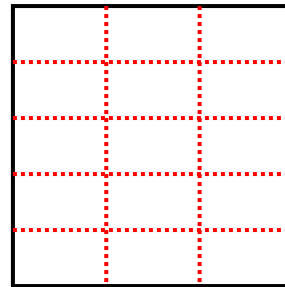
7) 2 righe
4 colonne



8) 4 righe
4 colonne



9) 5 righe
3 colonne



Risposte

1. 9

2. 6

3. 12

4. 20

5. 10

6. 6

7. 8

8. 16

9. 15