



Usa le griglie fornite per risolvere ogni operazione.

1) $39 \times 30 =$

2) $28 \times 20 =$

3) $21 \times 20 =$

4) $27 \times 20 =$

5) $20 \times 28 =$

6) $20 \times 21 =$

Risposte

1. _____

2. _____

3. _____

4. _____

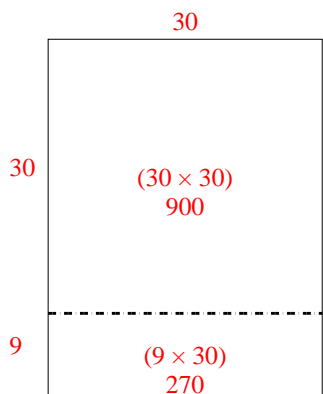
5. _____

6. _____

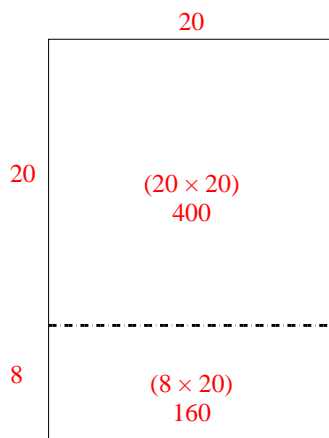


Usa le griglie fornite per risolvere ogni operazione.

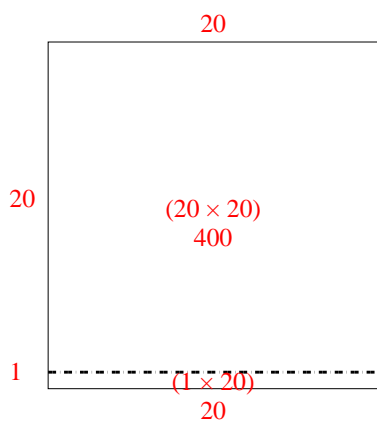
1) $39 \times 30 =$



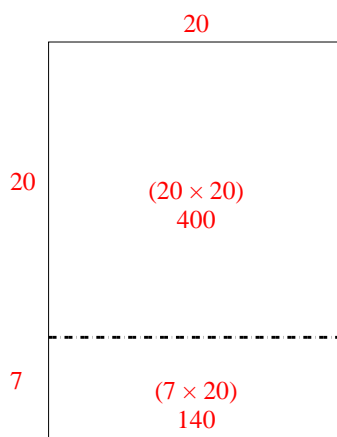
2) $28 \times 20 =$



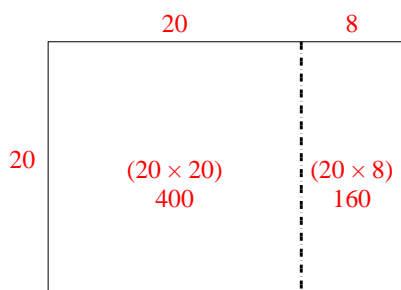
3) $21 \times 20 =$



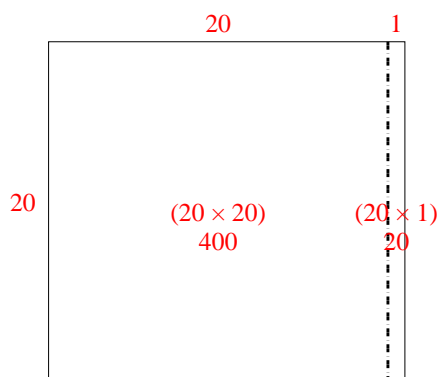
4) $27 \times 20 =$



5) $20 \times 28 =$



6) $20 \times 21 =$



Risposte

1. 1.170

2. 560

3. 420

4. 540


5. 560

6. 420




Usa le griglie fornite per risolvere ogni operazione.


1) $21 \times 20 =$




2) $27 \times 20 =$




3) $20 \times 23 =$



4) $20 \times 27 =$



5) $20 \times 29 =$



6) $20 \times 25 =$



Risposte

1. _____

2. _____

3. _____

4. _____

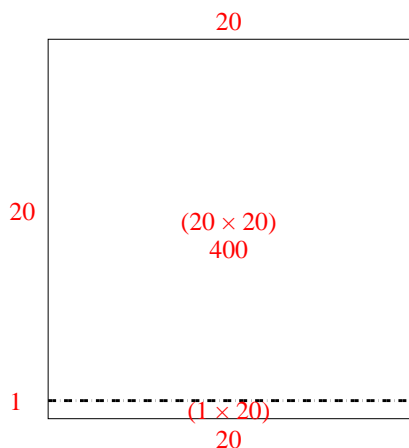
5. _____

6. _____

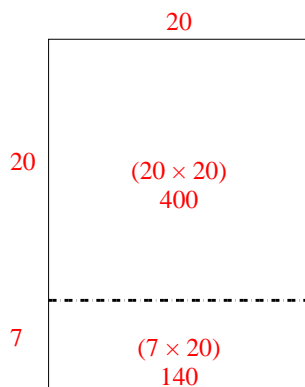


Usa le griglie fornite per risolvere ogni operazione.

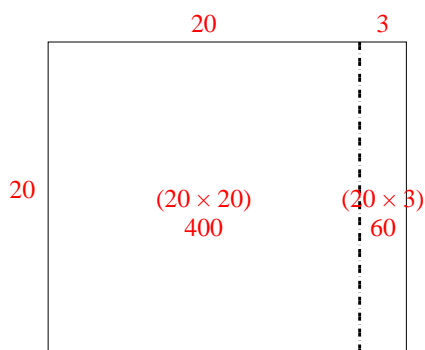
1) $21 \times 20 =$



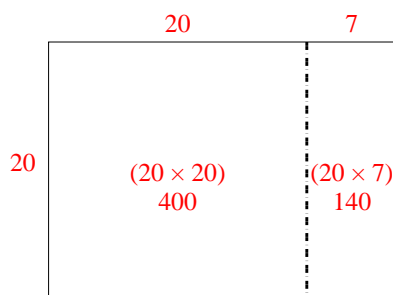
2) $27 \times 20 =$



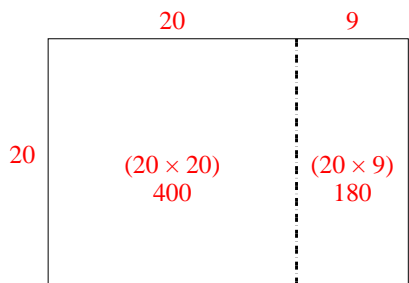
3) $20 \times 23 =$



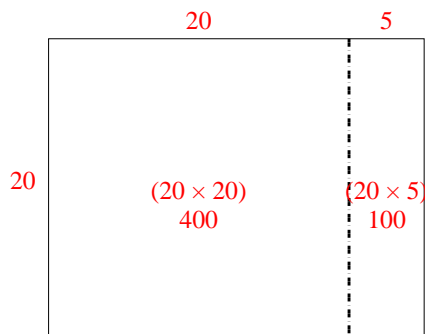
4) $20 \times 27 =$



5) $20 \times 29 =$



6) $20 \times 25 =$



Risposte

1. 420

2. 540

3. 460

4. 540


5. 580

6. 500




Usa le griglie fornite per risolvere ogni operazione.


1) $26 \times 20 =$




2) $20 \times 22 =$




3) $29 \times 20 =$




4) $20 \times 29 =$



5) $25 \times 20 =$



6) $20 \times 28 =$



Risposte

1. _____

2. _____

3. _____

4. _____

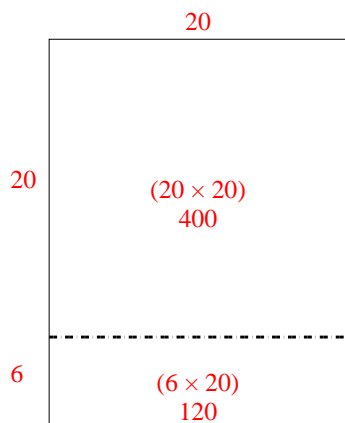
5. _____

6. _____

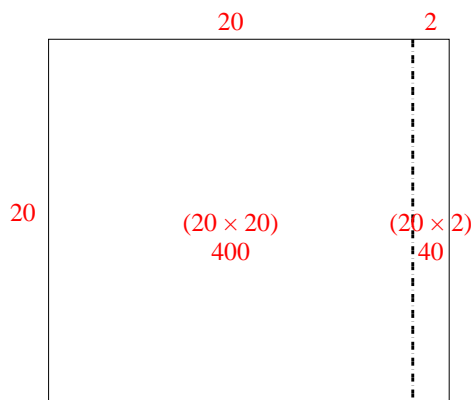


Usa le griglie fornite per risolvere ogni operazione.

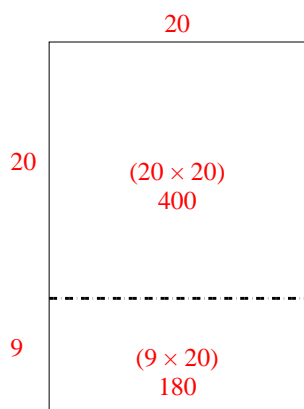
1) $26 \times 20 =$



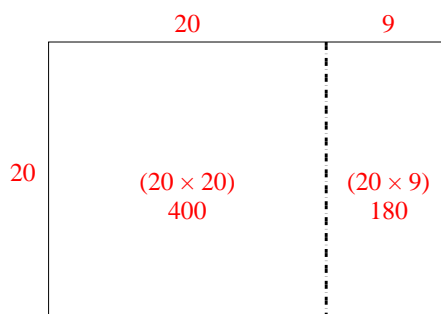
2) $20 \times 22 =$



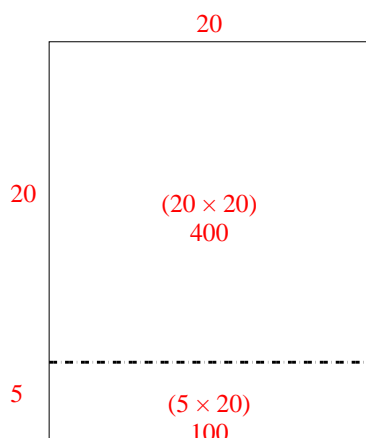
3) $29 \times 20 =$



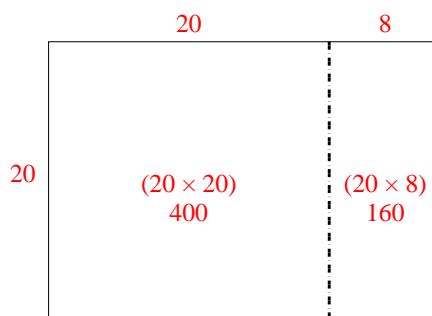
4) $20 \times 29 =$



5) $25 \times 20 =$



6) $20 \times 28 =$




Risposte

1. 520
2. 440
3. 580
4. 580
5. 500
6. 560




Usa le griglie fornite per risolvere ogni operazione.


1) $33 \times 30 =$




2) $20 \times 23 =$




3) $20 \times 21 =$




4) $20 \times 27 =$



5) $20 \times 26 =$



6) $29 \times 20 =$



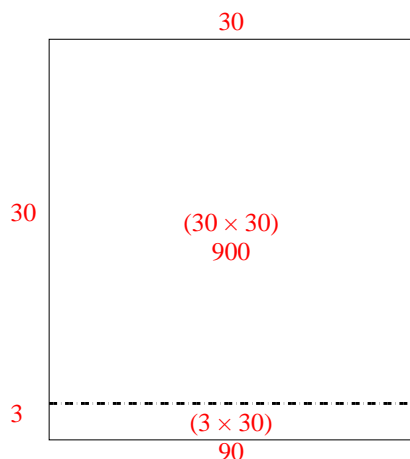
Risposte

- 1. _____
- 2. _____
- 3. _____
- 4. _____
- 5. _____
- 6. _____

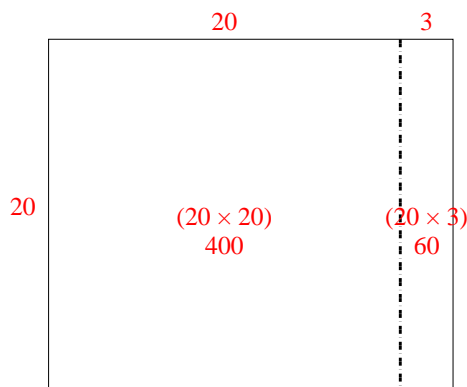


Usa le griglie fornite per risolvere ogni operazione.

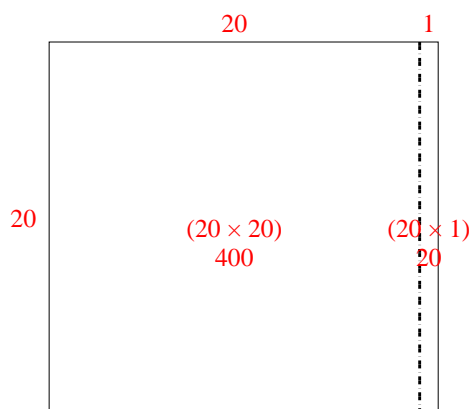
1) $33 \times 30 =$



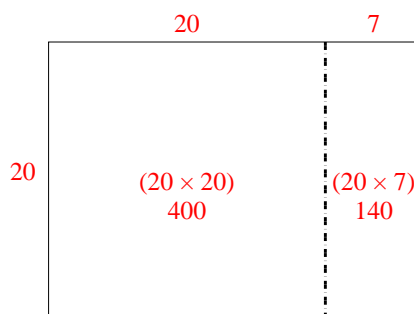
2) $20 \times 23 =$



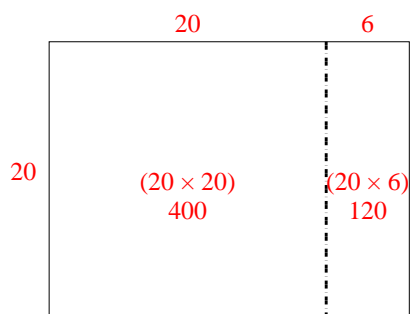
3) $20 \times 21 =$



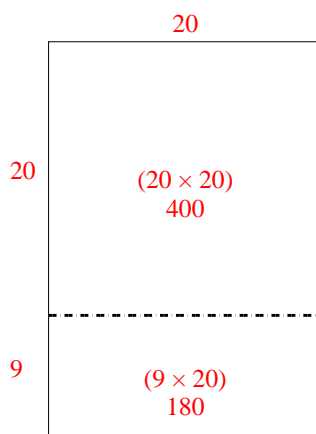
4) $20 \times 27 =$



5) $20 \times 26 =$



6) $29 \times 20 =$



Risposte

1. 990

2. 460

3. 420

4. 540

5. 520

6. 580



Usa le griglie fornite per risolvere ogni operazione.

1) $43 \times 30 =$

2) $32 \times 30 =$

3) $20 \times 23 =$

4) $25 \times 20 =$

5) $20 \times 24 =$

6) $22 \times 20 =$

Risposte

1. _____

2. _____

3. _____

4. _____

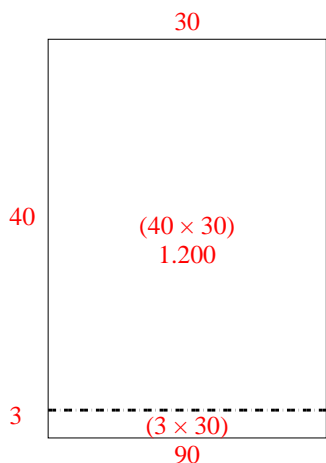
5. _____

6. _____

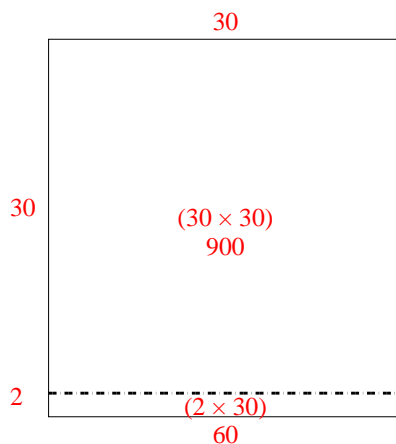


Usa le griglie fornite per risolvere ogni operazione.

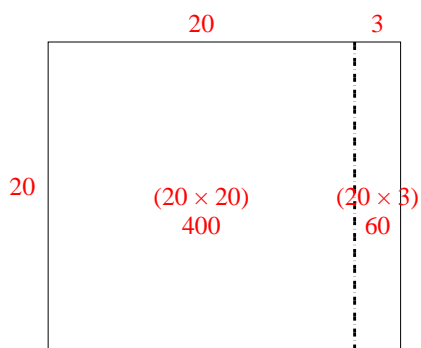
1) $43 \times 30 =$



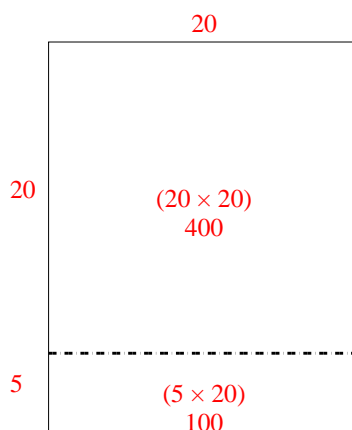
2) $32 \times 30 =$



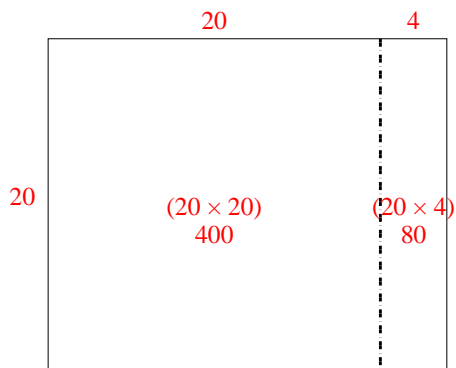
3) $20 \times 23 =$



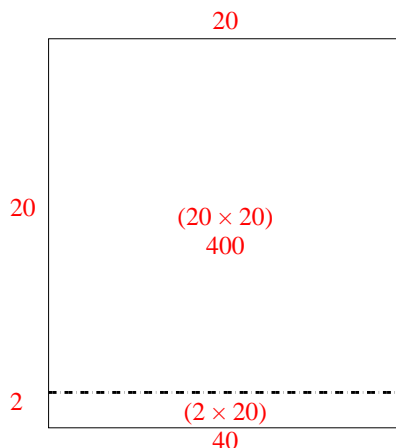
4) $25 \times 20 =$



5) $20 \times 24 =$



6) $22 \times 20 =$



Risposte

1. **1.290**

2. **960**

3. **460**

4. **500**


5. **480**

6. **440**




Usa le griglie fornite per risolvere ogni operazione.


1) $20 \times 23 =$




2) $28 \times 20 =$




3) $24 \times 20 =$




4) $26 \times 20 =$



5) $20 \times 25 =$



6) $20 \times 24 =$



Risposte

1. _____

2. _____

3. _____

4. _____

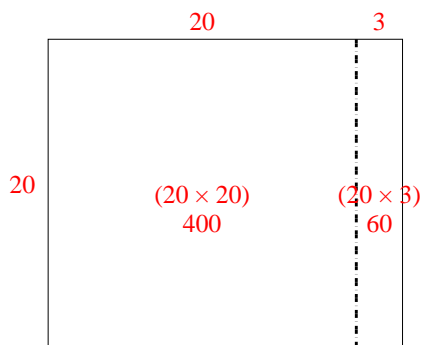
5. _____

6. _____

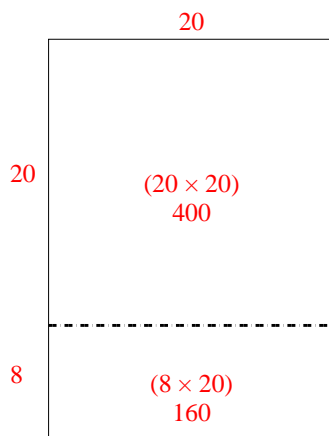


Usa le griglie fornite per risolvere ogni operazione.

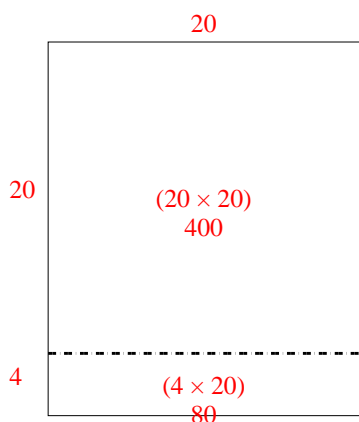
1) $20 \times 23 =$



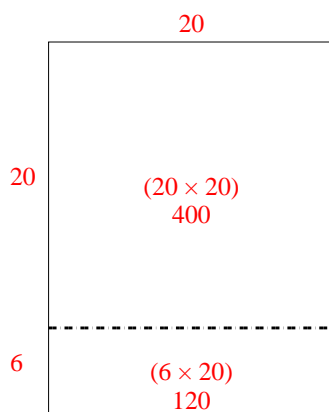
2) $28 \times 20 =$



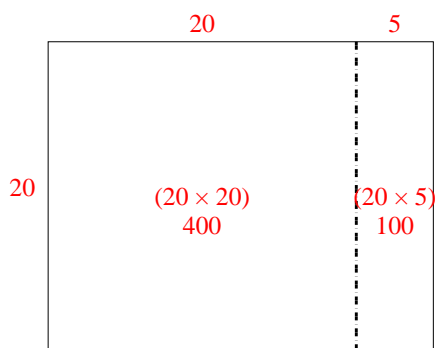
3) $24 \times 20 =$



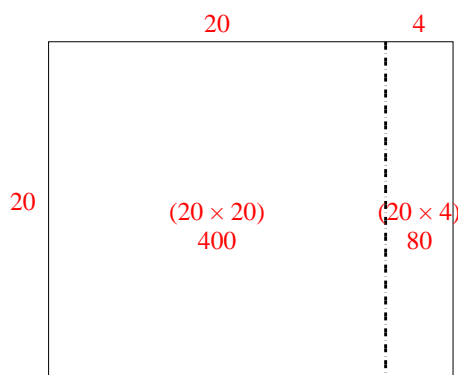
4) $26 \times 20 =$



5) $20 \times 25 =$



6) $20 \times 24 =$




Risposte

1. 460
2. 560
3. 480
4. 520
5. 500
6. 480




Usa le griglie fornite per risolvere ogni operazione.


1) $30 \times 32 =$




2) $20 \times 23 =$




3) $25 \times 20 =$




4) $26 \times 20 =$



5) $22 \times 20 =$



6) $20 \times 21 =$



Risposte

1. _____

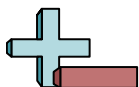
2. _____

3. _____

4. _____

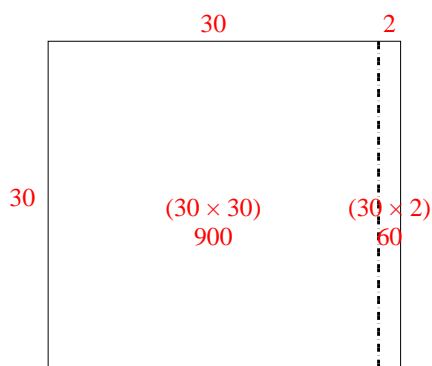
5. _____

6. _____

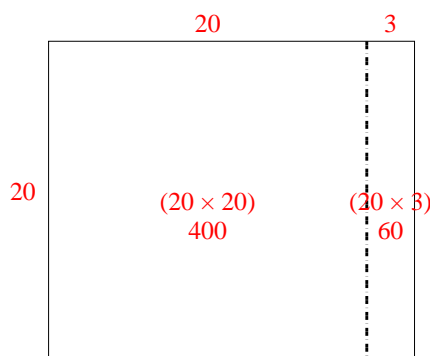


Usa le griglie fornite per risolvere ogni operazione.

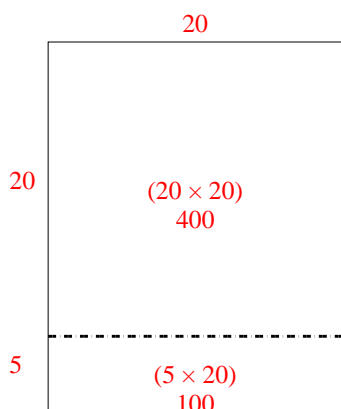
1) $30 \times 32 =$



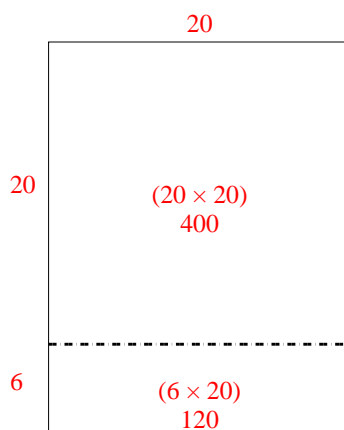
2) $20 \times 23 =$



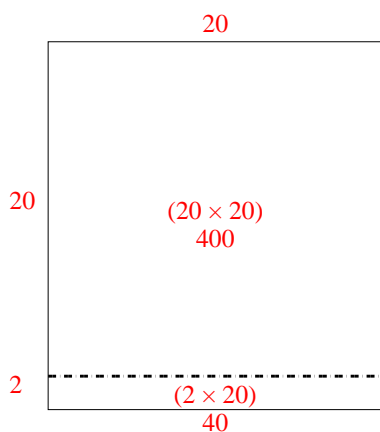
3) $25 \times 20 =$



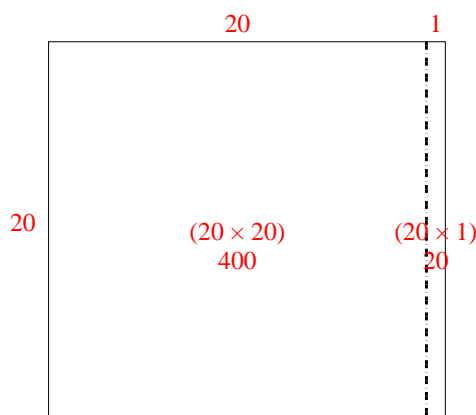
4) $26 \times 20 =$



5) $22 \times 20 =$



6) $20 \times 21 =$



Risposte

1. 960

2. 460

3. 500

4. 520


5. 440

6. 420




Usa le griglie fornite per risolvere ogni operazione.

1) $32 \times 20 =$




2) $30 \times 37 =$




3) $20 \times 22 =$




4) $20 \times 29 =$



5) $23 \times 20 =$



6) $28 \times 20 =$



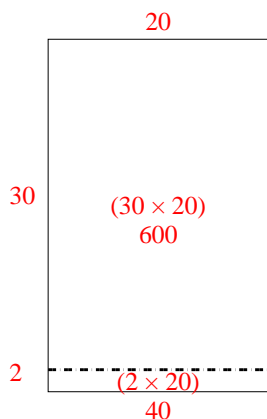
Risposte

- 1. _____
- 2. _____
- 3. _____
- 4. _____
- 5. _____
- 6. _____

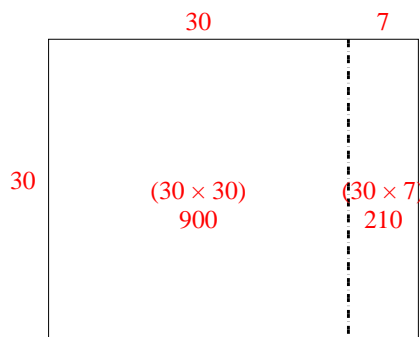


Usa le griglie fornite per risolvere ogni operazione.

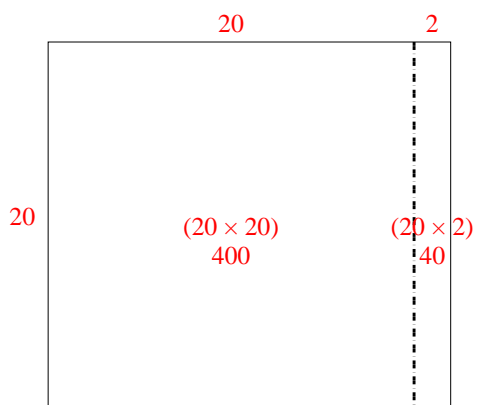
1) $32 \times 20 =$



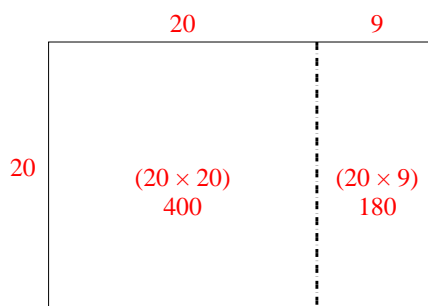
2) $30 \times 37 =$



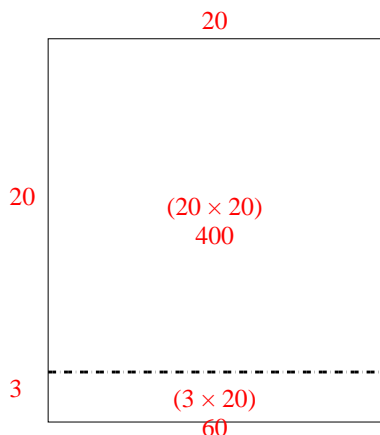
3) $20 \times 22 =$



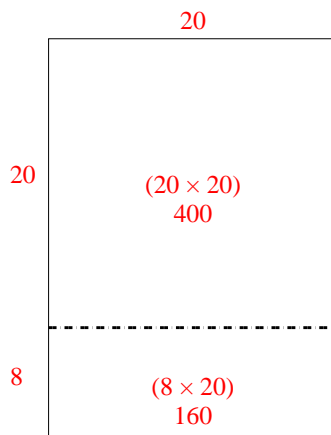
4) $20 \times 29 =$



5) $23 \times 20 =$



6) $28 \times 20 =$



Risposte

1. 640

2. 1.110

3. 440

4. 580


5. 460

6. 560




Usa le griglie fornite per risolvere ogni operazione.


1) $23 \times 20 =$




2) $20 \times 28 =$




3) $20 \times 21 =$




4) $26 \times 20 =$



5) $20 \times 22 =$



6) $25 \times 20 =$



Risposte

1. _____

2. _____

3. _____

4. _____

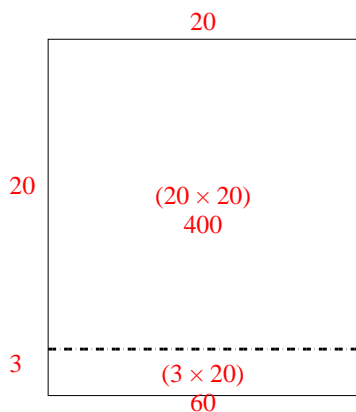
5. _____

6. _____

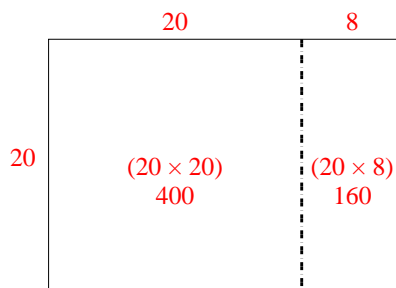


Usa le griglie fornite per risolvere ogni operazione.

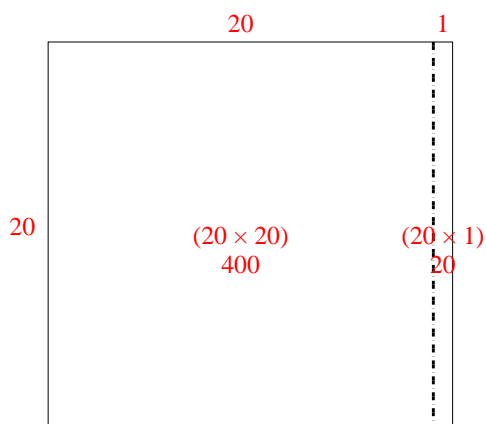
1) $23 \times 20 =$



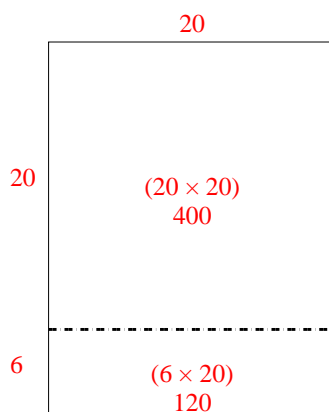
2) $20 \times 28 =$



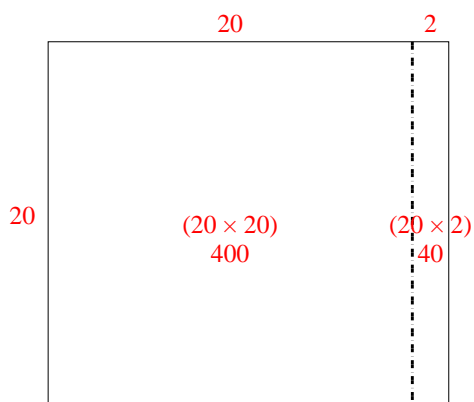
3) $20 \times 21 =$



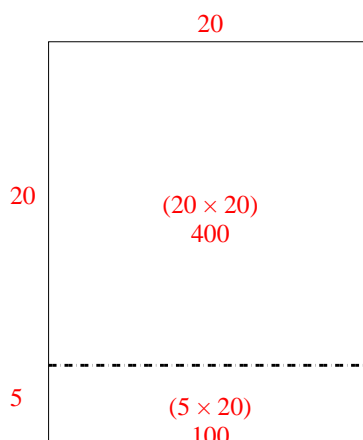
4) $26 \times 20 =$



5) $20 \times 22 =$



6) $25 \times 20 =$



Risposte

1. 460

2. 560

3. 420

4. 520


5. 440

6. 500




Usa le griglie fornite per risolvere ogni operazione.


1) $20 \times 26 =$




2) $21 \times 20 =$




3) $20 \times 22 =$




4) $20 \times 28 =$



5) $20 \times 29 =$



6) $20 \times 23 =$

**Risposte**

1. _____

2. _____

3. _____

4. _____

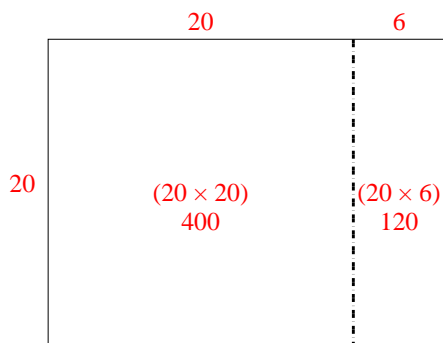
5. _____

6. _____

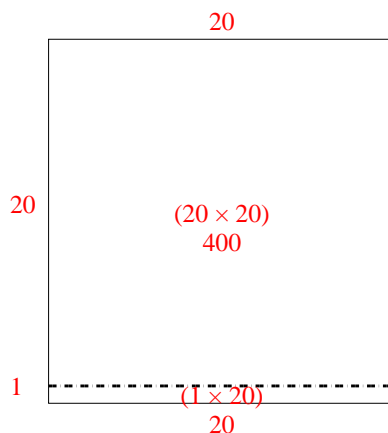


Usa le griglie fornite per risolvere ogni operazione.

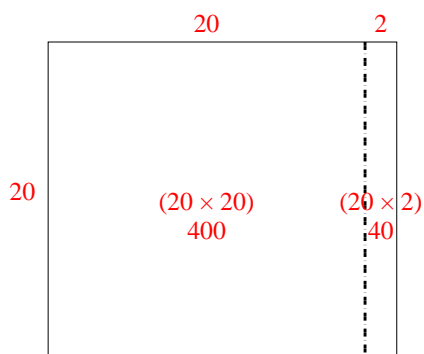
1) $20 \times 26 =$



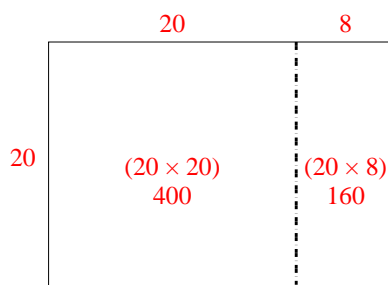
2) $21 \times 20 =$



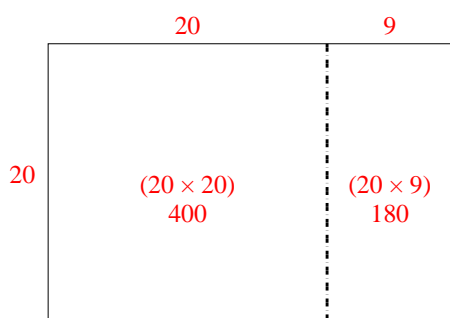
3) $20 \times 22 =$



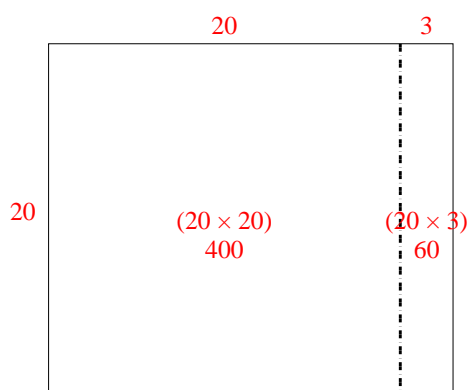
4) $20 \times 28 =$



5) $20 \times 29 =$



6) $20 \times 23 =$



Risposte

1. **520**

2. **420**

3. **440**

4. **560**

5. **580**

6. **460**