




Usa le griglie fornite per risolvere ogni operazione.


1) $30 \times 32 =$




2) $20 \times 23 =$




3) $25 \times 20 =$




4) $26 \times 20 =$



5) $22 \times 20 =$



6) $20 \times 21 =$



Risposte

1. _____

2. _____

3. _____

4. _____

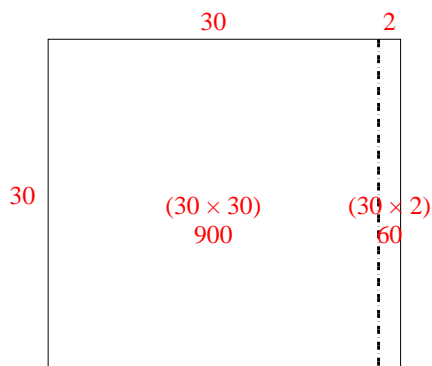
5. _____

6. _____

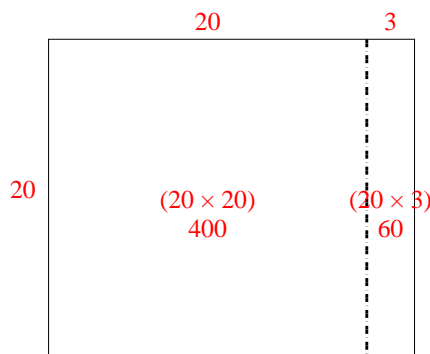


Usa le griglie fornite per risolvere ogni operazione.

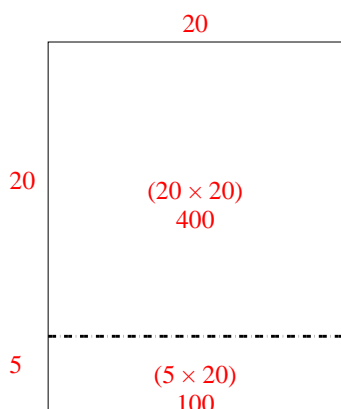
1) $30 \times 32 =$



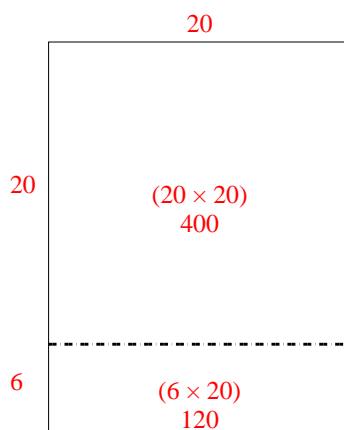
2) $20 \times 23 =$



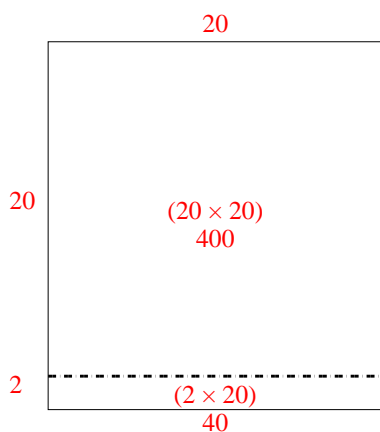
3) $25 \times 20 =$



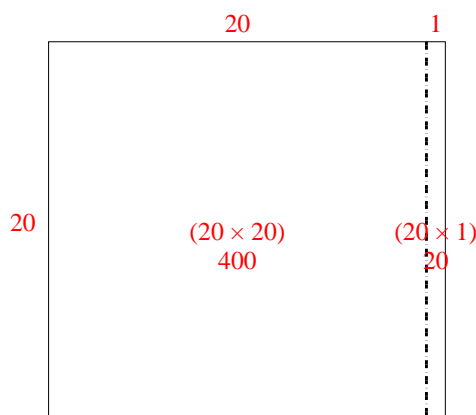
4) $26 \times 20 =$



5) $22 \times 20 =$



6) $20 \times 21 =$



Risposte

1. 960

2. 460

3. 500

4. 520

5. 440

6. 420