



Usa le griglie fornite per risolvere ogni operazione.

1) $43 \times 30 =$

2) $32 \times 30 =$

3) $20 \times 23 =$

4) $25 \times 20 =$

5) $20 \times 24 =$

6) $22 \times 20 =$

Risposte

1. _____

2. _____

3. _____

4. _____

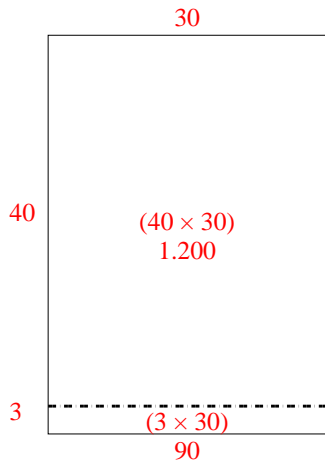
5. _____

6. _____

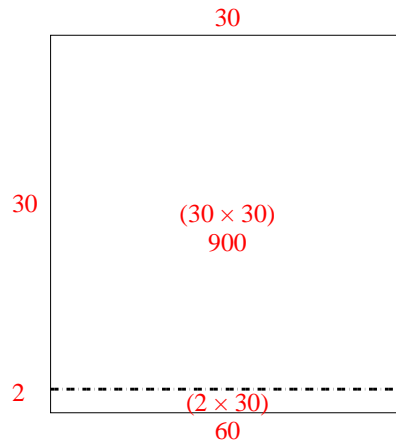


Usa le griglie fornite per risolvere ogni operazione.

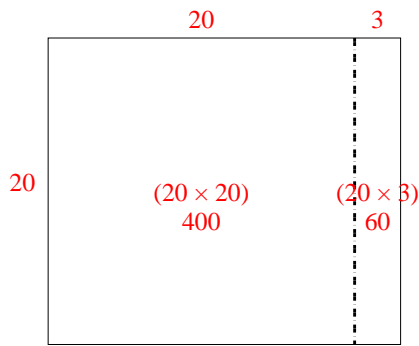
1) $43 \times 30 =$



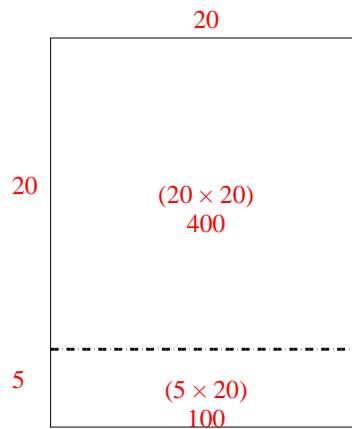
2) $32 \times 30 =$



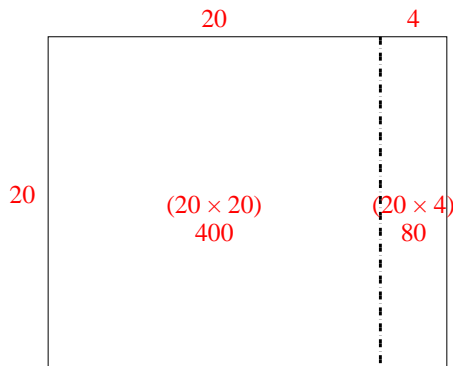
3) $20 \times 23 =$



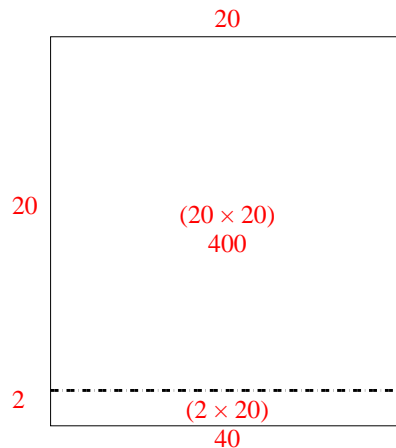
4) $25 \times 20 =$



5) $20 \times 24 =$



6) $22 \times 20 =$



Risposte

1. 1.290
2. 960
3. 460
4. 500
5. 480
6. 440