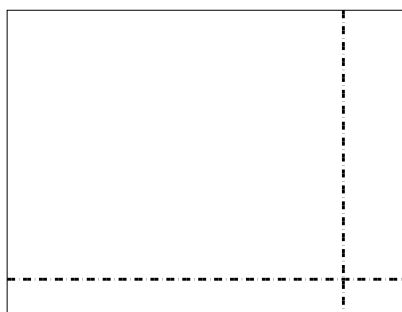


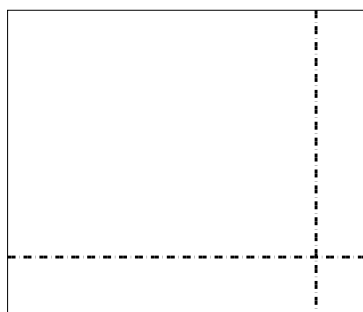


Usa le griglie per risolvere ogni operazione.


1) $45 \times 59 =$




2) $49 \times 59 =$




3) $39 \times 16 =$




4) $37 \times 13 =$



5) $37 \times 48 =$



6) $37 \times 14 =$

**Risposte**

1. _____

2. _____

3. _____

4. _____

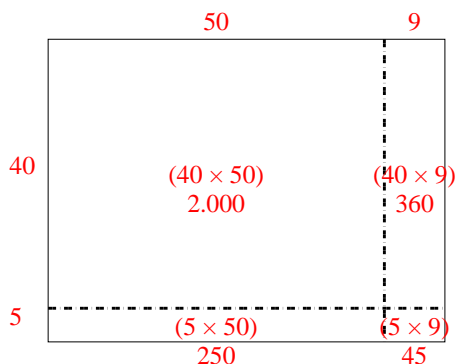
5. _____

6. _____

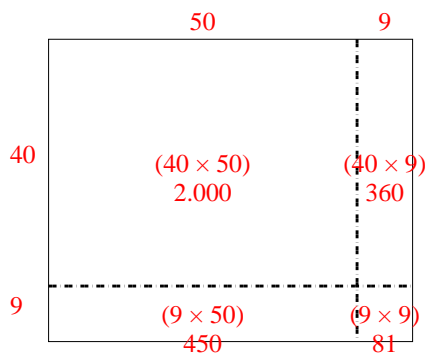


Usa le griglie per risolvere ogni operazione.

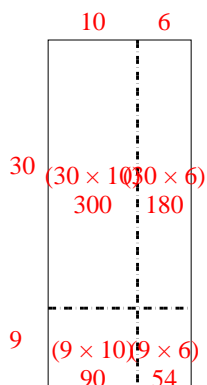
1) $45 \times 59 =$



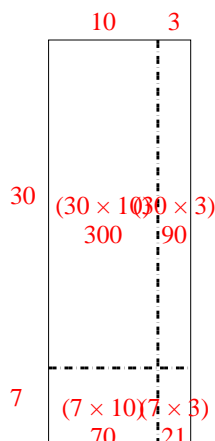
2) $49 \times 59 =$



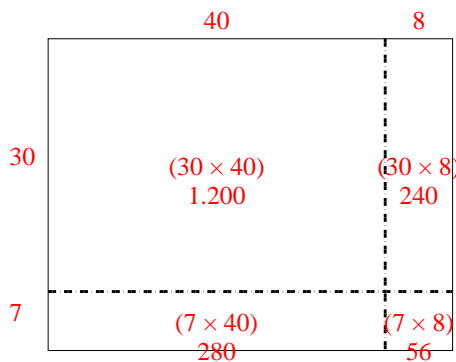
3) $39 \times 16 =$



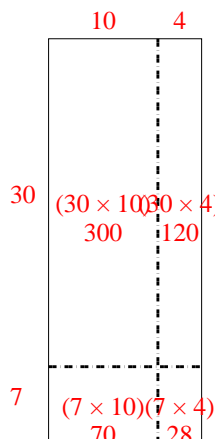
4) $37 \times 13 =$



5) $37 \times 48 =$



6) $37 \times 14 =$



Risposte

1. 2.655

2. 2.891

3. 624

4. 481

5. 1.776

6. 518