





Usa le griglie fornite per calcolare i risultati.


1) $10 \times 26 =$




2) $10 \times 19 =$




3) $10 \times 15 =$




4) $10 \times 18 =$



5) $13 \times 10 =$



6) $12 \times 10 =$



Risposte

1. _____

2. _____

3. _____

4. _____

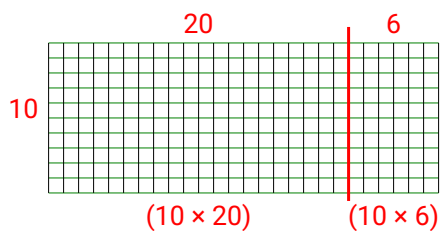
5. _____

6. _____

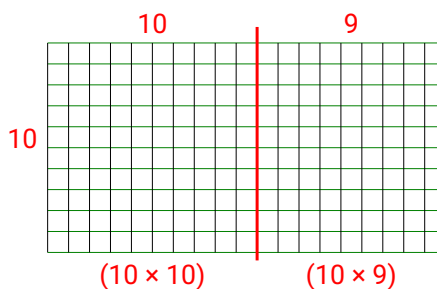


Usa le griglie fornite per calcolare i risultati.

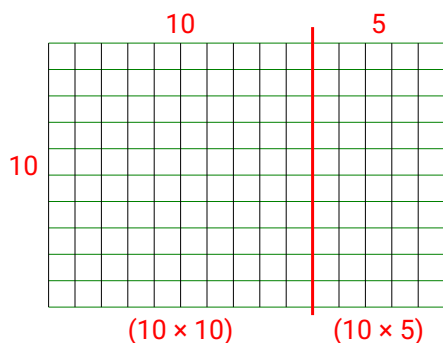
1) $10 \times 26 =$



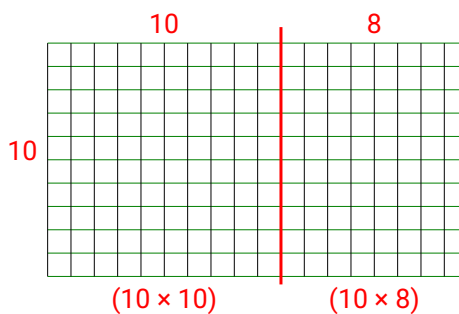
2) $10 \times 19 =$



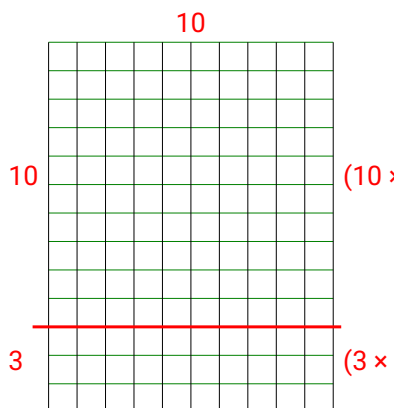
3) $10 \times 15 =$



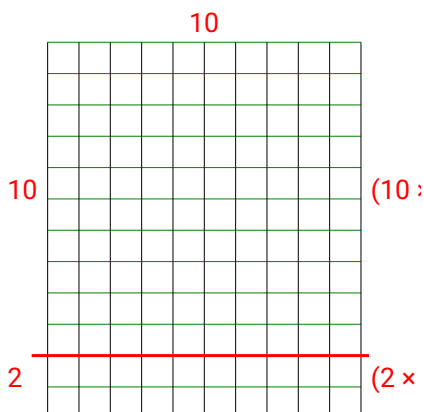
4) $10 \times 18 =$



5) $13 \times 10 =$



6) $12 \times 10 =$

**Risposte**

1. **260**
2. **190**
3. **150**
4. **180**
5. **130**
6. **120**