

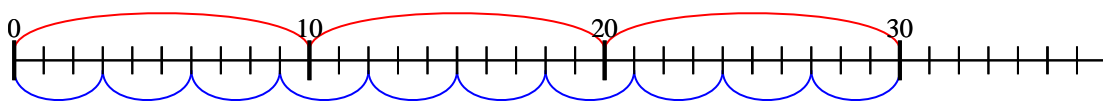




Usa la linea numerata per risolvere ogni operazione.

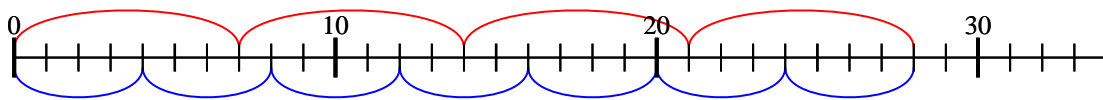
1)  $3 \times 10 =$

$10 \times 3 =$



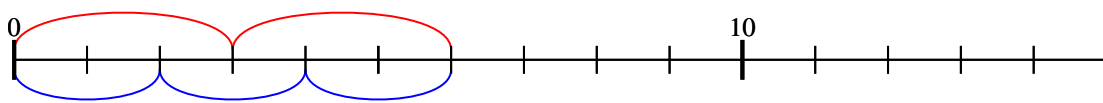
2)  $4 \times 7 =$

$7 \times 4 =$



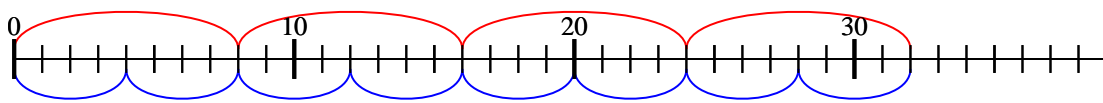
3)  $2 \times 3 =$

$3 \times 2 =$



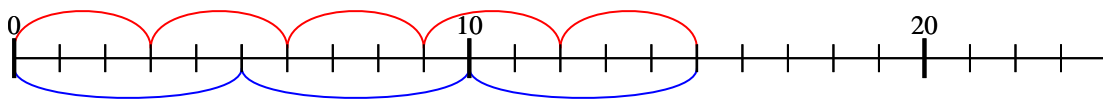
4)  $4 \times 8 =$

$8 \times 4 =$



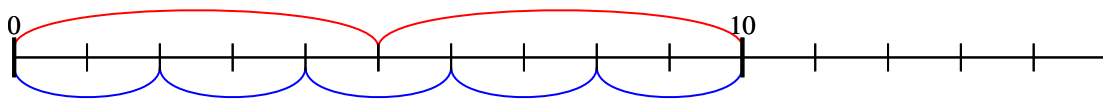
5)  $5 \times 3 =$

$3 \times 5 =$



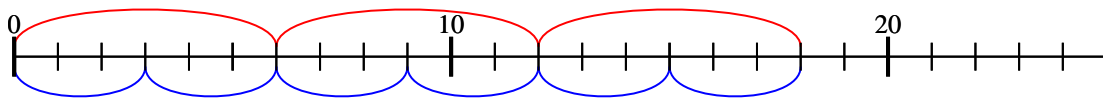
6)  $2 \times 5 =$

$5 \times 2 =$



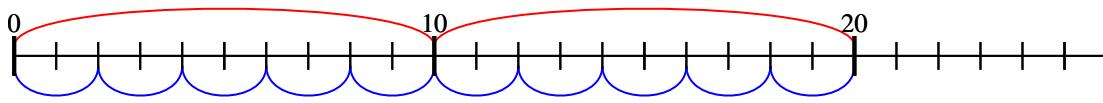
7)  $3 \times 6 =$

$6 \times 3 =$



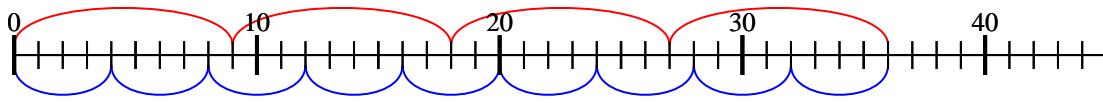
8)  $2 \times 10 =$

$10 \times 2 =$



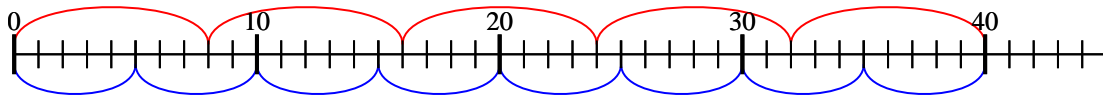
9)  $4 \times 9 =$

$9 \times 4 =$



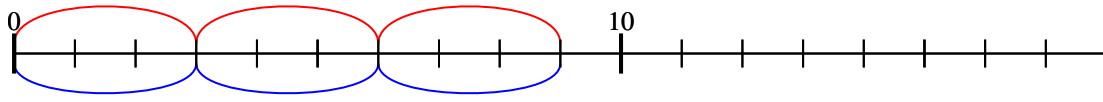
10)  $5 \times 8 =$

$8 \times 5 =$



11)  $3 \times 3 =$

$3 \times 3 =$



**Risposte**

1. 30

2. 28

3. 6

4. 32

5. 15

6. 10

7. 18

8. 20

9. 36

10. 40

11. 9