



Contare il numero di quarti (25¢), dimes(10¢), nickels(5¢) e penny(1¢).

Risposte



Es. 2 3 2 2



1. _____



2. _____



3. _____



4. _____



5. _____



6. _____



7. _____



8. _____



9. _____



10. _____



Contare il numero di quarti (25¢), dimes(10¢), nickels(5¢) e penny(1¢).

Es)

1)

2)

3)

4)

5)

6)

7)

8)

9)

10)

Risposte

Es.	<u>2</u>	<u>3</u>	<u>2</u>	<u>2</u>
1.	<u>3</u>	<u>2</u>	<u>1</u>	<u>3</u>
2.	<u>2</u>	<u>2</u>	<u>2</u>	<u>3</u>
3.	<u>3</u>	<u>2</u>	<u>2</u>	<u>2</u>
4.	<u>2</u>	<u>2</u>	<u>2</u>	<u>3</u>
5.	<u>2</u>	<u>2</u>	<u>3</u>	<u>2</u>
6.	<u>2</u>	<u>2</u>	<u>4</u>	<u>1</u>
7.	<u>1</u>	<u>4</u>	<u>2</u>	<u>2</u>
8.	<u>3</u>	<u>1</u>	<u>2</u>	<u>3</u>
9.	<u>3</u>	<u>2</u>	<u>2</u>	<u>2</u>
10.	<u>1</u>	<u>4</u>	<u>3</u>	<u>1</u>



Contare il numero di quarti (25¢), dimes(10¢), nickels(5¢) e penny(1¢).

Es)

1)

2)

3)

4)

5)

6)

7)

8)

9)

10)

Risposte

Es. 1 1 4 3

1. _____

2. _____

3. _____

4. _____

5. _____

6. _____

7. _____

8. _____

9. _____

10. _____



Contare il numero di quarti (25¢), dimes(10¢), nickels(5¢) e penny(1¢).

Es)

1)

2)

3)

4)

5)

6)

7)

8)

9)

10)

Risposte

Es.	<u>1</u>	<u>1</u>	<u>4</u>	<u>3</u>
1.	<u>3</u>	<u>2</u>	<u>1</u>	<u>3</u>
2.	<u>3</u>	<u>2</u>	<u>2</u>	<u>2</u>
3.	<u>2</u>	<u>2</u>	<u>2</u>	<u>3</u>
4.	<u>1</u>	<u>3</u>	<u>3</u>	<u>2</u>
5.	<u>1</u>	<u>2</u>	<u>2</u>	<u>4</u>
6.	<u>2</u>	<u>2</u>	<u>3</u>	<u>2</u>
7.	<u>4</u>	<u>2</u>	<u>2</u>	<u>1</u>
8.	<u>3</u>	<u>3</u>	<u>1</u>	<u>2</u>
9.	<u>1</u>	<u>2</u>	<u>4</u>	<u>2</u>
10.	<u>1</u>	<u>2</u>	<u>3</u>	<u>3</u>



Contare il numero di quarti (25¢), dimes(10¢), nickels(5¢) e penny(1¢).

Es) 

1) 

2) 

3) 

4) 

5) 

6) 

7) 

8) 

9) 

10) 

Risposte

Es. 3 2 2 2

1. _____

2. _____

3. _____

4. _____

5. _____

6. _____

7. _____


8. _____


9. _____


10. _____





Contare il numero di quarti (25¢), dimes(10¢), nickels(5¢) e penny(1¢).


Es) 


1) 


2) 


3) 


4) 

5) 

6) 

7) 

8) 

9) 

10) 

Risposte

Es.	<u>3</u>	<u>2</u>	<u>2</u>	<u>2</u>
1.	<u>2</u>	<u>2</u>	<u>3</u>	<u>2</u>
2.	<u>2</u>	<u>2</u>	<u>2</u>	<u>3</u>
3.	<u>2</u>	<u>5</u>	<u>1</u>	<u>1</u>
4.	<u>2</u>	<u>3</u>	<u>2</u>	<u>2</u>
5.	<u>2</u>	<u>2</u>	<u>2</u>	<u>3</u>
6.	<u>2</u>	<u>4</u>	<u>1</u>	<u>2</u>
7.	<u>3</u>	<u>1</u>	<u>1</u>	<u>4</u>
8.	<u>3</u>	<u>2</u>	<u>2</u>	<u>2</u>
9.	<u>3</u>	<u>2</u>	<u>1</u>	<u>3</u>
10.	<u>1</u>	<u>2</u>	<u>2</u>	<u>4</u>



Contare il numero di quarti (25¢), dimes(10¢), nickels(5¢) e penny(1¢).

Es)

1)

2)

3)

4)

5)

6)

7)

8)

9)

10)

Risposte

Es. 3 2 1 3

1. _____

2. _____

3. _____

4. _____

5. _____

6. _____

7. _____

8. _____

9. _____

10. _____



Contare il numero di quarti (25¢), dimes(10¢), nickels(5¢) e penny(1¢).

Es)

1)

2)

3)

4)

5)

6)

7)

8)

9)

10)


Risposte


Es.	<u>3</u>	<u>2</u>	<u>1</u>	<u>3</u>
1.	<u>2</u>	<u>3</u>	<u>3</u>	<u>1</u>
2.	<u>1</u>	<u>3</u>	<u>3</u>	<u>2</u>
3.	<u>2</u>	<u>2</u>	<u>2</u>	<u>3</u>
4.	<u>3</u>	<u>2</u>	<u>2</u>	<u>2</u>
5.	<u>2</u>	<u>4</u>	<u>1</u>	<u>2</u>
6.	<u>2</u>	<u>2</u>	<u>3</u>	<u>2</u>
7.	<u>2</u>	<u>2</u>	<u>3</u>	<u>2</u>
8.	<u>2</u>	<u>1</u>	<u>3</u>	<u>3</u>
9.	<u>2</u>	<u>4</u>	<u>1</u>	<u>2</u>
10.	<u>1</u>	<u>3</u>	<u>1</u>	<u>4</u>





Contare il numero di quarti (25¢), dimes(10¢), nickels(5¢) e penny(1¢).


Risposte


Es) 


1) 


2) 


3) 


4) 


5) 

6) 

7) 

8) 

9) 

10) 

Es. 2 2 2 3

1. _____

2. _____

3. _____

4. _____

5. _____

6. _____

7. _____


8. _____


9. _____


10. _____





Contare il numero di quarti (25¢), dimes(10¢), nickels(5¢) e penny(1¢).


Es) 


1) 


2) 

3) 

4) 

5) 

6) 

7) 

8)

9)

10)

Risposte

Es.	<u>2</u>	<u>2</u>	<u>2</u>	<u>3</u>
1.	<u>5</u>	<u>1</u>	<u>1</u>	<u>2</u>
2.	<u>2</u>	<u>2</u>	<u>2</u>	<u>3</u>
3.	<u>1</u>	<u>5</u>	<u>2</u>	<u>1</u>
4.	<u>3</u>	<u>1</u>	<u>2</u>	<u>3</u>
5.	<u>3</u>	<u>2</u>	<u>2</u>	<u>2</u>
6.	<u>3</u>	<u>2</u>	<u>2</u>	<u>2</u>
7.	<u>2</u>	<u>2</u>	<u>3</u>	<u>2</u>
8.	<u>2</u>	<u>3</u>	<u>2</u>	<u>2</u>
9.	<u>2</u>	<u>3</u>	<u>2</u>	<u>2</u>
10.	<u>1</u>	<u>4</u>	<u>3</u>	<u>1</u>




Contare il numero di quarti (25¢), dimes(10¢), nickels(5¢) e penny(1¢).

Es) 

1) 

2) 

3) 

4) 

5) 

6) 

7) 

8) 

9) 

10) 

Risposte

Es. 2 2 3 2

1. _____

2. _____

3. _____

4. _____

5. _____

6. _____

7. _____


8. _____

9. _____

10. _____



Contare il numero di quarti (25¢), dimes(10¢), nickels(5¢) e penny(1¢).

Es) 

1) 

2) 

3) 

4) 

5) 

6) 

7) 

8) 

9) 


10) 


Risposte


Es.	<u>2</u>	<u>2</u>	<u>3</u>	<u>2</u>
1.	<u>2</u>	<u>2</u>	<u>3</u>	<u>2</u>
2.	<u>3</u>	<u>3</u>	<u>2</u>	<u>1</u>
3.	<u>2</u>	<u>2</u>	<u>2</u>	<u>3</u>
4.	<u>3</u>	<u>4</u>	<u>1</u>	<u>1</u>
5.	<u>4</u>	<u>2</u>	<u>1</u>	<u>2</u>
6.	<u>1</u>	<u>2</u>	<u>3</u>	<u>3</u>
7.	<u>2</u>	<u>3</u>	<u>1</u>	<u>3</u>
8.	<u>2</u>	<u>2</u>	<u>3</u>	<u>2</u>
9.	<u>2</u>	<u>2</u>	<u>2</u>	<u>3</u>
10.	<u>2</u>	<u>2</u>	<u>2</u>	<u>3</u>





Contare il numero di quarti (25¢), dimes(10¢), nickels(5¢) e penny(1¢).


Es) 


1) 


2) 

3) 

4) 

5) 

6) 

7) 

8)

9)

10)

Risposte

Es. 2 1 2 4

1. _____

2. _____

3. _____

4. _____

5. _____

6. _____

7. _____

8. _____

9. _____

10. _____



Contare il numero di quarti (25¢), dimes(10¢), nickels(5¢) e penny(1¢).

Es)

1)

2)

3)

4)

5)

6)

7)

8)

9)

10)

Risposte

Es.	<u>2</u>	<u>1</u>	<u>2</u>	<u>4</u>
1.	<u>2</u>	<u>1</u>	<u>3</u>	<u>3</u>
2.	<u>1</u>	<u>2</u>	<u>3</u>	<u>3</u>
3.	<u>3</u>	<u>4</u>	<u>1</u>	<u>1</u>
4.	<u>2</u>	<u>2</u>	<u>3</u>	<u>2</u>
5.	<u>3</u>	<u>1</u>	<u>2</u>	<u>3</u>
6.	<u>1</u>	<u>4</u>	<u>2</u>	<u>2</u>
7.	<u>3</u>	<u>2</u>	<u>2</u>	<u>2</u>
8.	<u>2</u>	<u>3</u>	<u>1</u>	<u>3</u>
9.	<u>2</u>	<u>3</u>	<u>3</u>	<u>1</u>
10.	<u>1</u>	<u>3</u>	<u>4</u>	<u>1</u>



Contare il numero di quarti (25¢), dimes(10¢), nickels(5¢) e penny(1¢).

Es)

1)

2)

3)

4)

5)

6)

7)

8)

9)

10)

Risposte

Es. 1 2 3 3

1. _____

2. _____

3. _____

4. _____

5. _____

6. _____

7. _____

8. _____

9. _____

10. _____



Contare il numero di quarti (25¢), dimes(10¢), nickels(5¢) e penny(1¢).

Es)

1)

2)

3)

4)

5)

6)

7)

8)

9)

10)

Risposte

Es.	<u>1</u>	<u>2</u>	<u>3</u>	<u>3</u>
1.	<u>3</u>	<u>1</u>	<u>3</u>	<u>2</u>
2.	<u>2</u>	<u>2</u>	<u>2</u>	<u>3</u>
3.	<u>2</u>	<u>3</u>	<u>1</u>	<u>3</u>
4.	<u>2</u>	<u>3</u>	<u>2</u>	<u>2</u>
5.	<u>2</u>	<u>3</u>	<u>2</u>	<u>2</u>
6.	<u>3</u>	<u>3</u>	<u>1</u>	<u>2</u>
7.	<u>2</u>	<u>3</u>	<u>2</u>	<u>2</u>
8.	<u>2</u>	<u>2</u>	<u>3</u>	<u>2</u>
9.	<u>2</u>	<u>3</u>	<u>2</u>	<u>2</u>
10.	<u>2</u>	<u>2</u>	<u>3</u>	<u>2</u>



Contare il numero di quarti (25¢), dimes(10¢), nickels(5¢) e penny(1¢).

Es)

1)

2)

3)

4)

5)

6)

7)

8)

9)

10)

Risposte

Es.	<u>1</u>	<u>2</u>	<u>3</u>	<u>3</u>
1.	_____	_____	_____	_____
2.	_____	_____	_____	_____
3.	_____	_____	_____	_____
4.	_____	_____	_____	_____
5.	_____	_____	_____	_____
6.	_____	_____	_____	_____
7.	_____	_____	_____	_____
8.	_____	_____	_____	_____
9.	_____	_____	_____	_____
10.	_____	_____	_____	_____



Contare il numero di quarti (25¢), dimes(10¢), nickels(5¢) e penny(1¢).

Es)

1)

2)

3)

4)

5)

6)

7)

8)

9)

10)

Risposte

Es.	<u>1</u>	<u>2</u>	<u>3</u>	<u>3</u>
1.	<u>2</u>	<u>2</u>	<u>3</u>	<u>2</u>
2.	<u>2</u>	<u>2</u>	<u>2</u>	<u>3</u>
3.	<u>3</u>	<u>3</u>	<u>1</u>	<u>2</u>
4.	<u>2</u>	<u>2</u>	<u>3</u>	<u>2</u>
5.	<u>1</u>	<u>3</u>	<u>3</u>	<u>2</u>
6.	<u>2</u>	<u>1</u>	<u>3</u>	<u>3</u>
7.	<u>3</u>	<u>3</u>	<u>2</u>	<u>1</u>
8.	<u>4</u>	<u>2</u>	<u>2</u>	<u>1</u>
9.	<u>2</u>	<u>2</u>	<u>3</u>	<u>2</u>
10.	<u>1</u>	<u>5</u>	<u>1</u>	<u>2</u>



Contare il numero di quarti (25¢), dimes(10¢), nickels(5¢) e penny(1¢).

Es)

1)

2)

3)

4)

5)

6)

7)

8)

9)

10)

Risposte

Es. 3 1 3 2

1. _____

2. _____

3. _____

4. _____

5. _____

6. _____

7. _____

8. _____

9. _____

10. _____



Contare il numero di quarti (25¢), dimes(10¢), nickels(5¢) e penny(1¢).

Es)

1)

2)

3)

4)

5)

6)

7)

8)

9)

10)

Risposte

Es.	<u>3</u>	<u>1</u>	<u>3</u>	<u>2</u>
1.	<u>2</u>	<u>2</u>	<u>2</u>	<u>3</u>
2.	<u>2</u>	<u>3</u>	<u>2</u>	<u>2</u>
3.	<u>1</u>	<u>4</u>	<u>2</u>	<u>2</u>
4.	<u>1</u>	<u>3</u>	<u>1</u>	<u>4</u>
5.	<u>1</u>	<u>3</u>	<u>3</u>	<u>2</u>
6.	<u>1</u>	<u>4</u>	<u>2</u>	<u>2</u>
7.	<u>3</u>	<u>3</u>	<u>2</u>	<u>1</u>
8.	<u>3</u>	<u>3</u>	<u>2</u>	<u>1</u>
9.	<u>2</u>	<u>3</u>	<u>2</u>	<u>2</u>
10.	<u>2</u>	<u>2</u>	<u>3</u>	<u>2</u>