



**Indica quale lettera rappresenta la lunghezza/altezza corretta**

**Risposte**

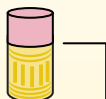
**Milímetro (mm)**

Un milímetro equivale al grosor de una tarjeta de crédito.



**Centímetro (cm)**

10 mm = 1 cm.  
La parte metálica de un lápiz mide aproximadamente 1 cm.  
Una regla mide unos 30 centímetros.



**Metro (m)**

100 cm = 1 m  
Desde el suelo hasta la perilla de una puerta hay aproximadamente 1 metro.




**Kilómetro (km)**

1,000 m = 1 km  
La mayoría de las carreteras principales tienen al menos un kilómetro de largo.



1. \_\_\_\_\_
2. \_\_\_\_\_
3. \_\_\_\_\_
4. \_\_\_\_\_
5. \_\_\_\_\_
6. \_\_\_\_\_
7. \_\_\_\_\_
8. \_\_\_\_\_
9. \_\_\_\_\_

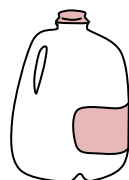
1)



Carta per taccuini

- A. 60 Centimetri
- B. 15 Centimetri
- C. 1 Metro
- D. 25 Centimetri

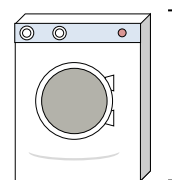
2)



Gallone di latte

- A. 3 Metri
- B. 20 Centimetri
- C. 10 millimeters
- D. 8 Centimetri

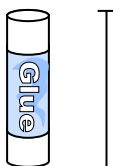
3)



Lavatrice

- A. 10 Centimetri
- B. 30 Centimetri
- C. 1 Metro
- D. 2 Metri


4)



Colla stick

- A. 30 Centimetri
- B. 10 Centimetri
- C. 6 kilometers
- D. 25 Centimetri

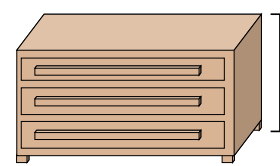
5)



Elefante

- A. 45 Centimetri
- B. 4 Metri
- C. 150 millimeters
- D. 2 kilometers

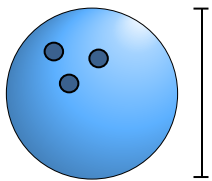
6)



Costumista

- A. 45 Centimetri
- B. 30 Centimetri
- C. 90 Centimetri
- D. 3 Metri

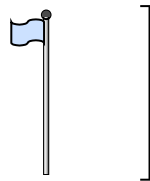
7)



Altezza della palla da bowling

- A. 10 Centimetri
- B. 1 Metro
- C. 25 Centimetri
- D. 305 Centimetri

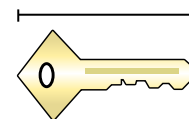
8)



Asta della bandiera

- A. 300 Centimetri
- B. 9 Metri
- C. 2 Metri
- D. 2 kilometers

9)



Chiave

- A. 2 Metri
- B. 5 Centimetri
- C. 15 Centimetri
- D. 150 Centimetri



## Indica quale lettera rappresenta la lunghezza/altezza corretta

## Risposte

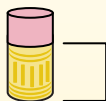
**Milímetro (mm)**

Un milímetro equivale al grosor de una tarjeta de crédito.

**Centímetro (cm)**

10 mm = 1 cm.

La parte metálica de un lápiz mide aproximadamente 1 cm. Una regla mide unos 30 centímetros.

**Metro (m)**

100 cm = 1 m

Desde el suelo hasta la perilla de una puerta hay aproximadamente 1 metro.


**Kilómetro (km)**

1,000 m = 1 km

La mayoría de las carreteras principales tienen al menos un kilómetro de largo.



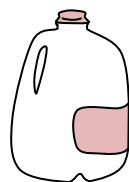
1)



Carta per taccuini

- A. 60 Centimetri
- B. 15 Centimetri
- C. 1 Metro
- D. 25 Centimetri

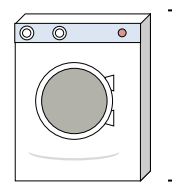
2)



Gallone di latte

- A. 3 Metri
- B. 20 Centimetri
- C. 10 millimeters
- D. 8 Centimetri

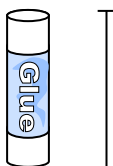
3)



Lavatrice

- A. 10 Centimetri
- B. 30 Centimetri
- C. 1 Metro
- D. 2 Metri


4)



Colla stick

- A. 30 Centimetri
- B. 10 Centimetri
- C. 6 kilometers
- D. 25 Centimetri

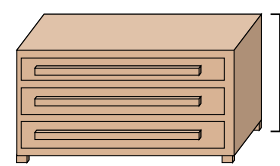
5)



Elefante

- A. 45 Centimetri
- B. 4 Metri
- C. 150 millimeters
- D. 2 kilometers

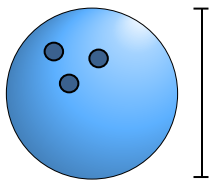
6)



Costumista

- A. 45 Centimetri
- B. 30 Centimetri
- C. 90 Centimetri
- D. 3 Metri

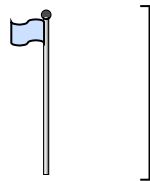
7)



Altezza della palla da bowling

- A. 10 Centimetri
- B. 1 Metro
- C. 25 Centimetri
- D. 305 Centimetri

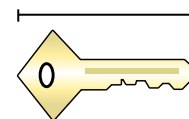
8)



Asta della bandiera

- A. 300 Centimetri
- B. 9 Metri
- C. 2 Metri
- D. 2 kilometers

9)



Chiave

- A. 2 Metri
- B. 5 Centimetri
- C. 15 Centimetri
- D. 150 Centimetri

1. **D**2. **B**3. **C**4. **B**5. **B**6. **C**7. **C**8. **B**9. **B**