



Misura la lunghezza e l'altezza di ogni rettangolo in pollici e in centimetri

Es)



**Risposte**

Es. 2 1/2 1 6,4 2,5


1. \_\_\_\_\_

2. \_\_\_\_\_


3. \_\_\_\_\_

4. \_\_\_\_\_


1)



2)



3)



4)






Misura la lunghezza e l'altezza di ogni rettangolo in pollici e in centimetri


Es)




1)



2)



3)



4)

**Risposte**Es.  $2\frac{1}{2}$  1 6,4 2,51.  $4\frac{1}{2}$   $1\frac{1}{2}$  11,4 3,82. 3 1 7,6 2,53. 5  $1\frac{1}{2}$  12,7 3,84. 2  $0\frac{1}{2}$  5,1 1,3