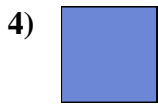




Misura la lunghezza di ogni barra sia in centimetri che in pollici.



Risposte

Es. 4 10 - 11

1. _____

2. _____

3. _____

4. _____

5. _____

6. _____



7. _____

8. _____

9. _____



Misura la lunghezza di ogni barra sia in centimetri che in pollici.



Risposte

Es.	<u>4</u>	<u>10 - 11</u>
1.	<u>2</u>	<u>5 - 6</u>
2.	<u>3</u>	<u>7 - 8</u>
3.	<u>3 1/2</u>	<u>8 - 9</u>
4.	<u>0 1/2</u>	<u>1 - 2</u>
5.	<u>1 1/2</u>	<u>3 - 4</u>
6.	<u>2 1/2</u>	<u>6 - 7</u>
7.	<u>5</u>	<u>12 - 13</u>
8.	<u>4 1/2</u>	<u>11 - 12</u>
9.	<u>5 1/2</u>	<u>13 - 14</u>