


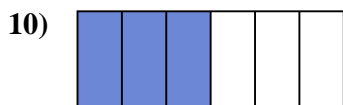

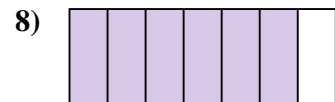
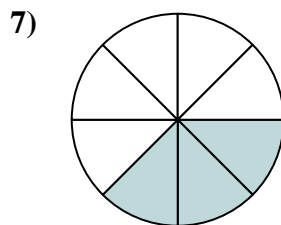
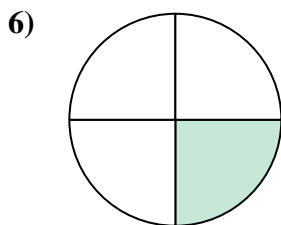
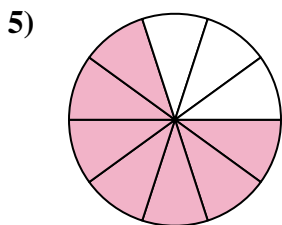

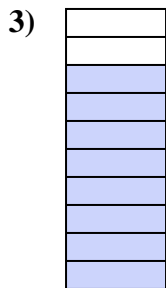





Determina se la parte colorata è 'più', 'meno' o 'uguale' alla metà.



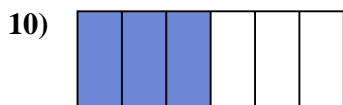

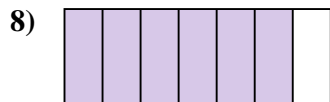
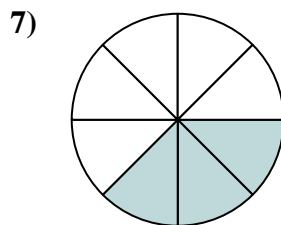
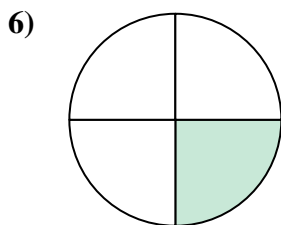
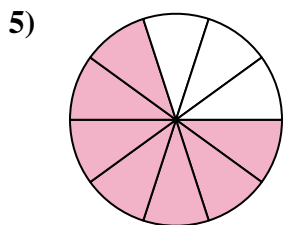

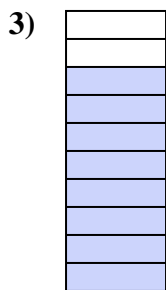

**Risposte**



1. \_\_\_\_\_
2. \_\_\_\_\_
3. \_\_\_\_\_
4. \_\_\_\_\_
5. \_\_\_\_\_
6. \_\_\_\_\_
7. \_\_\_\_\_
8. \_\_\_\_\_
9. \_\_\_\_\_
10. \_\_\_\_\_
11. \_\_\_\_\_
12. \_\_\_\_\_
13. \_\_\_\_\_
14. \_\_\_\_\_
15. \_\_\_\_\_
16. \_\_\_\_\_
17. \_\_\_\_\_
18. \_\_\_\_\_
19. \_\_\_\_\_
20. \_\_\_\_\_



Determina se la parte colorata è 'più', 'meno' o 'uguale' alla metà.



**Risposte**

1. uguale

2. minore

3. maggiore

4. maggiore

5. maggiore

6. minore

7. minore

8. maggiore

9. maggiore

10. uguale

11. minore

12. uguale

13. minore

14. maggiore

15. minore

16. maggiore

17. maggiore

18. minore

19. uguale

20. minore