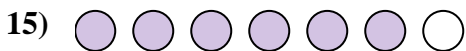
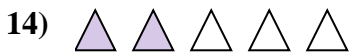
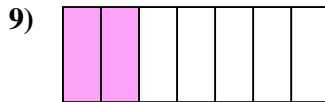

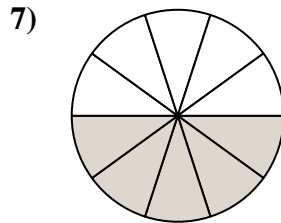
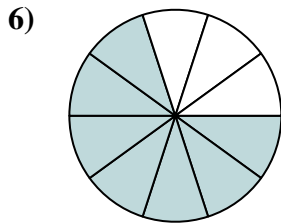
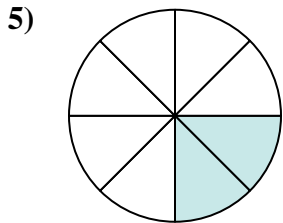

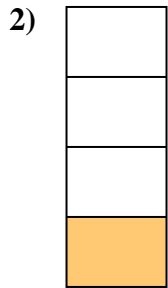





Determina se la parte colorata è 'più', 'meno' o 'uguale' alla metà.

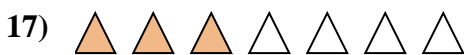
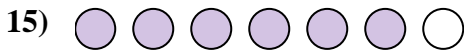
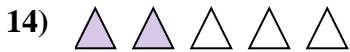

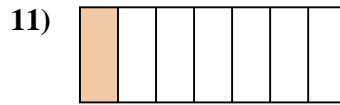
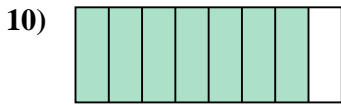
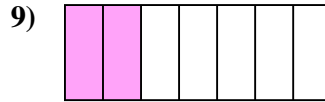
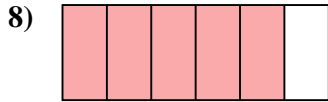
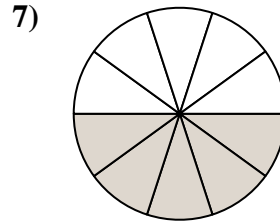
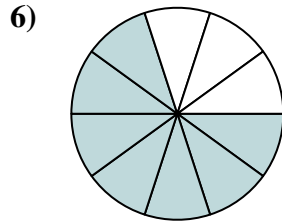
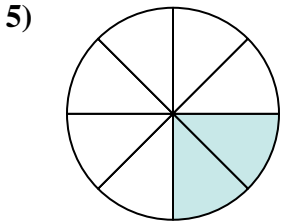






**Risposte**

1. \_\_\_\_\_
2. \_\_\_\_\_
3. \_\_\_\_\_
4. \_\_\_\_\_
5. \_\_\_\_\_
6. \_\_\_\_\_
7. \_\_\_\_\_
8. \_\_\_\_\_
9. \_\_\_\_\_
10. \_\_\_\_\_
11. \_\_\_\_\_
12. \_\_\_\_\_
13. \_\_\_\_\_
14. \_\_\_\_\_
15. \_\_\_\_\_
16. \_\_\_\_\_
17. \_\_\_\_\_
18. \_\_\_\_\_
19. \_\_\_\_\_
20. \_\_\_\_\_



Determina se la parte colorata è 'più', 'meno' o 'uguale' alla metà.



**Risposte**

1. minore

2. minore

3. maggiore

4. maggiore

5. minore

6. maggiore

7. uguale

8. maggiore

9. minore

10. maggiore

11. minore

12. maggiore

13. minore

14. minore

15. maggiore

16. uguale

17. minore

18. minore

19. minore

20. minore