



Determina quale frazione va inserita nel mezzo in modo da rendere vero il confronto.

**Risposte**

1)  $\frac{2}{4}$  < ? <  $\frac{6}{8}$

$\frac{7}{8}$        $\frac{2}{3}$

$\frac{3}{8}$        $\frac{5}{6}$

2)  $\frac{1}{2}$  < ? <  $\frac{3}{4}$

$\frac{1}{3}$        $\frac{7}{8}$

$\frac{1}{6}$        $\frac{4}{6}$

3)  $\frac{2}{4}$  < ? <  $\frac{4}{6}$

$\frac{5}{8}$        $\frac{2}{6}$

$\frac{6}{8}$        $\frac{1}{4}$

4)  $\frac{2}{6}$  < ? <  $\frac{2}{3}$

$\frac{1}{4}$        $\frac{6}{8}$

$\frac{2}{4}$        $\frac{1}{6}$

5)  $\frac{2}{8}$  < ? <  $\frac{4}{6}$

$\frac{3}{6}$        $\frac{1}{8}$

$\frac{6}{8}$        $\frac{7}{8}$

6)  $\frac{3}{6}$  < ? <  $\frac{5}{6}$

$\frac{7}{8}$        $\frac{2}{3}$

$\frac{1}{8}$        $\frac{2}{8}$

7)  $\frac{2}{8}$  < ? <  $\frac{4}{8}$

$\frac{3}{4}$        $\frac{1}{3}$

$\frac{4}{6}$        $\frac{1}{6}$

8)  $\frac{2}{4}$  < ? <  $\frac{2}{3}$

$\frac{6}{8}$        $\frac{5}{8}$

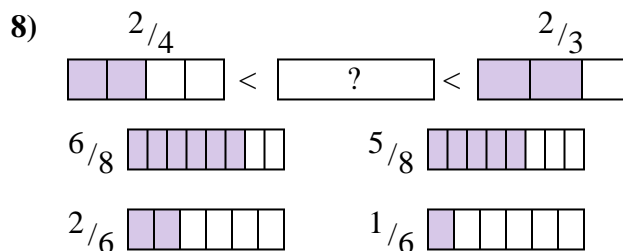
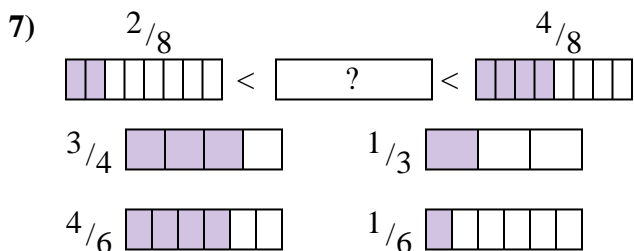
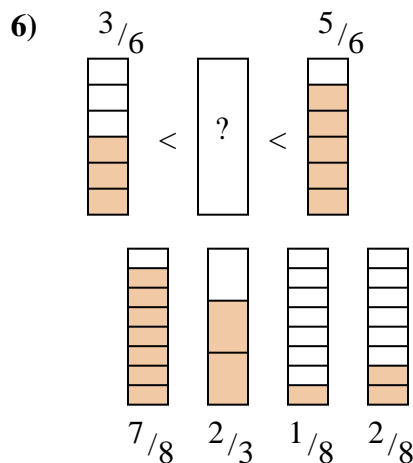
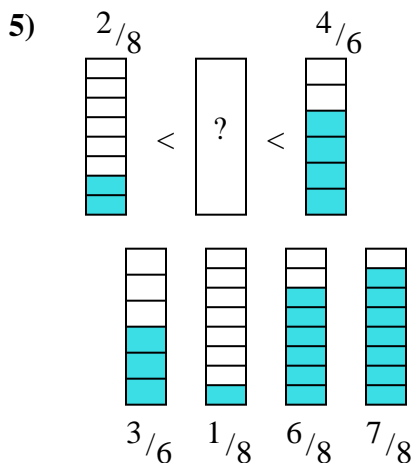
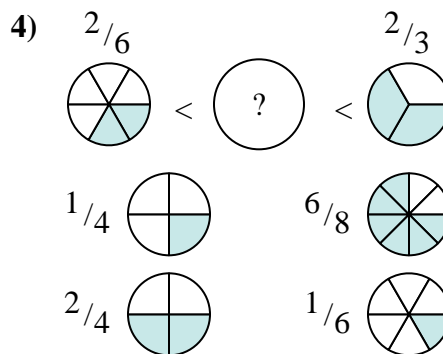
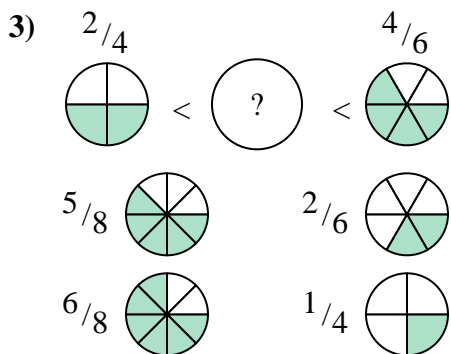
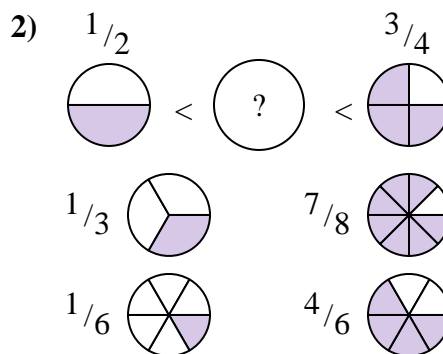
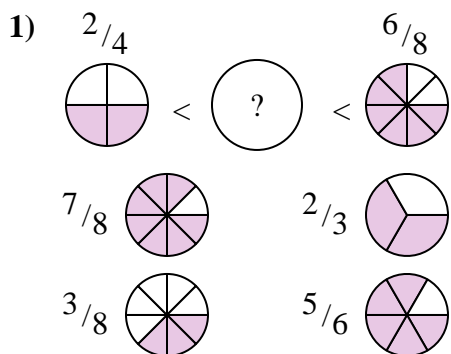
$\frac{2}{6}$        $\frac{1}{6}$

1. \_\_\_\_\_
2. \_\_\_\_\_
3. \_\_\_\_\_
4. \_\_\_\_\_
5. \_\_\_\_\_
6. \_\_\_\_\_
7. \_\_\_\_\_
8. \_\_\_\_\_



Determina quale frazione va inserita nel mezzo in modo da rendere vero il confronto.

**Risposte**



1.  $\frac{2}{3}$
2.  $\frac{4}{6}$
3.  $\frac{5}{8}$
4.  $\frac{2}{4}$
5.  $\frac{3}{6}$
6.  $\frac{2}{3}$
7.  $\frac{1}{3}$
8.  $\frac{5}{8}$