



Usa la linea numerata per risolvere ogni problema. Il primo è un esempio.

**Risposte**

1. \_\_\_\_\_

2. \_\_\_\_\_



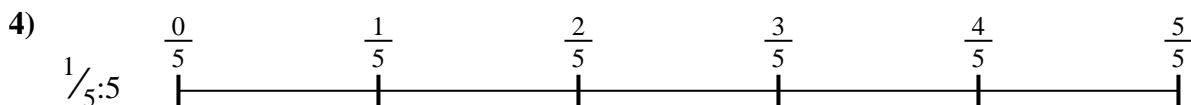
3. \_\_\_\_\_

4. \_\_\_\_\_



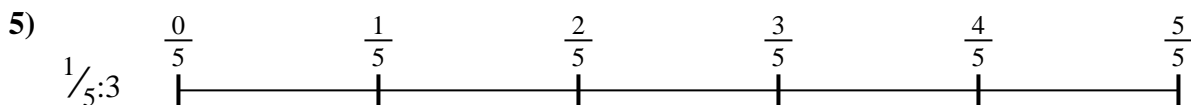
5. \_\_\_\_\_

6. \_\_\_\_\_

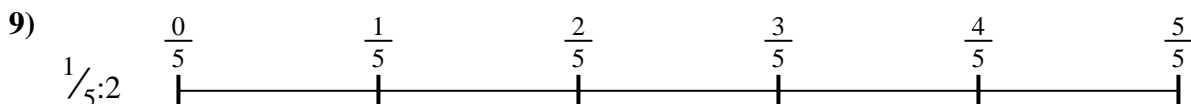
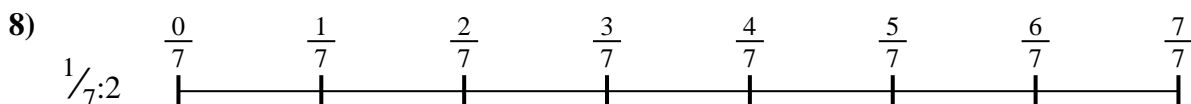




7. \_\_\_\_\_

8. \_\_\_\_\_

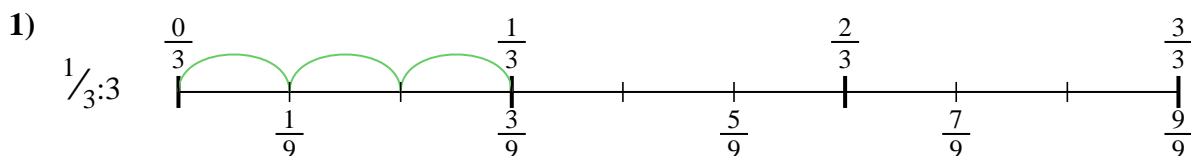


9. \_\_\_\_\_

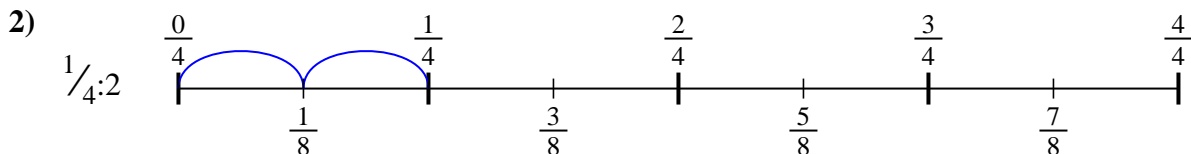




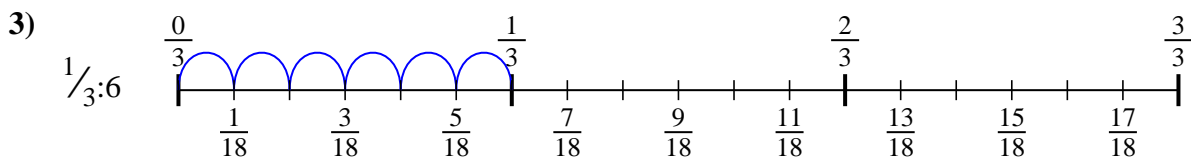
Usa la linea numerata per risolvere ogni problema. Il primo è un esempio.

**Risposte**

1.  $\frac{1}{9}$



2.  $\frac{1}{8}$

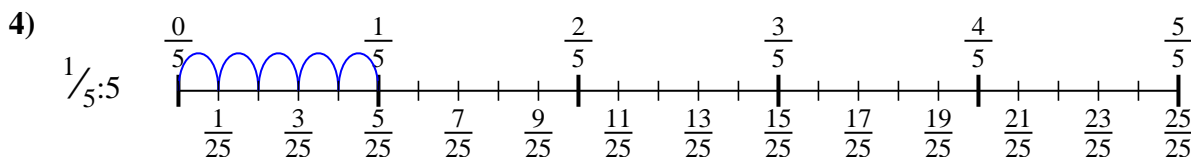


3.  $\frac{1}{18}$

4.  $\frac{1}{25}$

5.  $\frac{1}{15}$

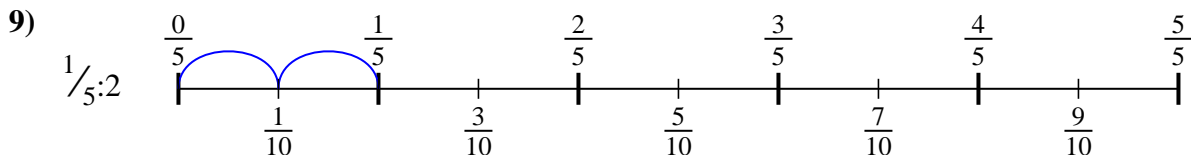
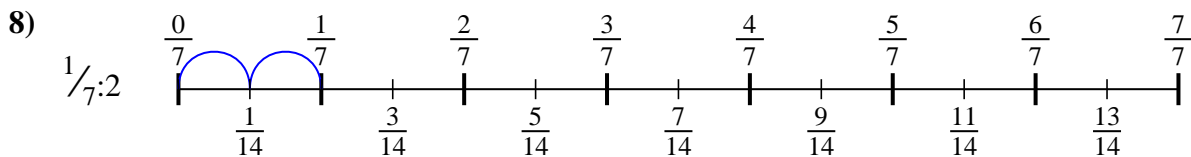
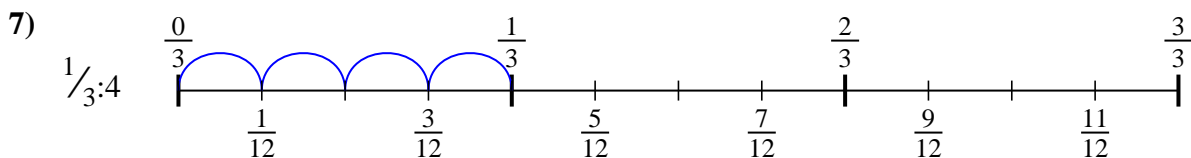
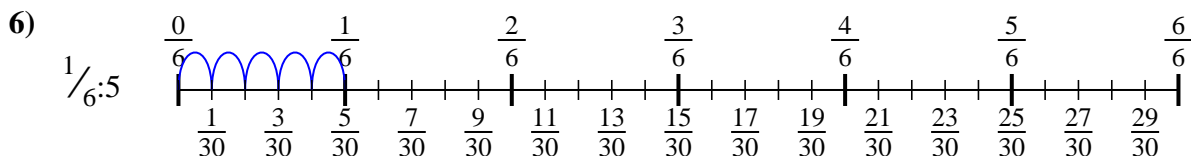
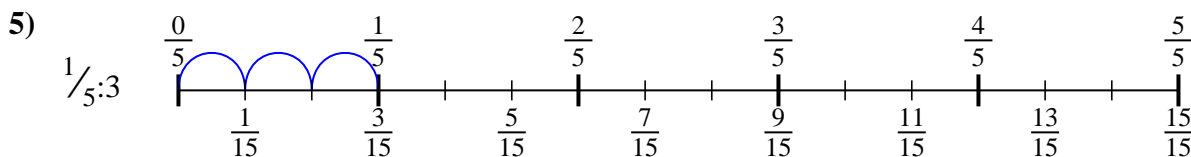
6.  $\frac{1}{30}$



7.  $\frac{1}{12}$

8.  $\frac{1}{14}$

9.  $\frac{1}{10}$





Usa la linea numerata per risolvere ogni problema. Il primo è un esempio.

**Risposte**

$\frac{1}{14}$

$\frac{1}{9}$

$\frac{1}{30}$

$\frac{1}{10}$

$\frac{1}{18}$

$\frac{1}{8}$

$\frac{1}{25}$

$\frac{1}{15}$

$\frac{1}{12}$

1. \_\_\_\_\_

2. \_\_\_\_\_

3. \_\_\_\_\_

4. \_\_\_\_\_

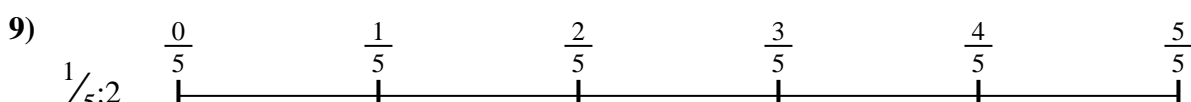
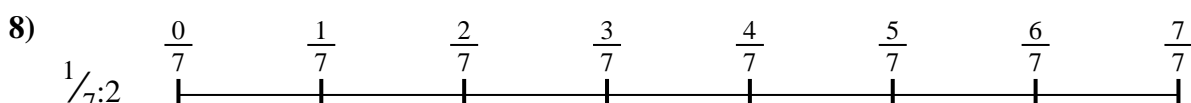
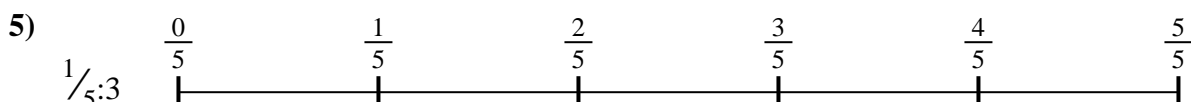
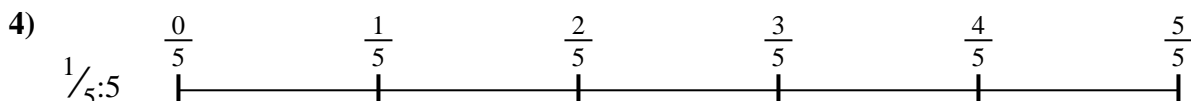
5. \_\_\_\_\_

6. \_\_\_\_\_

7. \_\_\_\_\_

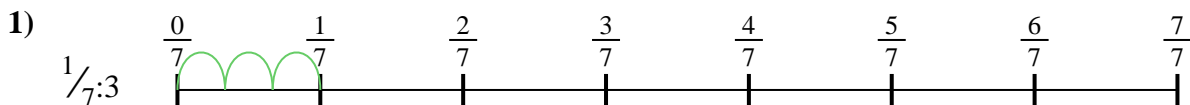
8. \_\_\_\_\_

9. \_\_\_\_\_





Usa la linea numerata per risolvere ogni problema. Il primo è un esempio.

**Risposte**

1. \_\_\_\_\_

2. \_\_\_\_\_



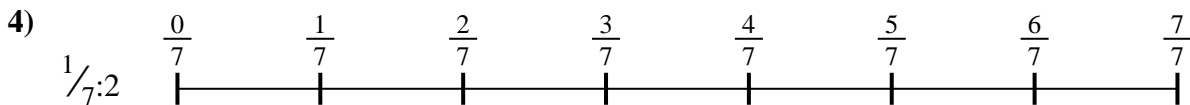
3. \_\_\_\_\_

4. \_\_\_\_\_



5. \_\_\_\_\_

6. \_\_\_\_\_






7. \_\_\_\_\_

8. \_\_\_\_\_

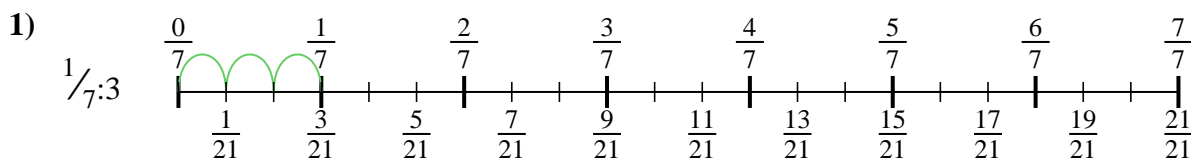


9. \_\_\_\_\_

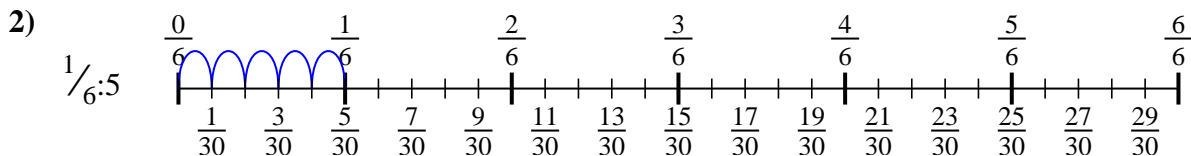




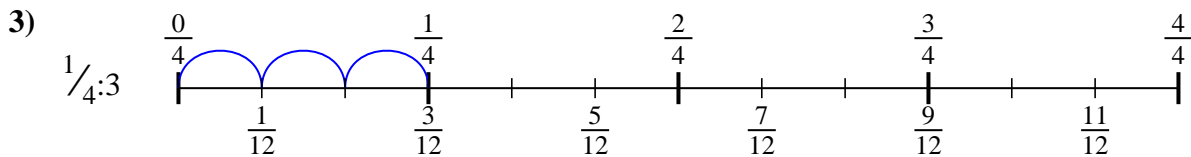
Usa la linea numerata per risolvere ogni problema. Il primo è un esempio.

**Risposte**

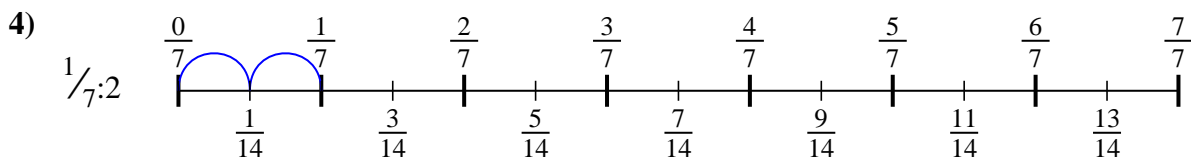
1.  $\frac{1}{21}$



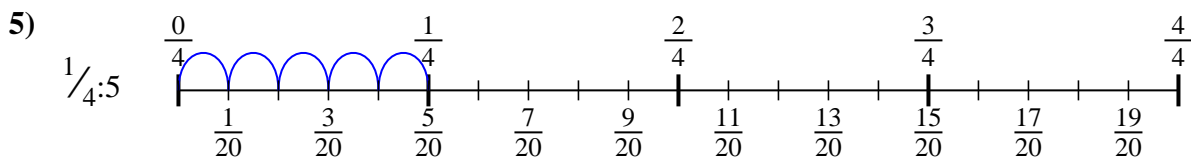
2.  $\frac{1}{30}$



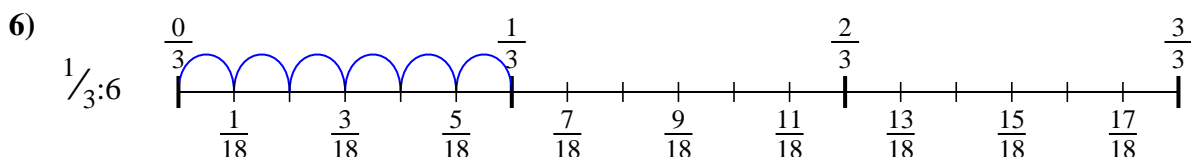
3.  $\frac{1}{12}$



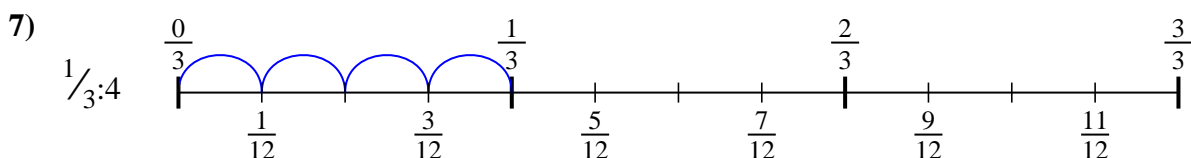
4.  $\frac{1}{14}$



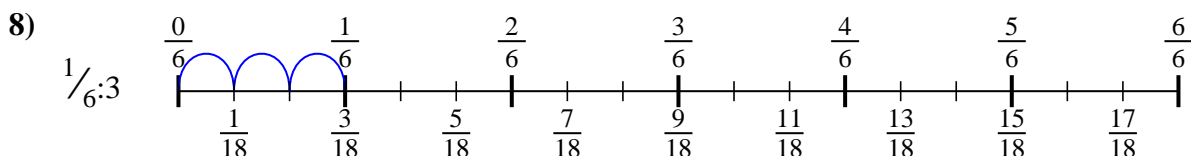
5.  $\frac{1}{20}$



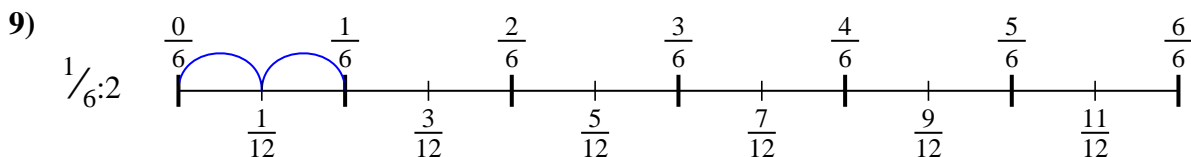
6.  $\frac{1}{18}$



7.  $\frac{1}{12}$



8.  $\frac{1}{18}$



9.  $\frac{1}{12}$



Usa la linea numerata per risolvere ogni problema. Il primo è un esempio.

**Risposte**

$\frac{1}{30}$

$\frac{1}{12}$

$\frac{1}{12}$

$\frac{1}{20}$

$\frac{1}{21}$

$\frac{1}{18}$

$\frac{1}{18}$

$\frac{1}{12}$

$\frac{1}{14}$

1. \_\_\_\_\_

2. \_\_\_\_\_

3. \_\_\_\_\_

4. \_\_\_\_\_



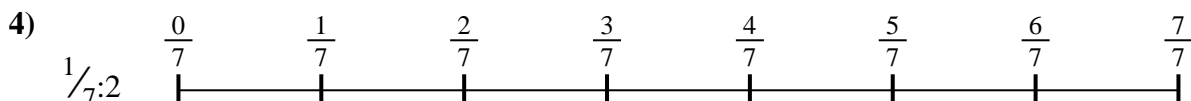
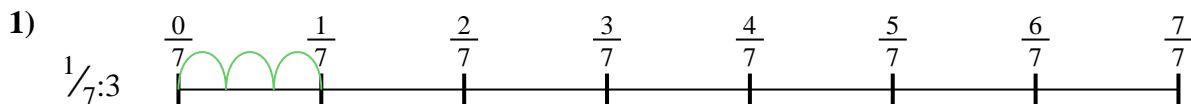
5. \_\_\_\_\_

6. \_\_\_\_\_

7. \_\_\_\_\_

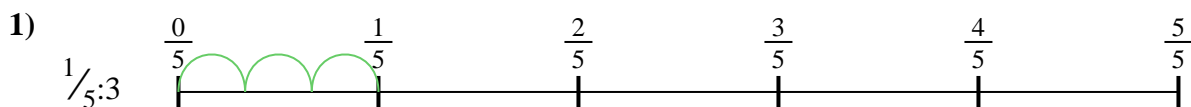
8. \_\_\_\_\_

9. \_\_\_\_\_



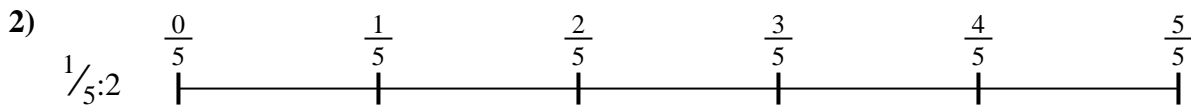


Usa la linea numerata per risolvere ogni problema. Il primo è un esempio.

**Risposte**

1. \_\_\_\_\_

2. \_\_\_\_\_



3. \_\_\_\_\_

4. \_\_\_\_\_



5. \_\_\_\_\_

6. \_\_\_\_\_



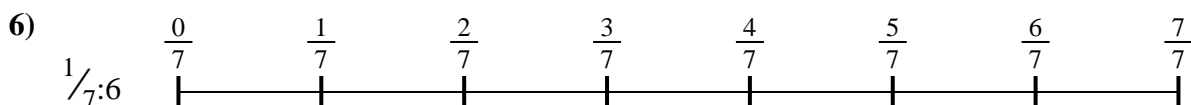


7. \_\_\_\_\_

8. \_\_\_\_\_

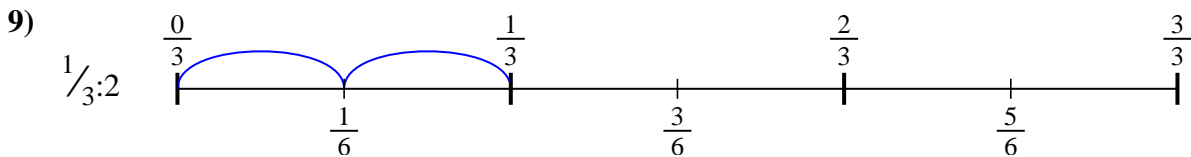
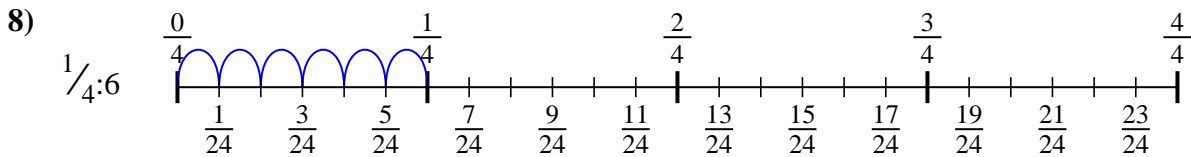
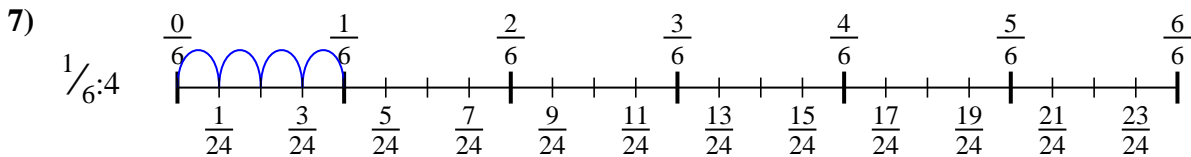
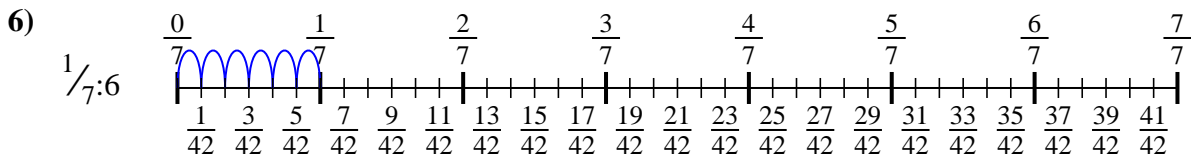
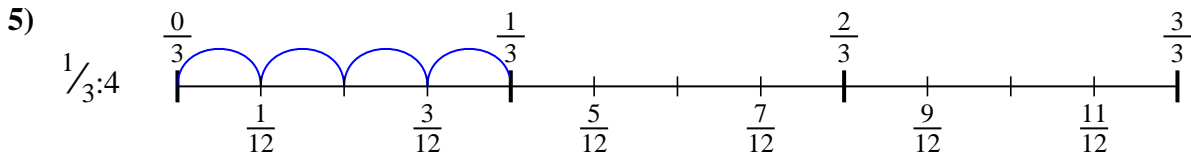
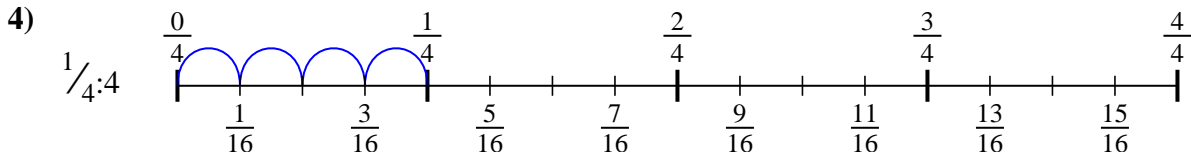
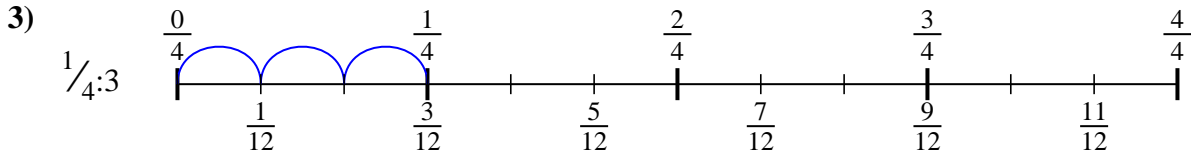
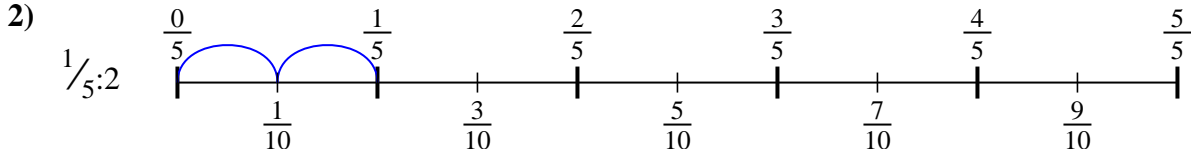
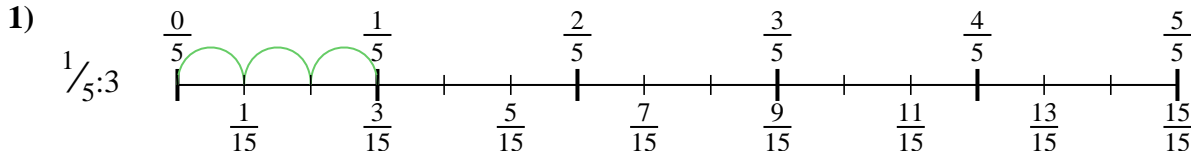


9. \_\_\_\_\_





Usa la linea numerata per risolvere ogni problema. Il primo è un esempio.

**Risposte**

1.  $\frac{1}{15}$

2.  $\frac{1}{10}$

3.  $\frac{1}{12}$

4.  $\frac{1}{16}$

5.  $\frac{1}{12}$

6.  $\frac{1}{42}$

7.  $\frac{1}{24}$

8.  $\frac{1}{24}$

9.  $\frac{1}{6}$





Usa la linea numerata per risolvere ogni problema. Il primo è un esempio.

**Risposte**

$\frac{1}{16}$

$\frac{1}{15}$

$\frac{1}{12}$

$\frac{1}{42}$

$\frac{1}{12}$

$\frac{1}{10}$

$\frac{1}{24}$

$\frac{1}{6}$

$\frac{1}{24}$

1. \_\_\_\_\_

2. \_\_\_\_\_

3. \_\_\_\_\_

4. \_\_\_\_\_


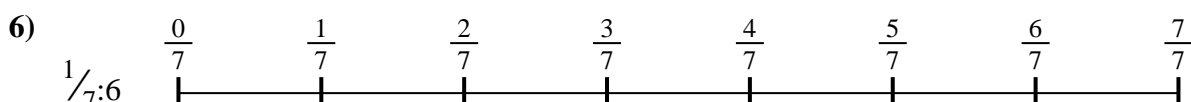


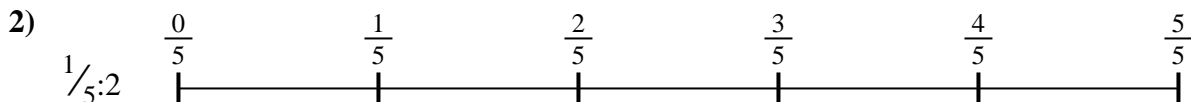
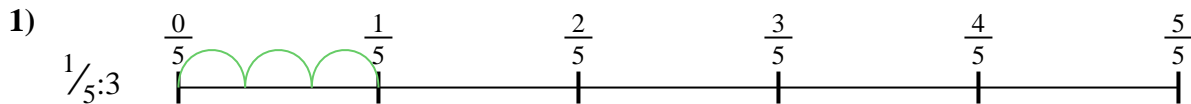
5. \_\_\_\_\_

6. \_\_\_\_\_

7. \_\_\_\_\_


8. \_\_\_\_\_

9. \_\_\_\_\_





Usa la linea numerata per risolvere ogni problema. Il primo è un esempio.

**Risposte**

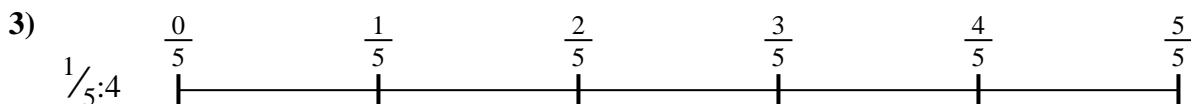
1. \_\_\_\_\_

2. \_\_\_\_\_



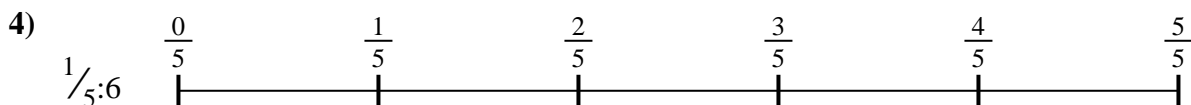
3. \_\_\_\_\_

4. \_\_\_\_\_




5. \_\_\_\_\_

6. \_\_\_\_\_



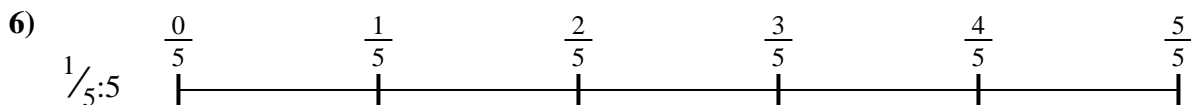


7. \_\_\_\_\_

8. \_\_\_\_\_

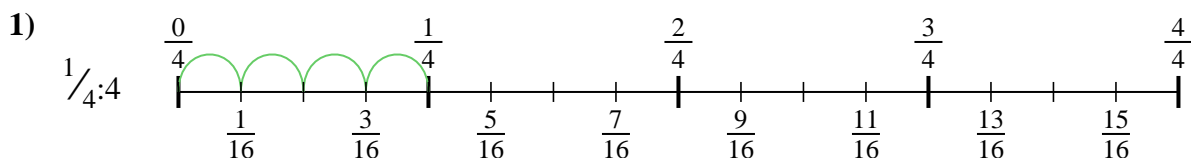


9. \_\_\_\_\_

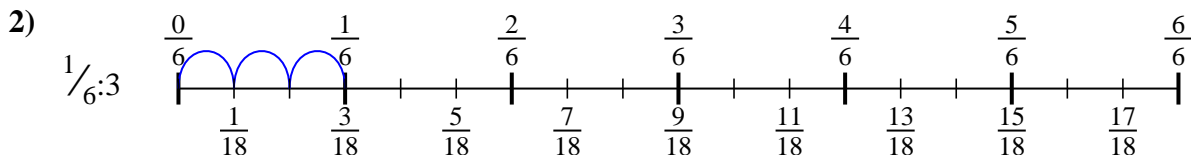




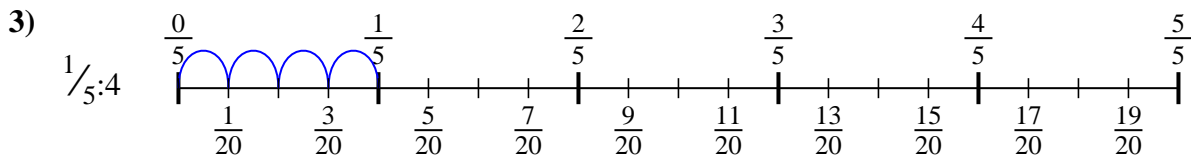
Usa la linea numerata per risolvere ogni problema. Il primo è un esempio.

**Risposte**

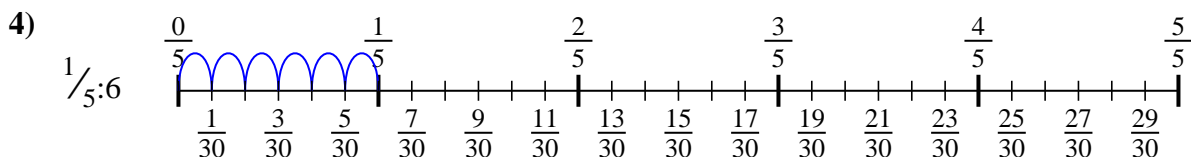
1.  $\frac{1}{16}$



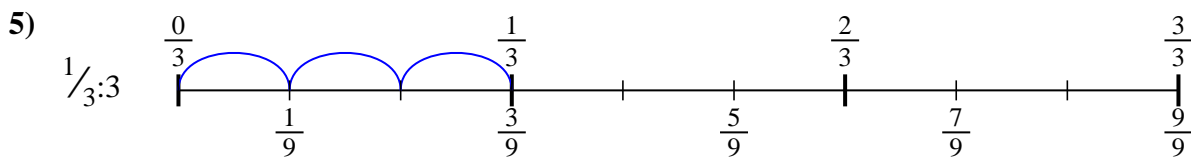
2.  $\frac{1}{18}$



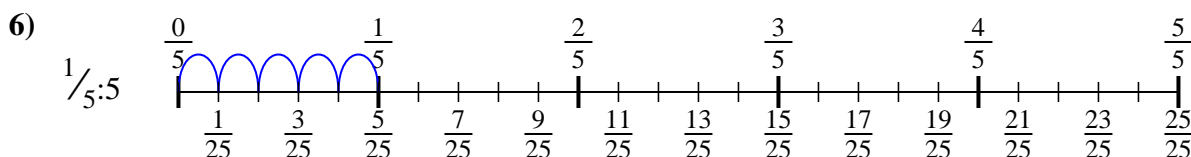
3.  $\frac{1}{20}$



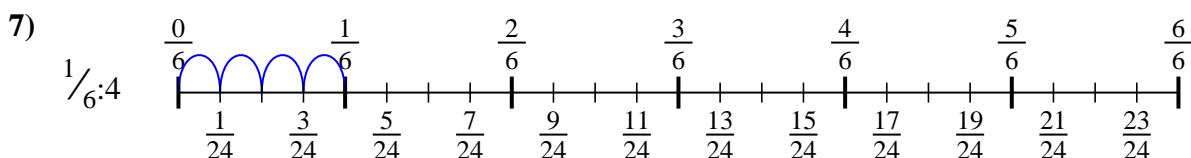
4.  $\frac{1}{30}$



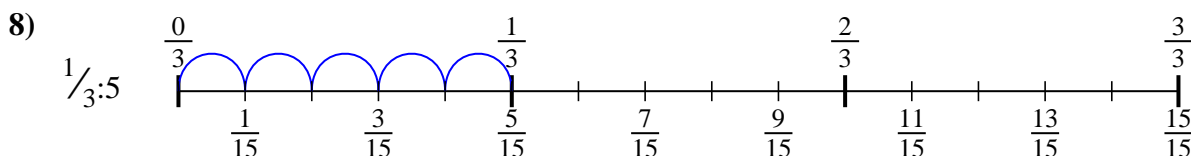
5.  $\frac{1}{9}$



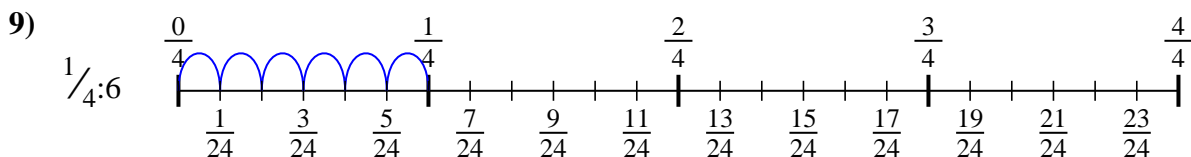
6.  $\frac{1}{25}$



7.  $\frac{1}{24}$



8.  $\frac{1}{15}$



9.  $\frac{1}{24}$



Usa la linea numerata per risolvere ogni problema. Il primo è un esempio.

**Risposte**

$\frac{1}{30}$

$\frac{1}{9}$

$\frac{1}{20}$

$\frac{1}{24}$

$\frac{1}{25}$

$\frac{1}{24}$

$\frac{1}{18}$

$\frac{1}{16}$

$\frac{1}{15}$

1. \_\_\_\_\_

2. \_\_\_\_\_

3. \_\_\_\_\_

4. \_\_\_\_\_


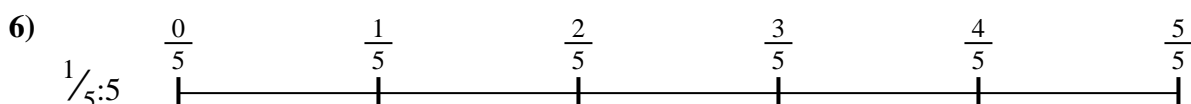

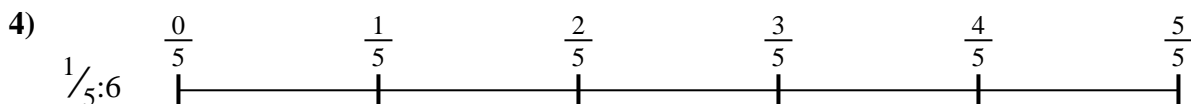
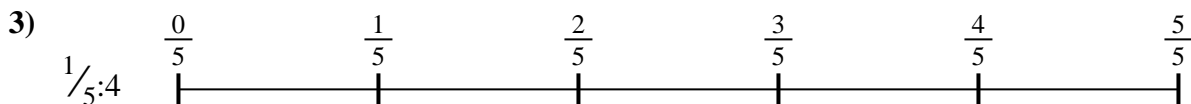
5. \_\_\_\_\_

6. \_\_\_\_\_

7. \_\_\_\_\_

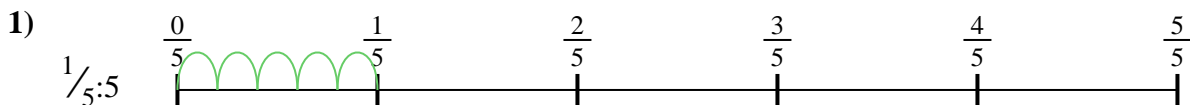
8. \_\_\_\_\_

9. \_\_\_\_\_



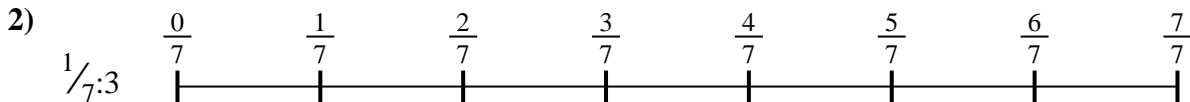


Usa la linea numerata per risolvere ogni problema. Il primo è un esempio.

**Risposte**

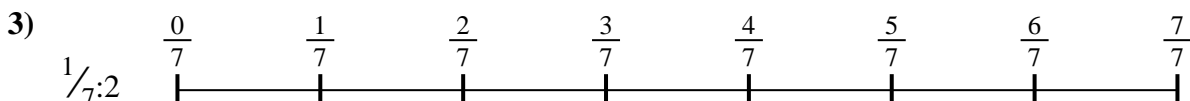
1. \_\_\_\_\_

2. \_\_\_\_\_



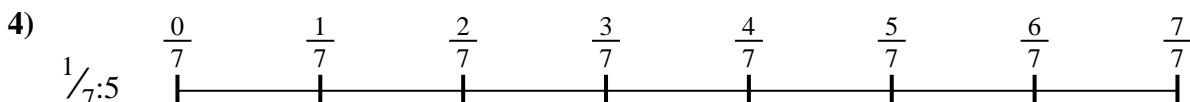
3. \_\_\_\_\_

4. \_\_\_\_\_



5. \_\_\_\_\_

6. \_\_\_\_\_

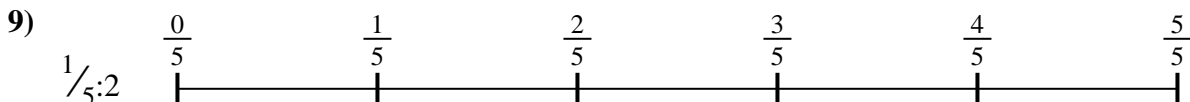





7. \_\_\_\_\_

8. \_\_\_\_\_

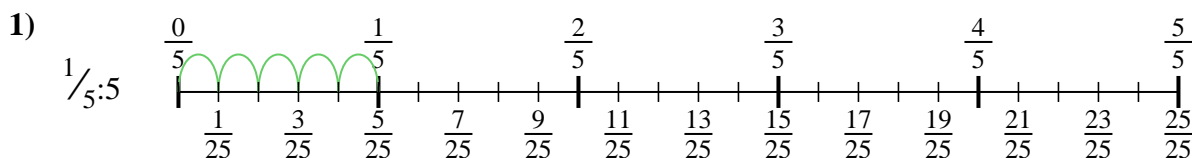


9. \_\_\_\_\_

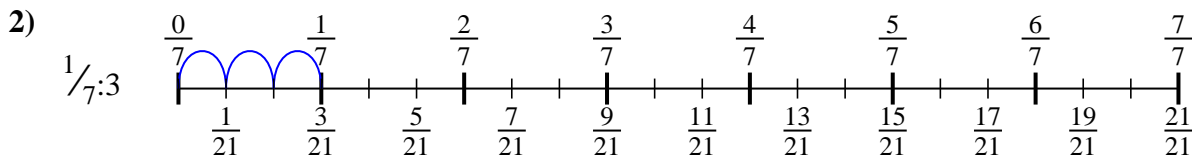




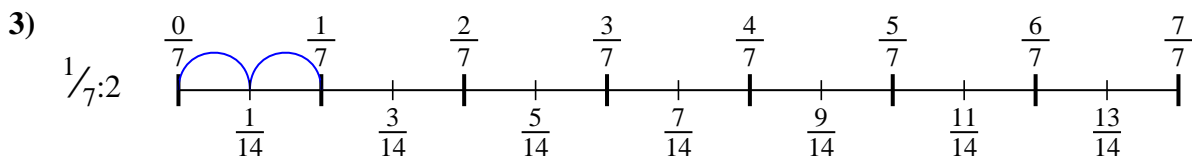
Usa la linea numerata per risolvere ogni problema. Il primo è un esempio.

**Risposte**

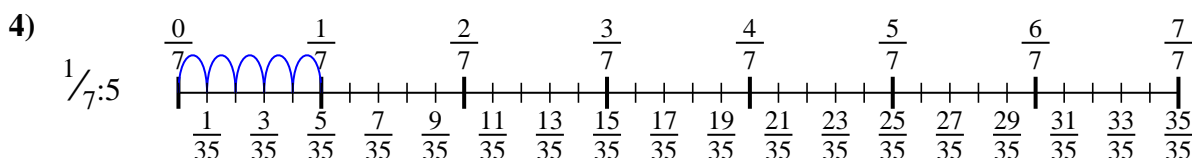
1.  $\frac{1}{25}$



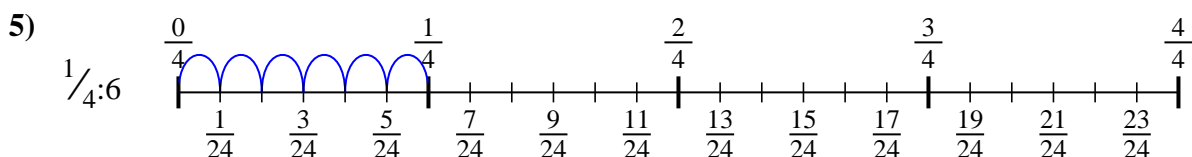
2.  $\frac{1}{21}$



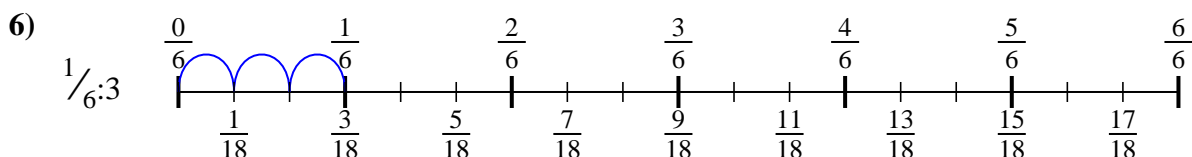
3.  $\frac{1}{14}$



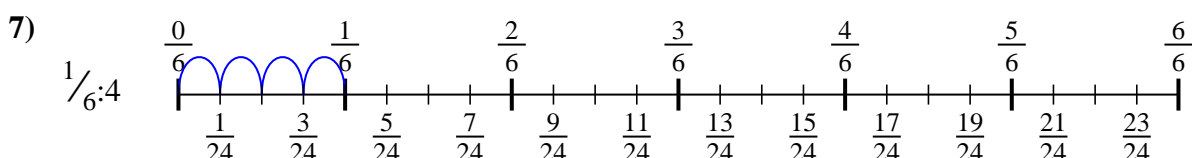
4.  $\frac{1}{35}$



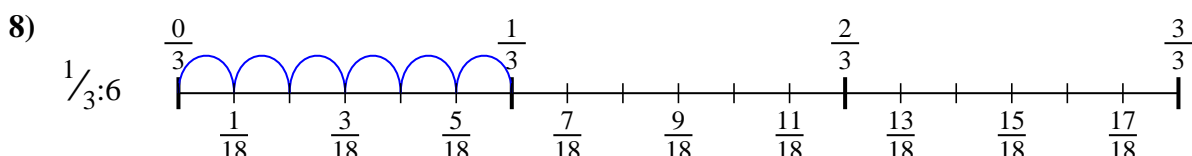
5.  $\frac{1}{24}$



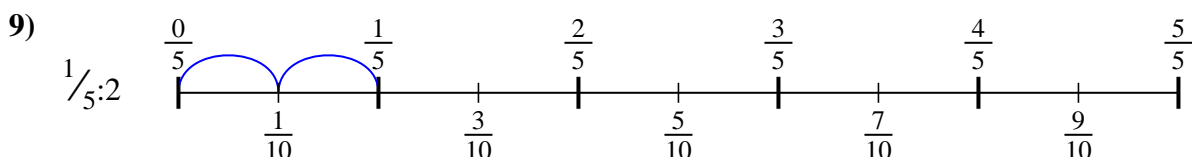
6.  $\frac{1}{18}$



7.  $\frac{1}{24}$



8.  $\frac{1}{18}$



9.  $\frac{1}{10}$



Usa la linea numerata per risolvere ogni problema. Il primo è un esempio.

**Risposte**

$\frac{1}{18}$

$\frac{1}{35}$

$\frac{1}{18}$

$\frac{1}{21}$

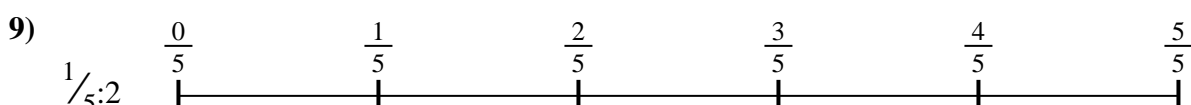

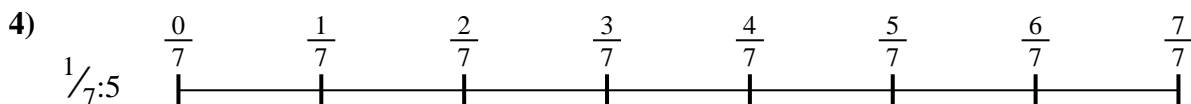
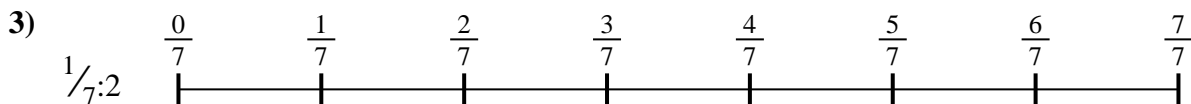
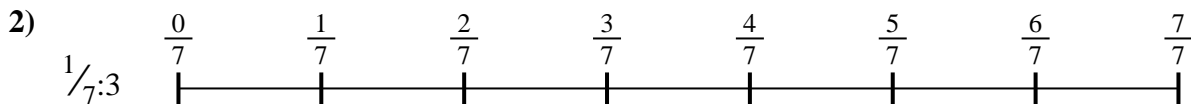
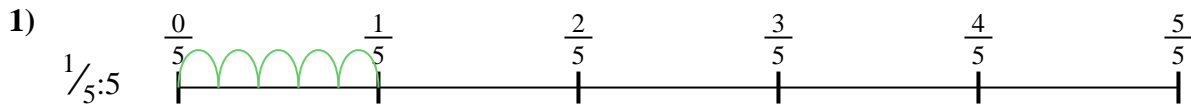
$\frac{1}{24}$

$\frac{1}{14}$

$\frac{1}{10}$

$\frac{1}{25}$

$\frac{1}{24}$



1. \_\_\_\_\_
2. \_\_\_\_\_
3. \_\_\_\_\_
4. \_\_\_\_\_
5. \_\_\_\_\_
6. \_\_\_\_\_
7. \_\_\_\_\_
8. \_\_\_\_\_
9. \_\_\_\_\_

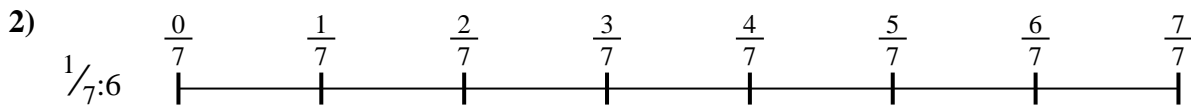


Usa la linea numerata per risolvere ogni problema. Il primo è un esempio.

**Risposte**

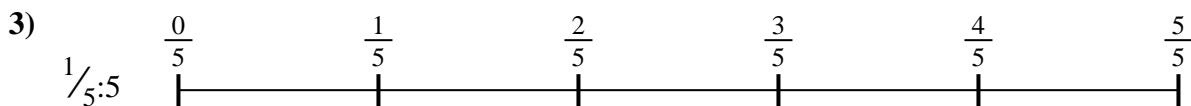
1. \_\_\_\_\_

2. \_\_\_\_\_



3. \_\_\_\_\_

4. \_\_\_\_\_



5. \_\_\_\_\_

6. \_\_\_\_\_

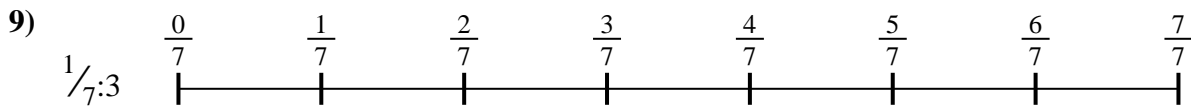
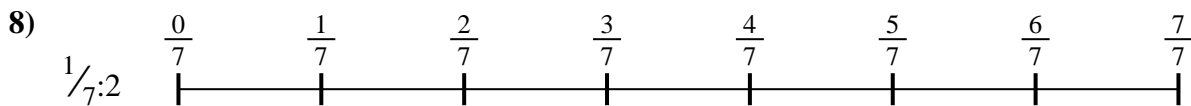


7. \_\_\_\_\_

8. \_\_\_\_\_



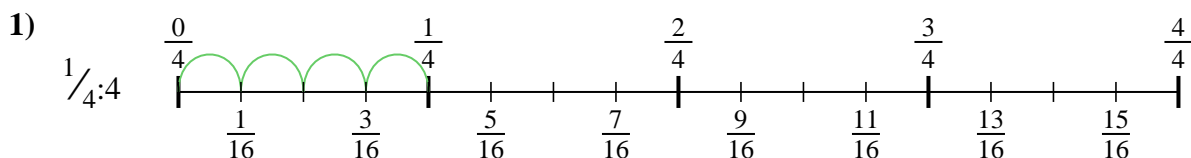
9. \_\_\_\_\_



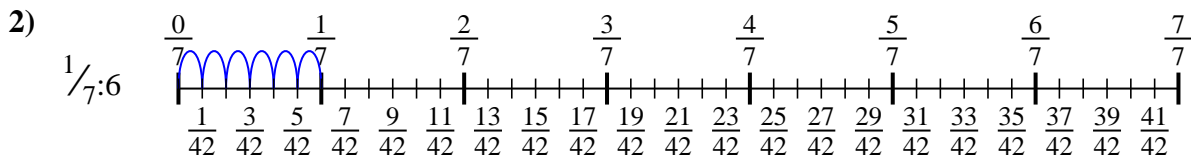




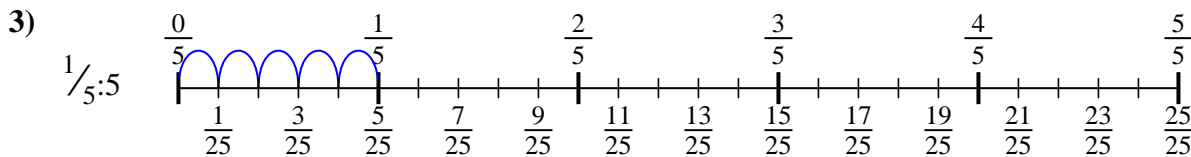
Usa la linea numerata per risolvere ogni problema. Il primo è un esempio.

**Risposte**

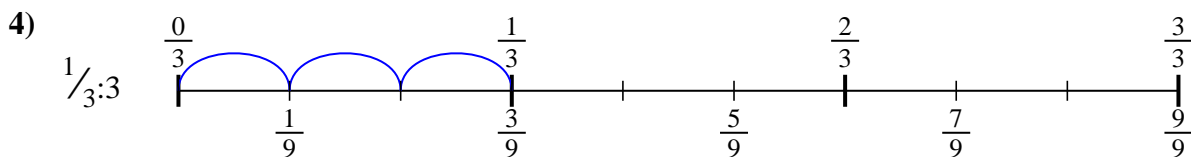
1.  $\frac{1}{16}$



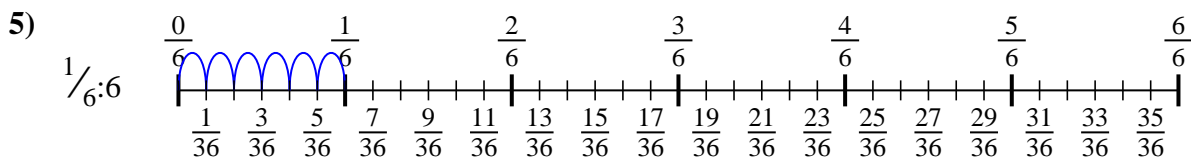
2.  $\frac{1}{42}$



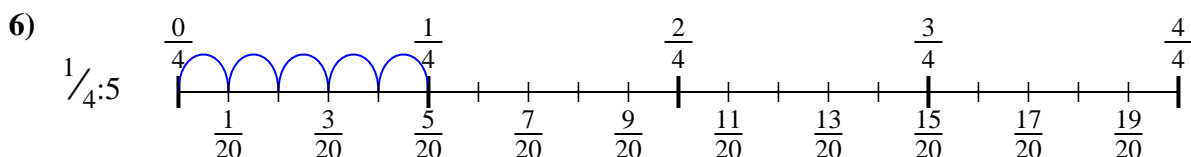
3.  $\frac{1}{25}$



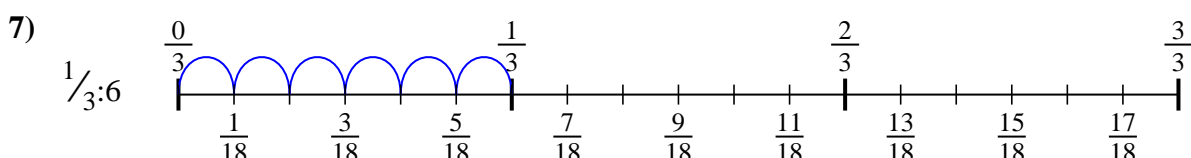
4.  $\frac{1}{9}$



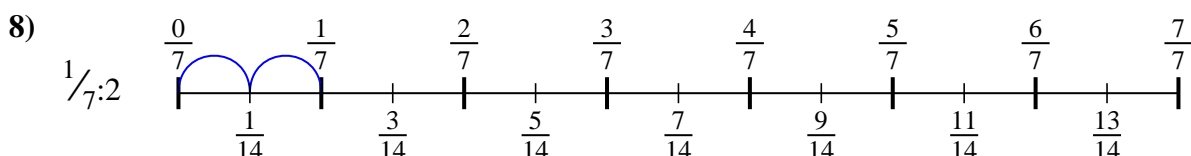
5.  $\frac{1}{36}$



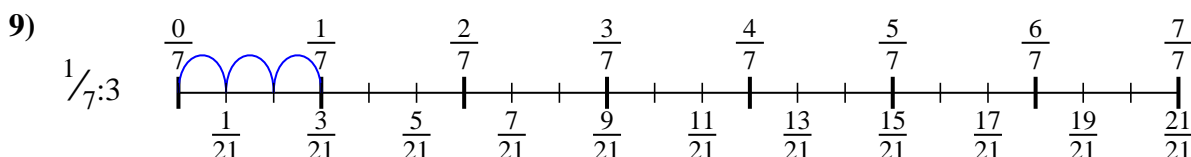
6.  $\frac{1}{20}$



7.  $\frac{1}{18}$



8.  $\frac{1}{14}$



9.  $\frac{1}{21}$



Usa la linea numerata per risolvere ogni problema. Il primo è un esempio.

**Risposte**

$\frac{1}{42}$

$\frac{1}{20}$

$\frac{1}{14}$

$\frac{1}{21}$

$\frac{1}{36}$

$\frac{1}{25}$

$\frac{1}{16}$

$\frac{1}{9}$

$\frac{1}{18}$

1. \_\_\_\_\_

2. \_\_\_\_\_

3. \_\_\_\_\_

4. \_\_\_\_\_

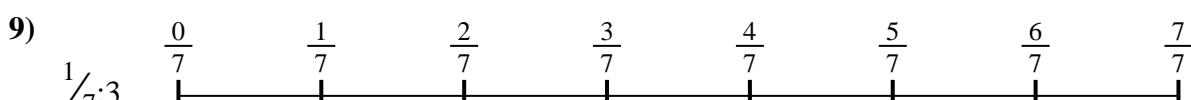
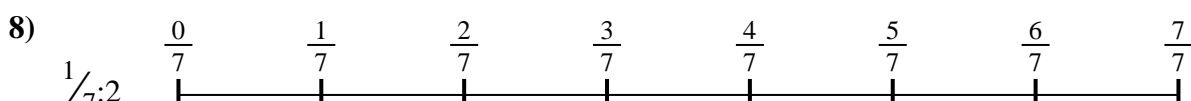


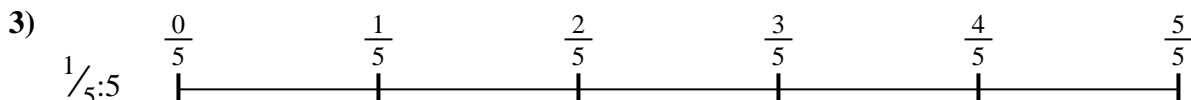
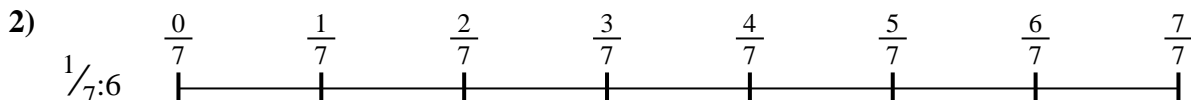

5. \_\_\_\_\_

6. \_\_\_\_\_

7. \_\_\_\_\_

8. \_\_\_\_\_

9. \_\_\_\_\_



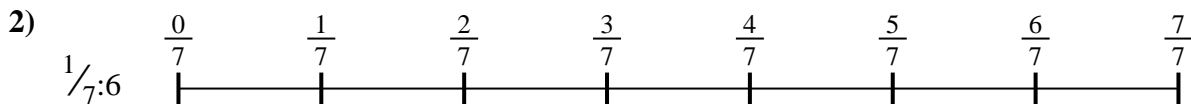


Usa la linea numerata per risolvere ogni problema. Il primo è un esempio.

**Risposte**

1. \_\_\_\_\_

2. \_\_\_\_\_



3. \_\_\_\_\_

4. \_\_\_\_\_



5. \_\_\_\_\_

6. \_\_\_\_\_

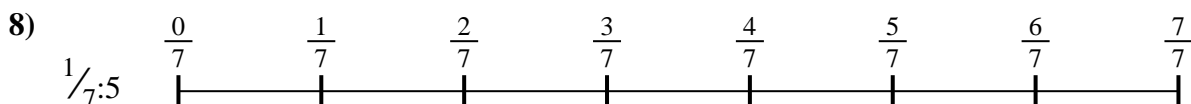

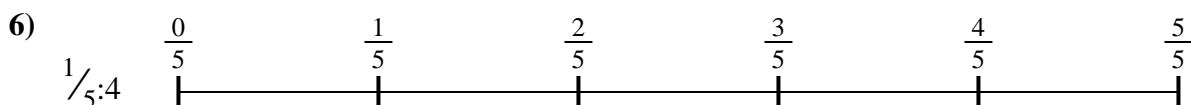


7. \_\_\_\_\_

8. \_\_\_\_\_

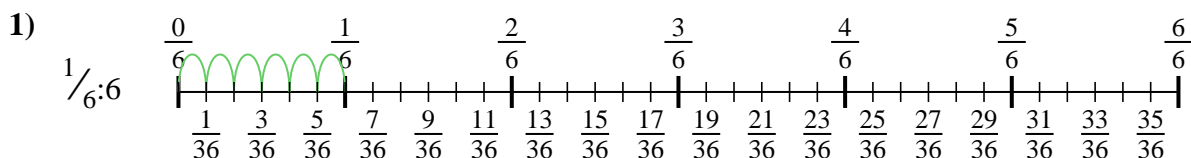


9. \_\_\_\_\_

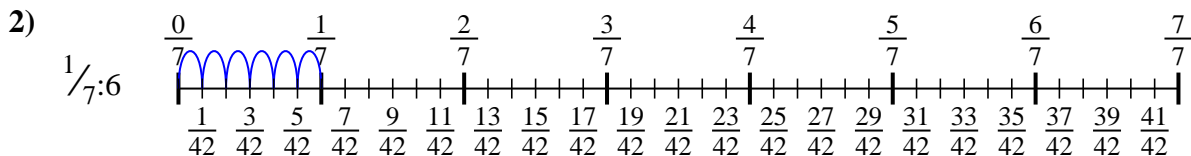




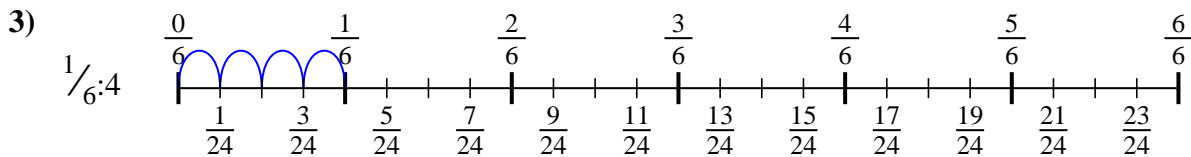
Usa la linea numerata per risolvere ogni problema. Il primo è un esempio.

**Risposte**

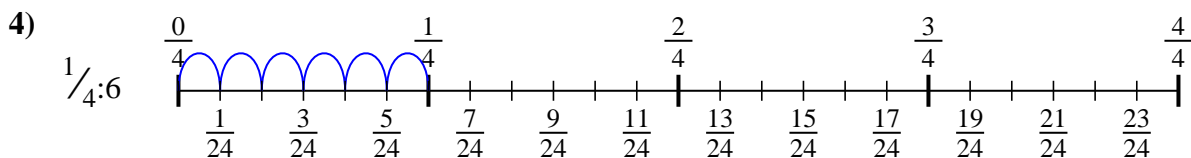
1.  $\frac{1}{36}$



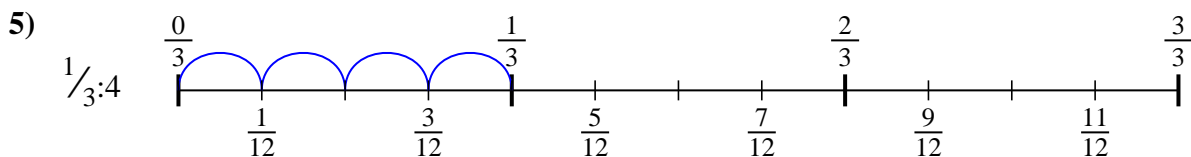
2.  $\frac{1}{42}$



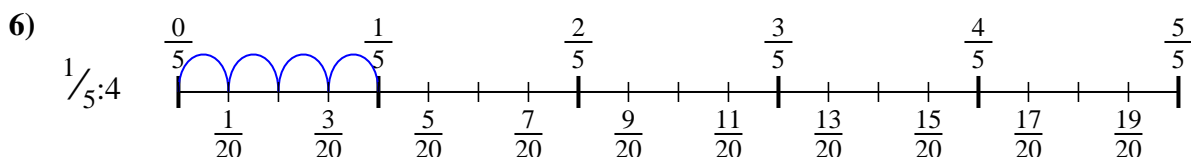
3.  $\frac{1}{24}$



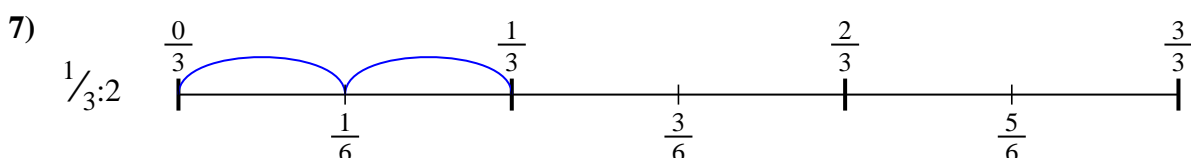
4.  $\frac{1}{24}$



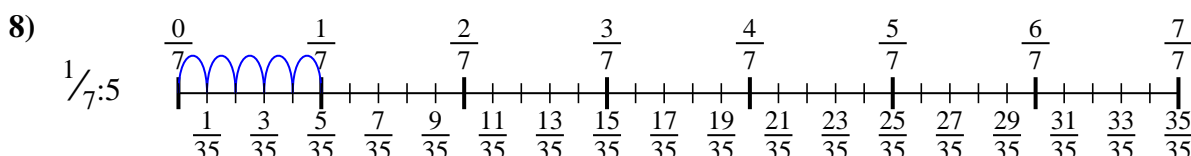
5.  $\frac{1}{12}$



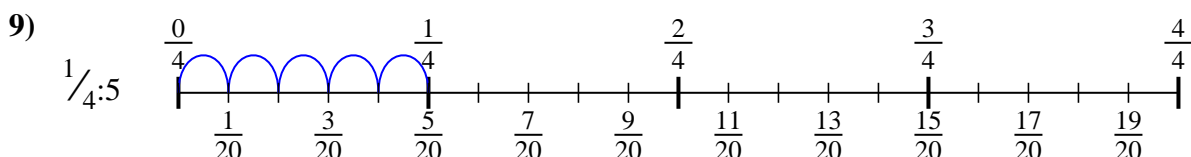
6.  $\frac{1}{20}$



7.  $\frac{1}{6}$



8.  $\frac{1}{35}$



9.  $\frac{1}{20}$



Usa la linea numerata per risolvere ogni problema. Il primo è un esempio.

**Risposte**

$\frac{1}{35}$

$\frac{1}{6}$

$\frac{1}{24}$

$\frac{1}{42}$

$\frac{1}{24}$

$\frac{1}{36}$

$\frac{1}{20}$

$\frac{1}{20}$

$\frac{1}{12}$

1. \_\_\_\_\_

2. \_\_\_\_\_

3. \_\_\_\_\_

4. \_\_\_\_\_


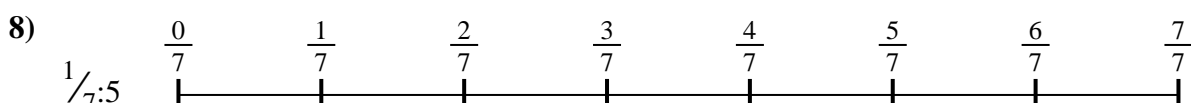
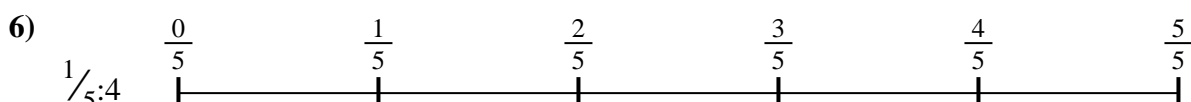


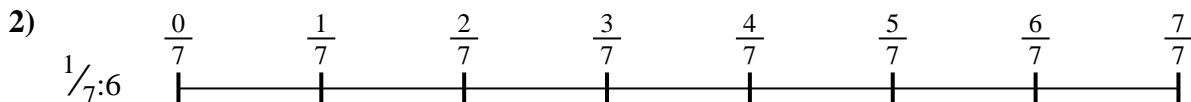
5. \_\_\_\_\_

6. \_\_\_\_\_

7. \_\_\_\_\_

8. \_\_\_\_\_

9. \_\_\_\_\_



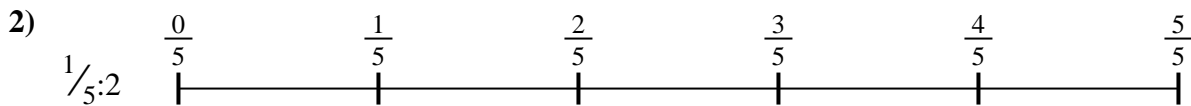


Usa la linea numerata per risolvere ogni problema. Il primo è un esempio.

**Risposte**

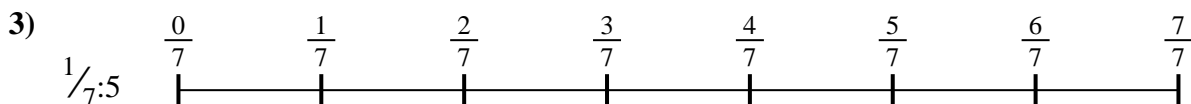
1. \_\_\_\_\_

2. \_\_\_\_\_



3. \_\_\_\_\_

4. \_\_\_\_\_



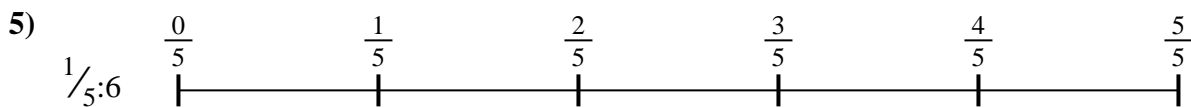
5. \_\_\_\_\_

6. \_\_\_\_\_

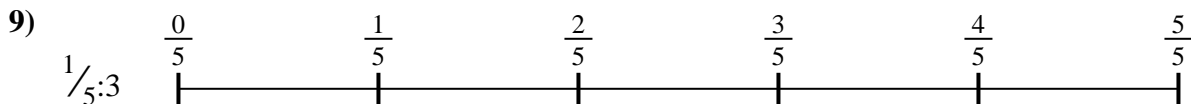



7. \_\_\_\_\_

8. \_\_\_\_\_

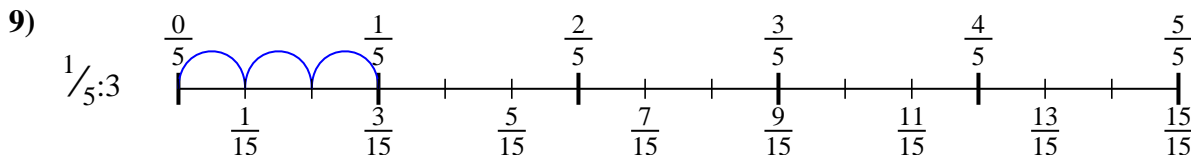
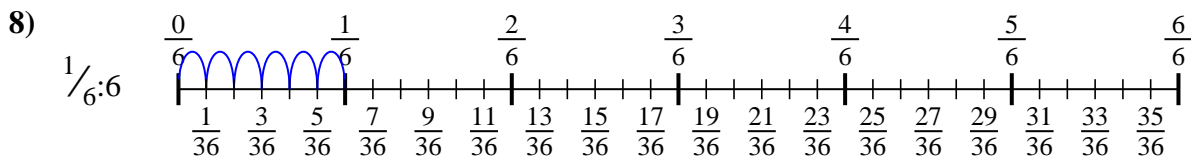
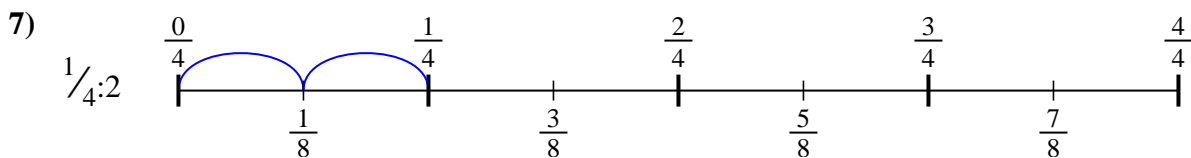
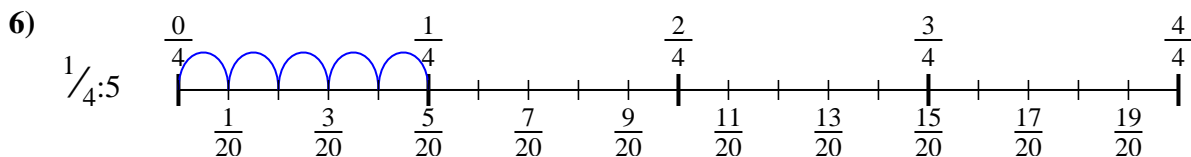
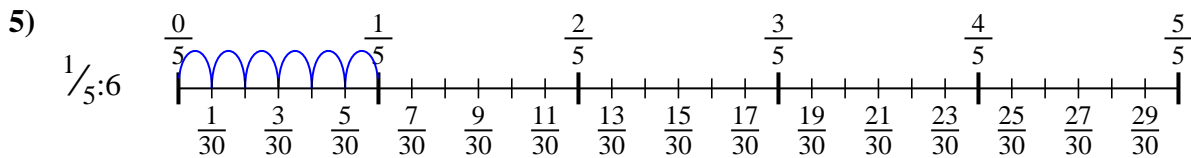
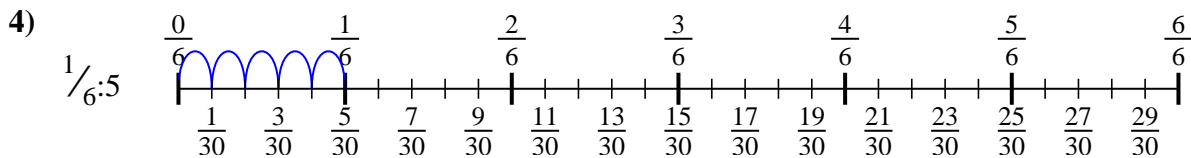
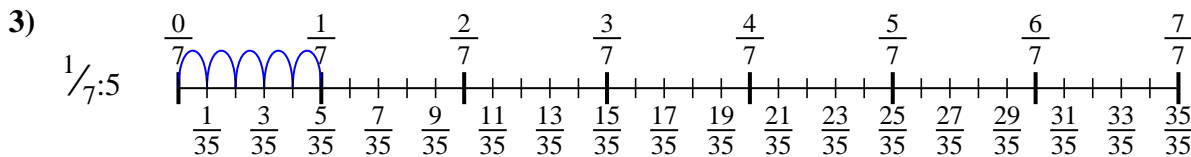
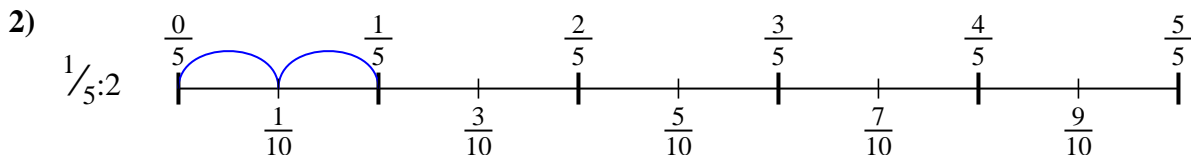
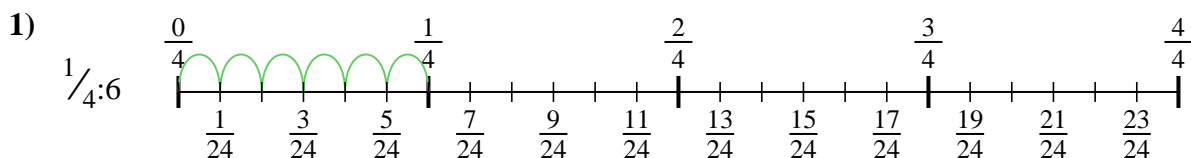


9. \_\_\_\_\_





Usa la linea numerata per risolvere ogni problema. Il primo è un esempio.

**Risposte**

1.  $\frac{1}{24}$

2.  $\frac{1}{10}$

3.  $\frac{1}{35}$

4.  $\frac{1}{30}$

5.  $\frac{1}{30}$

6.  $\frac{1}{20}$

7.  $\frac{1}{8}$

8.  $\frac{1}{36}$

9.  $\frac{1}{15}$



Usa la linea numerata per risolvere ogni problema. Il primo è un esempio.

**Risposte**

$\frac{1}{30}$

$\frac{1}{36}$

$\frac{1}{20}$

$\frac{1}{8}$

$\frac{1}{15}$

$\frac{1}{24}$

$\frac{1}{30}$

$\frac{1}{35}$

$\frac{1}{10}$

1. \_\_\_\_\_

2. \_\_\_\_\_

3. \_\_\_\_\_

4. \_\_\_\_\_

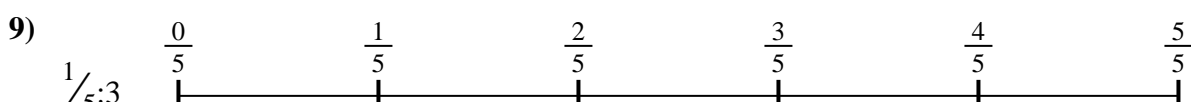

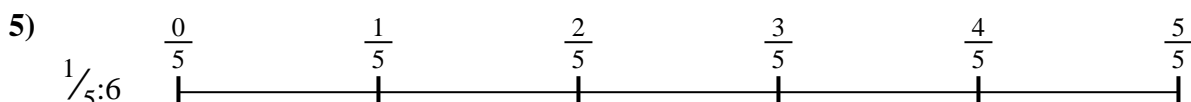

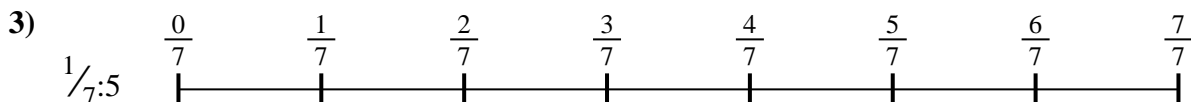
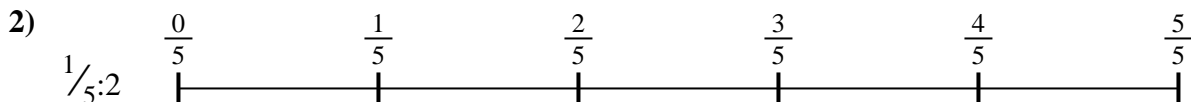
5. \_\_\_\_\_

6. \_\_\_\_\_

7. \_\_\_\_\_

8. \_\_\_\_\_

9. \_\_\_\_\_







Usa la linea numerata per risolvere ogni problema. Il primo è un esempio.

**Risposte**

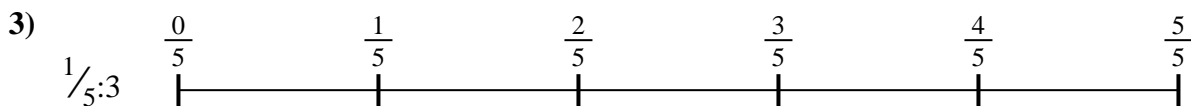
1. \_\_\_\_\_

2. \_\_\_\_\_



3. \_\_\_\_\_

4. \_\_\_\_\_



5. \_\_\_\_\_

6. \_\_\_\_\_


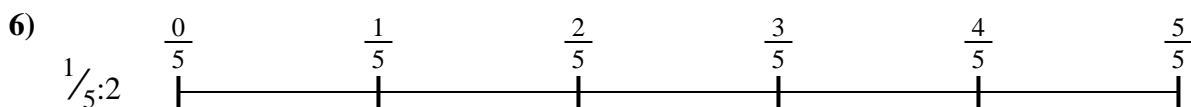


7. \_\_\_\_\_

8. \_\_\_\_\_

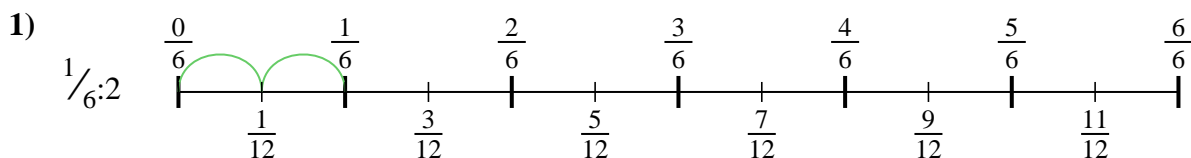


9. \_\_\_\_\_

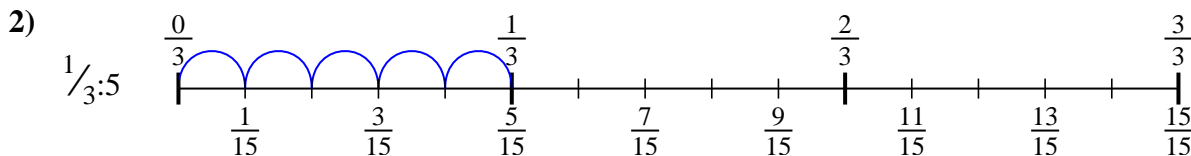




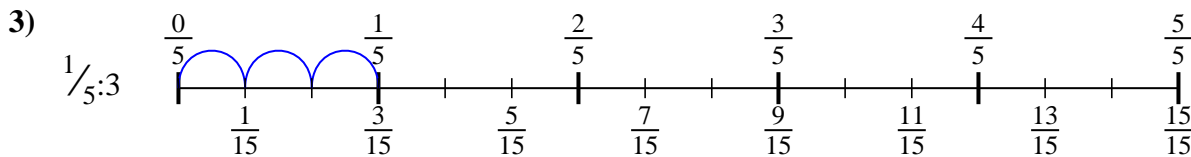
Usa la linea numerata per risolvere ogni problema. Il primo è un esempio.

**Risposte**

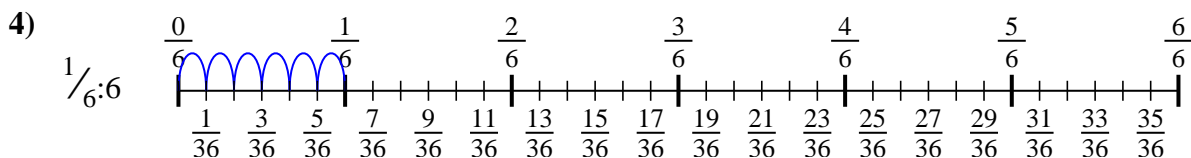
1.  $\frac{1}{12}$



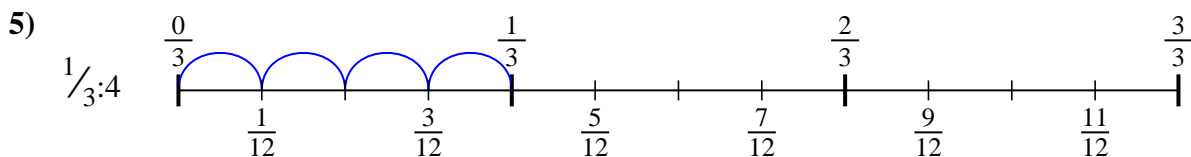
2.  $\frac{1}{15}$



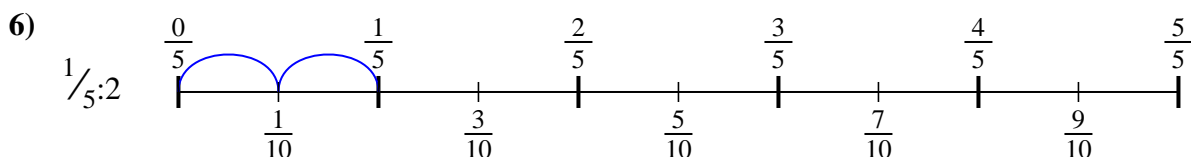
3.  $\frac{1}{15}$



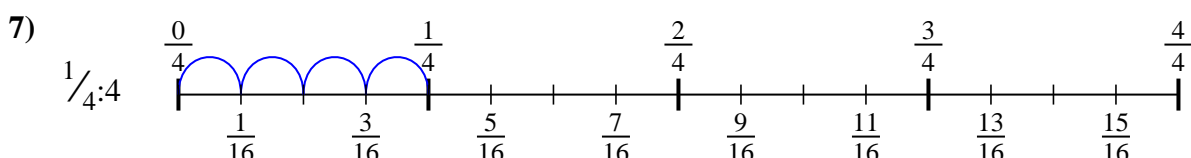
4.  $\frac{1}{36}$



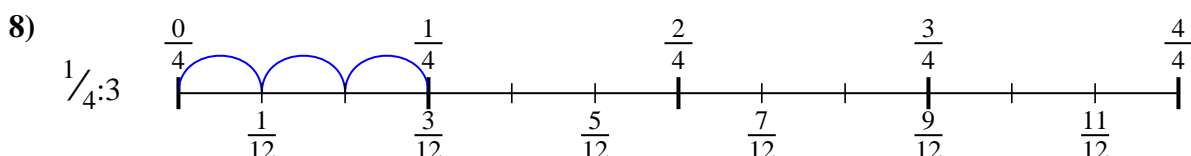
5.  $\frac{1}{12}$



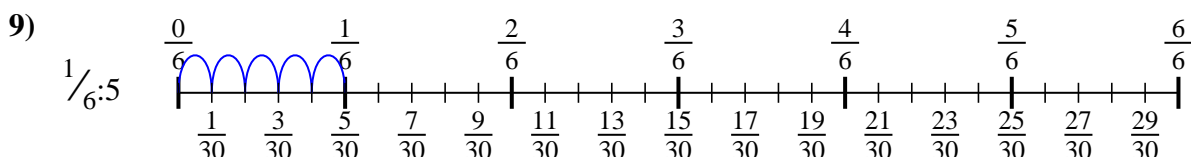
6.  $\frac{1}{10}$



7.  $\frac{1}{16}$



8.  $\frac{1}{12}$



9.  $\frac{1}{30}$



Usa la linea numerata per risolvere ogni problema. Il primo è un esempio.

**Risposte**

$\frac{1}{36}$

$\frac{1}{12}$

$\frac{1}{30}$

$\frac{1}{12}$

$\frac{1}{15}$

$\frac{1}{10}$

$\frac{1}{12}$

$\frac{1}{16}$

$\frac{1}{15}$

1. \_\_\_\_\_

2. \_\_\_\_\_

3. \_\_\_\_\_

4. \_\_\_\_\_


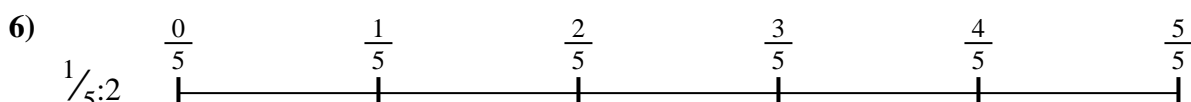

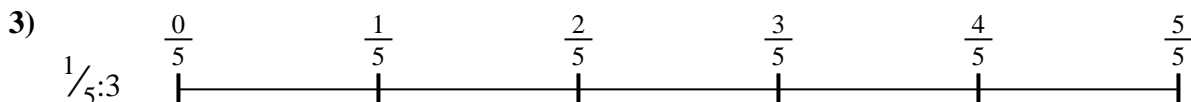
5. \_\_\_\_\_

6. \_\_\_\_\_

7. \_\_\_\_\_

8. \_\_\_\_\_

9. \_\_\_\_\_





Usa la linea numerata per risolvere ogni problema. Il primo è un esempio.

**Risposte**

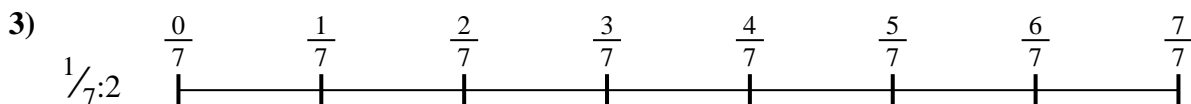
1. \_\_\_\_\_

2. \_\_\_\_\_



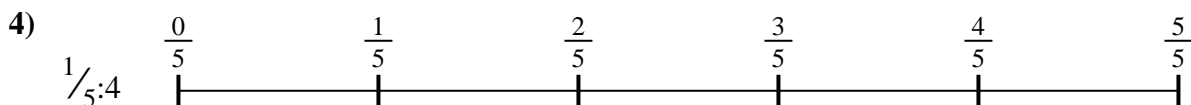
3. \_\_\_\_\_

4. \_\_\_\_\_




5. \_\_\_\_\_

6. \_\_\_\_\_

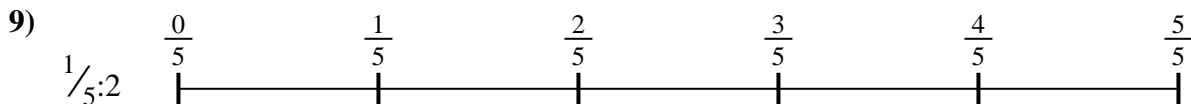
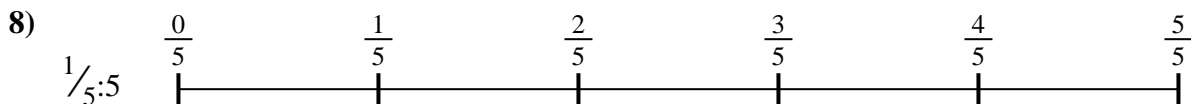



7. \_\_\_\_\_

8. \_\_\_\_\_

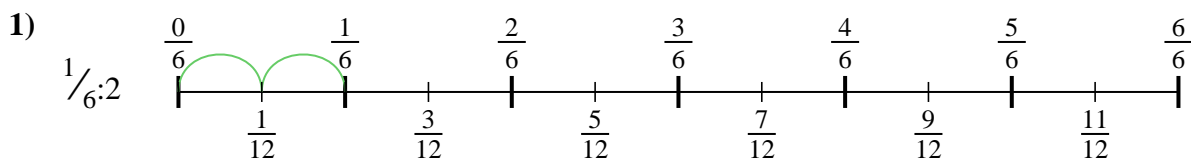


9. \_\_\_\_\_

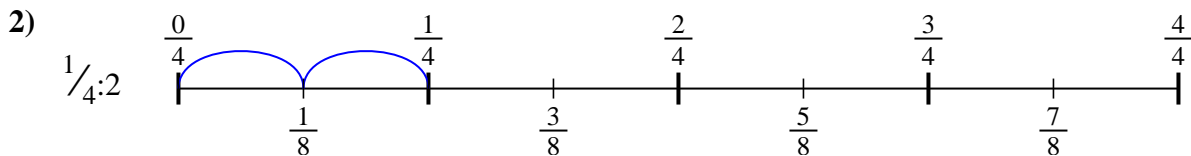




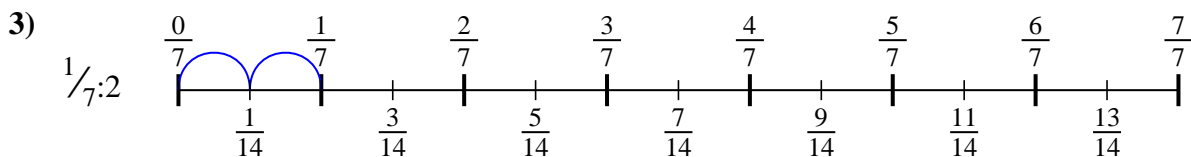
Usa la linea numerata per risolvere ogni problema. Il primo è un esempio.

**Risposte**

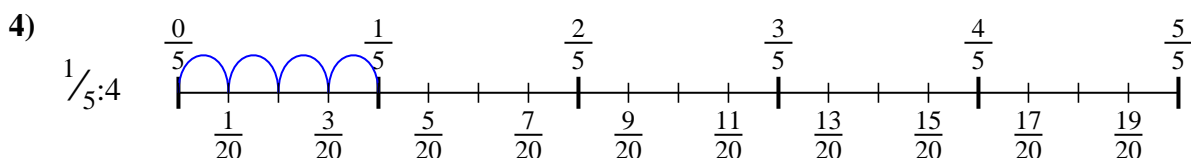
1.  $\frac{1}{12}$



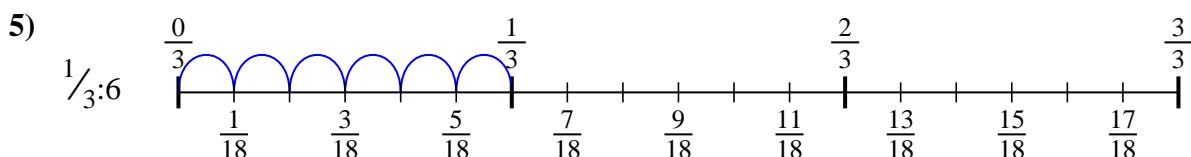
2.  $\frac{1}{8}$



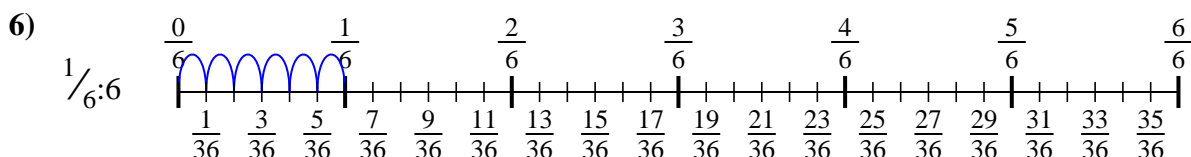
3.  $\frac{1}{14}$



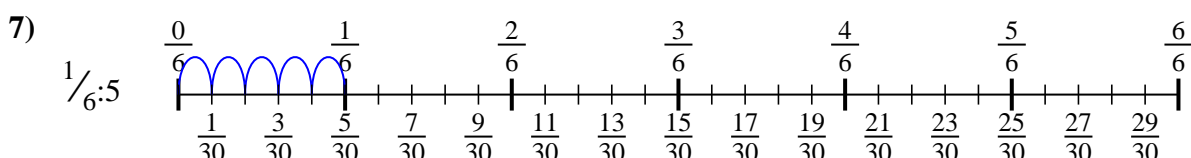
4.  $\frac{1}{20}$



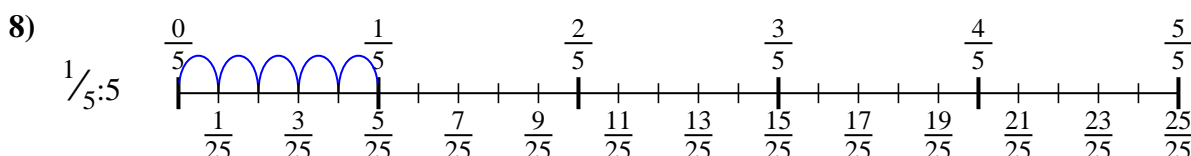
5.  $\frac{1}{18}$



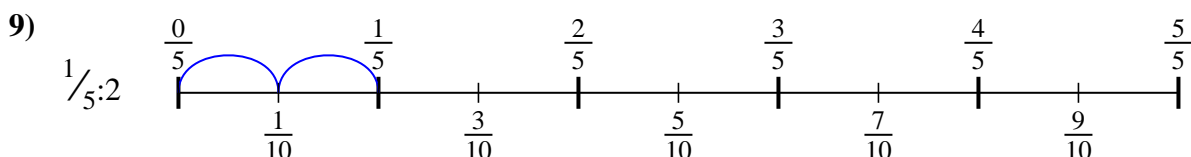
6.  $\frac{1}{36}$



7.  $\frac{1}{30}$



8.  $\frac{1}{25}$



9.  $\frac{1}{10}$



Usa la linea numerata per risolvere ogni problema. Il primo è un esempio.

**Risposte**

$\frac{1}{30}$

$\frac{1}{12}$

$\frac{1}{36}$

$\frac{1}{8}$

$\frac{1}{18}$

$\frac{1}{25}$

$\frac{1}{14}$

$\frac{1}{20}$

$\frac{1}{10}$

1. \_\_\_\_\_

2. \_\_\_\_\_

3. \_\_\_\_\_

4. \_\_\_\_\_

5. \_\_\_\_\_

6. \_\_\_\_\_

7. \_\_\_\_\_

8. \_\_\_\_\_

9. \_\_\_\_\_

