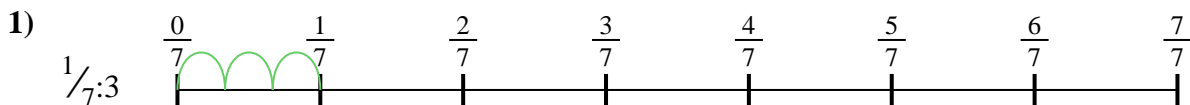




Usa la linea numerata per risolvere ogni problema. Il primo è un esempio.

**Risposte**

1. \_\_\_\_\_

2. \_\_\_\_\_



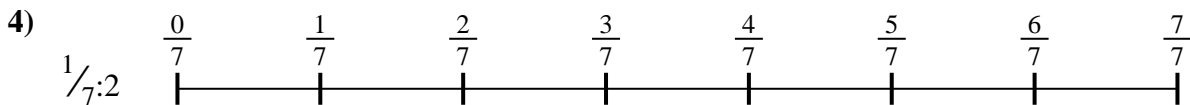
3. \_\_\_\_\_

4. \_\_\_\_\_



5. \_\_\_\_\_

6. \_\_\_\_\_






7. \_\_\_\_\_

8. \_\_\_\_\_

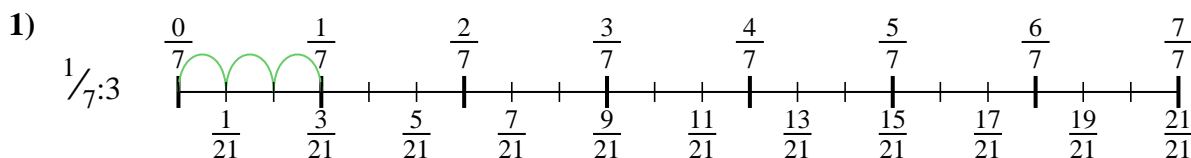


9. \_\_\_\_\_

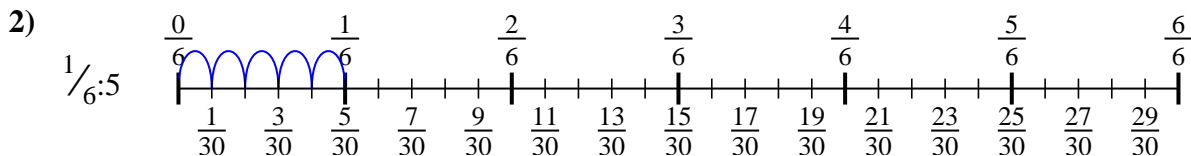




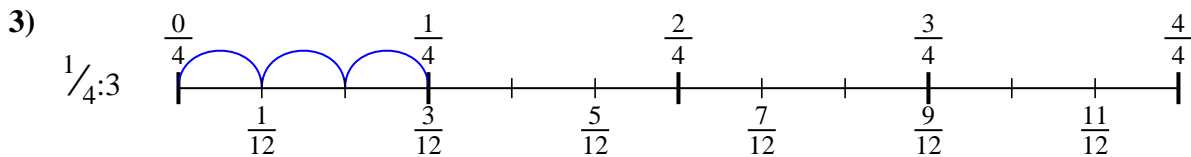
Usa la linea numerata per risolvere ogni problema. Il primo è un esempio.

**Risposte**

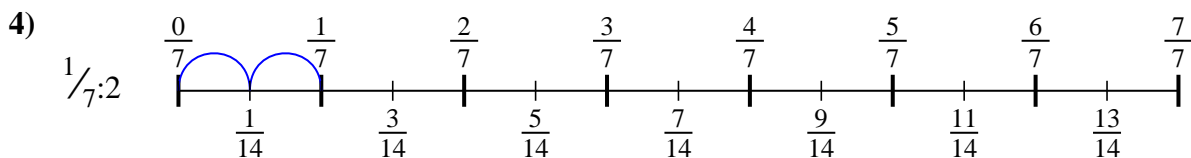
1.  $\frac{1}{21}$



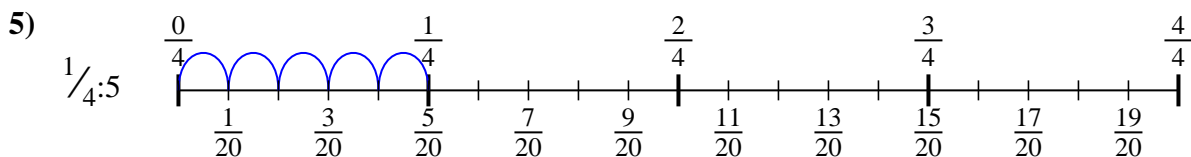
2.  $\frac{1}{30}$



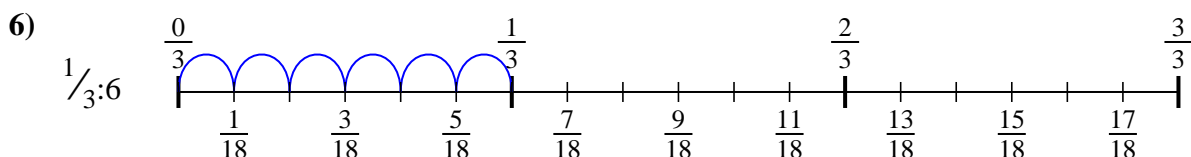
3.  $\frac{1}{12}$



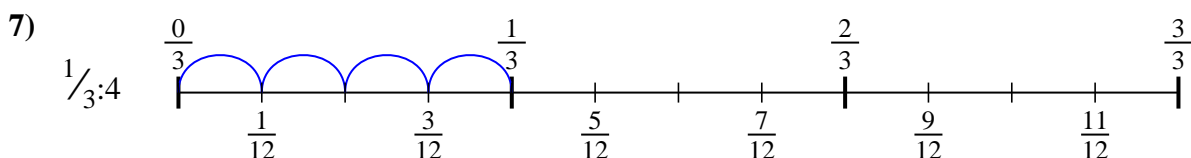
4.  $\frac{1}{14}$



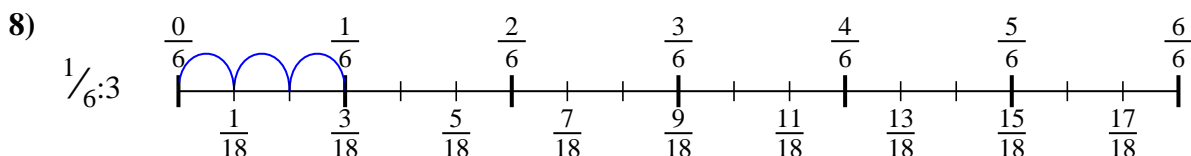
5.  $\frac{1}{20}$



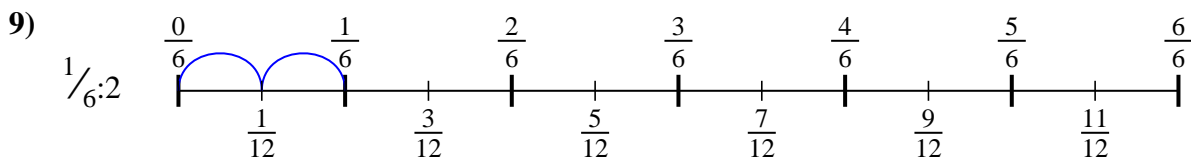
6.  $\frac{1}{18}$



7.  $\frac{1}{12}$



8.  $\frac{1}{18}$



9.  $\frac{1}{12}$



Usa la linea numerata per risolvere ogni problema. Il primo è un esempio.

**Risposte**

$\frac{1}{30}$

$\frac{1}{12}$

$\frac{1}{12}$

$\frac{1}{20}$



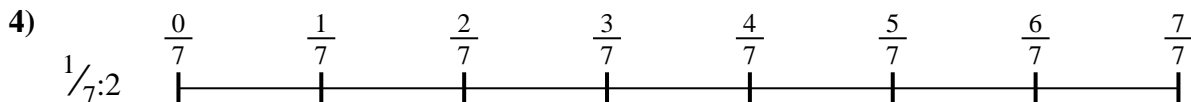

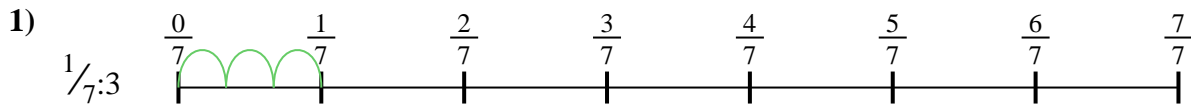
$\frac{1}{21}$

$\frac{1}{18}$

$\frac{1}{18}$

$\frac{1}{12}$

$\frac{1}{14}$



1. \_\_\_\_\_
2. \_\_\_\_\_
3. \_\_\_\_\_
4. \_\_\_\_\_
5. \_\_\_\_\_
6. \_\_\_\_\_
7. \_\_\_\_\_
8. \_\_\_\_\_
9. \_\_\_\_\_