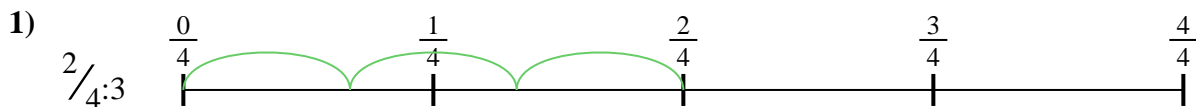


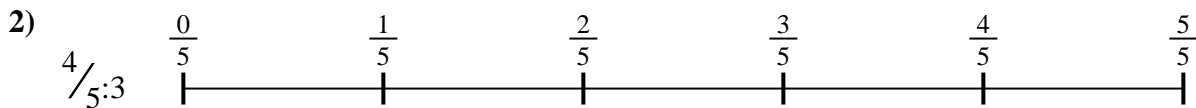


Usa la linea numerata per risolvere ogni problema. Il primo è un esempio.

Risposte

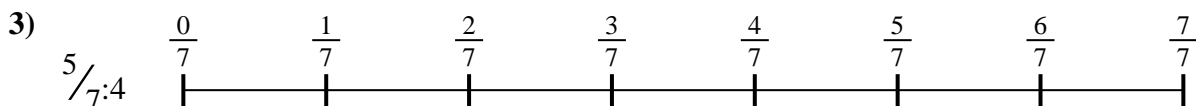
1. _____

2. _____



3. _____

4. _____



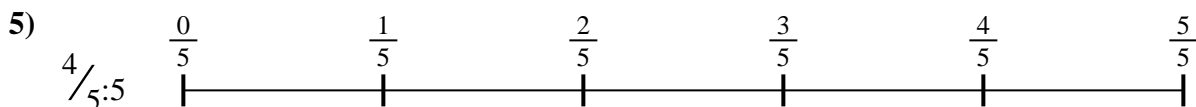
5. _____

6. _____

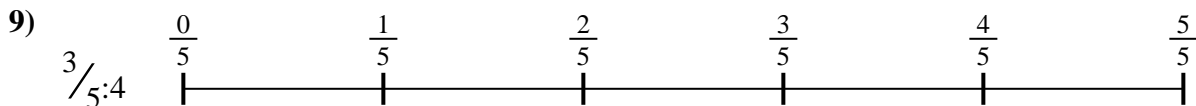
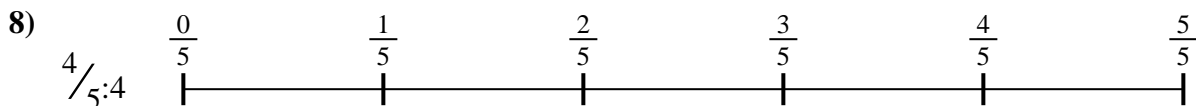


7. _____

8. _____

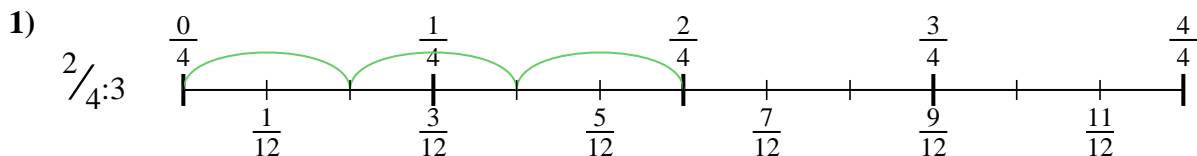


9. _____

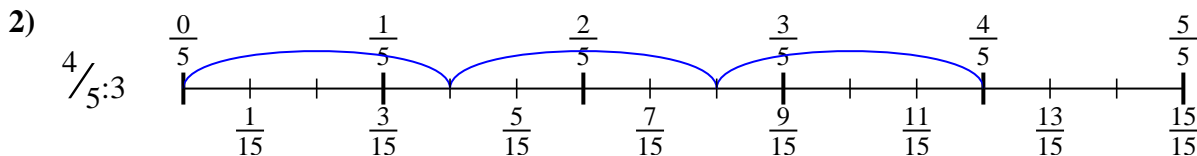




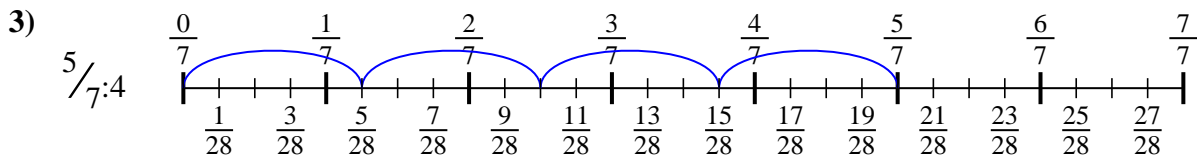
Usa la linea numerata per risolvere ogni problema. Il primo è un esempio.

Risposte

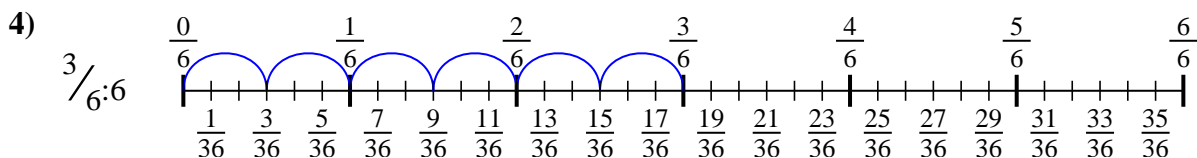
1. $\frac{2}{12}$



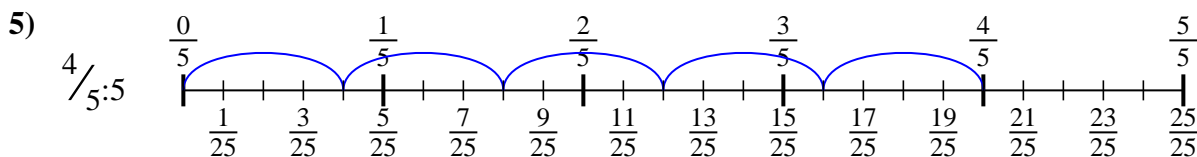
2. $\frac{4}{15}$



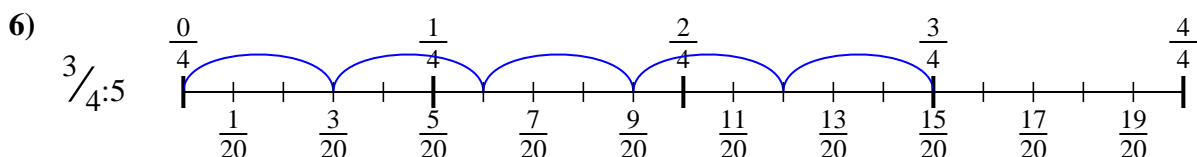
3. $\frac{5}{28}$



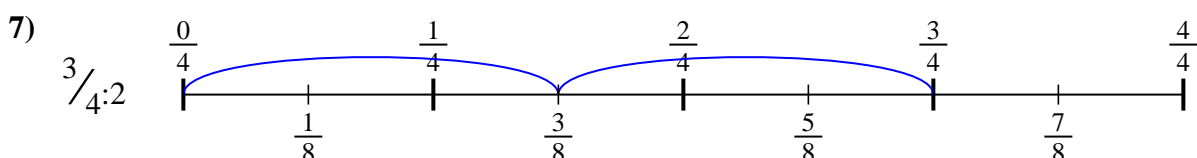
4. $\frac{3}{36}$



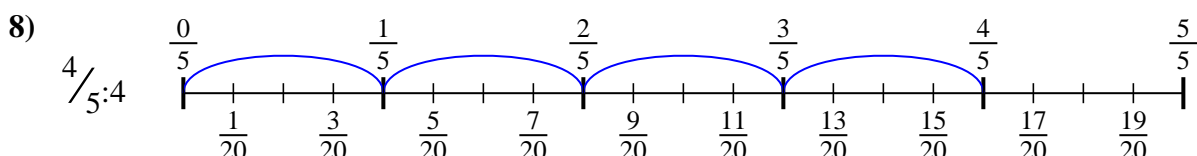
5. $\frac{4}{25}$



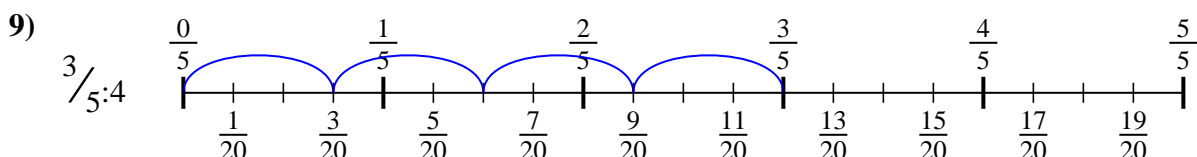
6. $\frac{3}{20}$



7. $\frac{3}{8}$



8. $\frac{4}{20}$



9. $\frac{3}{20}$



Usa la linea numerata per risolvere ogni problema. Il primo è un esempio.

Risposte

$\frac{3}{20}$

$\frac{3}{20}$

$\frac{3}{36}$

$\frac{4}{15}$

$\frac{4}{20}$

$\frac{3}{8}$

$\frac{2}{12}$

$\frac{4}{25}$

$\frac{5}{28}$

1. _____

2. _____

3. _____

4. _____

5. _____

6. _____

7. _____

8. _____

9. _____

