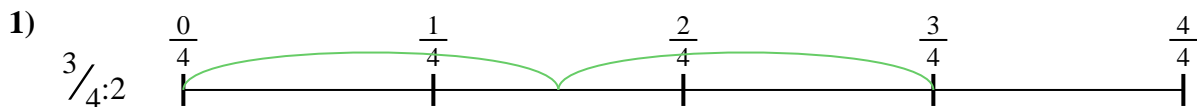





Usa la linea numerata per risolvere ogni problema. Il primo è un esempio.

**Risposte**

1. \_\_\_\_\_

2. \_\_\_\_\_



3. \_\_\_\_\_

4. \_\_\_\_\_



5. \_\_\_\_\_

6. \_\_\_\_\_


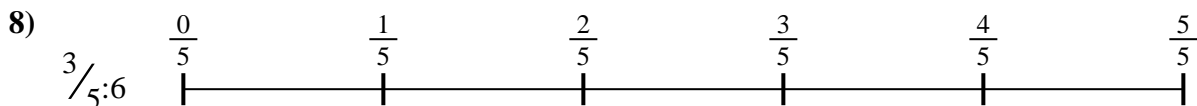
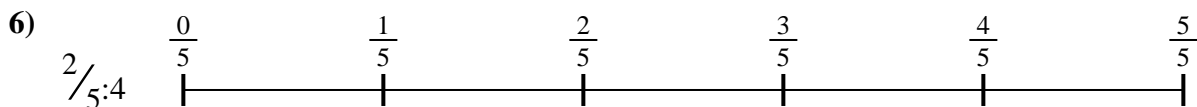


7. \_\_\_\_\_

8. \_\_\_\_\_

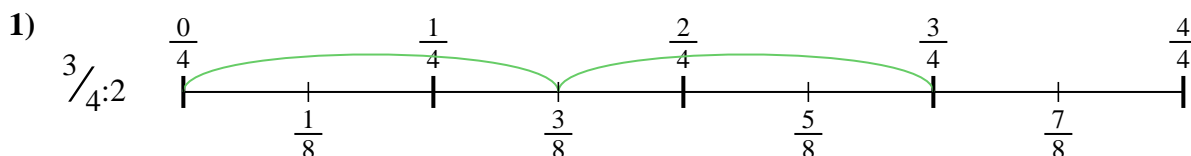


9. \_\_\_\_\_

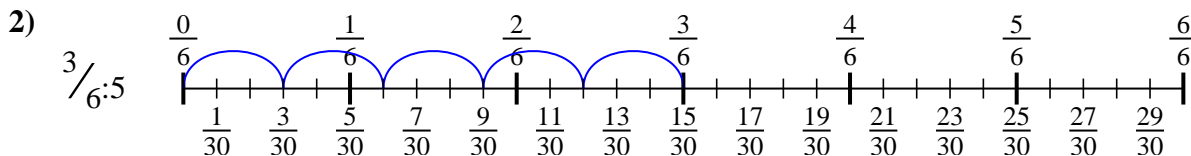




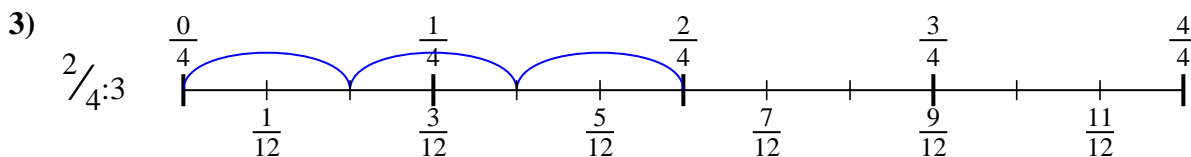
Usa la linea numerata per risolvere ogni problema. Il primo è un esempio.

**Risposte**

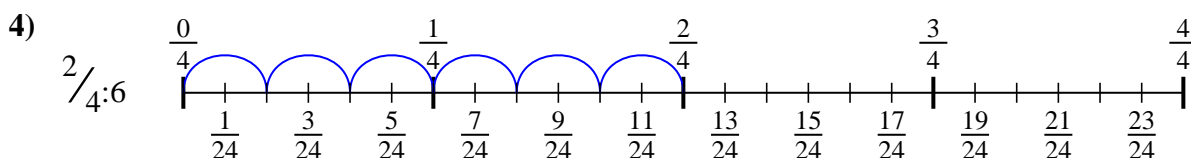
1.  $\frac{3}{8}$



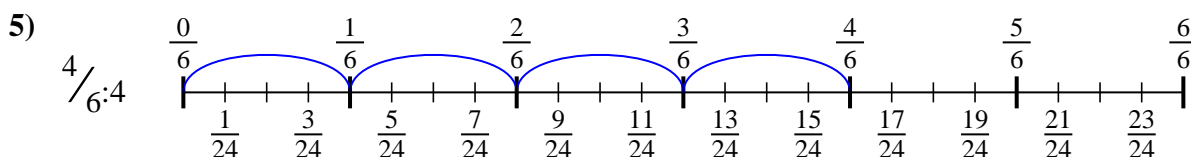
2.  $\frac{3}{30}$



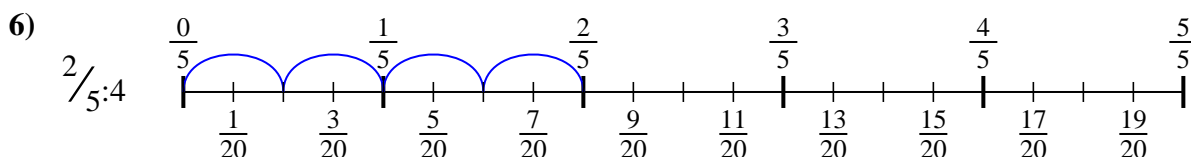
3.  $\frac{2}{12}$



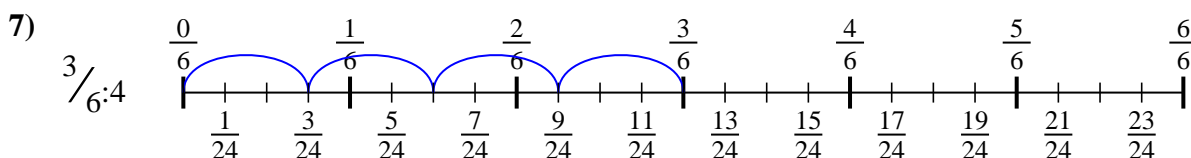
4.  $\frac{2}{24}$



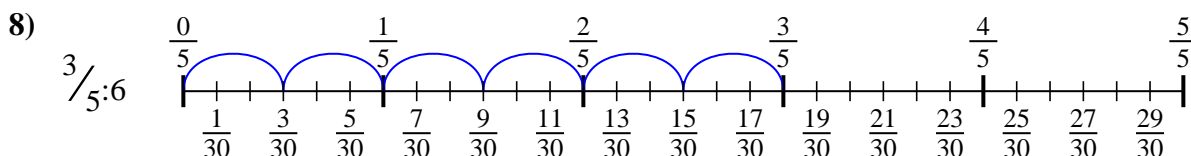
5.  $\frac{4}{24}$



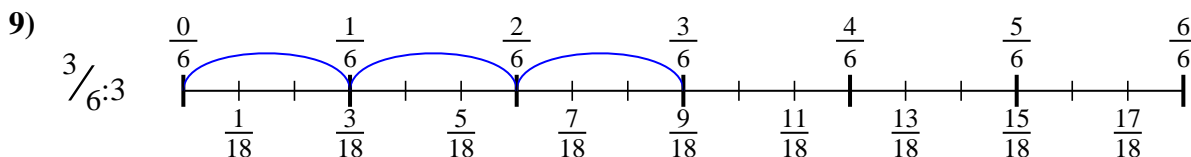
6.  $\frac{2}{20}$



7.  $\frac{3}{24}$



8.  $\frac{3}{30}$



9.  $\frac{3}{18}$



Usa la linea numerata per risolvere ogni problema. Il primo è un esempio.

**Risposte**

$\frac{3}{24}$

$\frac{3}{30}$

$\frac{2}{20}$

$\frac{3}{30}$

$\frac{4}{24}$

$\frac{2}{12}$

$\frac{3}{8}$

$\frac{2}{24}$

$\frac{3}{18}$

1. \_\_\_\_\_

2. \_\_\_\_\_

3. \_\_\_\_\_

4. \_\_\_\_\_

5. \_\_\_\_\_

6. \_\_\_\_\_

7. \_\_\_\_\_

8. \_\_\_\_\_

9. \_\_\_\_\_

