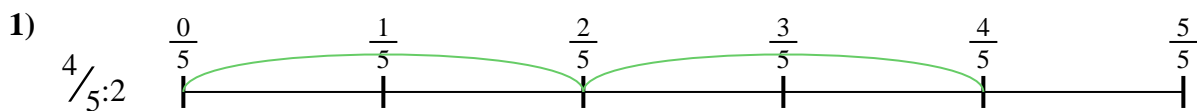





Usa la linea numerata per risolvere ogni problema. Il primo è un esempio.

**Risposte**

1. \_\_\_\_\_

2. \_\_\_\_\_



3. \_\_\_\_\_

4. \_\_\_\_\_



5. \_\_\_\_\_

6. \_\_\_\_\_


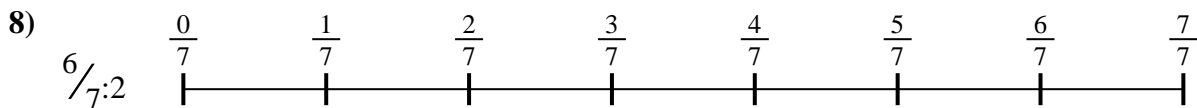
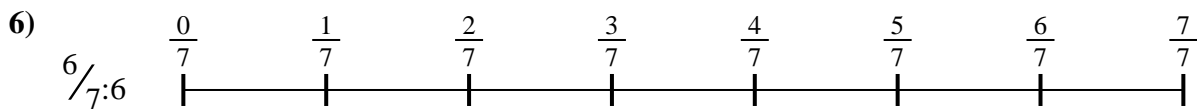


7. \_\_\_\_\_

8. \_\_\_\_\_

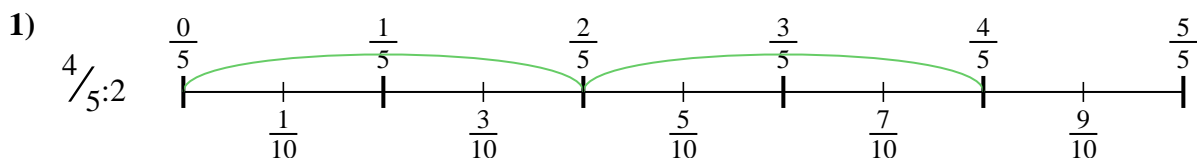


9. \_\_\_\_\_

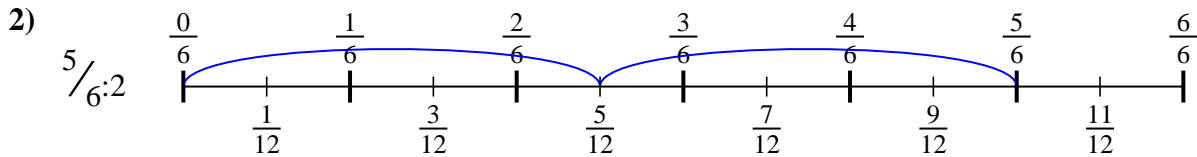




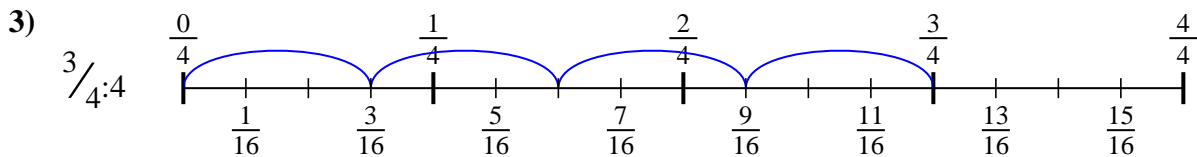
Usa la linea numerata per risolvere ogni problema. Il primo è un esempio.

**Risposte**

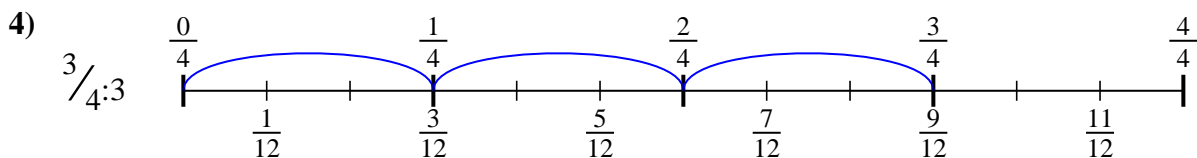
1.  $\frac{4}{10}$



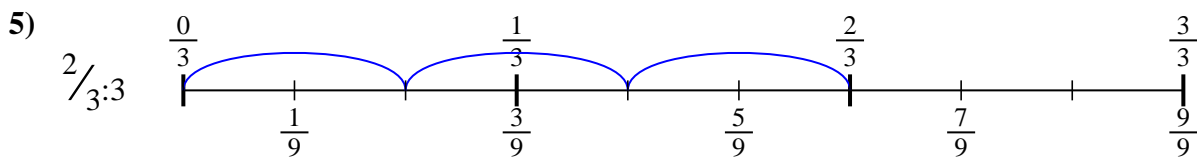
2.  $\frac{5}{12}$



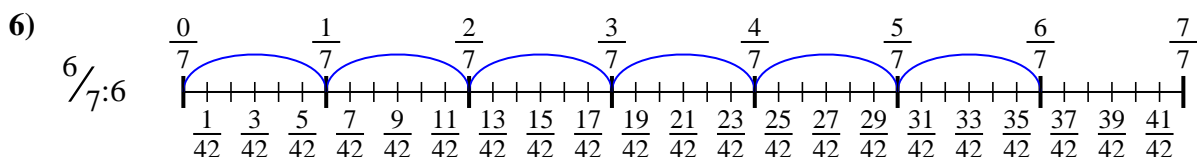
3.  $\frac{3}{16}$



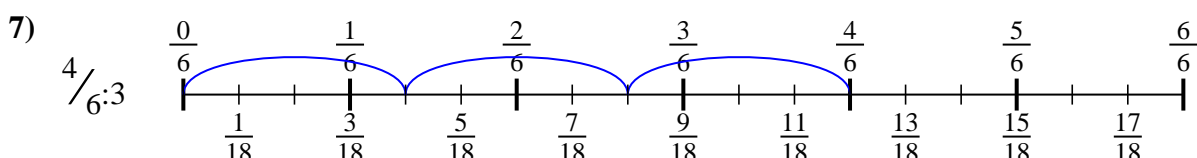
4.  $\frac{3}{12}$



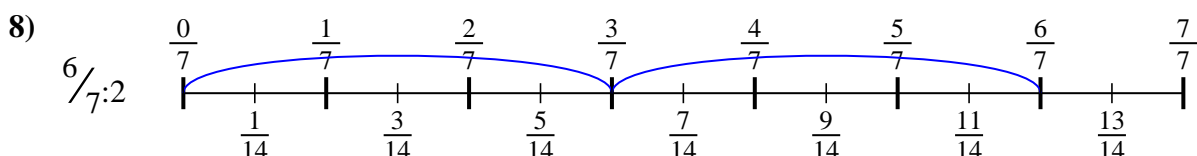
5.  $\frac{2}{9}$



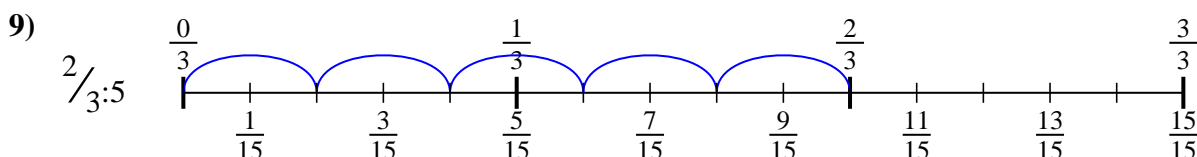
6.  $\frac{6}{42}$



7.  $\frac{4}{18}$



8.  $\frac{6}{14}$



9.  $\frac{2}{15}$



Usa la linea numerata per risolvere ogni problema. Il primo è un esempio.

**Risposte**

$\frac{6}{14}$

$\frac{4}{10}$

$\frac{3}{12}$

$\frac{2}{9}$

$\frac{2}{15}$

$\frac{6}{42}$

$\frac{4}{18}$

$\frac{3}{16}$

$\frac{5}{12}$

1. \_\_\_\_\_

2. \_\_\_\_\_

3. \_\_\_\_\_

4. \_\_\_\_\_

5. \_\_\_\_\_

6. \_\_\_\_\_

7. \_\_\_\_\_

8. \_\_\_\_\_

9. \_\_\_\_\_

