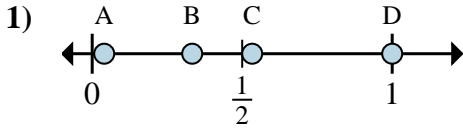


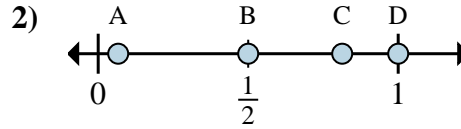


Determina quale lettera rappresenta correttamente la posizione della frazione sulla linea numerata.

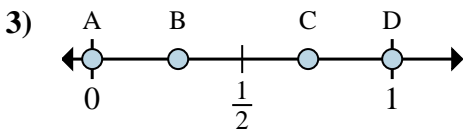
Risposte



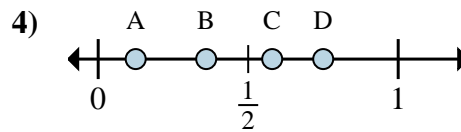
- a. Quale lettera rappresenta meglio $\frac{1}{3}$?
- b. Quale lettera rappresenta meglio $\frac{3}{3}$?



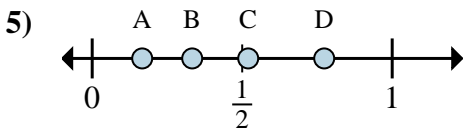
- a. Quale lettera rappresenta meglio $\frac{1}{2}$?
- b. Quale lettera rappresenta meglio $\frac{2}{2}$?



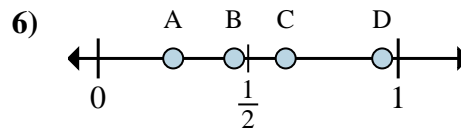
- a. Quale lettera rappresenta meglio $\frac{0}{6}$?
- b. Quale lettera rappresenta meglio $\frac{6}{6}$?



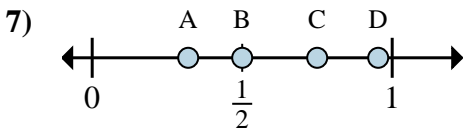
- a. Quale lettera rappresenta meglio $\frac{1}{8}$?
- b. Quale lettera rappresenta meglio $\frac{6}{8}$?



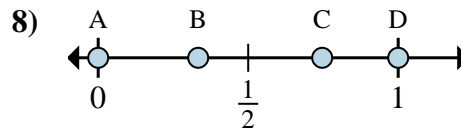
- a. Quale lettera rappresenta meglio $\frac{2}{6}$?
- b. Quale lettera rappresenta meglio $\frac{1}{6}$?



- a. Quale lettera rappresenta meglio $\frac{5}{8}$?
- b. Quale lettera rappresenta meglio $\frac{2}{8}$?



- a. Quale lettera rappresenta meglio $\frac{3}{4}$?
- b. Quale lettera rappresenta meglio $\frac{2}{4}$?



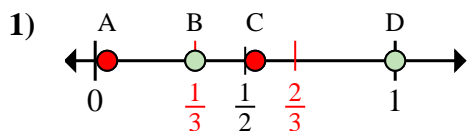
- a. Quale lettera rappresenta meglio $\frac{0}{6}$?
- b. Quale lettera rappresenta meglio $\frac{6}{6}$?

- 1. _____
- 2. _____
- 3. _____
- 4. _____
- 5. _____
- 6. _____
- 7. _____
- 8. _____

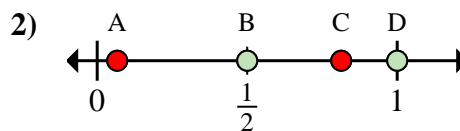


Determina quale lettera rappresenta correttamente la posizione della frazione sulla linea numerata.

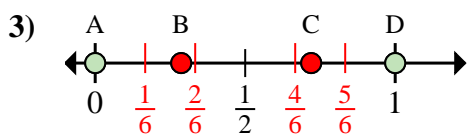
Risposte



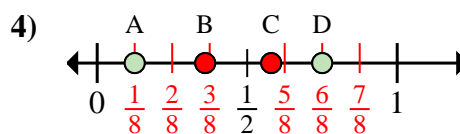
- a. Quale lettera rappresenta meglio $\frac{1}{3}$?
- b. Quale lettera rappresenta meglio $\frac{3}{3}$?



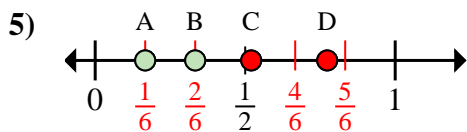
- a. Quale lettera rappresenta meglio $\frac{1}{2}$?
- b. Quale lettera rappresenta meglio $\frac{2}{2}$?



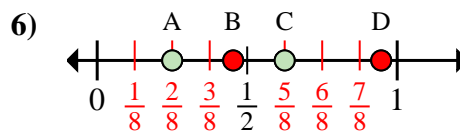
- a. Quale lettera rappresenta meglio $\frac{0}{6}$?
- b. Quale lettera rappresenta meglio $\frac{6}{6}$?



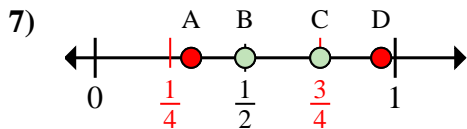
- a. Quale lettera rappresenta meglio $\frac{1}{8}$?
- b. Quale lettera rappresenta meglio $\frac{6}{8}$?



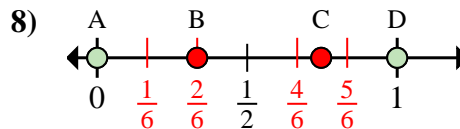
- a. Quale lettera rappresenta meglio $\frac{2}{6}$?
- b. Quale lettera rappresenta meglio $\frac{1}{6}$?



- a. Quale lettera rappresenta meglio $\frac{5}{8}$?
- b. Quale lettera rappresenta meglio $\frac{2}{8}$?



- a. Quale lettera rappresenta meglio $\frac{3}{4}$?
- b. Quale lettera rappresenta meglio $\frac{2}{4}$?



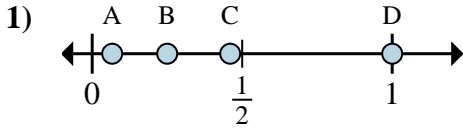
- a. Quale lettera rappresenta meglio $\frac{0}{6}$?
- b. Quale lettera rappresenta meglio $\frac{6}{6}$?

- 1. B D
- 2. B D
- 3. A D
- 4. A D
- 5. B A
- 6. C A
- 7. C B
- 8. A D

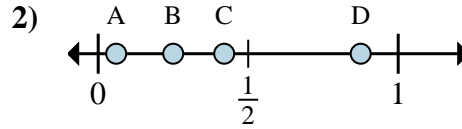


Determina quale lettera rappresenta correttamente la posizione della frazione sulla linea numerata.

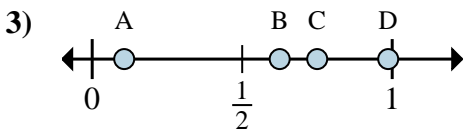
Risposte



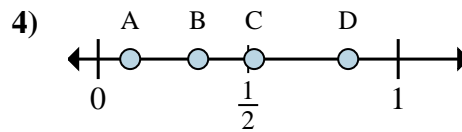
- a. Quale lettera rappresenta meglio $\frac{4}{4}$?
- b. Quale lettera rappresenta meglio $\frac{1}{4}$?



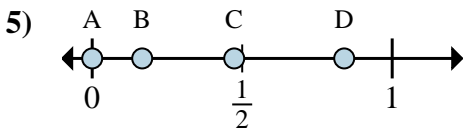
- a. Quale lettera rappresenta meglio $\frac{7}{8}$?
- b. Quale lettera rappresenta meglio $\frac{2}{8}$?



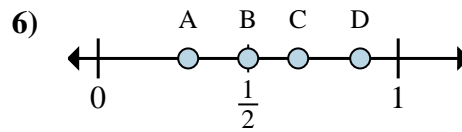
- a. Quale lettera rappresenta meglio $\frac{5}{8}$?
- b. Quale lettera rappresenta meglio $\frac{6}{8}$?



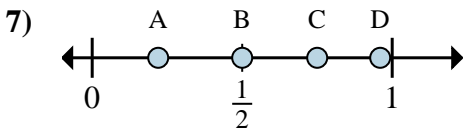
- a. Quale lettera rappresenta meglio $\frac{5}{6}$?
- b. Quale lettera rappresenta meglio $\frac{2}{6}$?



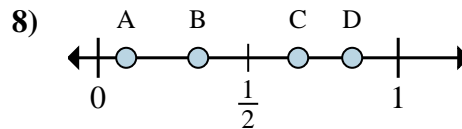
- a. Quale lettera rappresenta meglio $\frac{0}{6}$?
- b. Quale lettera rappresenta meglio $\frac{1}{6}$?



- a. Quale lettera rappresenta meglio $\frac{3}{6}$?
- b. Quale lettera rappresenta meglio $\frac{4}{6}$?



- a. Quale lettera rappresenta meglio $\frac{3}{4}$?
- b. Quale lettera rappresenta meglio $\frac{2}{4}$?



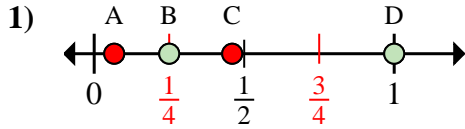
- a. Quale lettera rappresenta meglio $\frac{2}{3}$?
- b. Quale lettera rappresenta meglio $\frac{1}{3}$?

- 1. _____
- 2. _____
- 3. _____
- 4. _____
- 5. _____
- 6. _____
- 7. _____
- 8. _____

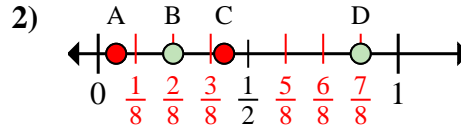


Determina quale lettera rappresenta correttamente la posizione della frazione sulla linea numerata.

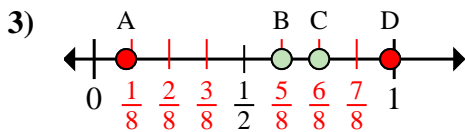
Risposte



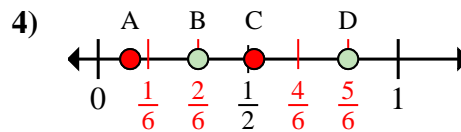
- a. Quale lettera rappresenta meglio $\frac{4}{4}$?
 b. Quale lettera rappresenta meglio $\frac{1}{4}$?



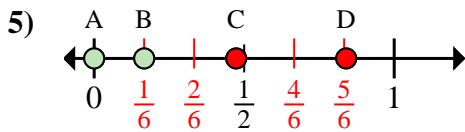
- a. Quale lettera rappresenta meglio $\frac{7}{8}$?
 b. Quale lettera rappresenta meglio $\frac{2}{8}$?



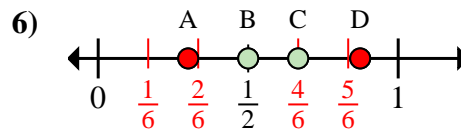
- a. Quale lettera rappresenta meglio $\frac{5}{8}$?
 b. Quale lettera rappresenta meglio $\frac{6}{8}$?



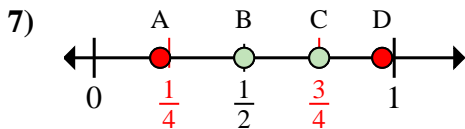
- a. Quale lettera rappresenta meglio $\frac{5}{6}$?
 b. Quale lettera rappresenta meglio $\frac{2}{6}$?



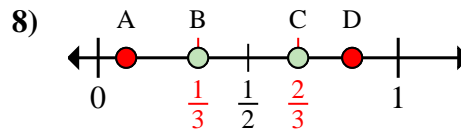
- a. Quale lettera rappresenta meglio $\frac{0}{6}$?
 b. Quale lettera rappresenta meglio $\frac{1}{6}$?



- a. Quale lettera rappresenta meglio $\frac{3}{6}$?
 b. Quale lettera rappresenta meglio $\frac{4}{6}$?



- a. Quale lettera rappresenta meglio $\frac{3}{4}$?
 b. Quale lettera rappresenta meglio $\frac{2}{4}$?



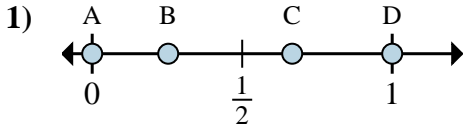
- a. Quale lettera rappresenta meglio $\frac{2}{3}$?
 b. Quale lettera rappresenta meglio $\frac{1}{3}$?

1. D B
 2. D B
 3. B C
 4. D B
 5. A B
 6. B C
 7. C B
 8. C B

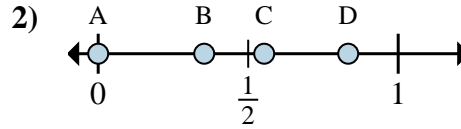


Determina quale lettera rappresenta correttamente la posizione della frazione sulla linea numerata.

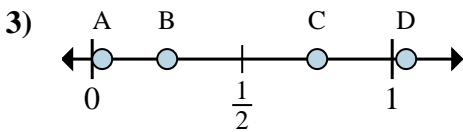
Risposte



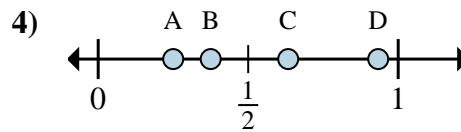
- a. Quale lettera rappresenta meglio $\frac{0}{3}$?
- b. Quale lettera rappresenta meglio $\frac{2}{3}$?



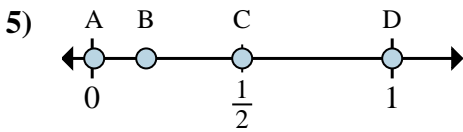
- a. Quale lettera rappresenta meglio $\frac{0}{6}$?
- b. Quale lettera rappresenta meglio $\frac{5}{6}$?



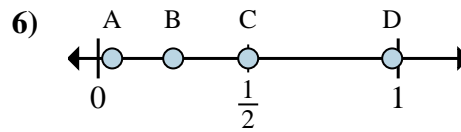
- a. Quale lettera rappresenta meglio $\frac{3}{4}$?
- b. Quale lettera rappresenta meglio $\frac{1}{4}$?



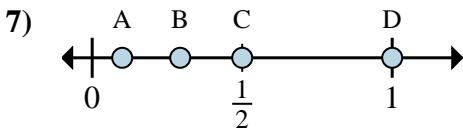
- a. Quale lettera rappresenta meglio $\frac{2}{8}$?
- b. Quale lettera rappresenta meglio $\frac{3}{8}$?



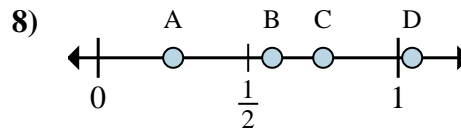
- a. Quale lettera rappresenta meglio $\frac{2}{4}$?
- b. Quale lettera rappresenta meglio $\frac{4}{4}$?



- a. Quale lettera rappresenta meglio $\frac{1}{4}$?
- b. Quale lettera rappresenta meglio $\frac{2}{4}$?



- a. Quale lettera rappresenta meglio $\frac{1}{2}$?
- b. Quale lettera rappresenta meglio $\frac{2}{2}$?



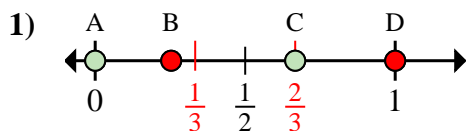
- a. Quale lettera rappresenta meglio $\frac{1}{4}$?
- b. Quale lettera rappresenta meglio $\frac{3}{4}$?

- 1. _____
- 2. _____
- 3. _____
- 4. _____
- 5. _____
- 6. _____
- 7. _____
- 8. _____

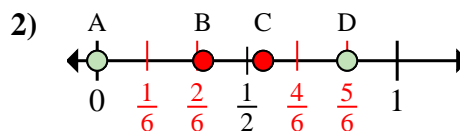


Determina quale lettera rappresenta correttamente la posizione della frazione sulla linea numerata.

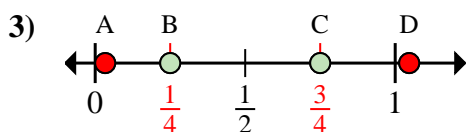
Risposte



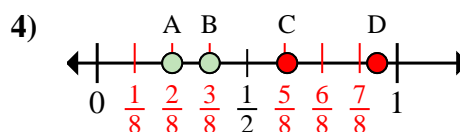
- a. Quale lettera rappresenta meglio $\frac{0}{3}$?
 b. Quale lettera rappresenta meglio $\frac{2}{3}$?



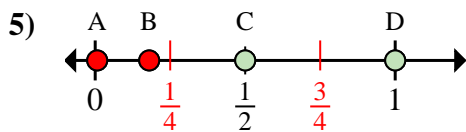
- a. Quale lettera rappresenta meglio $\frac{0}{6}$?
 b. Quale lettera rappresenta meglio $\frac{5}{6}$?



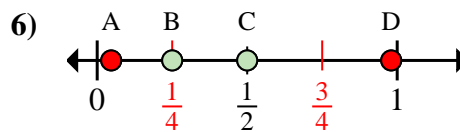
- a. Quale lettera rappresenta meglio $\frac{3}{4}$?
 b. Quale lettera rappresenta meglio $\frac{1}{4}$?



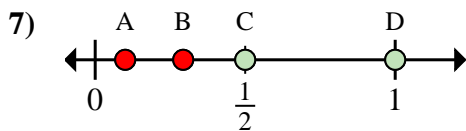
- a. Quale lettera rappresenta meglio $\frac{2}{8}$?
 b. Quale lettera rappresenta meglio $\frac{3}{8}$?



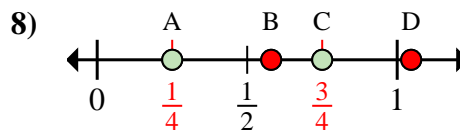
- a. Quale lettera rappresenta meglio $\frac{2}{4}$?
 b. Quale lettera rappresenta meglio $\frac{4}{4}$?



- a. Quale lettera rappresenta meglio $\frac{1}{4}$?
 b. Quale lettera rappresenta meglio $\frac{2}{4}$?



- a. Quale lettera rappresenta meglio $\frac{1}{2}$?
 b. Quale lettera rappresenta meglio $\frac{2}{2}$?



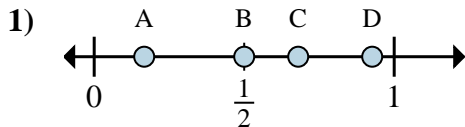
- a. Quale lettera rappresenta meglio $\frac{1}{4}$?
 b. Quale lettera rappresenta meglio $\frac{3}{4}$?

1. A C
 2. A D
 3. C B
 4. A B
 5. C D
 6. B C
 7. C D
 8. A C

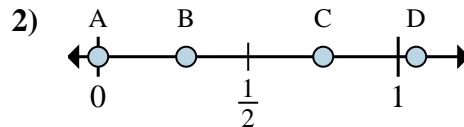


Determina quale lettera rappresenta correttamente la posizione della frazione sulla linea numerata.

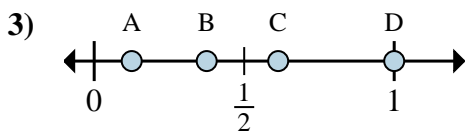
Risposte



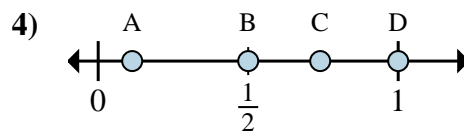
- a. Quale lettera rappresenta meglio $\frac{1}{6}$?
- b. Quale lettera rappresenta meglio $\frac{3}{6}$?



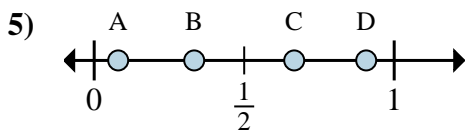
- a. Quale lettera rappresenta meglio $\frac{0}{4}$?
- b. Quale lettera rappresenta meglio $\frac{3}{4}$?



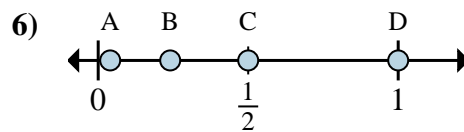
- a. Quale lettera rappresenta meglio $\frac{1}{8}$?
- b. Quale lettera rappresenta meglio $\frac{3}{8}$?



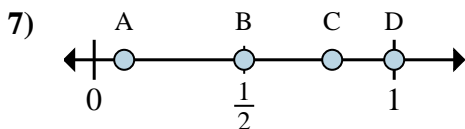
- a. Quale lettera rappresenta meglio $\frac{2}{2}$?
- b. Quale lettera rappresenta meglio $\frac{1}{2}$?



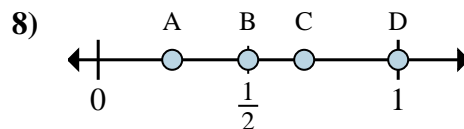
- a. Quale lettera rappresenta meglio $\frac{1}{3}$?
- b. Quale lettera rappresenta meglio $\frac{2}{3}$?



- a. Quale lettera rappresenta meglio $\frac{2}{2}$?
- b. Quale lettera rappresenta meglio $\frac{1}{2}$?



- a. Quale lettera rappresenta meglio $\frac{1}{2}$?
- b. Quale lettera rappresenta meglio $\frac{2}{2}$?



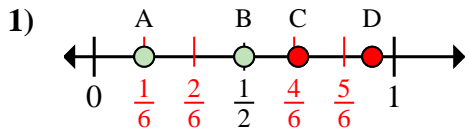
- a. Quale lettera rappresenta meglio $\frac{1}{2}$?
- b. Quale lettera rappresenta meglio $\frac{2}{2}$?

- 1. _____
- 2. _____
- 3. _____
- 4. _____
- 5. _____
- 6. _____
- 7. _____
- 8. _____

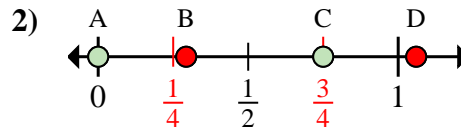


Determina quale lettera rappresenta correttamente la posizione della frazione sulla linea numerata.

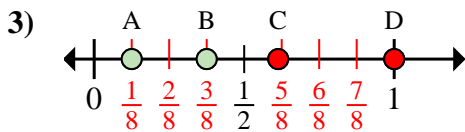
Risposte



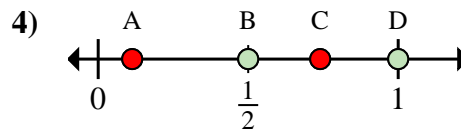
- a. Quale lettera rappresenta meglio $\frac{1}{6}$?
- b. Quale lettera rappresenta meglio $\frac{3}{6}$?



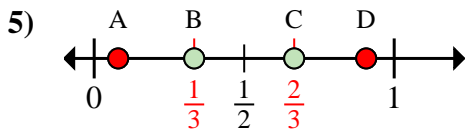
- a. Quale lettera rappresenta meglio $\frac{0}{4}$?
- b. Quale lettera rappresenta meglio $\frac{3}{4}$?



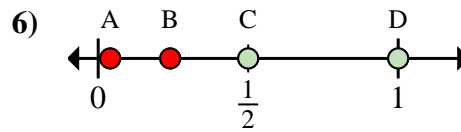
- a. Quale lettera rappresenta meglio $\frac{1}{8}$?
- b. Quale lettera rappresenta meglio $\frac{3}{8}$?



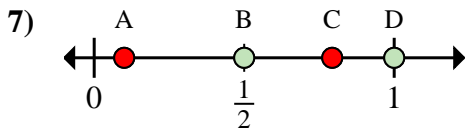
- a. Quale lettera rappresenta meglio $\frac{2}{2}$?
- b. Quale lettera rappresenta meglio $\frac{1}{2}$?



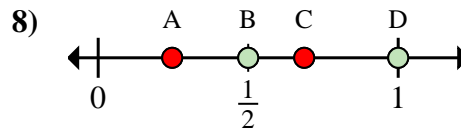
- a. Quale lettera rappresenta meglio $\frac{1}{3}$?
- b. Quale lettera rappresenta meglio $\frac{2}{3}$?



- a. Quale lettera rappresenta meglio $\frac{2}{2}$?
- b. Quale lettera rappresenta meglio $\frac{1}{2}$?



- a. Quale lettera rappresenta meglio $\frac{1}{2}$?
- b. Quale lettera rappresenta meglio $\frac{2}{2}$?



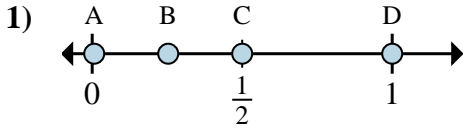
- a. Quale lettera rappresenta meglio $\frac{1}{2}$?
- b. Quale lettera rappresenta meglio $\frac{2}{2}$?

- 1. A B
- 2. A C
- 3. A B
- 4. D B
- 5. B C
- 6. D C
- 7. B D
- 8. B D

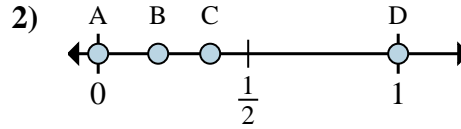


Determina quale lettera rappresenta correttamente la posizione della frazione sulla linea numerata.

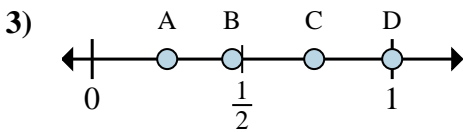
Risposte



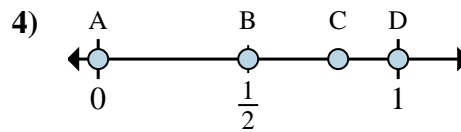
- a. Quale lettera rappresenta meglio $\frac{6}{6}$?
- b. Quale lettera rappresenta meglio $\frac{3}{6}$?



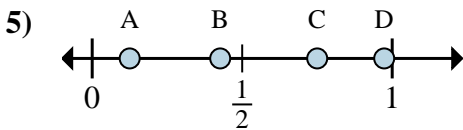
- a. Quale lettera rappresenta meglio $\frac{0}{2}$?
- b. Quale lettera rappresenta meglio $\frac{2}{2}$?



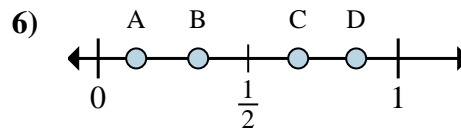
- a. Quale lettera rappresenta meglio $\frac{1}{4}$?
- b. Quale lettera rappresenta meglio $\frac{4}{4}$?



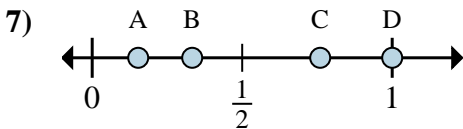
- a. Quale lettera rappresenta meglio $\frac{0}{3}$?
- b. Quale lettera rappresenta meglio $\frac{3}{3}$?



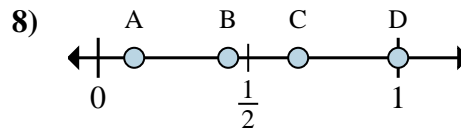
- a. Quale lettera rappresenta meglio $\frac{1}{8}$?
- b. Quale lettera rappresenta meglio $\frac{6}{8}$?



- a. Quale lettera rappresenta meglio $\frac{2}{3}$?
- b. Quale lettera rappresenta meglio $\frac{1}{3}$?



- a. Quale lettera rappresenta meglio $\frac{1}{3}$?
- b. Quale lettera rappresenta meglio $\frac{3}{3}$?



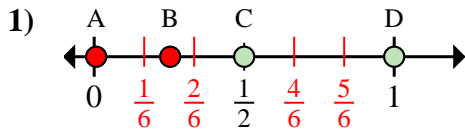
- a. Quale lettera rappresenta meglio $\frac{3}{3}$?
- b. Quale lettera rappresenta meglio $\frac{2}{3}$?

- 1. _____
- 2. _____
- 3. _____
- 4. _____
- 5. _____
- 6. _____
- 7. _____
- 8. _____

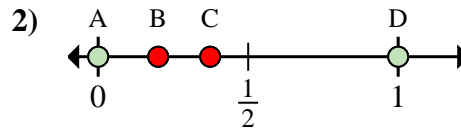


Determina quale lettera rappresenta correttamente la posizione della frazione sulla linea numerata.

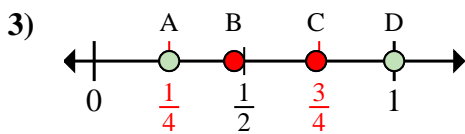
Risposte



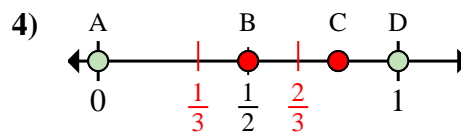
- a. Quale lettera rappresenta meglio $\frac{6}{6}$?
 b. Quale lettera rappresenta meglio $\frac{3}{6}$?



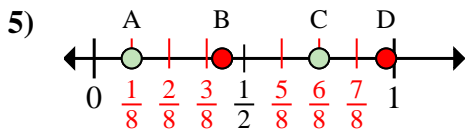
- a. Quale lettera rappresenta meglio $\frac{0}{2}$?
 b. Quale lettera rappresenta meglio $\frac{2}{2}$?



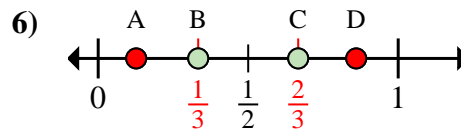
- a. Quale lettera rappresenta meglio $\frac{1}{4}$?
 b. Quale lettera rappresenta meglio $\frac{4}{4}$?



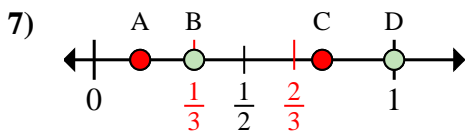
- a. Quale lettera rappresenta meglio $\frac{0}{3}$?
 b. Quale lettera rappresenta meglio $\frac{3}{3}$?



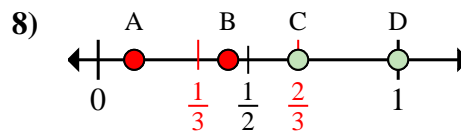
- a. Quale lettera rappresenta meglio $\frac{1}{8}$?
 b. Quale lettera rappresenta meglio $\frac{6}{8}$?



- a. Quale lettera rappresenta meglio $\frac{2}{3}$?
 b. Quale lettera rappresenta meglio $\frac{1}{3}$?



- a. Quale lettera rappresenta meglio $\frac{1}{3}$?
 b. Quale lettera rappresenta meglio $\frac{3}{3}$?



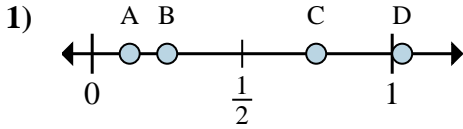
- a. Quale lettera rappresenta meglio $\frac{3}{3}$?
 b. Quale lettera rappresenta meglio $\frac{2}{3}$?

1. D C
 2. A D
 3. A D
 4. A D
 5. A C
 6. C B
 7. B D
 8. D C

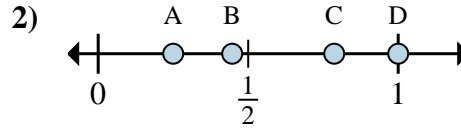


Determina quale lettera rappresenta correttamente la posizione della frazione sulla linea numerata.

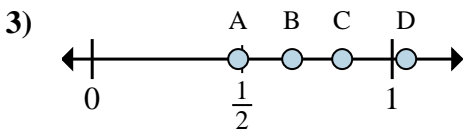
Risposte



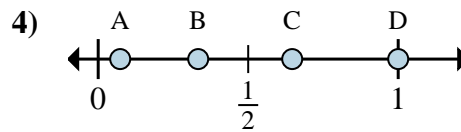
- a. Quale lettera rappresenta meglio $\frac{1}{8}$?
- b. Quale lettera rappresenta meglio $\frac{2}{8}$?



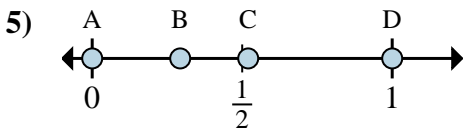
- a. Quale lettera rappresenta meglio $\frac{4}{4}$?
- b. Quale lettera rappresenta meglio $\frac{1}{4}$?



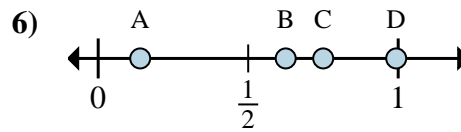
- a. Quale lettera rappresenta meglio $\frac{5}{6}$?
- b. Quale lettera rappresenta meglio $\frac{4}{6}$?



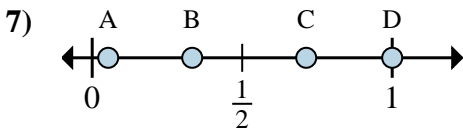
- a. Quale lettera rappresenta meglio $\frac{3}{3}$?
- b. Quale lettera rappresenta meglio $\frac{1}{3}$?



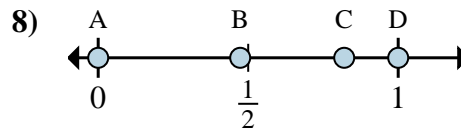
- a. Quale lettera rappresenta meglio $\frac{0}{2}$?
- b. Quale lettera rappresenta meglio $\frac{2}{2}$?



- a. Quale lettera rappresenta meglio $\frac{6}{8}$?
- b. Quale lettera rappresenta meglio $\frac{5}{8}$?



- a. Quale lettera rappresenta meglio $\frac{1}{3}$?
- b. Quale lettera rappresenta meglio $\frac{3}{3}$?



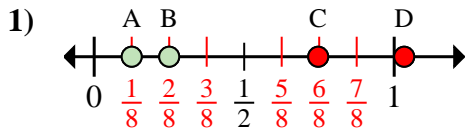
- a. Quale lettera rappresenta meglio $\frac{0}{2}$?
- b. Quale lettera rappresenta meglio $\frac{2}{2}$?

- 1. _____
- 2. _____
- 3. _____
- 4. _____
- 5. _____
- 6. _____
- 7. _____
- 8. _____

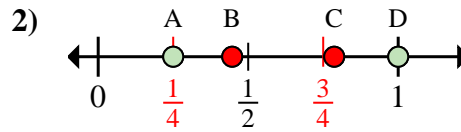


Determina quale lettera rappresenta correttamente la posizione della frazione sulla linea numerata.

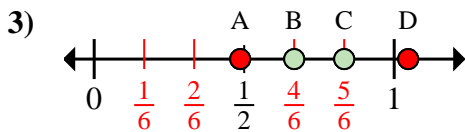
Risposte



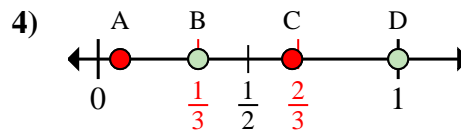
- a. Quale lettera rappresenta meglio $\frac{1}{8}$?
 b. Quale lettera rappresenta meglio $\frac{2}{8}$?



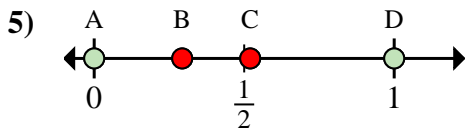
- a. Quale lettera rappresenta meglio $\frac{4}{4}$?
 b. Quale lettera rappresenta meglio $\frac{1}{4}$?



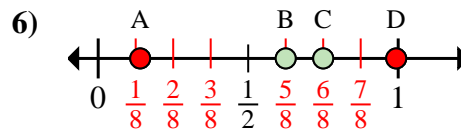
- a. Quale lettera rappresenta meglio $\frac{5}{6}$?
 b. Quale lettera rappresenta meglio $\frac{4}{6}$?



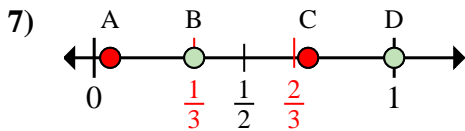
- a. Quale lettera rappresenta meglio $\frac{3}{3}$?
 b. Quale lettera rappresenta meglio $\frac{1}{3}$?



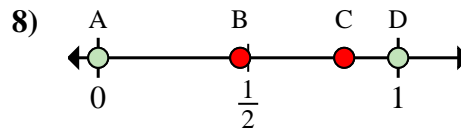
- a. Quale lettera rappresenta meglio $\frac{0}{2}$?
 b. Quale lettera rappresenta meglio $\frac{2}{2}$?



- a. Quale lettera rappresenta meglio $\frac{6}{8}$?
 b. Quale lettera rappresenta meglio $\frac{5}{8}$?



- a. Quale lettera rappresenta meglio $\frac{1}{3}$?
 b. Quale lettera rappresenta meglio $\frac{3}{3}$?



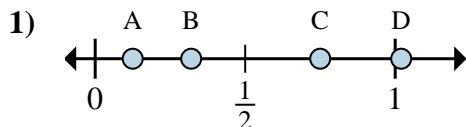
- a. Quale lettera rappresenta meglio $\frac{0}{2}$?
 b. Quale lettera rappresenta meglio $\frac{2}{2}$?

1. A B
 2. D A
 3. C B
 4. D B
 5. A D
 6. C B
 7. B D
 8. A D

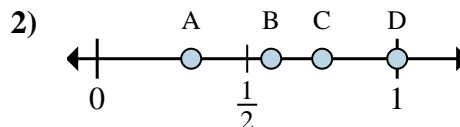


Determina quale lettera rappresenta correttamente la posizione della frazione sulla linea numerata.

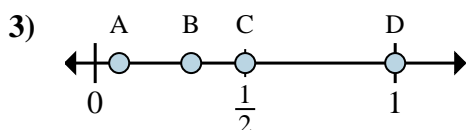
Risposte



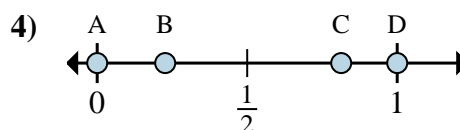
- a. Quale lettera rappresenta meglio $\frac{1}{8}$?
- b. Quale lettera rappresenta meglio $\frac{6}{8}$?



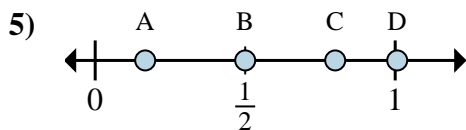
- a. Quale lettera rappresenta meglio $\frac{3}{4}$?
- b. Quale lettera rappresenta meglio $\frac{4}{4}$?



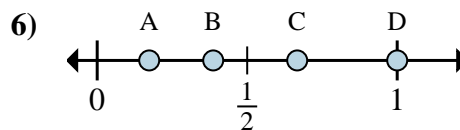
- a. Quale lettera rappresenta meglio $\frac{8}{8}$?
- b. Quale lettera rappresenta meglio $\frac{4}{8}$?



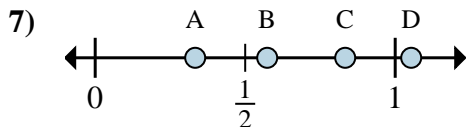
- a. Quale lettera rappresenta meglio $\frac{0}{2}$?
- b. Quale lettera rappresenta meglio $\frac{2}{2}$?



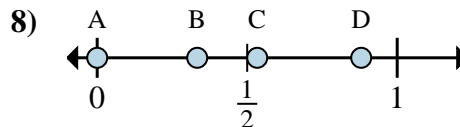
- a. Quale lettera rappresenta meglio $\frac{1}{6}$?
- b. Quale lettera rappresenta meglio $\frac{3}{6}$?



- a. Quale lettera rappresenta meglio $\frac{2}{3}$?
- b. Quale lettera rappresenta meglio $\frac{3}{3}$?



- a. Quale lettera rappresenta meglio $\frac{5}{6}$?
- b. Quale lettera rappresenta meglio $\frac{2}{6}$?



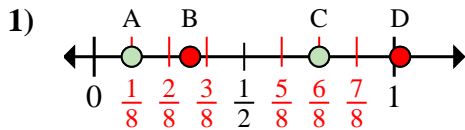
- a. Quale lettera rappresenta meglio $\frac{0}{3}$?
- b. Quale lettera rappresenta meglio $\frac{1}{3}$?

- 1. _____
- 2. _____
- 3. _____
- 4. _____
- 5. _____
- 6. _____
- 7. _____
- 8. _____

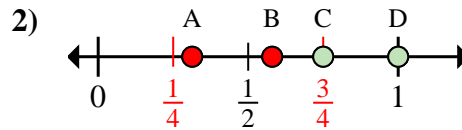


Determina quale lettera rappresenta correttamente la posizione della frazione sulla linea numerata.

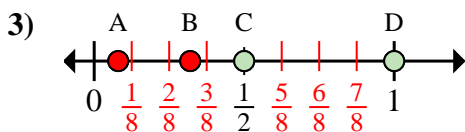
Risposte



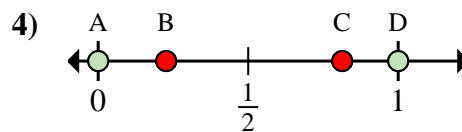
- a. Quale lettera rappresenta meglio $\frac{1}{8}$?
 b. Quale lettera rappresenta meglio $\frac{6}{8}$?



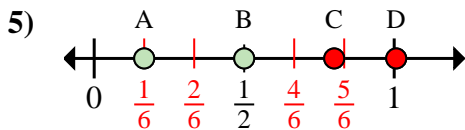
- a. Quale lettera rappresenta meglio $\frac{3}{4}$?
 b. Quale lettera rappresenta meglio $\frac{4}{4}$?



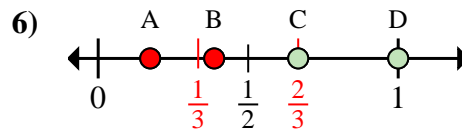
- a. Quale lettera rappresenta meglio $\frac{8}{8}$?
 b. Quale lettera rappresenta meglio $\frac{4}{8}$?



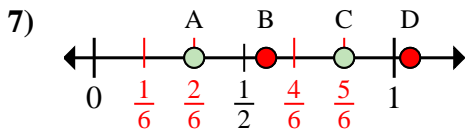
- a. Quale lettera rappresenta meglio $\frac{0}{2}$?
 b. Quale lettera rappresenta meglio $\frac{2}{2}$?



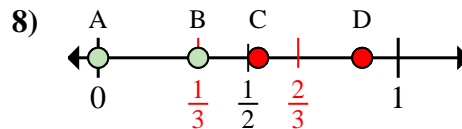
- a. Quale lettera rappresenta meglio $\frac{1}{6}$?
 b. Quale lettera rappresenta meglio $\frac{3}{6}$?



- a. Quale lettera rappresenta meglio $\frac{2}{3}$?
 b. Quale lettera rappresenta meglio $\frac{3}{3}$?



- a. Quale lettera rappresenta meglio $\frac{5}{6}$?
 b. Quale lettera rappresenta meglio $\frac{2}{6}$?



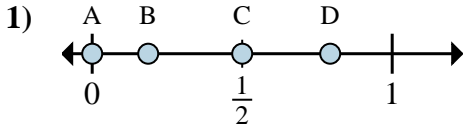
- a. Quale lettera rappresenta meglio $\frac{0}{3}$?
 b. Quale lettera rappresenta meglio $\frac{1}{3}$?

1. A C
 2. C D
 3. D C
 4. A D
 5. A B
 6. C D
 7. C A
 8. A B

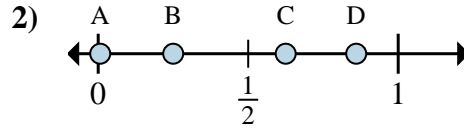


Determina quale lettera rappresenta correttamente la posizione della frazione sulla linea numerata.

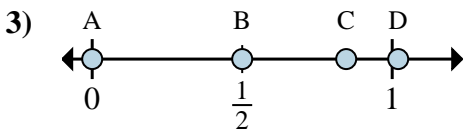
Risposte



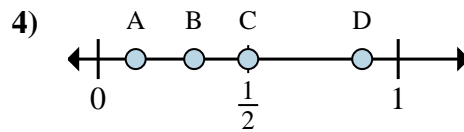
- a. Quale lettera rappresenta meglio $\frac{0}{2}$?
- b. Quale lettera rappresenta meglio $\frac{1}{2}$?



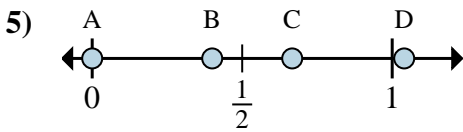
- a. Quale lettera rappresenta meglio $\frac{2}{8}$?
- b. Quale lettera rappresenta meglio $\frac{5}{8}$?



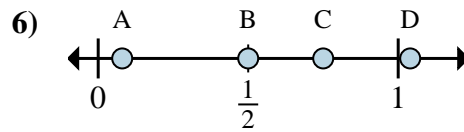
- a. Quale lettera rappresenta meglio $\frac{0}{6}$?
- b. Quale lettera rappresenta meglio $\frac{3}{6}$?



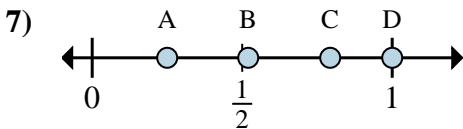
- a. Quale lettera rappresenta meglio $\frac{1}{8}$?
- b. Quale lettera rappresenta meglio $\frac{4}{8}$?



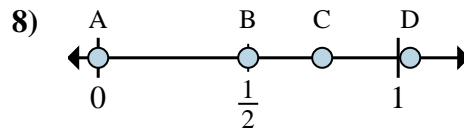
- a. Quale lettera rappresenta meglio $\frac{0}{3}$?
- b. Quale lettera rappresenta meglio $\frac{2}{3}$?



- a. Quale lettera rappresenta meglio $\frac{2}{4}$?
- b. Quale lettera rappresenta meglio $\frac{3}{4}$?



- a. Quale lettera rappresenta meglio $\frac{1}{4}$?
- b. Quale lettera rappresenta meglio $\frac{4}{4}$?



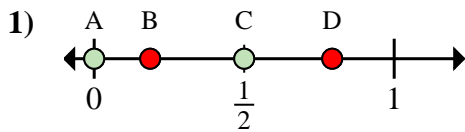
- a. Quale lettera rappresenta meglio $\frac{0}{2}$?
- b. Quale lettera rappresenta meglio $\frac{1}{2}$?

- 1. _____
- 2. _____
- 3. _____
- 4. _____
- 5. _____
- 6. _____
- 7. _____
- 8. _____

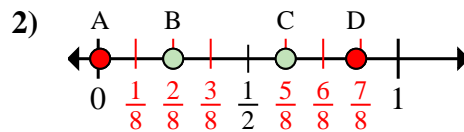


Determina quale lettera rappresenta correttamente la posizione della frazione sulla linea numerata.

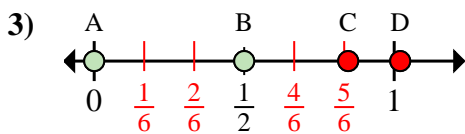
Risposte



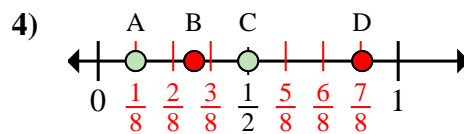
- a. Quale lettera rappresenta meglio $\frac{0}{2}$?
 b. Quale lettera rappresenta meglio $\frac{1}{2}$?



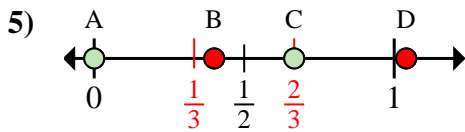
- a. Quale lettera rappresenta meglio $\frac{2}{8}$?
 b. Quale lettera rappresenta meglio $\frac{5}{8}$?



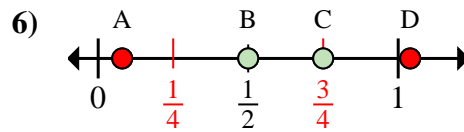
- a. Quale lettera rappresenta meglio $\frac{0}{6}$?
 b. Quale lettera rappresenta meglio $\frac{3}{6}$?



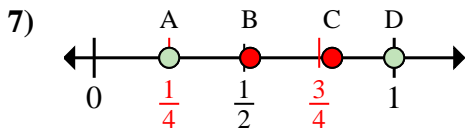
- a. Quale lettera rappresenta meglio $\frac{1}{8}$?
 b. Quale lettera rappresenta meglio $\frac{4}{8}$?



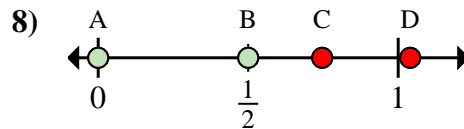
- a. Quale lettera rappresenta meglio $\frac{0}{3}$?
 b. Quale lettera rappresenta meglio $\frac{2}{3}$?



- a. Quale lettera rappresenta meglio $\frac{2}{4}$?
 b. Quale lettera rappresenta meglio $\frac{3}{4}$?



- a. Quale lettera rappresenta meglio $\frac{1}{4}$?
 b. Quale lettera rappresenta meglio $\frac{4}{4}$?



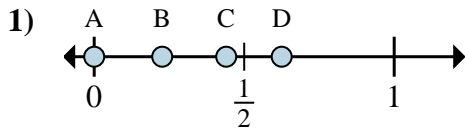
- a. Quale lettera rappresenta meglio $\frac{0}{2}$?
 b. Quale lettera rappresenta meglio $\frac{1}{2}$?

1. A C
 2. B C
 3. A B
 4. A C
 5. A C
 6. B C
 7. A D
 8. A B

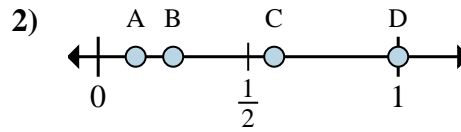


Determina quale lettera rappresenta correttamente la posizione della frazione sulla linea numerata.

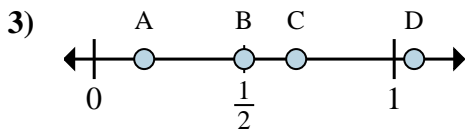
Risposte



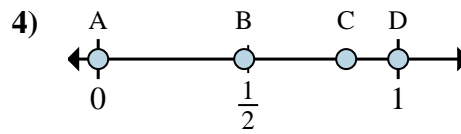
- a. Quale lettera rappresenta meglio $\frac{0}{8}$?
- b. Quale lettera rappresenta meglio $\frac{5}{8}$?



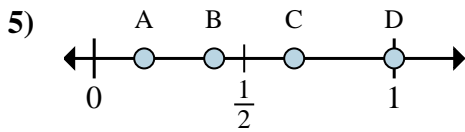
- a. Quale lettera rappresenta meglio $\frac{1}{8}$?
- b. Quale lettera rappresenta meglio $\frac{2}{8}$?



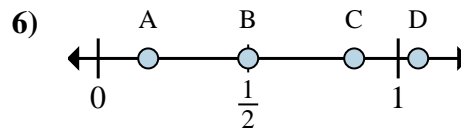
- a. Quale lettera rappresenta meglio $\frac{1}{6}$?
- b. Quale lettera rappresenta meglio $\frac{3}{6}$?



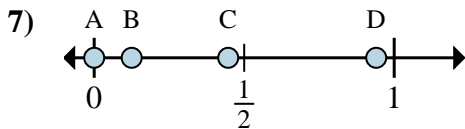
- a. Quale lettera rappresenta meglio $\frac{0}{2}$?
- b. Quale lettera rappresenta meglio $\frac{2}{2}$?



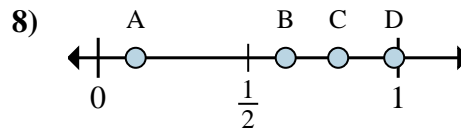
- a. Quale lettera rappresenta meglio $\frac{3}{3}$?
- b. Quale lettera rappresenta meglio $\frac{2}{3}$?



- a. Quale lettera rappresenta meglio $\frac{3}{6}$?
- b. Quale lettera rappresenta meglio $\frac{1}{6}$?



- a. Quale lettera rappresenta meglio $\frac{0}{8}$?
- b. Quale lettera rappresenta meglio $\frac{1}{8}$?



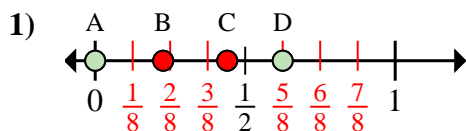
- a. Quale lettera rappresenta meglio $\frac{5}{8}$?
- b. Quale lettera rappresenta meglio $\frac{1}{8}$?

- 1. _____
- 2. _____
- 3. _____
- 4. _____
- 5. _____
- 6. _____
- 7. _____
- 8. _____

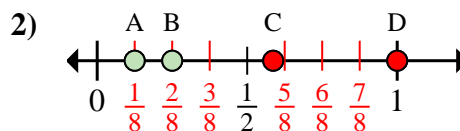


Determina quale lettera rappresenta correttamente la posizione della frazione sulla linea numerata.

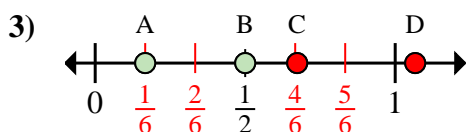
Risposte



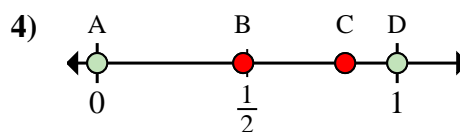
- a. Quale lettera rappresenta meglio $\frac{0}{8}$?
 b. Quale lettera rappresenta meglio $\frac{5}{8}$?



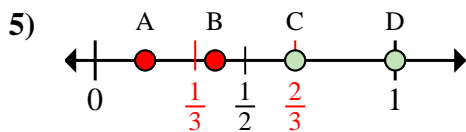
- a. Quale lettera rappresenta meglio $\frac{1}{8}$?
 b. Quale lettera rappresenta meglio $\frac{2}{8}$?



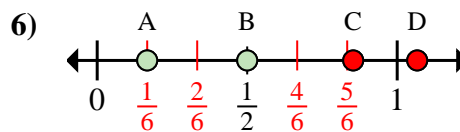
- a. Quale lettera rappresenta meglio $\frac{1}{6}$?
 b. Quale lettera rappresenta meglio $\frac{3}{6}$?



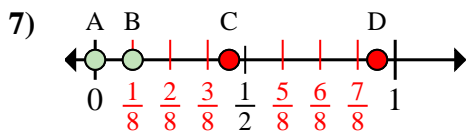
- a. Quale lettera rappresenta meglio $\frac{0}{2}$?
 b. Quale lettera rappresenta meglio $\frac{2}{2}$?



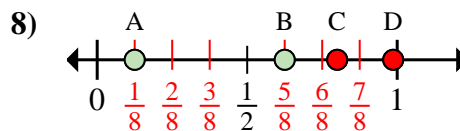
- a. Quale lettera rappresenta meglio $\frac{3}{3}$?
 b. Quale lettera rappresenta meglio $\frac{2}{3}$?



- a. Quale lettera rappresenta meglio $\frac{3}{6}$?
 b. Quale lettera rappresenta meglio $\frac{1}{6}$?



- a. Quale lettera rappresenta meglio $\frac{0}{8}$?
 b. Quale lettera rappresenta meglio $\frac{1}{8}$?



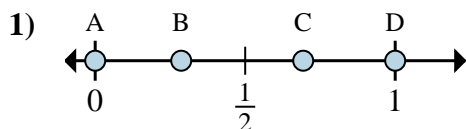
- a. Quale lettera rappresenta meglio $\frac{5}{8}$?
 b. Quale lettera rappresenta meglio $\frac{1}{8}$?

1. A D
 2. A B
 3. A B
 4. A D
 5. D C
 6. B A
 7. A B
 8. B A

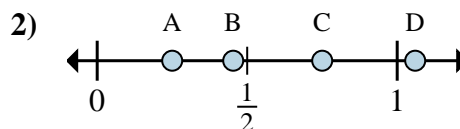


Determina quale lettera rappresenta correttamente la posizione della frazione sulla linea numerata.

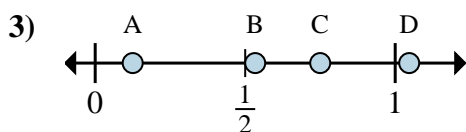
Risposte



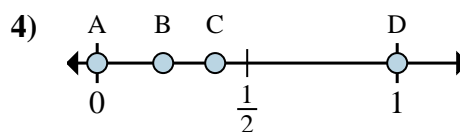
- a. Quale lettera rappresenta meglio $\frac{0}{2}$?
- b. Quale lettera rappresenta meglio $\frac{2}{2}$?



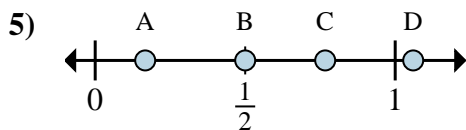
- a. Quale lettera rappresenta meglio $\frac{1}{4}$?
- b. Quale lettera rappresenta meglio $\frac{3}{4}$?



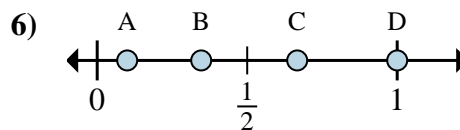
- a. Quale lettera rappresenta meglio $\frac{6}{8}$?
- b. Quale lettera rappresenta meglio $\frac{1}{8}$?



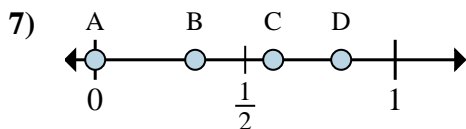
- a. Quale lettera rappresenta meglio $\frac{0}{2}$?
- b. Quale lettera rappresenta meglio $\frac{2}{2}$?



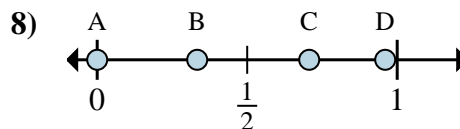
- a. Quale lettera rappresenta meglio $\frac{3}{6}$?
- b. Quale lettera rappresenta meglio $\frac{1}{6}$?



- a. Quale lettera rappresenta meglio $\frac{2}{3}$?
- b. Quale lettera rappresenta meglio $\frac{3}{3}$?



- a. Quale lettera rappresenta meglio $\frac{0}{3}$?
- b. Quale lettera rappresenta meglio $\frac{1}{3}$?



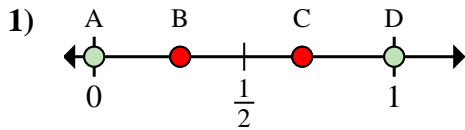
- a. Quale lettera rappresenta meglio $\frac{0}{6}$?
- b. Quale lettera rappresenta meglio $\frac{2}{6}$?

- 1. _____
- 2. _____
- 3. _____
- 4. _____
- 5. _____
- 6. _____
- 7. _____
- 8. _____

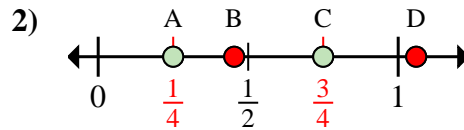


Determina quale lettera rappresenta correttamente la posizione della frazione sulla linea numerata.

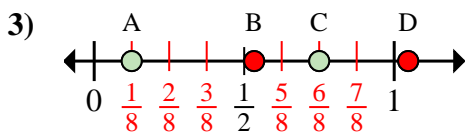
Risposte



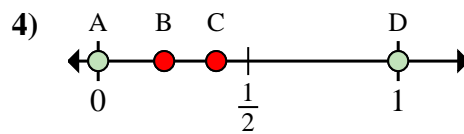
- a. Quale lettera rappresenta meglio $\frac{0}{2}$?
 b. Quale lettera rappresenta meglio $\frac{2}{2}$?



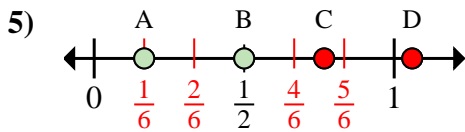
- a. Quale lettera rappresenta meglio $\frac{1}{4}$?
 b. Quale lettera rappresenta meglio $\frac{3}{4}$?



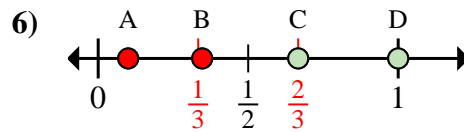
- a. Quale lettera rappresenta meglio $\frac{6}{8}$?
 b. Quale lettera rappresenta meglio $\frac{1}{8}$?



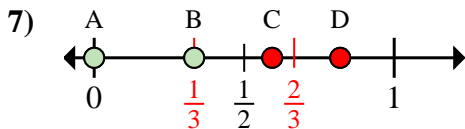
- a. Quale lettera rappresenta meglio $\frac{0}{2}$?
 b. Quale lettera rappresenta meglio $\frac{2}{2}$?



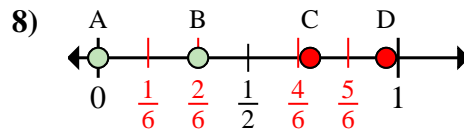
- a. Quale lettera rappresenta meglio $\frac{3}{6}$?
 b. Quale lettera rappresenta meglio $\frac{1}{6}$?



- a. Quale lettera rappresenta meglio $\frac{2}{3}$?
 b. Quale lettera rappresenta meglio $\frac{3}{3}$?



- a. Quale lettera rappresenta meglio $\frac{0}{3}$?
 b. Quale lettera rappresenta meglio $\frac{1}{3}$?



- a. Quale lettera rappresenta meglio $\frac{0}{6}$?
 b. Quale lettera rappresenta meglio $\frac{2}{6}$?

1. A D
 2. A C
 3. C A
 4. A D
 5. B A
 6. C D
 7. A B
 8. A B