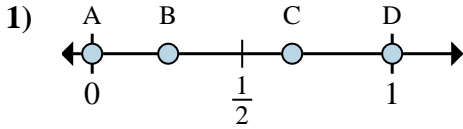


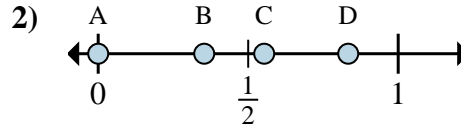


Determina quale lettera rappresenta correttamente la posizione della frazione sulla linea numerata.

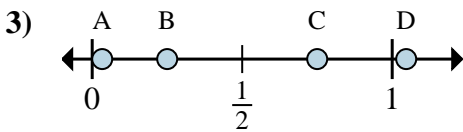
Risposte



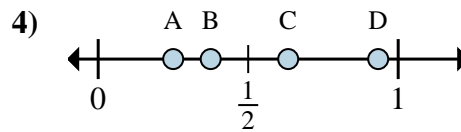
- a. Quale lettera rappresenta meglio $\frac{0}{3}$?
- b. Quale lettera rappresenta meglio $\frac{2}{3}$?



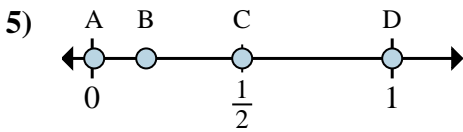
- a. Quale lettera rappresenta meglio $\frac{0}{6}$?
- b. Quale lettera rappresenta meglio $\frac{5}{6}$?



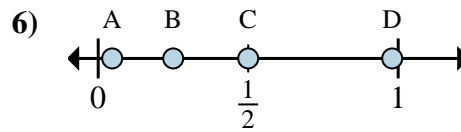
- a. Quale lettera rappresenta meglio $\frac{3}{4}$?
- b. Quale lettera rappresenta meglio $\frac{1}{4}$?



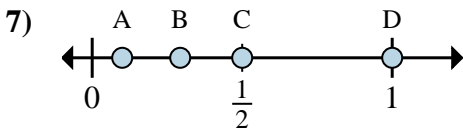
- a. Quale lettera rappresenta meglio $\frac{2}{8}$?
- b. Quale lettera rappresenta meglio $\frac{3}{8}$?



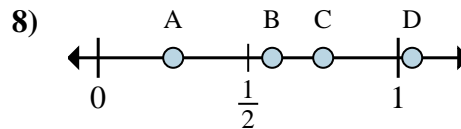
- a. Quale lettera rappresenta meglio $\frac{2}{4}$?
- b. Quale lettera rappresenta meglio $\frac{4}{4}$?



- a. Quale lettera rappresenta meglio $\frac{1}{4}$?
- b. Quale lettera rappresenta meglio $\frac{2}{4}$?



- a. Quale lettera rappresenta meglio $\frac{1}{2}$?
- b. Quale lettera rappresenta meglio $\frac{2}{2}$?



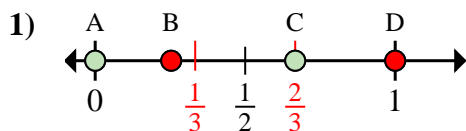
- a. Quale lettera rappresenta meglio $\frac{1}{4}$?
- b. Quale lettera rappresenta meglio $\frac{3}{4}$?

- 1. _____
- 2. _____
- 3. _____
- 4. _____
- 5. _____
- 6. _____
- 7. _____
- 8. _____

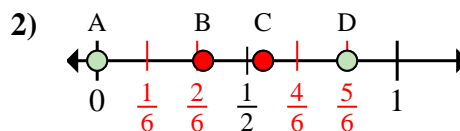


Determina quale lettera rappresenta correttamente la posizione della frazione sulla linea numerata.

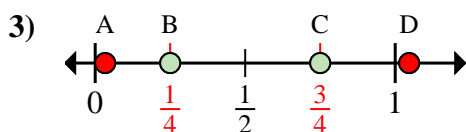
Risposte



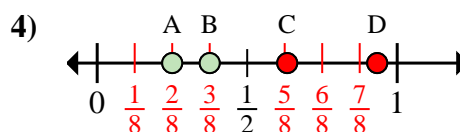
- a. Quale lettera rappresenta meglio $\frac{0}{3}$?
 b. Quale lettera rappresenta meglio $\frac{2}{3}$?



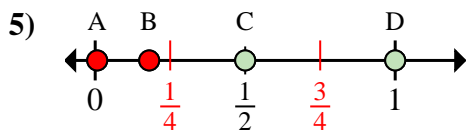
- a. Quale lettera rappresenta meglio $\frac{0}{6}$?
 b. Quale lettera rappresenta meglio $\frac{5}{6}$?



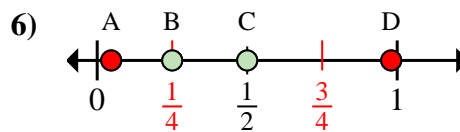
- a. Quale lettera rappresenta meglio $\frac{3}{4}$?
 b. Quale lettera rappresenta meglio $\frac{1}{4}$?



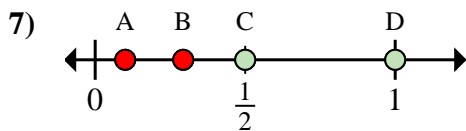
- a. Quale lettera rappresenta meglio $\frac{2}{8}$?
 b. Quale lettera rappresenta meglio $\frac{3}{8}$?



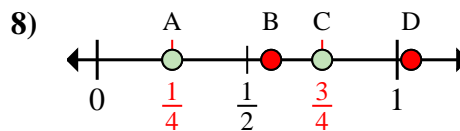
- a. Quale lettera rappresenta meglio $\frac{2}{4}$?
 b. Quale lettera rappresenta meglio $\frac{4}{4}$?



- a. Quale lettera rappresenta meglio $\frac{1}{4}$?
 b. Quale lettera rappresenta meglio $\frac{2}{4}$?



- a. Quale lettera rappresenta meglio $\frac{1}{2}$?
 b. Quale lettera rappresenta meglio $\frac{2}{2}$?



- a. Quale lettera rappresenta meglio $\frac{1}{4}$?
 b. Quale lettera rappresenta meglio $\frac{3}{4}$?

1. A C
 2. A D
 3. C B
 4. A B
 5. C D
 6. B C
 7. C D
 8. A C