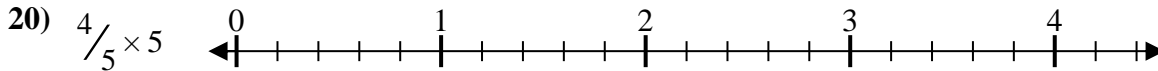
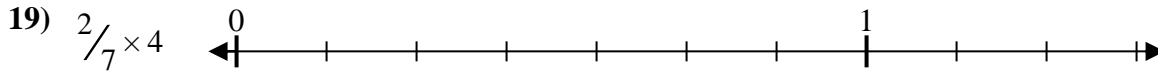
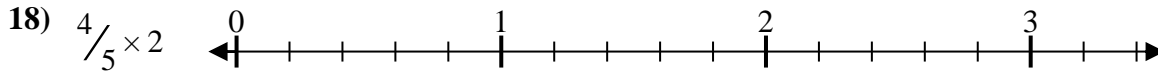
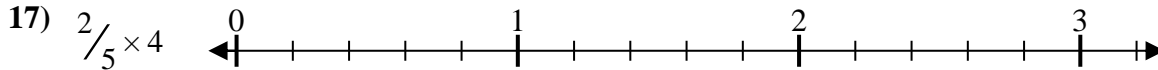
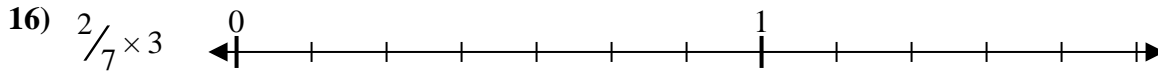
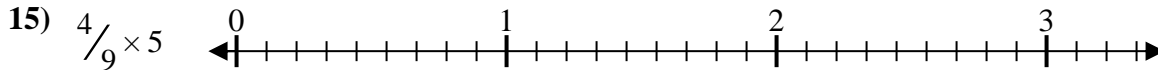

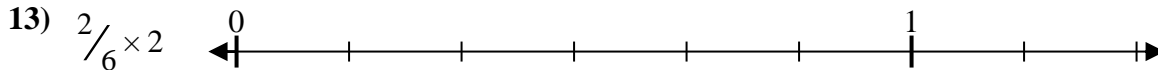
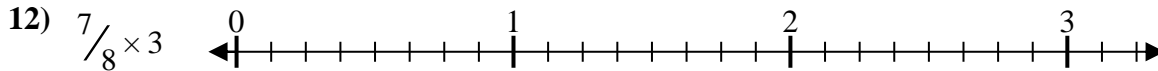
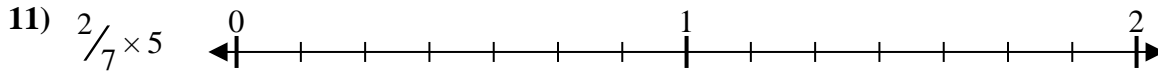
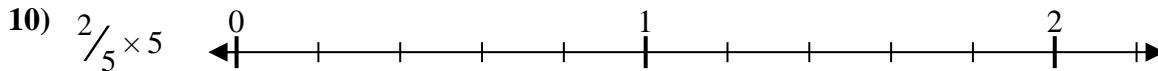
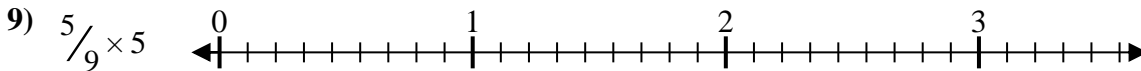

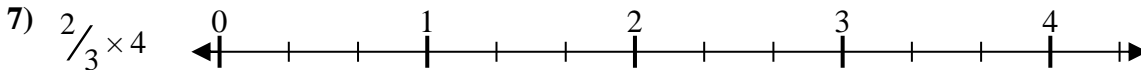
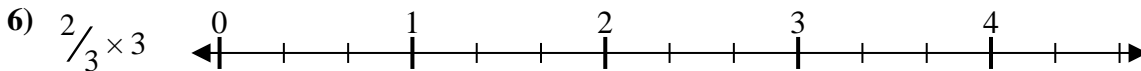
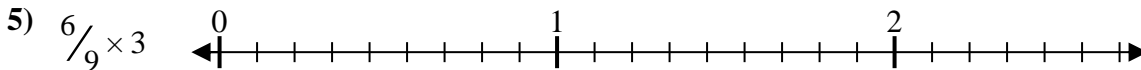
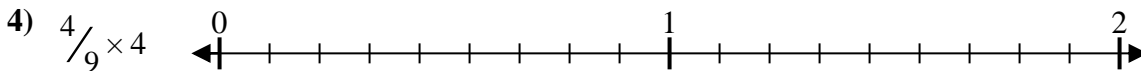
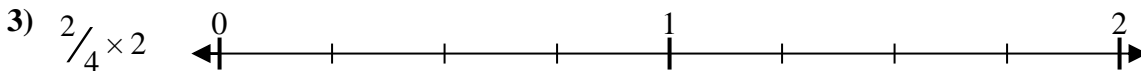
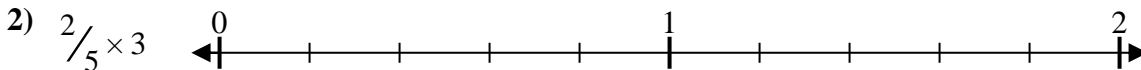
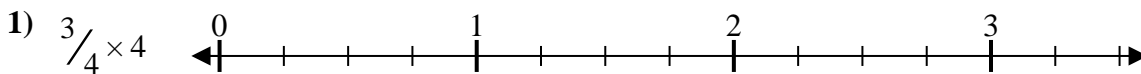




Risolvi ogni problema.

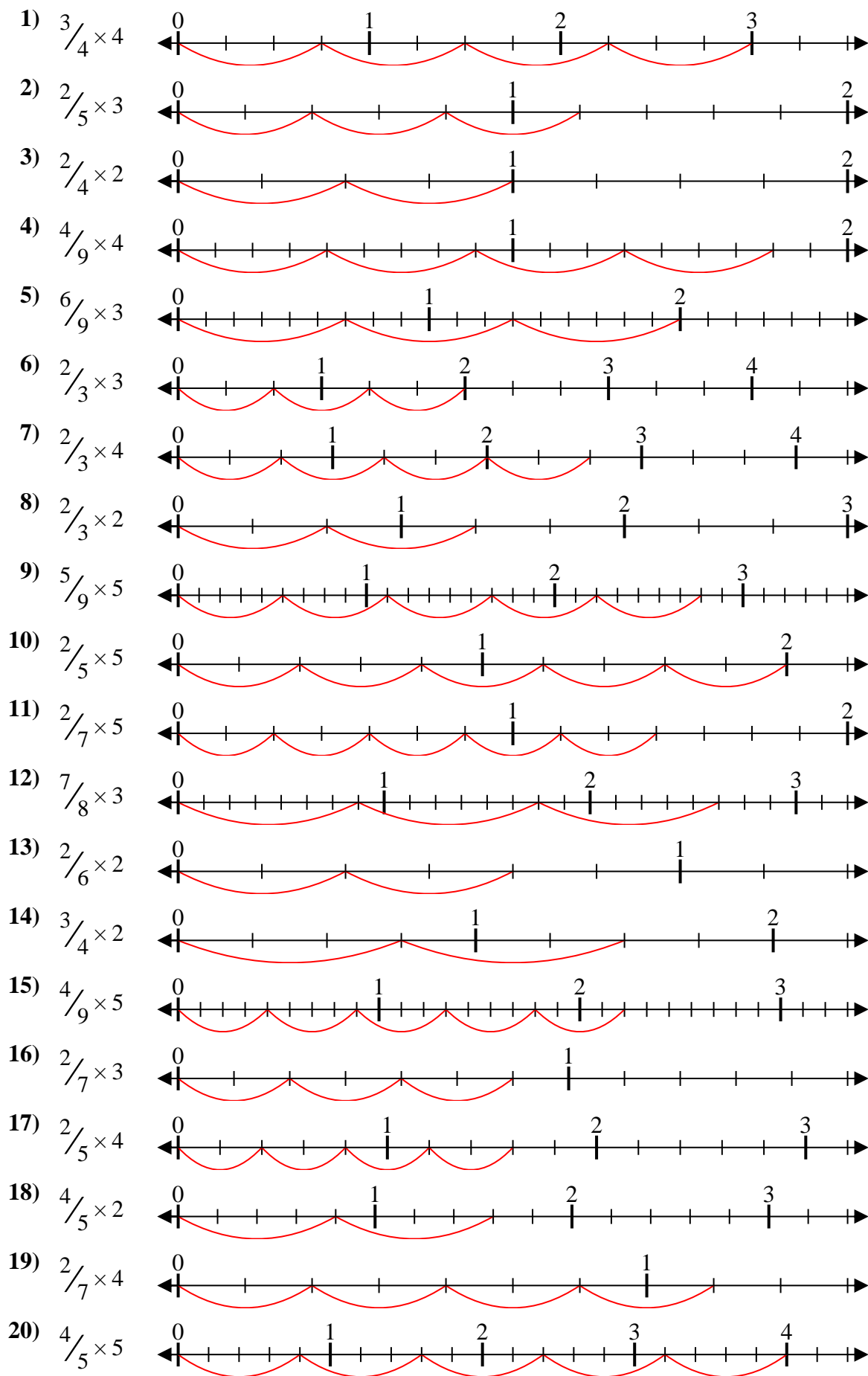
Risposte



1. _____
2. _____
3. _____
4. _____
5. _____
6. _____
7. _____
8. _____
9. _____
10. _____
11. _____
12. _____
13. _____
14. _____
15. _____
16. _____
17. _____
18. _____
19. _____
20. _____



Risolvi ogni problema.



Risposte

1. $\frac{12}{4} = 3$
2. $\frac{6}{5} = 1\frac{1}{5}$
3. $\frac{4}{4} = 1$
4. $\frac{16}{9} = 1\frac{7}{9}$
5. $\frac{18}{9} = 2$
6. $\frac{6}{3} = 2$
7. $\frac{8}{3} = 2\frac{2}{3}$
8. $\frac{4}{3} = 1\frac{1}{3}$
9. $\frac{25}{9} = 2\frac{7}{9}$
10. $\frac{10}{5} = 2$
11. $\frac{10}{7} = 1\frac{3}{7}$
12. $\frac{21}{8} = 2\frac{5}{8}$
13. $\frac{4}{6} = \frac{2}{3}$
14. $\frac{6}{4} = 1\frac{1}{2}$
15. $\frac{20}{9} = 2\frac{2}{9}$
16. $\frac{6}{7} = \frac{6}{7}$
17. $\frac{8}{5} = 1\frac{3}{5}$
18. $\frac{8}{5} = 1\frac{3}{5}$
19. $\frac{8}{7} = 1\frac{1}{7}$
20. $\frac{20}{5} = 4$