
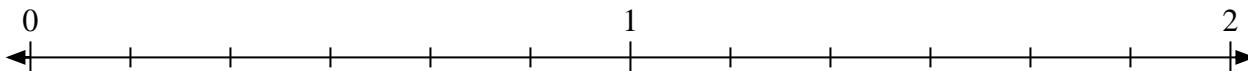


**Risolvi ogni problema.**

- 1) Indica la posizione di  $\frac{9}{7}$



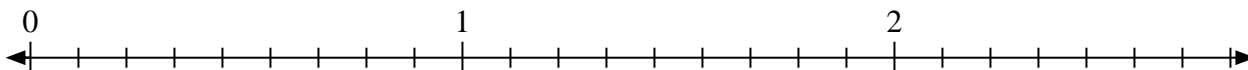
- 2) Indica la posizione di  $\frac{7}{6}$



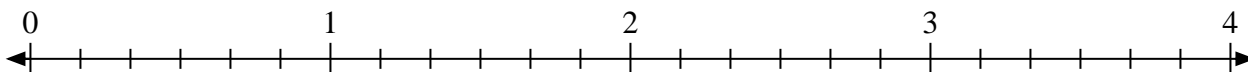
- 3) Indica la posizione di  $\frac{5}{4}$



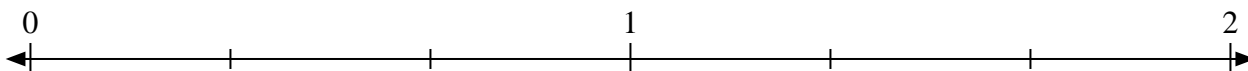
- 4) Indica la posizione di  $\frac{23}{9}$



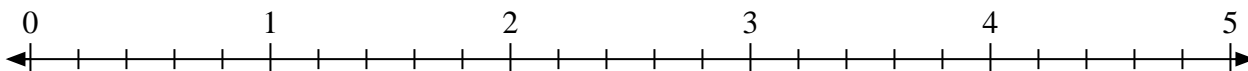
- 5) Indica la posizione di  $\frac{16}{6}$



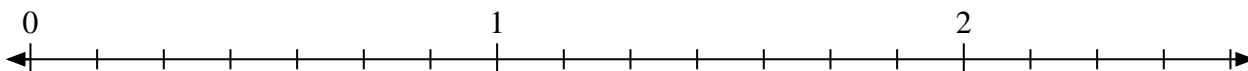
- 6) Indica la posizione di  $\frac{5}{3}$



- 7) Indica la posizione di  $\frac{13}{5}$



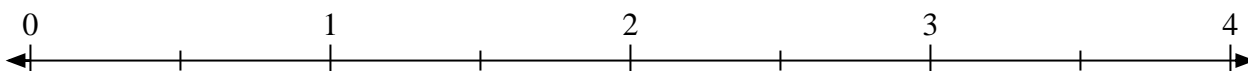
- 8) Indica la posizione di  $\frac{8}{7}$



- 9) Indica la posizione di  $\frac{8}{5}$




- 10) Indica la posizione di  $\frac{5}{2}$

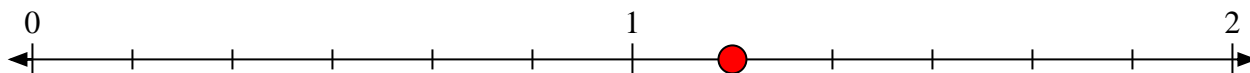


**Risolvi ogni problema.**

- 1) Indica la posizione di  $\frac{9}{7}$



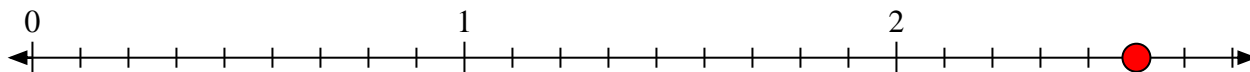
- 2) Indica la posizione di  $\frac{7}{6}$



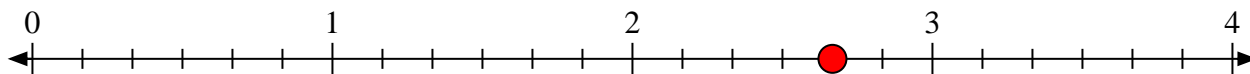
- 3) Indica la posizione di  $\frac{5}{4}$



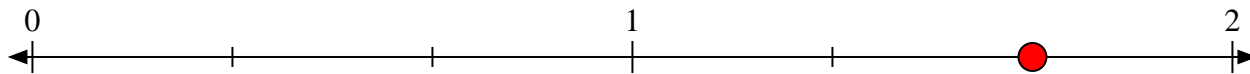
- 4) Indica la posizione di  $\frac{23}{9}$



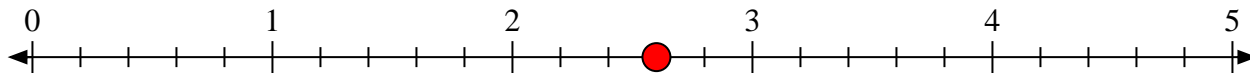
- 5) Indica la posizione di  $\frac{16}{6}$



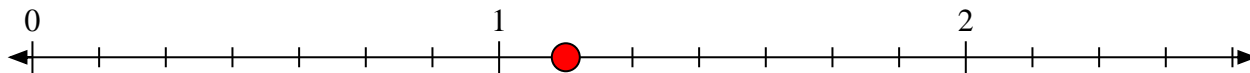
- 6) Indica la posizione di  $\frac{5}{3}$




- 7) Indica la posizione di  $\frac{13}{5}$



- 8) Indica la posizione di  $\frac{8}{7}$



- 9) Indica la posizione di  $\frac{8}{5}$



- 10) Indica la posizione di  $\frac{5}{2}$

