




Nome: \_\_\_\_\_


**Risolvi ogni problema.****Risposte**

1) 1:30

A.




B.




2) 8:15

A.




B.



3) 1:45

A.




B.




4) 12:45

A.




B.




5) 4:00

A.



B.




6) 10:45

A.




B.




7) 6:00

A.



B.




8) 2:45

A.



B.




9) 4:30

A.




B.




10) 7:15

A.



B.



11) 9:45

A.




B.




12) 8:00

A.



B.



1. \_\_\_\_\_

2. \_\_\_\_\_

3. \_\_\_\_\_

4. \_\_\_\_\_

5. \_\_\_\_\_

6. \_\_\_\_\_

7. \_\_\_\_\_

8. \_\_\_\_\_

9. \_\_\_\_\_

10. \_\_\_\_\_

11. \_\_\_\_\_

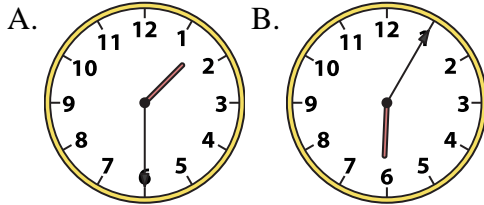
12. \_\_\_\_\_



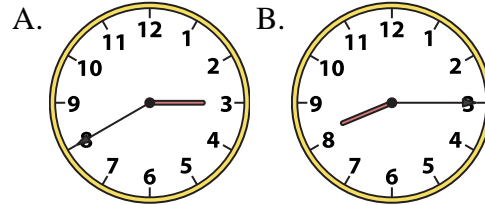
Risolvi ogni problema.

**Risposte**

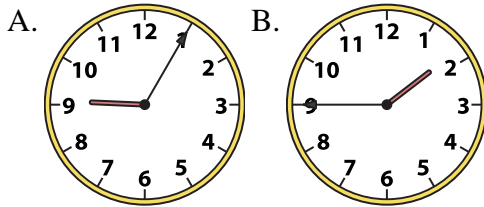
1) 1:30



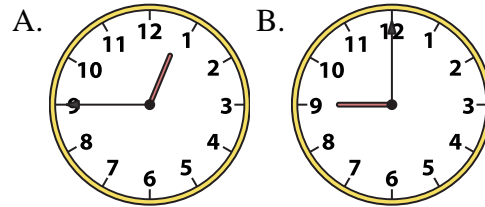
2) 8:15



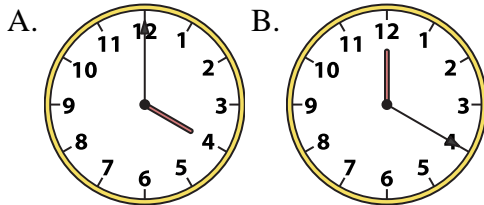
3) 1:45



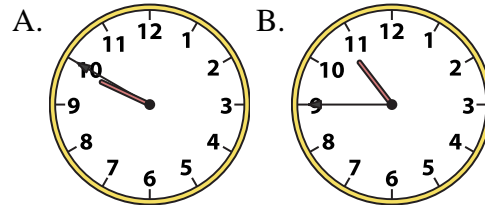
4) 12:45



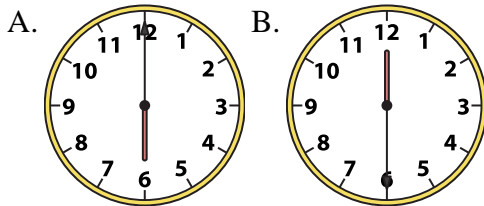
5) 4:00



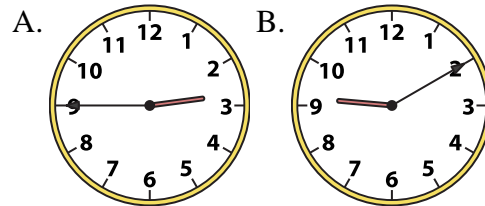
6) 10:45



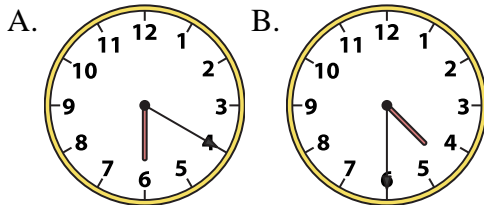
7) 6:00



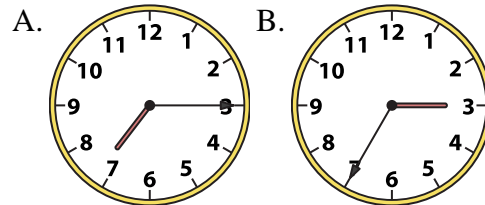
8) 2:45



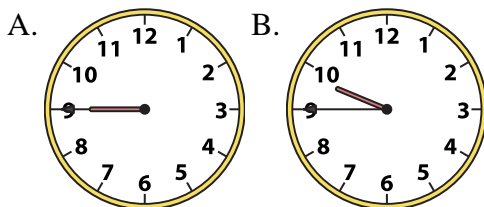
9) 4:30



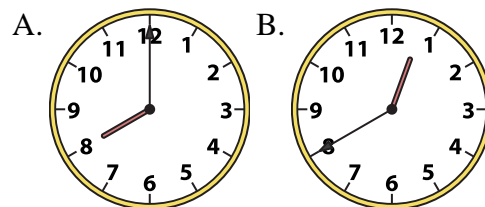
10) 7:15



11) 9:45



12) 8:00

1.   **A**  2.   **B**  3.   **B**  4.   **A**  5.   **A**  6.   **B**  7.   **A**  8.   **A**  9.   **B**  10.   **A**  11.   **B**  12.   **A**