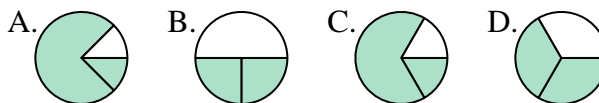




Determina quale lettera rappresenta correttamente la frazione.

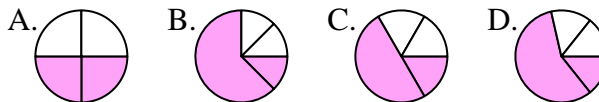
Risposte

1) Quale risposta corrisponde a $\frac{2}{3}$?



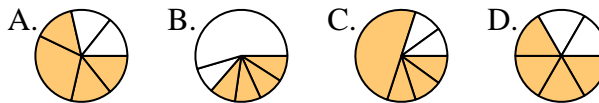
1. _____

2) Quale risposta corrisponde a $\frac{2}{4}$?



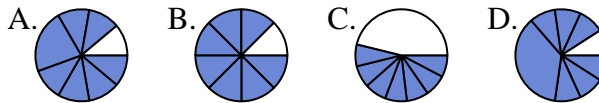
2. _____

3) Quale risposta corrisponde a $\frac{4}{6}$?



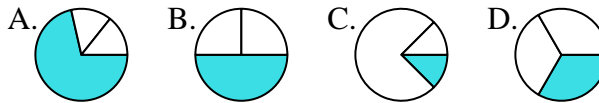
3. _____

4) Quale risposta corrisponde a $\frac{7}{8}$?



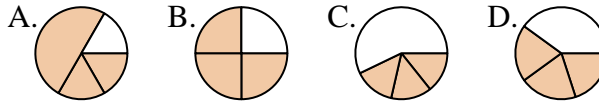
4. _____

5) Quale risposta corrisponde a $\frac{1}{3}$?



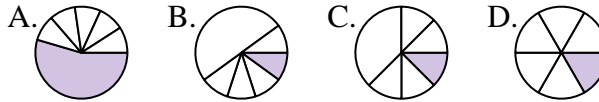
5. _____

6) Quale risposta corrisponde a $\frac{3}{4}$?



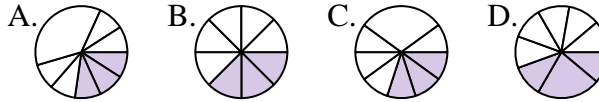
6. _____

7) Quale risposta corrisponde a $\frac{1}{6}$?



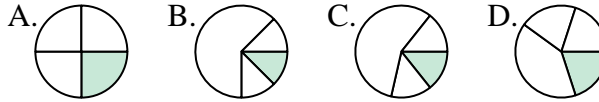
7. _____

8) Quale risposta corrisponde a $\frac{3}{8}$?



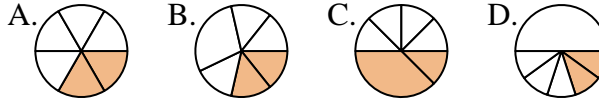
8. _____

9) Quale risposta corrisponde a $\frac{1}{4}$?



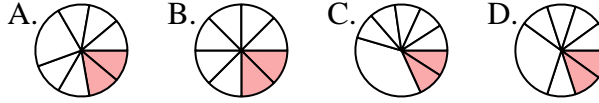
9. _____

10) Quale risposta corrisponde a $\frac{2}{6}$?



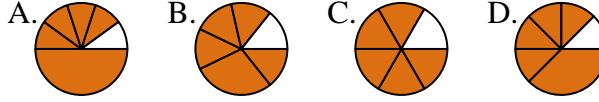
10. _____

11) Quale risposta corrisponde a $\frac{2}{8}$?



11. _____

12) Quale risposta corrisponde a $\frac{5}{6}$?


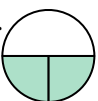








12. _____











Determina quale lettera rappresenta correttamente la frazione.

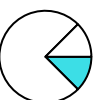

Risposte





1) Quale risposta corrisponde a $\frac{2}{3}$?
 A.  B.  C.  D. 

2) Quale risposta corrisponde a $\frac{2}{4}$?
 A.  B.  C.  D. 

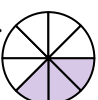
3) Quale risposta corrisponde a $\frac{4}{6}$?
 A.  B.  C.  D. 

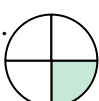

4) Quale risposta corrisponde a $\frac{7}{8}$?
 A.  B.  C.  D. 

5) Quale risposta corrisponde a $\frac{1}{3}$?
 A.  B.  C.  D. 

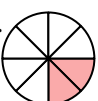


6) Quale risposta corrisponde a $\frac{3}{4}$?
 A.  B.  C.  D. 


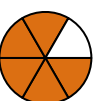

7) Quale risposta corrisponde a $\frac{1}{6}$?
 A.  B.  C.  D. 

8) Quale risposta corrisponde a $\frac{3}{8}$?
 A.  B.  C.  D. 

9) Quale risposta corrisponde a $\frac{1}{4}$?
 A.  B.  C.  D. 

10) Quale risposta corrisponde a $\frac{2}{6}$?
 A.  B.  C.  D. 

11) Quale risposta corrisponde a $\frac{2}{8}$?
 A.  B.  C.  D. 

12) Quale risposta corrisponde a $\frac{5}{6}$?
 A.  B.  C.  D. 

1. **D**

2. **A**

3. **D**

4. **B**

5. **D**

6. **B**

7. **D**

8. **B**

9. **A**

10. **A**

11. **B**

12. **C**