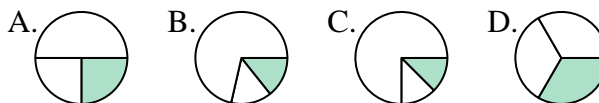




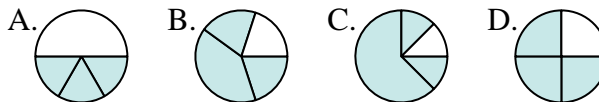
Determina quale lettera rappresenta correttamente la frazione.

Risposte

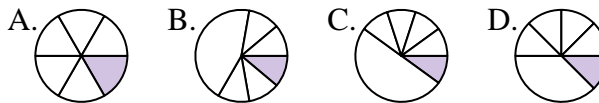
1) Quale risposta corrisponde a $\frac{1}{3}$?



2) Quale risposta corrisponde a $\frac{3}{4}$?



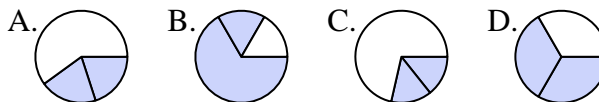
3) Quale risposta corrisponde a $\frac{1}{6}$?



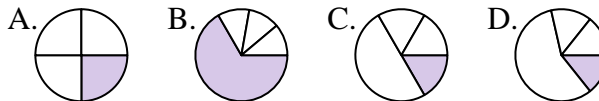
4) Quale risposta corrisponde a $\frac{5}{8}$?



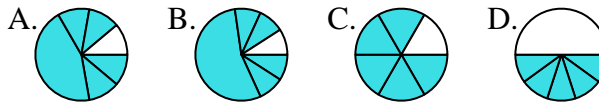
5) Quale risposta corrisponde a $\frac{2}{3}$?



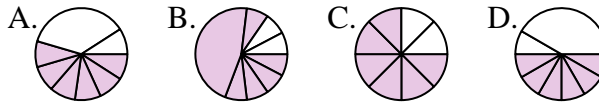
6) Quale risposta corrisponde a $\frac{1}{4}$?



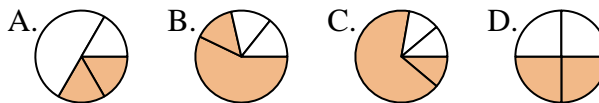
7) Quale risposta corrisponde a $\frac{5}{6}$?



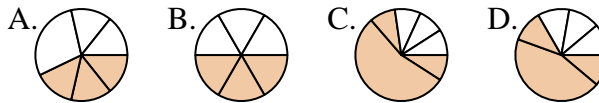
8) Quale risposta corrisponde a $\frac{6}{8}$?



9) Quale risposta corrisponde a $\frac{2}{4}$?



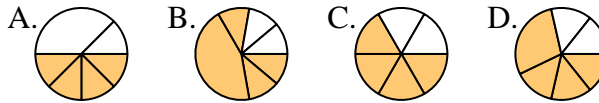
10) Quale risposta corrisponde a $\frac{3}{6}$?



11) Quale risposta corrisponde a $\frac{2}{8}$?



12) Quale risposta corrisponde a $\frac{4}{6}$?

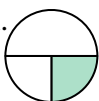









1. _____
2. _____
3. _____
4. _____
5. _____
6. _____
7. _____
8. _____
9. _____
10. _____
11. _____
12. _____









Determina quale lettera rappresenta correttamente la frazione.





Risposte


1) Quale risposta corrisponde a $\frac{1}{3}$?
 A.  B.  C.  D. 





2) Quale risposta corrisponde a $\frac{3}{4}$?
 A.  B.  C.  D. 

3) Quale risposta corrisponde a $\frac{1}{6}$?
 A.  B.  C.  D. 

4) Quale risposta corrisponde a $\frac{5}{8}$?
 A.  B.  C.  D. 


5) Quale risposta corrisponde a $\frac{2}{3}$?
 A.  B.  C.  D. 





6) Quale risposta corrisponde a $\frac{1}{4}$?
 A.  B.  C.  D. 

7) Quale risposta corrisponde a $\frac{5}{6}$?
 A.  B.  C.  D. 

8) Quale risposta corrisponde a $\frac{6}{8}$?
 A.  B.  C.  D. 

9) Quale risposta corrisponde a $\frac{2}{4}$?
 A.  B.  C.  D. 

10) Quale risposta corrisponde a $\frac{3}{6}$?
 A.  B.  C.  D. 

11) Quale risposta corrisponde a $\frac{2}{8}$?
 A.  B.  C.  D. 

12) Quale risposta corrisponde a $\frac{4}{6}$?
 A.  B.  C.  D. 

1. **D**

2. **D**

3. **A**

4. **A**

5. **D**

6. **A**

7. **C**

8. **C**

9. **D**

10. **B**

11. **C**

12. **C**