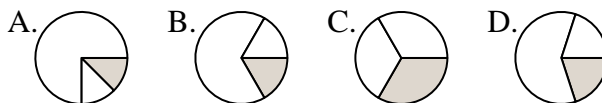




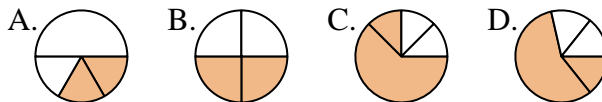
Determina quale lettera rappresenta correttamente la frazione.

Risposte

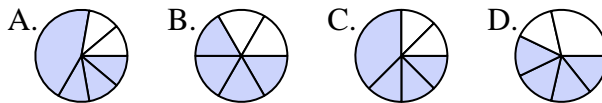
1) Quale risposta corrisponde a $\frac{1}{3}$?



2) Quale risposta corrisponde a $\frac{2}{4}$?



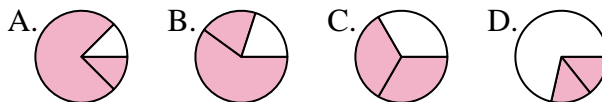
3) Quale risposta corrisponde a $\frac{4}{6}$?



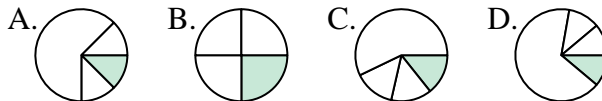
4) Quale risposta corrisponde a $\frac{1}{8}$?



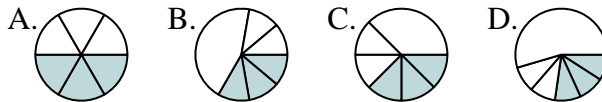
5) Quale risposta corrisponde a $\frac{2}{3}$?



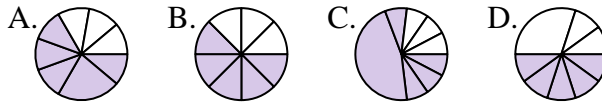
6) Quale risposta corrisponde a $\frac{1}{4}$?



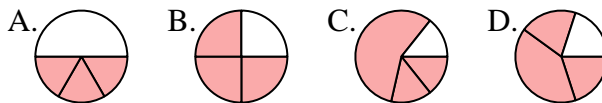
7) Quale risposta corrisponde a $\frac{3}{6}$?



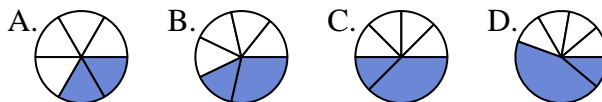
8) Quale risposta corrisponde a $\frac{5}{8}$?



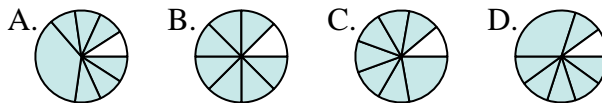
9) Quale risposta corrisponde a $\frac{3}{4}$?



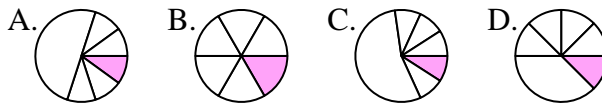
10) Quale risposta corrisponde a $\frac{2}{6}$?



11) Quale risposta corrisponde a $\frac{7}{8}$?



12) Quale risposta corrisponde a $\frac{1}{6}$?



1. _____
2. _____
3. _____
4. _____
5. _____
6. _____
7. _____
8. _____
9. _____
10. _____
11. _____
12. _____



Determina quale lettera rappresenta correttamente la frazione.

Risposte

1) Quale risposta corrisponde a $\frac{1}{3}$?
 A. B. C. D.

1. **C**

2) Quale risposta corrisponde a $\frac{2}{4}$?
 A. B. C. D.

2. **B**

3) Quale risposta corrisponde a $\frac{4}{6}$?
 A. B. C. D.

3. **B**

4) Quale risposta corrisponde a $\frac{1}{8}$?
 A. B. C. D.

4. **C**

5) Quale risposta corrisponde a $\frac{2}{3}$?
 A. B. C. D.

5. **C**

6) Quale risposta corrisponde a $\frac{1}{4}$?
 A. B. C. D.

6. **B**

7) Quale risposta corrisponde a $\frac{3}{6}$?
 A. B. C. D.

7. **A**

8) Quale risposta corrisponde a $\frac{5}{8}$?
 A. B. C. D.

8. **B**

9) Quale risposta corrisponde a $\frac{3}{4}$?
 A. B. C. D.

9. **B**

10) Quale risposta corrisponde a $\frac{2}{6}$?
 A. B. C. D.

10. **A**

11) Quale risposta corrisponde a $\frac{7}{8}$?
 A. B. C. D.

11. **B**

12) Quale risposta corrisponde a $\frac{1}{6}$?
 A. B. C. D.

12. **B**