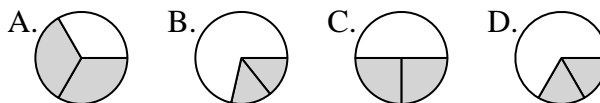




**Determina quale lettera rappresenta correttamente la frazione.**

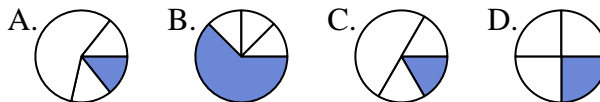
**Risposte**

1) Quale risposta corrisponde a  $\frac{2}{3}$ ?



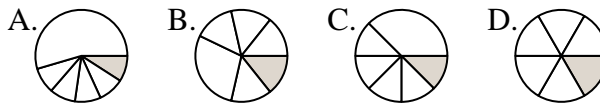
1. \_\_\_\_\_

2) Quale risposta corrisponde a  $\frac{1}{4}$ ?



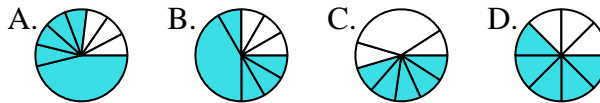
2. \_\_\_\_\_

3) Quale risposta corrisponde a  $\frac{1}{6}$ ?



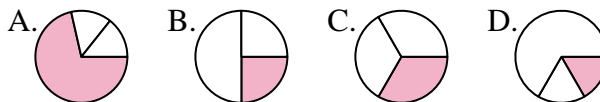
3. \_\_\_\_\_

4) Quale risposta corrisponde a  $\frac{5}{8}$ ?



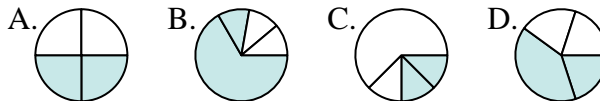
4. \_\_\_\_\_

5) Quale risposta corrisponde a  $\frac{1}{3}$ ?



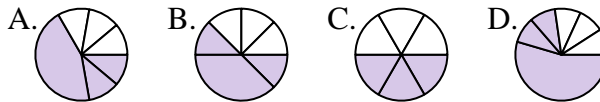
5. \_\_\_\_\_

6) Quale risposta corrisponde a  $\frac{2}{4}$ ?



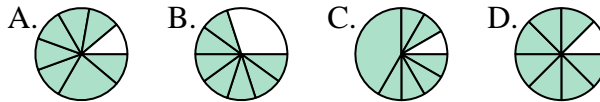
6. \_\_\_\_\_

7) Quale risposta corrisponde a  $\frac{3}{6}$ ?



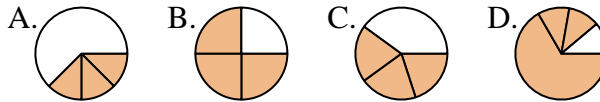
7. \_\_\_\_\_

8) Quale risposta corrisponde a  $\frac{7}{8}$ ?



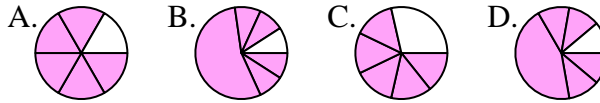
8. \_\_\_\_\_

9) Quale risposta corrisponde a  $\frac{3}{4}$ ?



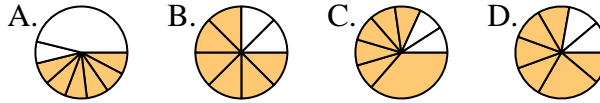
9. \_\_\_\_\_

10) Quale risposta corrisponde a  $\frac{5}{6}$ ?



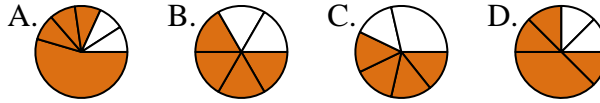
10. \_\_\_\_\_

11) Quale risposta corrisponde a  $\frac{6}{8}$ ?



11. \_\_\_\_\_

12) Quale risposta corrisponde a  $\frac{4}{6}$ ?

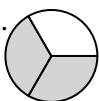
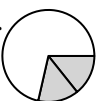
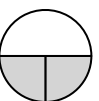







12. \_\_\_\_\_







Determina quale lettera rappresenta correttamente la frazione.





**Risposte**





1) Quale risposta corrisponde a  $\frac{2}{3}$ ?  
 A.  B.  C.  D. 





2) Quale risposta corrisponde a  $\frac{1}{4}$ ?  
 A.  B.  C.  D. 





3) Quale risposta corrisponde a  $\frac{1}{6}$ ?  
 A.  B.  C.  D. 

4) Quale risposta corrisponde a  $\frac{5}{8}$ ?  
 A.  B.  C.  D. 





5) Quale risposta corrisponde a  $\frac{1}{3}$ ?  
 A.  B.  C.  D. 

6) Quale risposta corrisponde a  $\frac{2}{4}$ ?  
 A.  B.  C.  D. 

7) Quale risposta corrisponde a  $\frac{3}{6}$ ?  
 A.  B.  C.  D. 

8) Quale risposta corrisponde a  $\frac{7}{8}$ ?  
 A.  B.  C.  D. 

9) Quale risposta corrisponde a  $\frac{3}{4}$ ?  
 A.  B.  C.  D. 

10) Quale risposta corrisponde a  $\frac{5}{6}$ ?  
 A.  B.  C.  D. 

11) Quale risposta corrisponde a  $\frac{6}{8}$ ?  
 A.  B.  C.  D. 

12) Quale risposta corrisponde a  $\frac{4}{6}$ ?  
 A.  B.  C.  D. 

1.   **A**  

2.   **D**  

3.   **D**  

4.   **D**  

5.   **C**  

6.   **A**  

7.   **C**  

8.   **D**  

9.   **B**  

10.   **A**  

11.   **B**  

12.   **B**