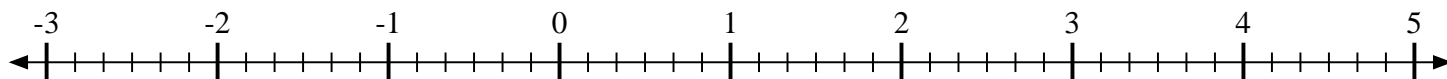
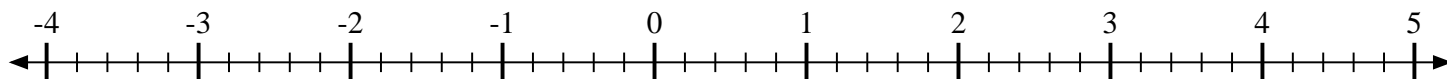


**Scrivi la posizione di ogni frazione.**

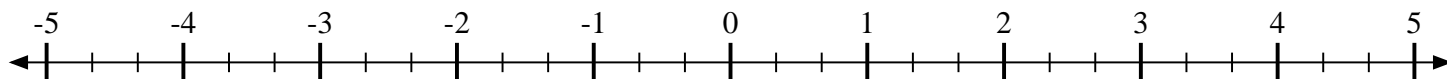
- 1) Indica la posizione di
- $1\frac{5}{6}$



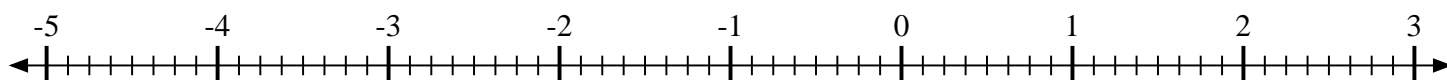
- 2) Indica la posizione di
- $4\frac{2}{5}$



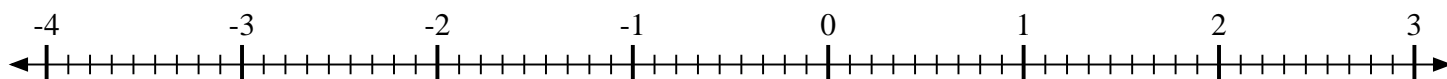
- 3) Indica la posizione di
- $-3\frac{1}{3}$



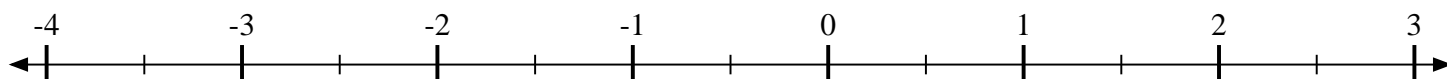
- 4) Indica la posizione di
- $\frac{3}{8}$



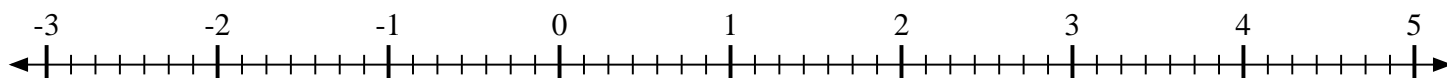
- 5) Indica la posizione di
- $-1\frac{4}{9}$



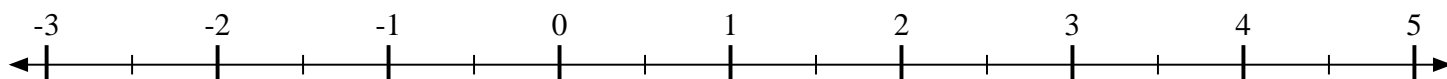
- 6) Indica la posizione di
- $-1\frac{1}{2}$



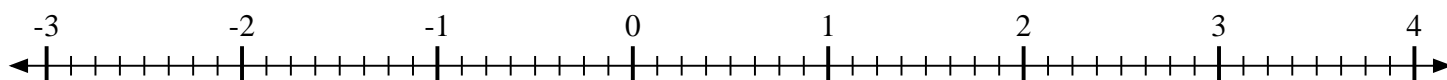
- 7) Indica la posizione di
- $-2\frac{6}{7}$



- 8) Indica la posizione di
- $4\frac{1}{2}$

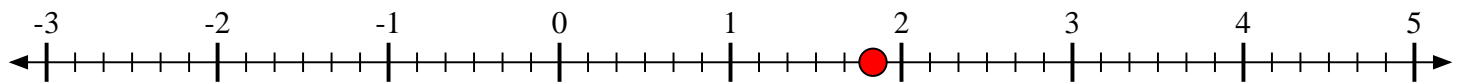
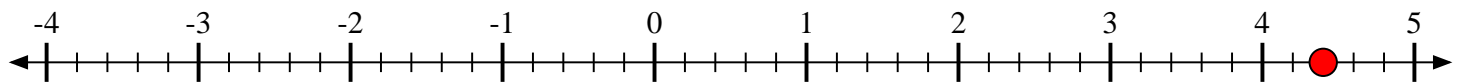
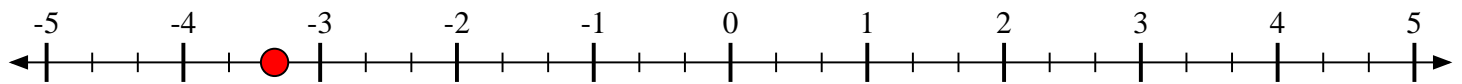
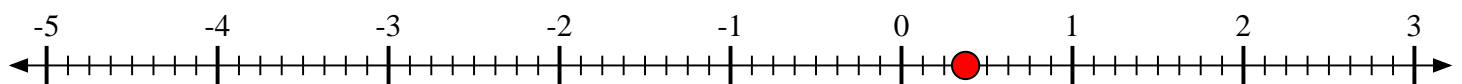
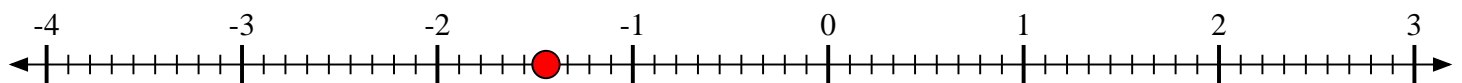
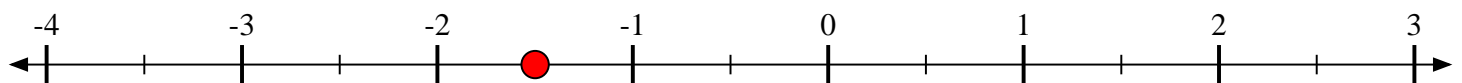


- 9) Indica la posizione di
- $-1\frac{3}{8}$





Scrivi la posizione di ogni frazione.

1) Indica la posizione di $1\frac{5}{6}$ 2) Indica la posizione di $4\frac{2}{5}$ 3) Indica la posizione di $-3\frac{1}{3}$ 4) Indica la posizione di $\frac{3}{8}$ 5) Indica la posizione di $-1\frac{4}{9}$ 6) Indica la posizione di $-1\frac{1}{2}$ 7) Indica la posizione di $-2\frac{6}{7}$ 8) Indica la posizione di $4\frac{1}{2}$ 9) Indica la posizione di $-1\frac{3}{8}$ 