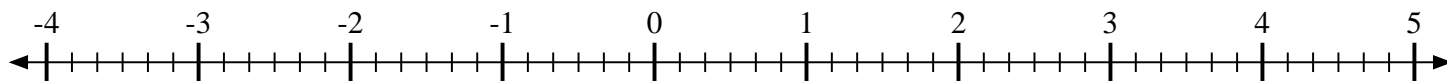
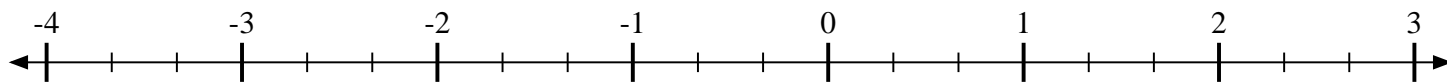
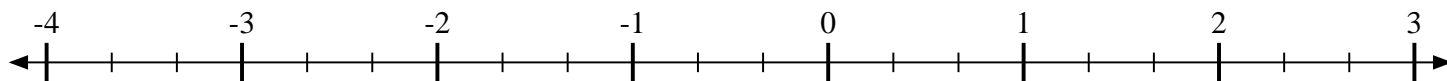
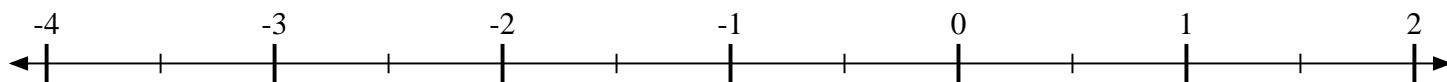
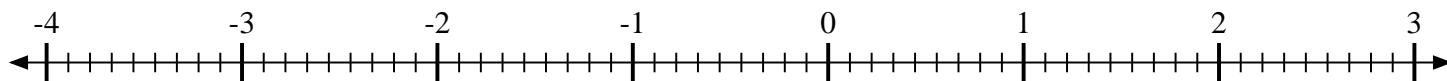
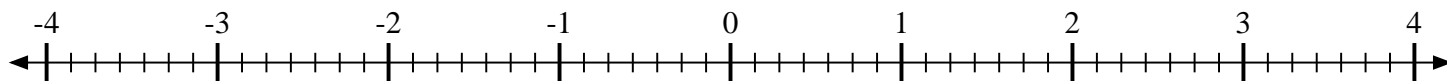
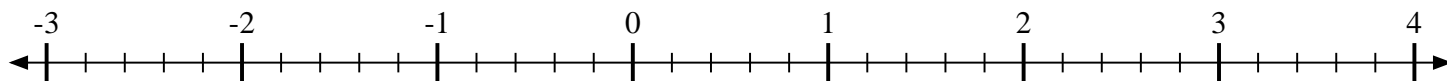
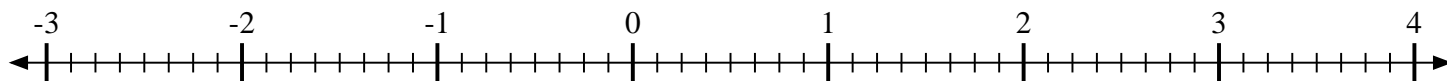
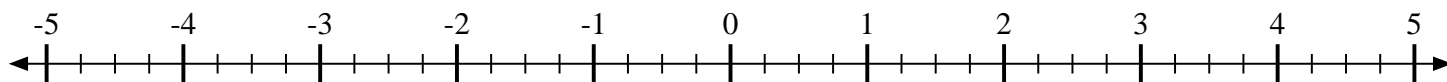
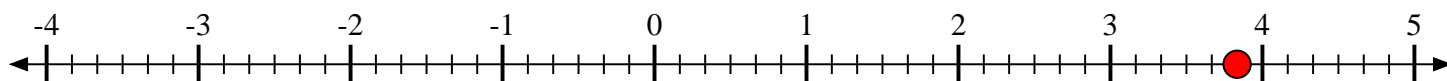
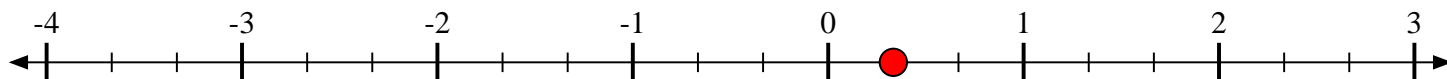
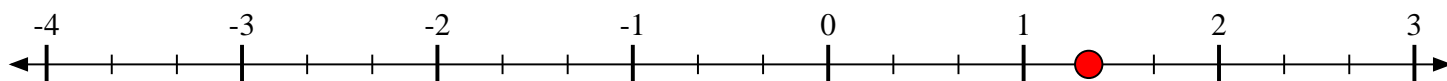
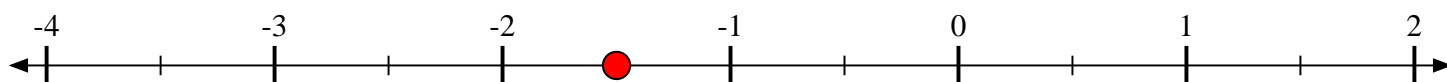
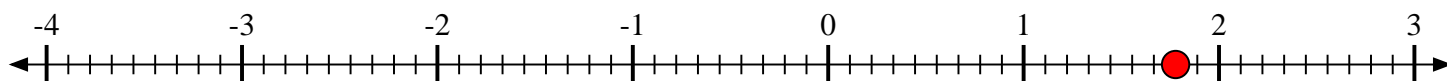
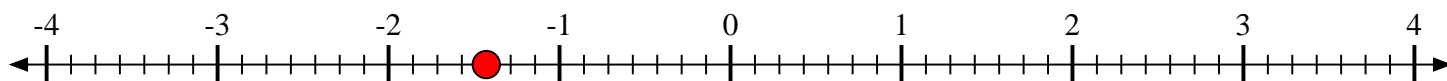
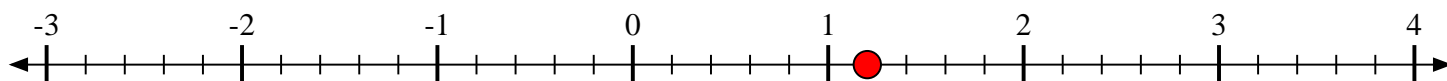
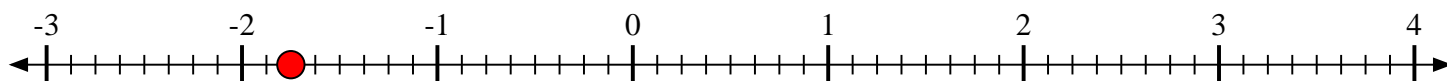


**Scrivi la posizione di ogni frazione.**1) Indica la posizione di $3\frac{5}{6}$ 2) Indica la posizione di $\frac{1}{3}$ 3) Indica la posizione di $1\frac{1}{3}$ 4) Indica la posizione di $-1\frac{1}{2}$ 5) Indica la posizione di $1\frac{7}{9}$ 6) Indica la posizione di $-1\frac{3}{7}$ 7) Indica la posizione di $1\frac{1}{5}$ 8) Indica la posizione di $-1\frac{6}{8}$ 9) Indica la posizione di $-4\frac{3}{4}$ 



Scrivi la posizione di ogni frazione.

1) Indica la posizione di $3\frac{5}{6}$ 2) Indica la posizione di $\frac{1}{3}$ 3) Indica la posizione di $1\frac{1}{3}$ 4) Indica la posizione di $-1\frac{1}{2}$ 5) Indica la posizione di $1\frac{7}{9}$ 6) Indica la posizione di $-1\frac{3}{7}$ 7) Indica la posizione di $1\frac{1}{5}$ 8) Indica la posizione di $-1\frac{6}{8}$ 9) Indica la posizione di $-4\frac{3}{4}$ 