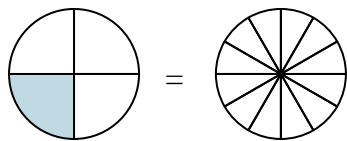


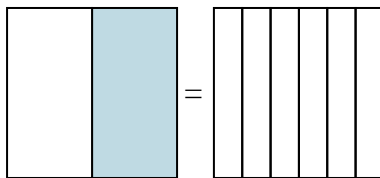


Colora la rappresentazione grafica per trovare la frazione equivalente.

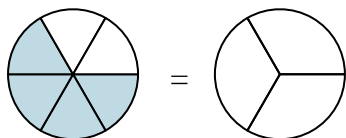
Es)  $\frac{1}{4} = \frac{3}{12}$



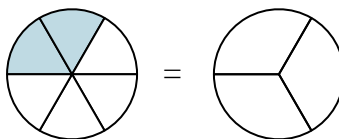
1)  $\frac{1}{2} =$



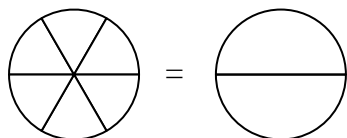
2)  $\frac{4}{6} =$



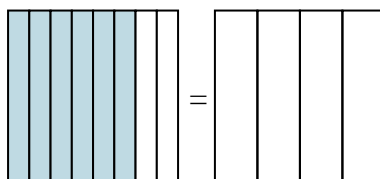
3)  $\frac{2}{6} =$



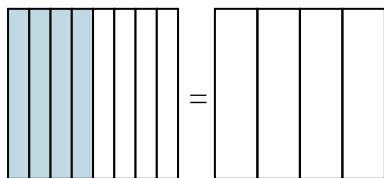
4)  $\frac{0}{6} =$



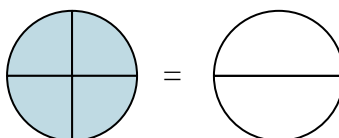
5)  $\frac{6}{8} =$



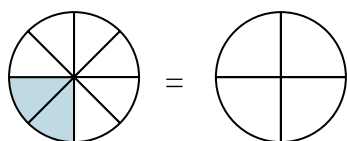
6)  $\frac{4}{8} =$



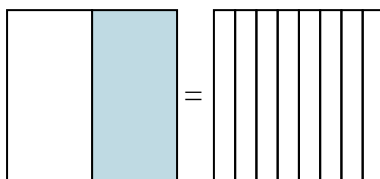
7)  $\frac{4}{4} =$



8)  $\frac{2}{8} =$



9)  $\frac{1}{2} =$

**Risposte**Es.  $\frac{3}{12}$ 

1. \_\_\_\_\_

2. \_\_\_\_\_

3. \_\_\_\_\_

4. \_\_\_\_\_

5. \_\_\_\_\_

6. \_\_\_\_\_

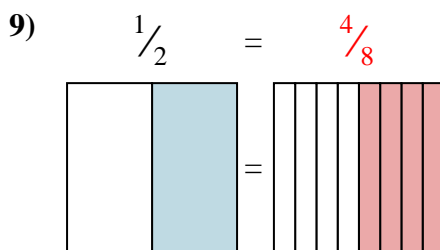
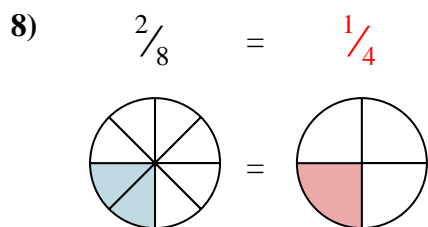
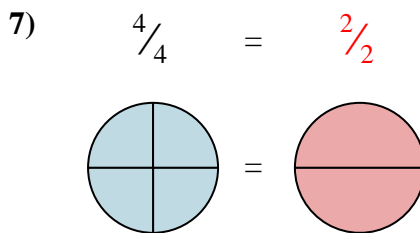
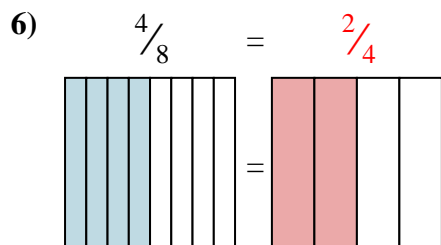
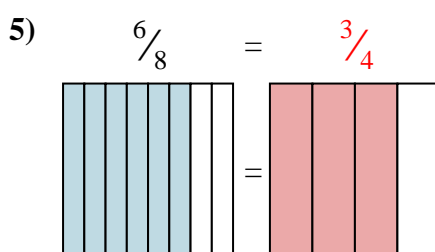
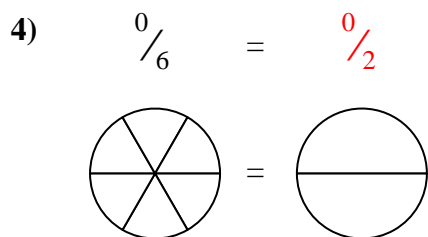
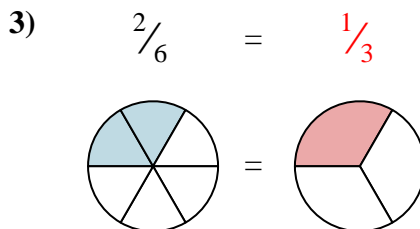
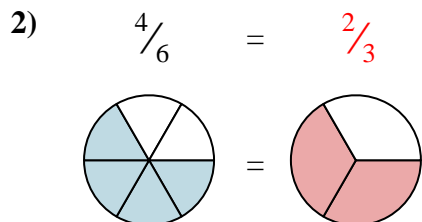
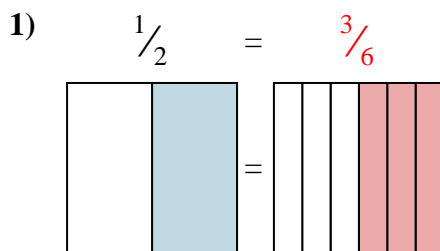
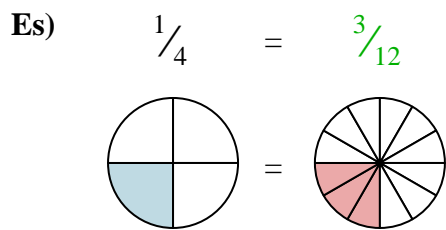
7. \_\_\_\_\_

8. \_\_\_\_\_

9. \_\_\_\_\_



Colora la rappresentazione grafica per trovare la frazione equivalente.

**Risposte**

- Es.  $\frac{3}{12}$
1.  $\frac{3}{6}$
2.  $\frac{2}{3}$
3.  $\frac{1}{3}$
4.  $\frac{0}{2}$
5.  $\frac{3}{4}$
6.  $\frac{2}{4}$
7.  $\frac{2}{2}$
8.  $\frac{1}{4}$
9.  $\frac{4}{8}$