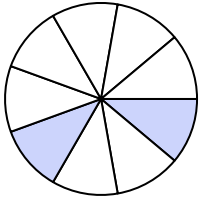





Scrivi l'importo ombreggiato sotto forma di parole.


Es)



1)



2)



**Risposte**

Es. **due noni**

1. \_\_\_\_\_

2. \_\_\_\_\_

3. \_\_\_\_\_

4. \_\_\_\_\_

5. \_\_\_\_\_

6. \_\_\_\_\_

7. \_\_\_\_\_

8. \_\_\_\_\_

9. \_\_\_\_\_

10. \_\_\_\_\_

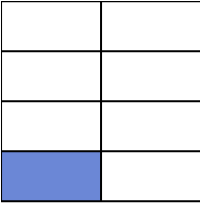
11. \_\_\_\_\_

12. \_\_\_\_\_


13. \_\_\_\_\_

14. \_\_\_\_\_

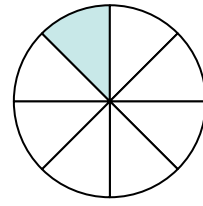
3)



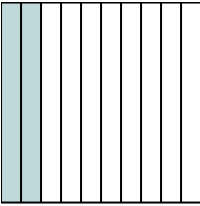
4)




5)



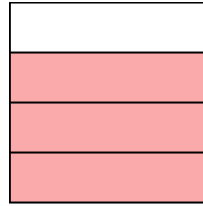
6)



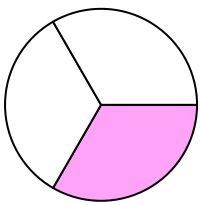
7)



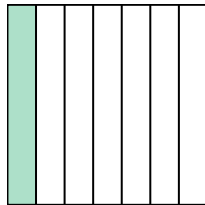
8)



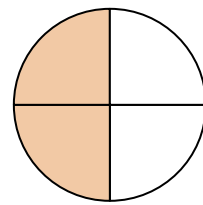
9)



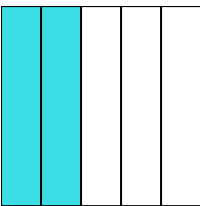
10)



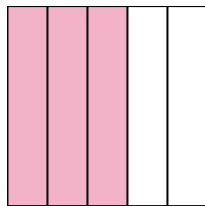
11)



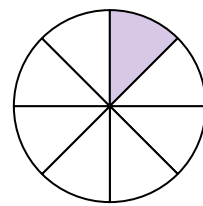
12)



13)

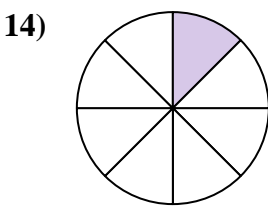
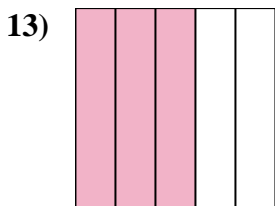
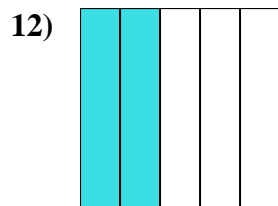
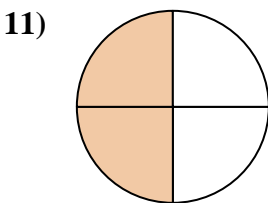
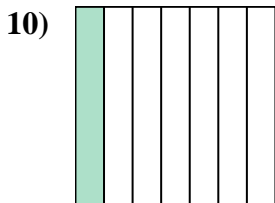
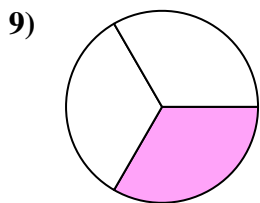
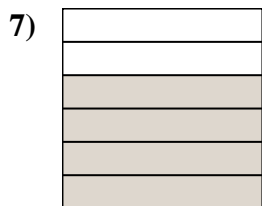
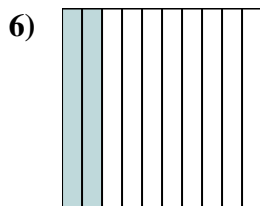
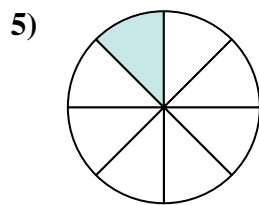
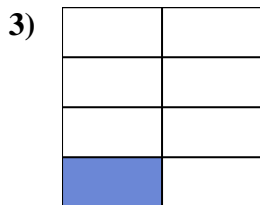
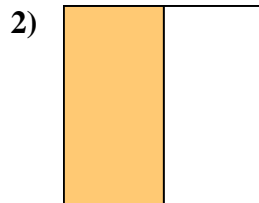

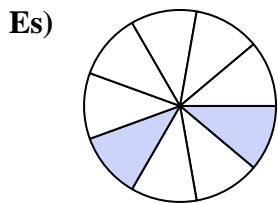


14)





Scrivi l'importo ombreggiato sotto forma di parole.



**Risposte**

Es. due noni

1. nove decimi

2. metà

3. un settimo

4. sette noni

5. un ottavo

6. due decimi

7. quattro sestì

8. tre quarti

9. un terzo

10. un settimo

11. due quarti

12. due quinti

13. tre quinti

14. un ottavo