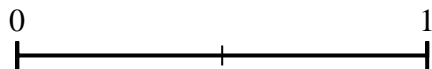
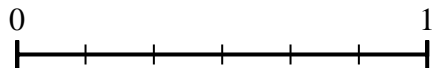





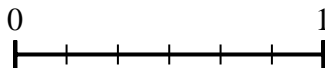
Usa le linee numerate per rispondere alle domande.

**Risposte**

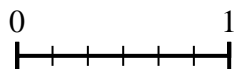
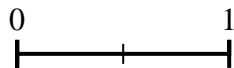
- 1) Secondo la linea numerica mostrata, qual è la frazione equivalente di  $\frac{0}{6}$ ?



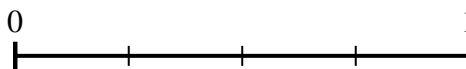
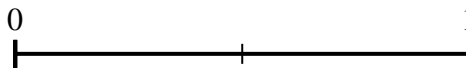
- 2) Secondo la linea numerica mostrata, qual è la frazione equivalente di  $\frac{6}{6}$ ?



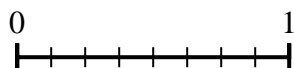
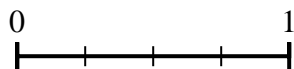
- 3) Secondo la linea numerica mostrata, qual è la frazione equivalente di  $\frac{2}{2}$ ?



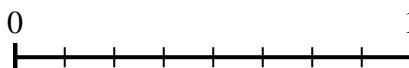
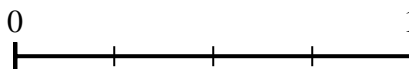
- 4) Secondo la linea numerica mostrata, qual è la frazione equivalente di  $\frac{2}{2}$ ?



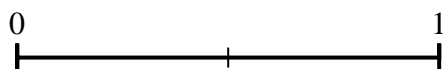
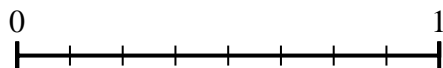
- 5) Secondo la linea numerica mostrata, qual è la frazione equivalente di  $\frac{4}{4}$ ?



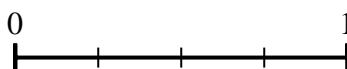
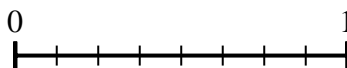
- 6) Secondo la linea numerica mostrata, qual è la frazione equivalente di  $\frac{2}{4}$ ?



- 7) Secondo la linea numerica mostrata, qual è la frazione equivalente di  $\frac{8}{8}$ ?



- 8) Secondo la linea numerica mostrata, qual è la frazione equivalente di  $\frac{6}{8}$ ?

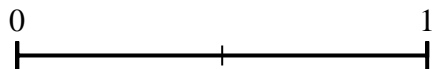
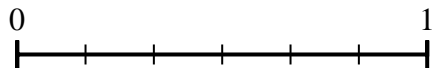


1. \_\_\_\_\_  
 2. \_\_\_\_\_  
 3. \_\_\_\_\_  
 4. \_\_\_\_\_  
 5. \_\_\_\_\_  
 6. \_\_\_\_\_  
 7. \_\_\_\_\_  
 8. \_\_\_\_\_


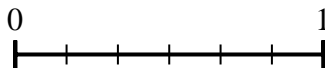


Usa le linee numerate per rispondere alle domande.

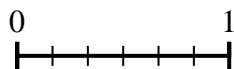
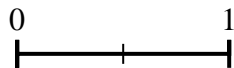
- 1) Secondo la linea numerica mostrata, qual è la frazione equivalente di  $\frac{0}{6}$ ?



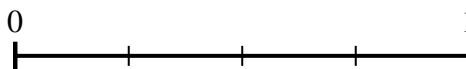
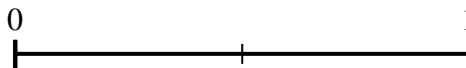
- 2) Secondo la linea numerica mostrata, qual è la frazione equivalente di  $\frac{6}{6}$ ?



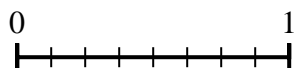
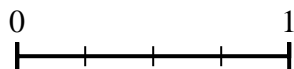
- 3) Secondo la linea numerica mostrata, qual è la frazione equivalente di  $\frac{2}{2}$ ?



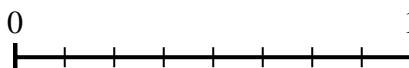
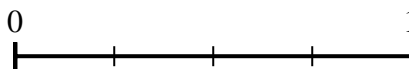
- 4) Secondo la linea numerica mostrata, qual è la frazione equivalente di  $\frac{2}{2}$ ?



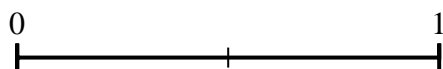
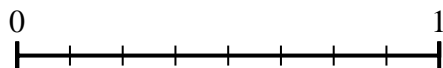
- 5) Secondo la linea numerica mostrata, qual è la frazione equivalente di  $\frac{4}{4}$ ?



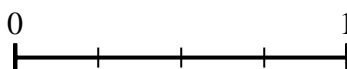
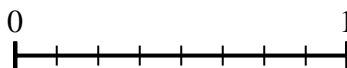
- 6) Secondo la linea numerica mostrata, qual è la frazione equivalente di  $\frac{2}{4}$ ?



- 7) Secondo la linea numerica mostrata, qual è la frazione equivalente di  $\frac{8}{8}$ ?



- 8) Secondo la linea numerica mostrata, qual è la frazione equivalente di  $\frac{6}{8}$ ?

**Risposte**

1.  $\frac{0}{2}$

2.  $\frac{3}{3}$

3.  $\frac{6}{6}$

4.  $\frac{4}{4}$

5.  $\frac{8}{8}$

6.  $\frac{4}{8}$

7.  $\frac{2}{2}$

8.  $\frac{3}{4}$