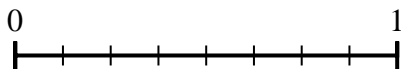
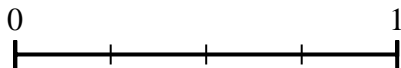




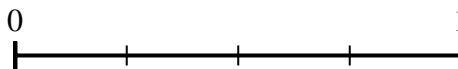
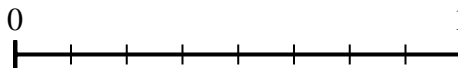
Usa le linee numerate per rispondere alle domande.

Risposte

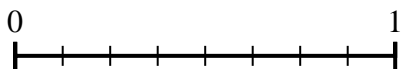
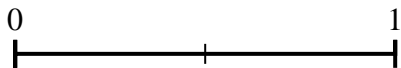
- 1) Secondo la linea numerica mostrata, qual è la frazione equivalente di $\frac{4}{4}$?



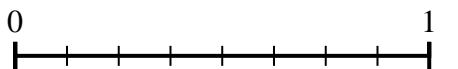
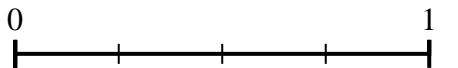
- 2) Secondo la linea numerica mostrata, qual è la frazione equivalente di $\frac{4}{8}$?



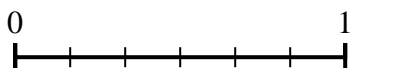
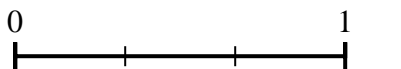
- 3) Secondo la linea numerica mostrata, qual è la frazione equivalente di $\frac{2}{2}$?



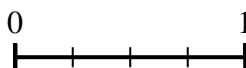
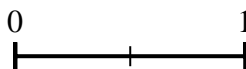
- 4) Secondo la linea numerica mostrata, qual è la frazione equivalente di $\frac{1}{4}$?




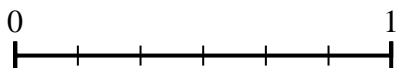
- 5) Secondo la linea numerica mostrata, qual è la frazione equivalente di $\frac{3}{3}$?




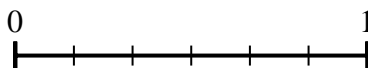
- 6) Secondo la linea numerica mostrata, qual è la frazione equivalente di $\frac{1}{2}$?



- 7) Secondo la linea numerica mostrata, qual è la frazione equivalente di $\frac{2}{6}$?



- 8) Secondo la linea numerica mostrata, qual è la frazione equivalente di $\frac{4}{6}$?

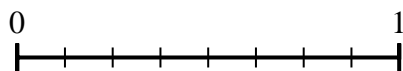
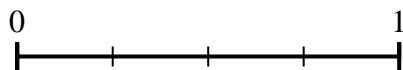


1. _____
 2. _____
 3. _____
 4. _____
 5. _____
 6. _____
 7. _____
 8. _____

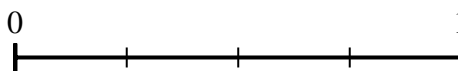
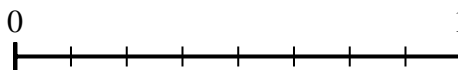


Usa le linee numerate per rispondere alle domande.

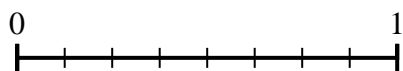
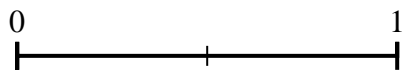
- 1) Secondo la linea numerica mostrata, qual è la frazione equivalente di $\frac{4}{4}$?



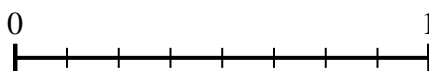
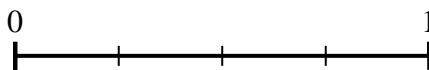
- 2) Secondo la linea numerica mostrata, qual è la frazione equivalente di $\frac{4}{8}$?



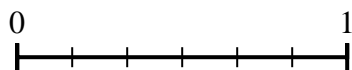

- 3) Secondo la linea numerica mostrata, qual è la frazione equivalente di $\frac{2}{2}$?



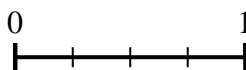
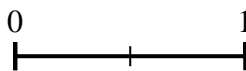
- 4) Secondo la linea numerica mostrata, qual è la frazione equivalente di $\frac{1}{4}$?



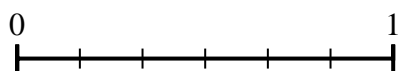
- 5) Secondo la linea numerica mostrata, qual è la frazione equivalente di $\frac{3}{3}$?



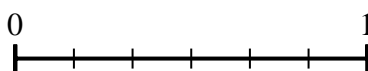
- 6) Secondo la linea numerica mostrata, qual è la frazione equivalente di $\frac{1}{2}$?



- 7) Secondo la linea numerica mostrata, qual è la frazione equivalente di $\frac{2}{6}$?



- 8) Secondo la linea numerica mostrata, qual è la frazione equivalente di $\frac{4}{6}$?

**Risposte**

1. $\frac{8}{8}$

2. $\frac{2}{4}$

3. $\frac{8}{8}$

4. $\frac{2}{8}$

5. $\frac{6}{6}$

6. $\frac{2}{4}$

7. $\frac{1}{3}$

8. $\frac{2}{3}$