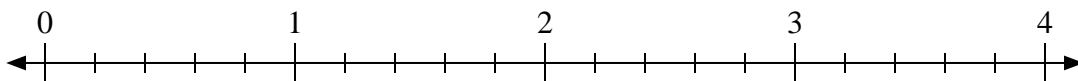


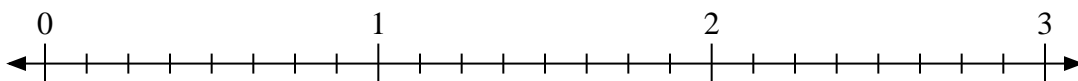


Usa la linea numerata per risolvere ogni problema.

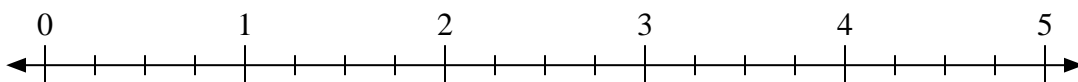
1)  $3:\frac{3}{5}$



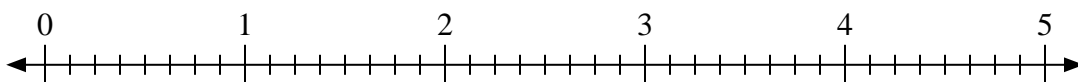
2)  $3:\frac{7}{8}$



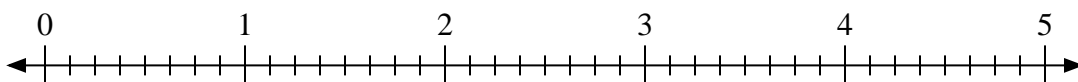
3)  $2:\frac{1}{4}$




4)  $4:\frac{6}{8}$



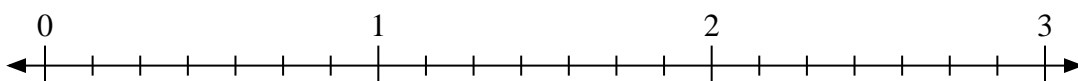
5)  $2:\frac{7}{8}$



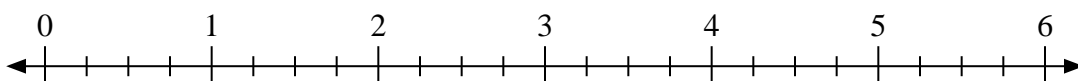
6)  $2:\frac{1}{3}$



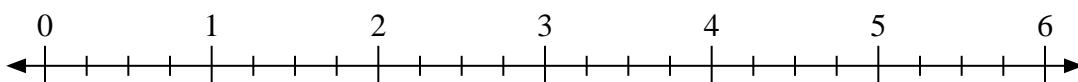
7)  $3:\frac{4}{7}$



8)  $5:\frac{3}{4}$



9)  $6:\frac{3}{4}$

**Risposte**

1. \_\_\_\_\_

2. \_\_\_\_\_

3. \_\_\_\_\_

4. \_\_\_\_\_

5. \_\_\_\_\_

6. \_\_\_\_\_

7. \_\_\_\_\_

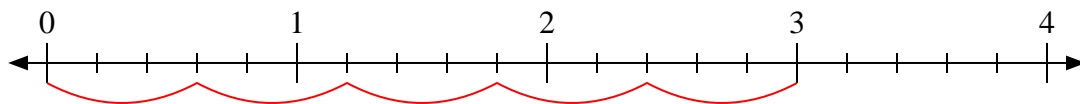
8. \_\_\_\_\_

9. \_\_\_\_\_

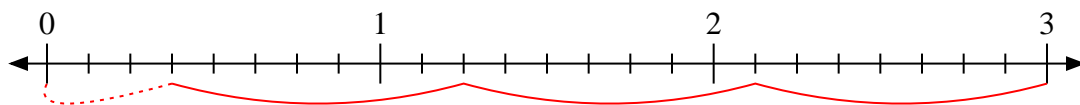


Usa la linea numerata per risolvere ogni problema.

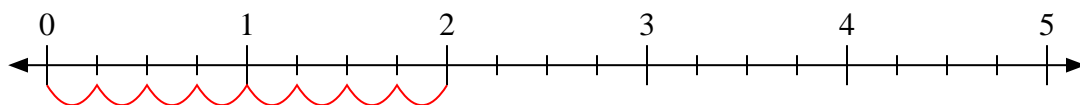
1)  $3:\frac{3}{5}$



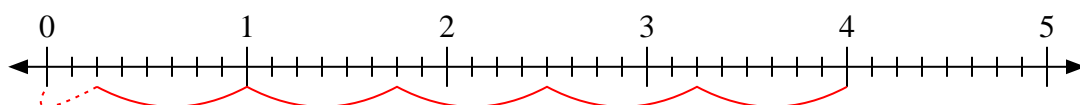
2)  $3:\frac{7}{8}$



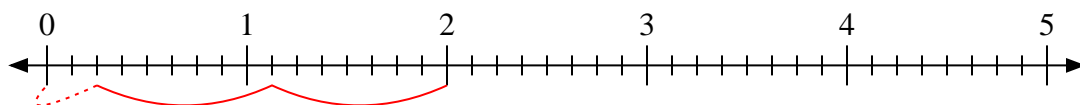
3)  $2:\frac{1}{4}$



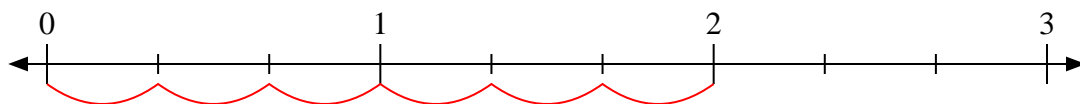
4)  $4:\frac{6}{8}$



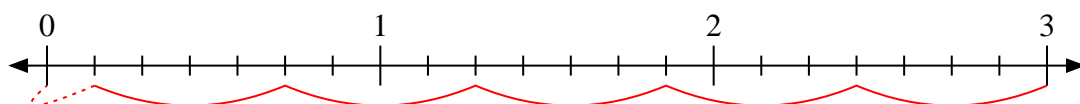
5)  $2:\frac{7}{8}$



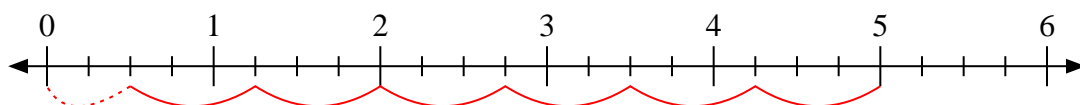
6)  $2:\frac{1}{3}$



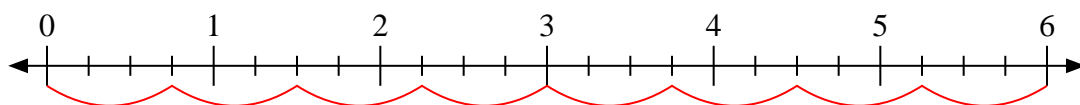
7)  $3:\frac{4}{7}$



8)  $5:\frac{3}{4}$



9)  $6:\frac{3}{4}$

**Risposte**

1. 5

2.  $3\frac{3}{7}$

3. 8

4.  $5\frac{2}{6}$

5.  $2\frac{2}{7}$

6. 6

7.  $5\frac{1}{4}$

8.  $6\frac{2}{3}$

9. 8