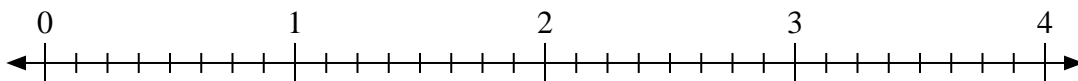


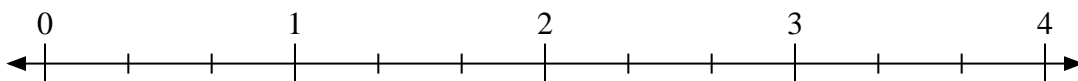


Usa la linea numerata per risolvere ogni problema.

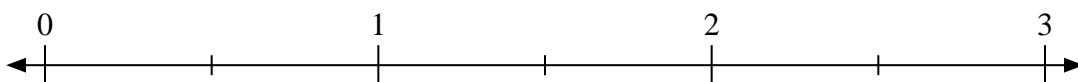
1)  $2:\frac{1}{8}$



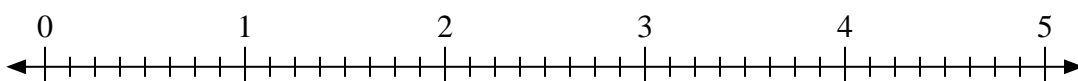
2)  $2:\frac{2}{3}$



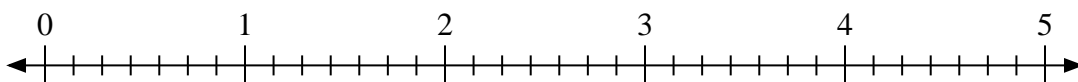
3)  $2:\frac{1}{2}$



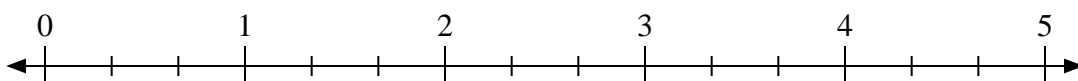
4)  $3:\frac{5}{8}$



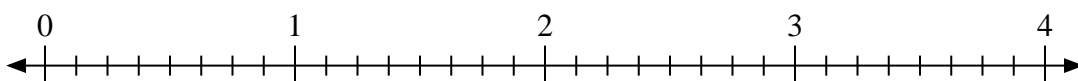
5)  $2:\frac{6}{7}$



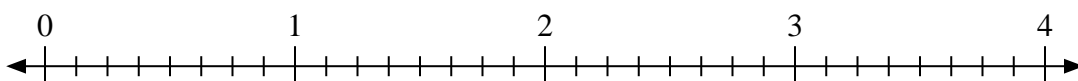
6)  $4:\frac{1}{3}$



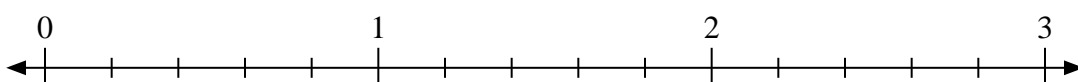
7)  $2:\frac{3}{8}$



8)  $2:\frac{2}{8}$



9)  $2:\frac{3}{5}$

**Risposte**

1. \_\_\_\_\_

2. \_\_\_\_\_

3. \_\_\_\_\_

4. \_\_\_\_\_

5. \_\_\_\_\_

6. \_\_\_\_\_

7. \_\_\_\_\_

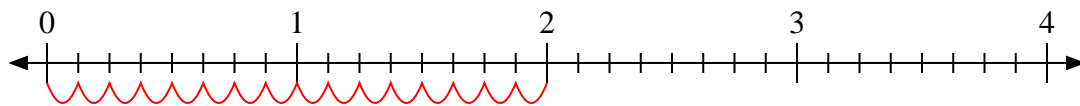
8. \_\_\_\_\_

9. \_\_\_\_\_

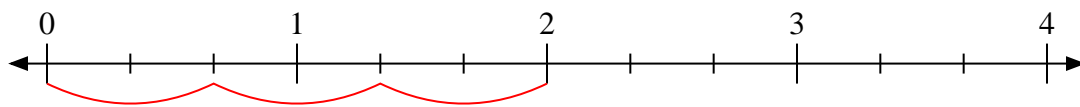


Usa la linea numerata per risolvere ogni problema.

1)  $2 : \frac{1}{8}$



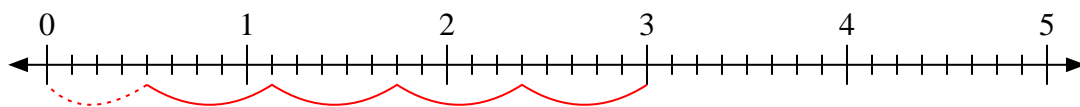
2)  $2 : \frac{2}{3}$



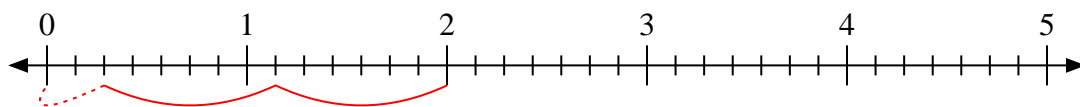
3)  $2 : \frac{1}{2}$



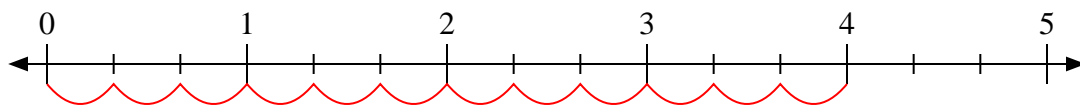
4)  $3 : \frac{5}{8}$



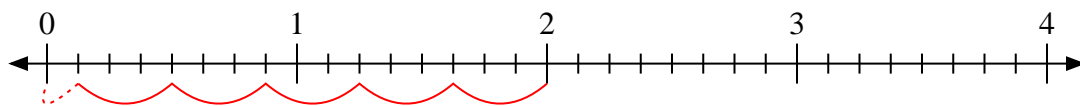
5)  $2 : \frac{6}{7}$



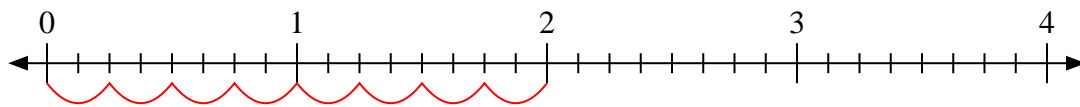
6)  $4 : \frac{1}{3}$



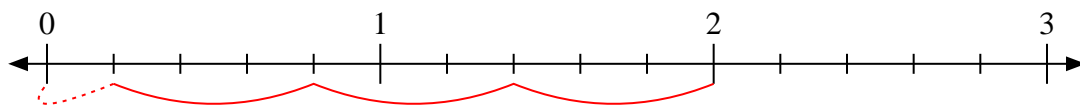
7)  $2 : \frac{3}{8}$



8)  $2 : \frac{2}{8}$



9)  $2 : \frac{3}{5}$

**Risposte**1. 162. 33. 44.  $4 \frac{4}{5}$ 5.  $2 \frac{2}{6}$ 6. 127.  $5 \frac{1}{3}$ 8. 89.  $3 \frac{1}{3}$