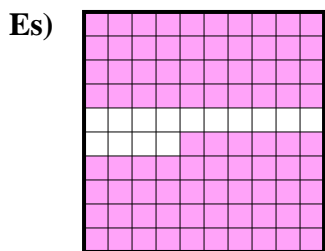
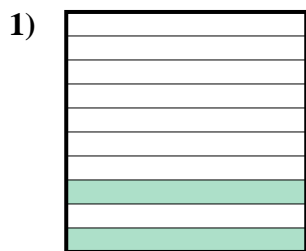




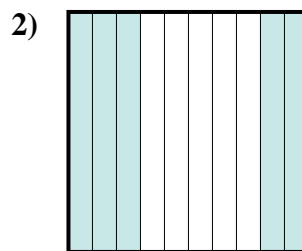
Determina il valore sotto forma di frazione, decimale e percentuale.



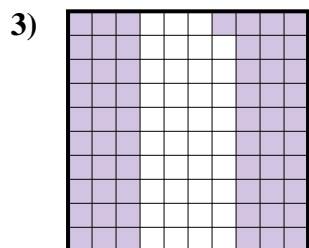
Frazione $\frac{86}{100}$
 Decimale $0,86$
 Percentuale 86



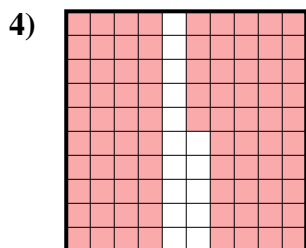
Frazione $\frac{2}{10}$
 Decimale $0,2$
 Percentuale 20



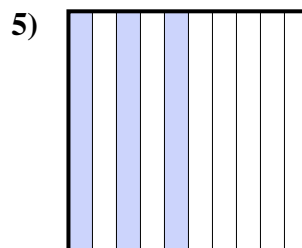
Frazione $\frac{5}{10}$
 Decimale $0,5$
 Percentuale 50



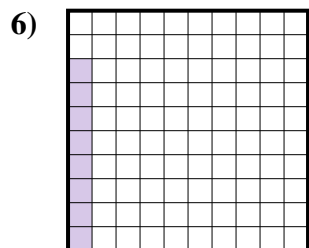
Frazione $\frac{61}{100}$
 Decimale $0,61$
 Percentuale 61



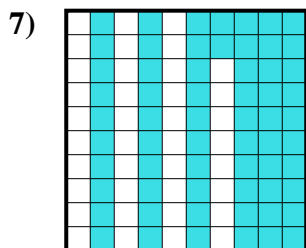
Frazione $\frac{85}{100}$
 Decimale $0,85$
 Percentuale 85



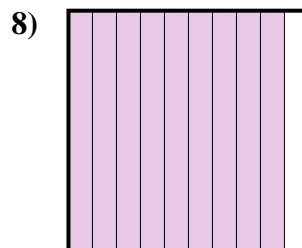
Frazione $\frac{3}{10}$
 Decimale $0,3$
 Percentuale 30



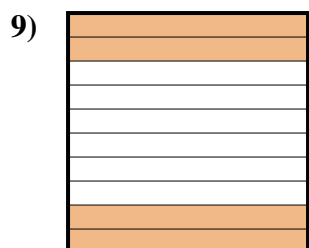
Frazione $\frac{8}{100}$
 Decimale $0,08$
 Percentuale 8



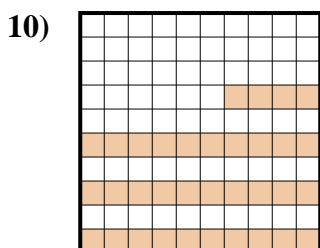
Frazione $\frac{62}{100}$
 Decimale $0,62$
 Percentuale 62



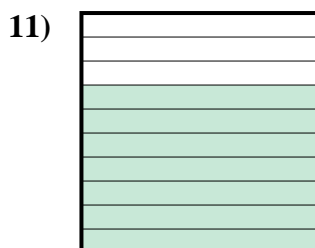
Frazione $\frac{9}{10}$
 Decimale $0,9$
 Percentuale 90



Frazione $\frac{4}{10}$
 Decimale $0,4$
 Percentuale 40



Frazione $\frac{34}{100}$
 Decimale $0,34$
 Percentuale 34



Frazione $\frac{7}{10}$
 Decimale $0,7$
 Percentuale 70

Risposte

Es.	$\frac{86}{100}$	0,86	86%
1.	$\frac{2}{10}$	0,2	20%
2.	$\frac{5}{10}$	0,5	50%
3.	$\frac{61}{100}$	0,61	61%
4.	$\frac{85}{100}$	0,85	85%
5.	$\frac{3}{10}$	0,3	30%
6.	$\frac{8}{100}$	0,08	8%
7.	$\frac{62}{100}$	0,62	62%
8.	$\frac{9}{10}$	0,9	90%
9.	$\frac{4}{10}$	0,4	40%
10.	$\frac{34}{100}$	0,34	34%
11.	$\frac{7}{10}$	0,7	70%