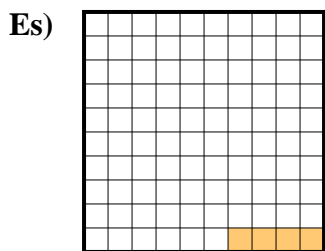
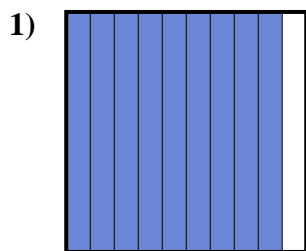





Determina il valore sotto forma di frazione, decimale e percentuale.




Frazione $\frac{4}{100}$
 Decimale $0,04$
 Percentuale 4




Frazione $\frac{9}{10}$
 Decimale $0,9$
 Percentuale 90



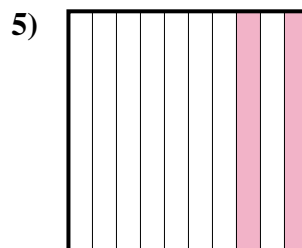
Frazione $\frac{8}{10}$
 Decimale $0,8$
 Percentuale 80



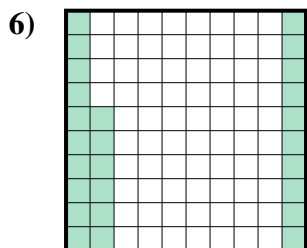
Frazione $\frac{3}{10}$
 Decimale $0,3$
 Percentuale 30



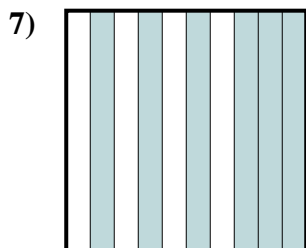
Frazione $\frac{24}{100}$
 Decimale $0,24$
 Percentuale 24



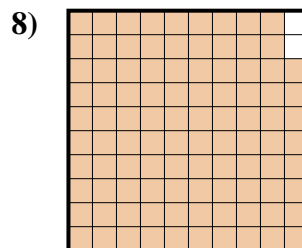
Frazione $\frac{2}{10}$
 Decimale $0,2$
 Percentuale 20



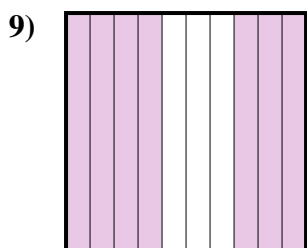
Frazione $\frac{26}{100}$
 Decimale $0,26$
 Percentuale 26



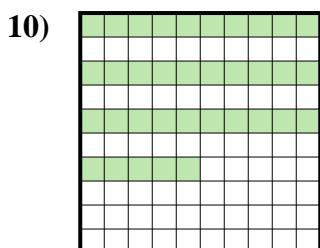
Frazione $\frac{6}{10}$
 Decimale $0,6$
 Percentuale 60



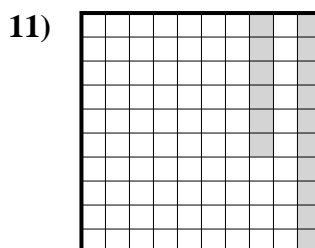
Frazione $\frac{98}{100}$
 Decimale $0,98$
 Percentuale 98



Frazione $\frac{7}{10}$
 Decimale $0,7$
 Percentuale 70



Frazione $\frac{35}{100}$
 Decimale $0,35$
 Percentuale 35



Frazione $\frac{16}{100}$
 Decimale $0,16$
 Percentuale 16

Risposte

Es.	$\frac{4}{100}$	0,04	4%
1.	$\frac{9}{10}$	0,9	90%
2.	$\frac{8}{10}$	0,8	80%
3.	$\frac{3}{10}$	0,3	30%
4.	$\frac{24}{100}$	0,24	24%
5.	$\frac{2}{10}$	0,2	20%
6.	$\frac{26}{100}$	0,26	26%
7.	$\frac{6}{10}$	0,6	60%
8.	$\frac{98}{100}$	0,98	98%
9.	$\frac{7}{10}$	0,7	70%
10.	$\frac{35}{100}$	0,35	35%
11.	$\frac{16}{100}$	0,16	16%