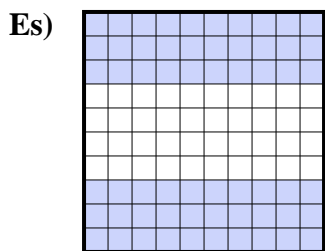


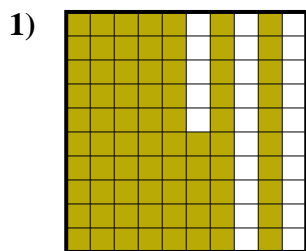




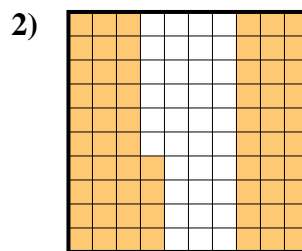
Determina il valore sotto forma di frazione, decimale e percentuale.



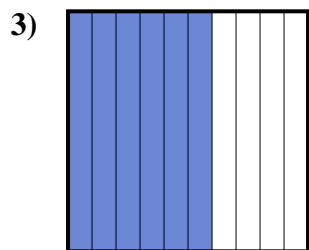
Frazione  $\frac{60}{100}$   
 Decimale  $0,60$   
 Percentuale  $60$



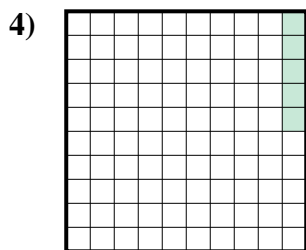
Frazione  $\frac{75}{100}$   
 Decimale  $0,75$   
 Percentuale  $75$



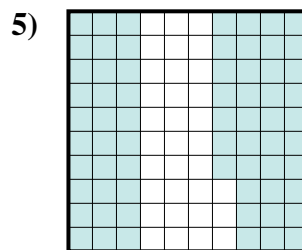
Frazione  $\frac{64}{100}$   
 Decimale  $0,64$   
 Percentuale  $64$



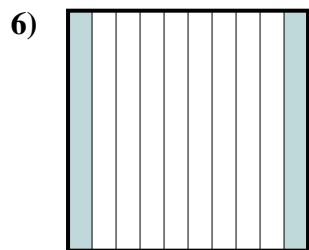
Frazione  $\frac{6}{10}$   
 Decimale  $0,6$   
 Percentuale  $60$



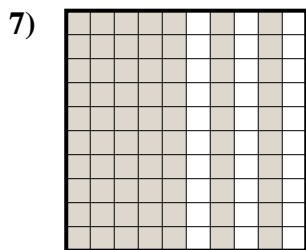
Frazione  $\frac{5}{100}$   
 Decimale  $0,05$   
 Percentuale  $5$



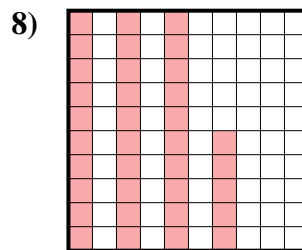
Frazione  $\frac{67}{100}$   
 Decimale  $0,67$   
 Percentuale  $67$



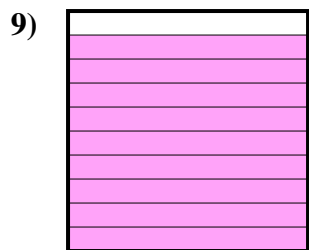
Frazione  $\frac{2}{10}$   
 Decimale  $0,2$   
 Percentuale  $20$




Frazione  $\frac{70}{100}$   
 Decimale  $0,70$   
 Percentuale  $70$



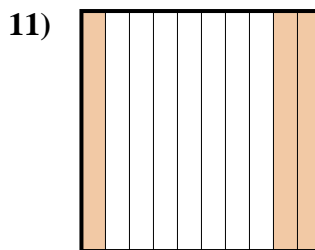
Frazione  $\frac{35}{100}$   
 Decimale  $0,35$   
 Percentuale  $35$



Frazione  $\frac{9}{10}$   
 Decimale  $0,9$   
 Percentuale  $90$



Frazione  $\frac{8}{10}$   
 Decimale  $0,8$   
 Percentuale  $80$



Frazione  $\frac{3}{10}$   
 Decimale  $0,3$   
 Percentuale  $30$

**Risposte**

- Es.  $\frac{60}{100}$  **0,60** **60%**  
 1.  $\frac{75}{100}$  **0,75** **75%**  
 2.  $\frac{64}{100}$  **0,64** **64%**  
 3.  $\frac{6}{10}$  **0,6** **60%**  
 4.  $\frac{5}{100}$  **0,05** **5%**  
 5.  $\frac{67}{100}$  **0,67** **67%**  
 6.  $\frac{2}{10}$  **0,2** **20%**  
 7.  $\frac{70}{100}$  **0,70** **70%**  
 8.  $\frac{35}{100}$  **0,35** **35%**  
 9.  $\frac{9}{10}$  **0,9** **90%**  
 10.  $\frac{8}{10}$  **0,8** **80%**  
 11.  $\frac{3}{10}$  **0,3** **30%**