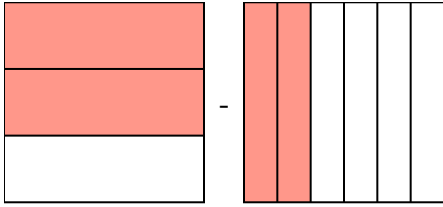


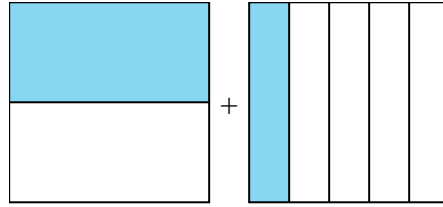


**Risolvi ogni problema.**

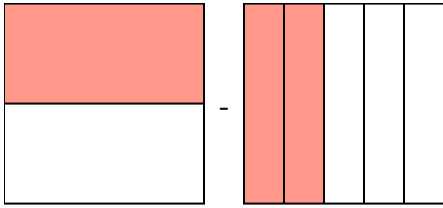
1)  $\frac{2}{3} - \frac{2}{6} =$



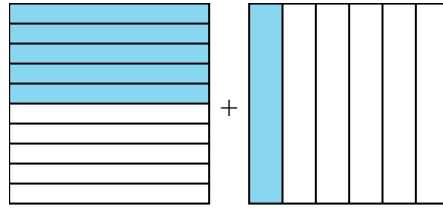
2)  $\frac{1}{2} + \frac{1}{5} =$



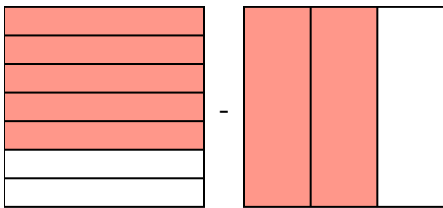
3)  $\frac{1}{2} - \frac{2}{5} =$



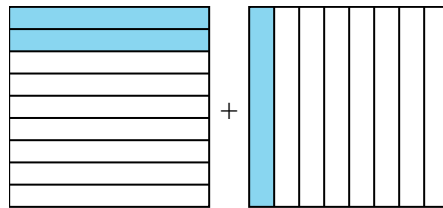
4)  $\frac{5}{10} + \frac{1}{6} =$



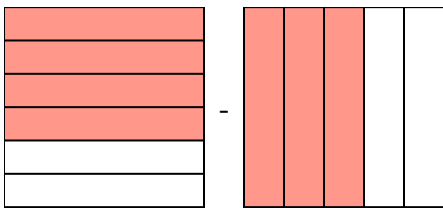
5)  $\frac{5}{7} - \frac{2}{3} =$



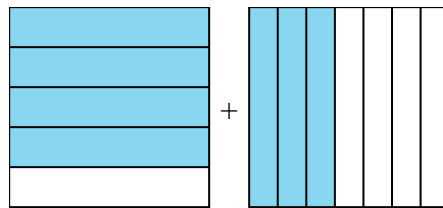
6)  $\frac{2}{9} + \frac{1}{8} =$



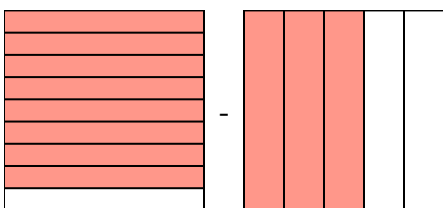
7)  $\frac{4}{6} - \frac{3}{5} =$



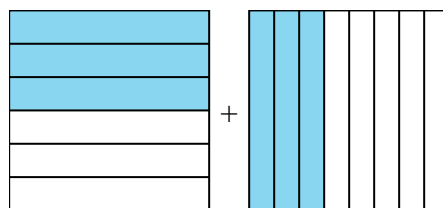
8)  $\frac{4}{5} + \frac{3}{7} =$



9)  $\frac{8}{9} - \frac{3}{5} =$



10)  $\frac{3}{6} + \frac{3}{8} =$



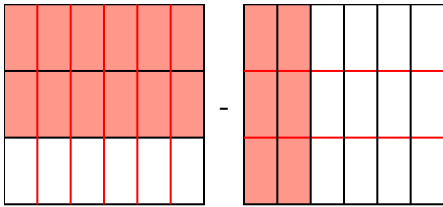
**Risposte**

1. \_\_\_\_\_
2. \_\_\_\_\_
3. \_\_\_\_\_
4. \_\_\_\_\_
5. \_\_\_\_\_
6. \_\_\_\_\_
7. \_\_\_\_\_
8. \_\_\_\_\_
9. \_\_\_\_\_
10. \_\_\_\_\_

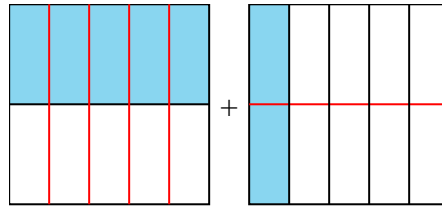


Risolvi ogni problema.

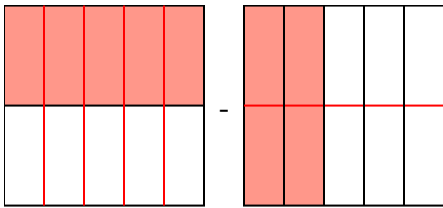
1)  $\frac{2}{3} - \frac{2}{6} = \frac{4}{6} - \frac{2}{6} = \frac{2}{6}$



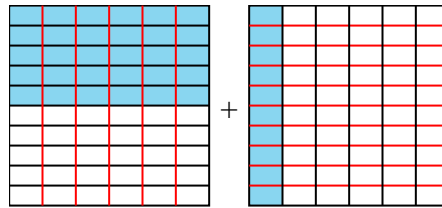
2)  $\frac{1}{2} + \frac{1}{5} = \frac{5}{10} + \frac{2}{10} = \frac{7}{10}$



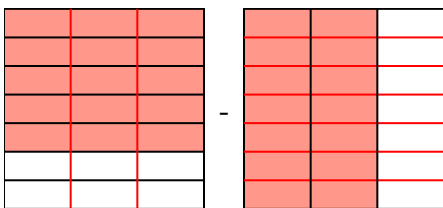
3)  $\frac{1}{2} - \frac{2}{5} = \frac{5}{10} - \frac{4}{10} = \frac{1}{10}$



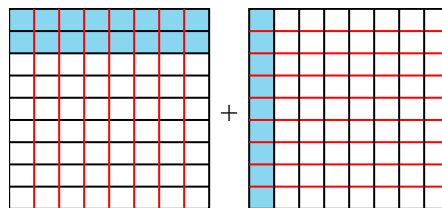
4)  $\frac{5}{10} + \frac{1}{6} = \frac{15}{30} + \frac{5}{30} = \frac{20}{30}$



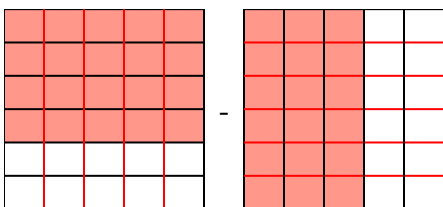
5)  $\frac{5}{7} - \frac{2}{3} = \frac{15}{21} - \frac{14}{21} = \frac{1}{21}$



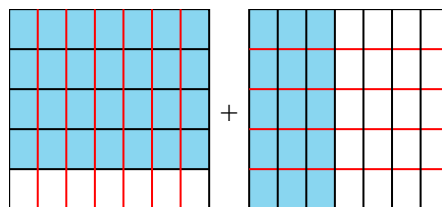
6)  $\frac{2}{9} + \frac{1}{8} = \frac{16}{72} + \frac{9}{72} = \frac{25}{72}$



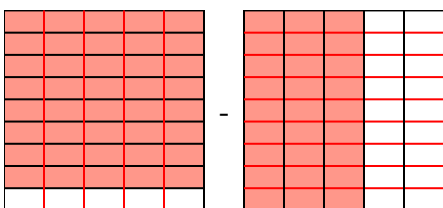
7)  $\frac{4}{6} - \frac{3}{5} = \frac{20}{30} - \frac{18}{30} = \frac{2}{30}$



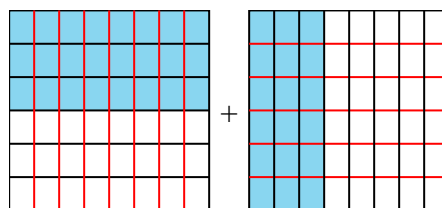
8)  $\frac{4}{5} + \frac{3}{7} = \frac{28}{35} + \frac{15}{35} = 1\frac{8}{35}$



9)  $\frac{8}{9} - \frac{3}{5} = \frac{40}{45} - \frac{27}{45} = \frac{13}{45}$



10)  $\frac{3}{6} + \frac{3}{8} = \frac{12}{24} + \frac{9}{24} = \frac{21}{24}$



**Risposte**

1.  $\frac{2}{6}$
2.  $\frac{7}{10}$
3.  $\frac{1}{10}$
4.  $\frac{20}{30}$
5.  $\frac{1}{21}$
6.  $\frac{25}{72}$
7.  $\frac{2}{30}$
8.  $1\frac{8}{35}$
9.  $\frac{13}{45}$
10.  $\frac{21}{24}$