



Determina quale lettera rappresenta graficamente la somma numerica.

1)  $\frac{1}{8} + \frac{2}{8}$

3)  $\frac{2}{6} + \frac{3}{6}$

5)  $\frac{3}{5} + \frac{1}{5}$

7)  $\frac{1}{2} + \frac{1}{2}$

9)  $\frac{3}{6} + \frac{5}{6}$

11)  $\frac{3}{10} + \frac{5}{10}$

13)  $\frac{5}{8} + \frac{2}{8}$

2)  $\frac{4}{6} + \frac{3}{6}$

4)  $\frac{4}{6} + \frac{2}{6}$

6)  $\frac{3}{4} + \frac{3}{4}$

8)  $\frac{4}{5} + \frac{4}{5}$

10)  $\frac{2}{10} + \frac{9}{10}$

12)  $\frac{1}{6} + \frac{1}{6}$

14)  $\frac{2}{8} + \frac{2}{8}$

**Risposte**

1. \_\_\_\_\_

2. \_\_\_\_\_

3. \_\_\_\_\_

4. \_\_\_\_\_

5. \_\_\_\_\_

6. \_\_\_\_\_

7. \_\_\_\_\_

8. \_\_\_\_\_

9. \_\_\_\_\_

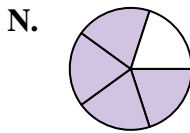
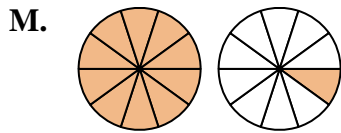
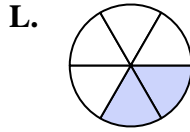
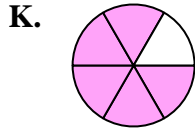
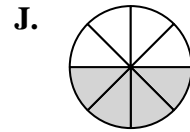
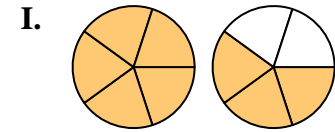
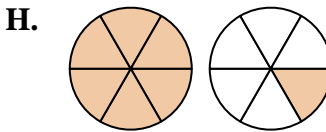
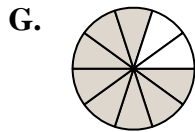
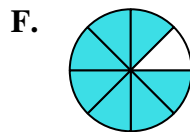
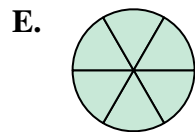
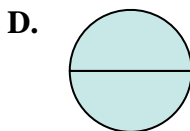
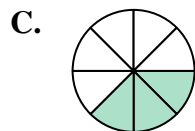
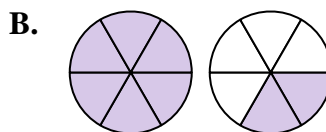
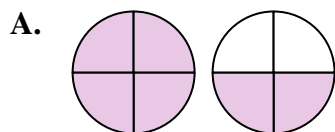
10. \_\_\_\_\_

11. \_\_\_\_\_

12. \_\_\_\_\_

13. \_\_\_\_\_

14. \_\_\_\_\_





Determina quale lettera rappresenta graficamente la somma numerica.

1)  $\frac{1}{8} + \frac{2}{8}$

3)  $\frac{2}{6} + \frac{3}{6}$

5)  $\frac{3}{5} + \frac{1}{5}$

7)  $\frac{1}{2} + \frac{1}{2}$

9)  $\frac{3}{6} + \frac{5}{6}$

11)  $\frac{3}{10} + \frac{5}{10}$

13)  $\frac{5}{8} + \frac{2}{8}$

2)  $\frac{4}{6} + \frac{3}{6}$

4)  $\frac{4}{6} + \frac{2}{6}$

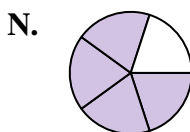
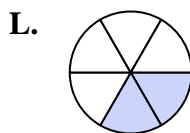
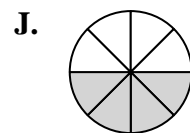
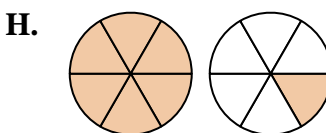
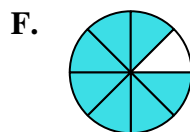
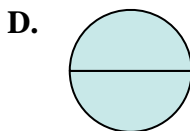
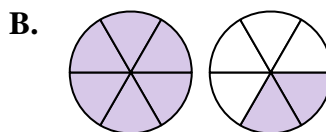
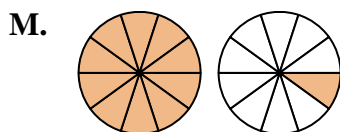
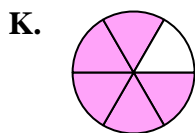
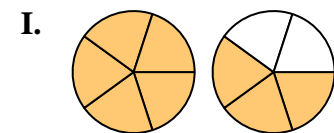
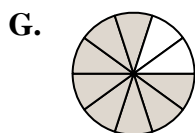
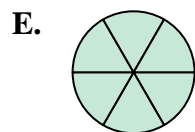
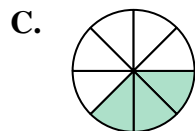
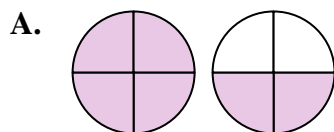
6)  $\frac{3}{4} + \frac{3}{4}$

8)  $\frac{4}{5} + \frac{4}{5}$

10)  $\frac{2}{10} + \frac{9}{10}$

12)  $\frac{1}{6} + \frac{1}{6}$

14)  $\frac{2}{8} + \frac{2}{8}$

**Risposte**

1. **C**  $\frac{3}{8}$

2. **H**  $1\frac{1}{6}$

3. **K**  $\frac{5}{6}$

4. **E**  $\frac{6}{6}$

5. **N**  $\frac{4}{5}$

6. **A**  $1\frac{2}{4}$

7. **D**  $\frac{2}{2}$

8. **I**  $1\frac{3}{5}$

9. **B**  $1\frac{2}{6}$

10. **M**  $1\frac{1}{10}$

11. **G**  $\frac{8}{10}$

12. **L**  $\frac{2}{6}$

13. **F**  $\frac{7}{8}$

14. **J**  $\frac{4}{8}$