
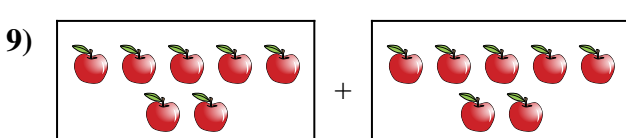
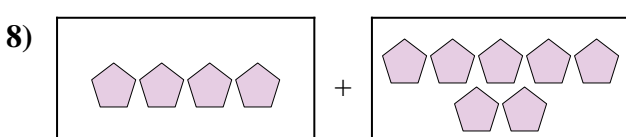
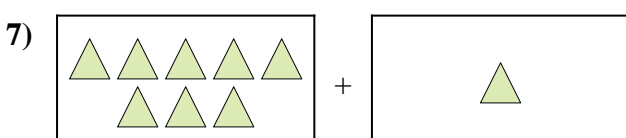
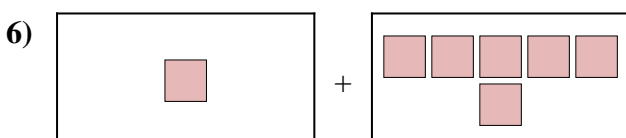
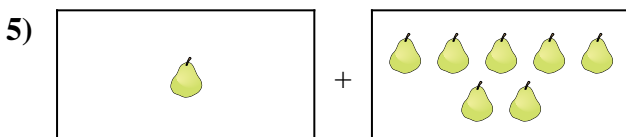
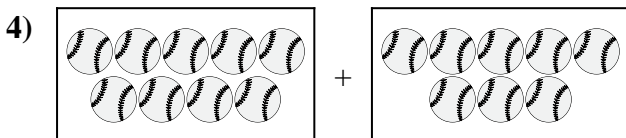
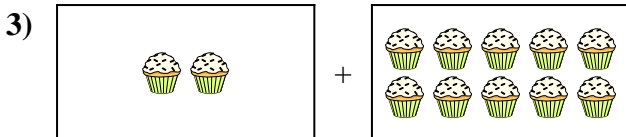
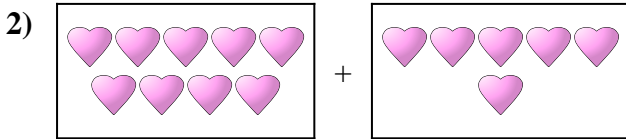
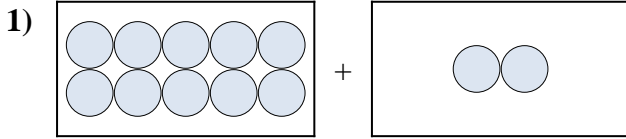




Esprimi il problema visivo come un'equazione con risposta.



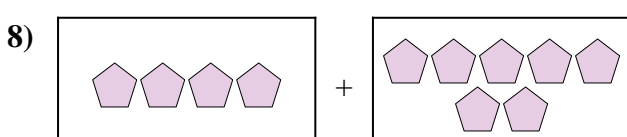
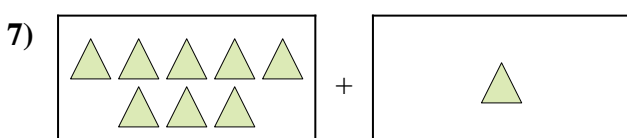
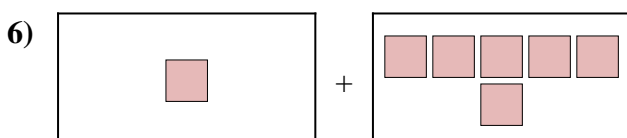
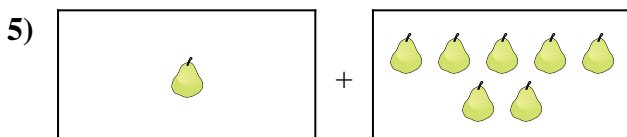
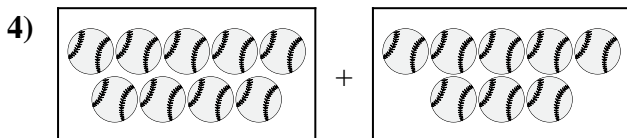
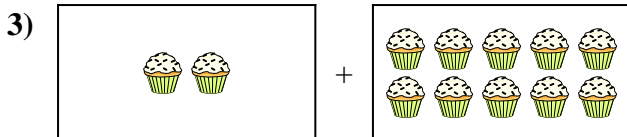
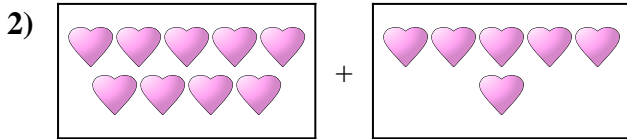
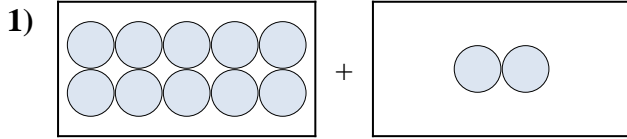
Risposte



1. _____
2. _____
3. _____
4. _____
5. _____
6. _____
7. _____
8. _____
9. _____
10. _____



Esprimi il problema visivo come un'equazione con risposta.



Risposte

1. $10 + 2 = 12$

2. $9 + 6 = 15$

3. $2 + 10 = 12$

4. $9 + 8 = 17$

5. $1 + 7 = 8$

6. $1 + 6 = 7$

7. $8 + 1 = 9$

8. $4 + 7 = 11$

9. $7 + 7 = 14$

10. $9 + 7 = 16$