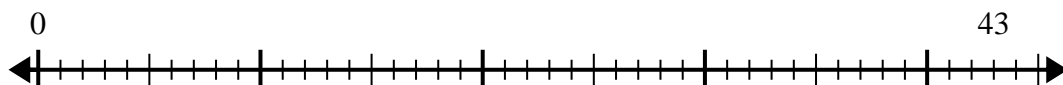


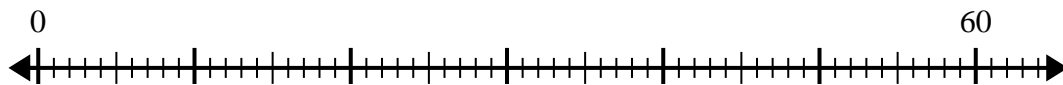


Usa la linea dei numeri per risolvere il problema della divisione.

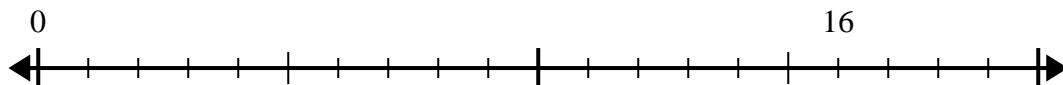
1) $43:5=$



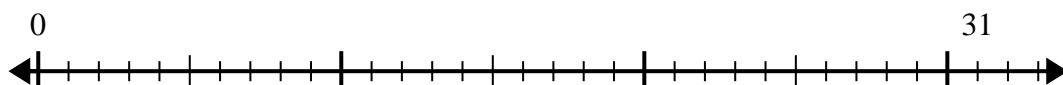
2) $60:7=$



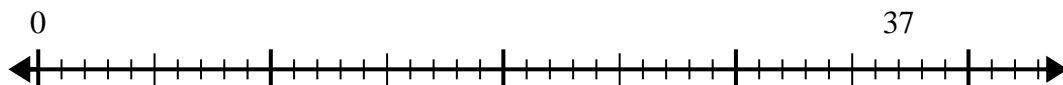
3) $16:5=$



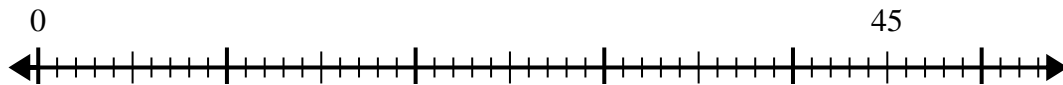
4) $31:4=$



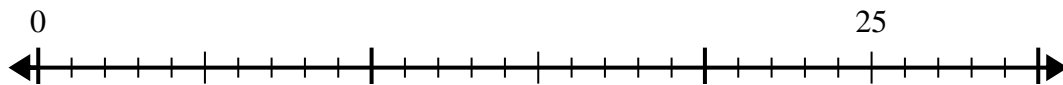
5) $37:7=$



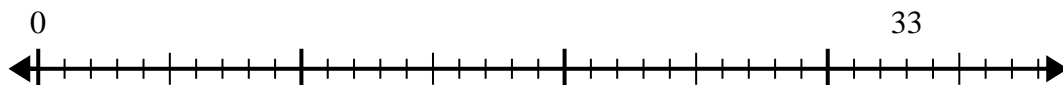
6) $45:8=$



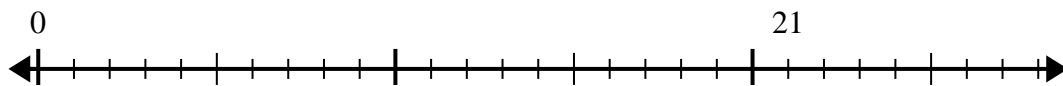
7) $25:4=$



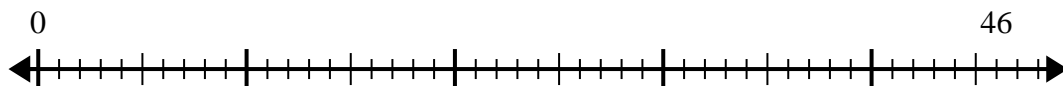
8) $33:5=$



9) $21:4=$



10) $46:6=$



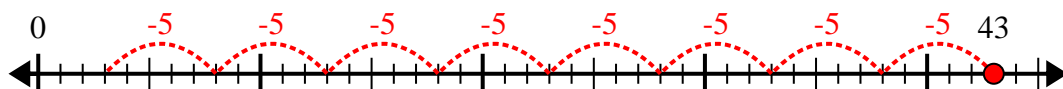
Risposte

1. _____
2. _____
3. _____
4. _____
5. _____
6. _____
7. _____
8. _____
9. _____
10. _____

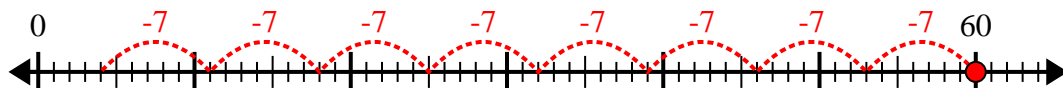


Usa la linea dei numeri per risolvere il problema della divisione.

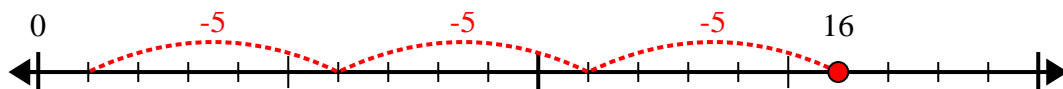
1) $43:5=$



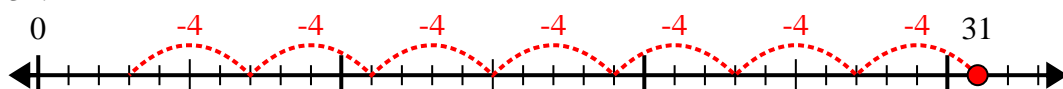
2) $60:7=$



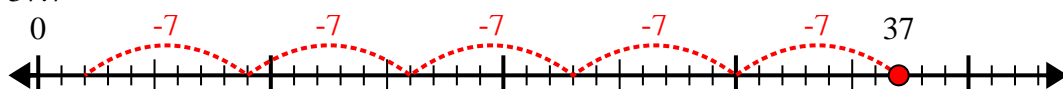
3) $16:5=$



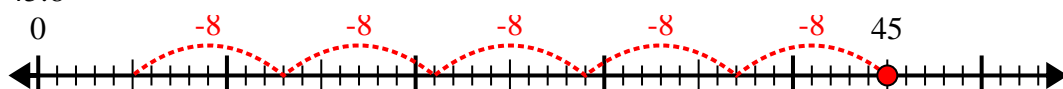
4) $31:4=$



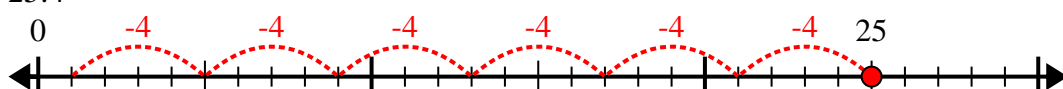
5) $37:7=$



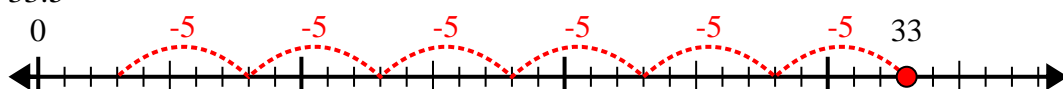
6) $45:8=$



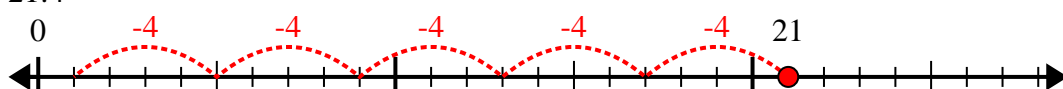
7) $25:4=$



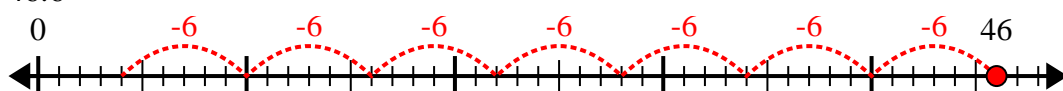
8) $33:5=$



9) $21:4=$



10) $46:6=$



Risposte

1. 8r3

2. 8r4

3. 3r1

4. 7r3

5. 5r2

6. 5r5

7. 6r1

8. 6r3

9. 5r1

10. 7r4