
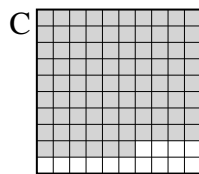

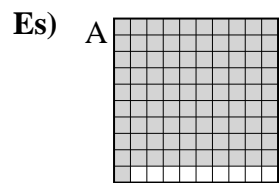




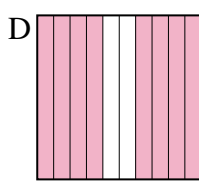
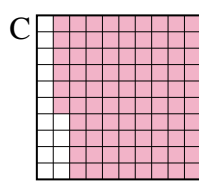
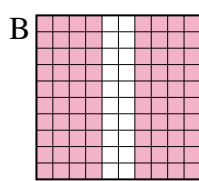
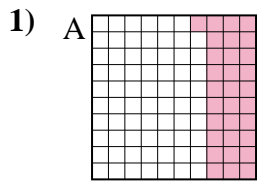
Metti in ordine i seguenti schemi dal più piccolo al più grande, in base alle parti colorate



piccolo 0.2 - B
0.6 - D
0.86 - C
grande 0.91 - A

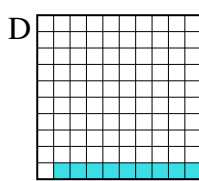
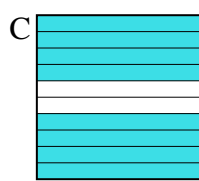
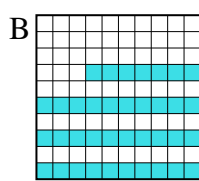
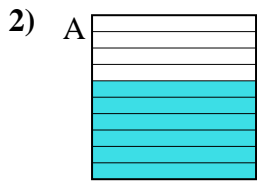
Risposte

Es. **B,D,C,A**



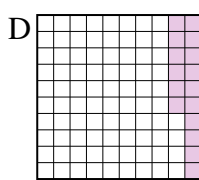
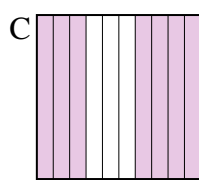
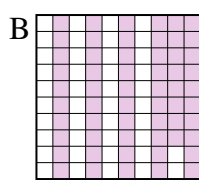
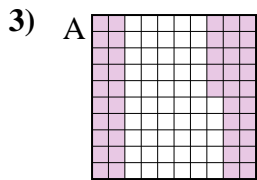
piccolo _____

grande _____



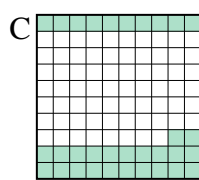
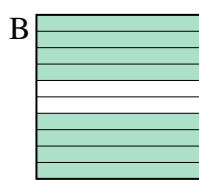
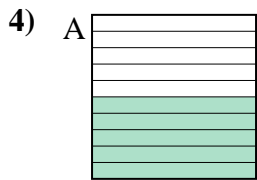
piccolo _____

grande _____



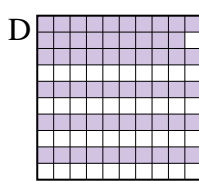
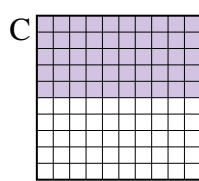
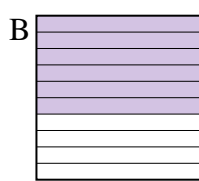
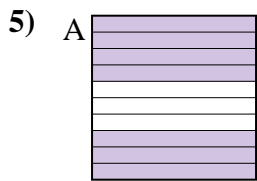
piccolo _____

grande _____





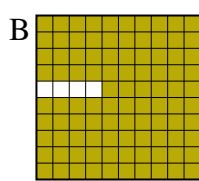
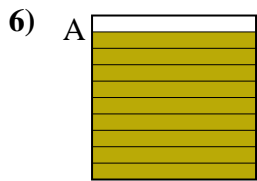
piccolo _____

grande _____



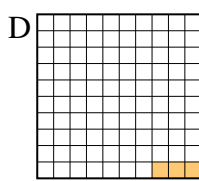
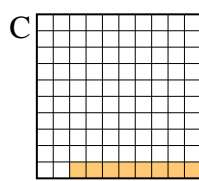
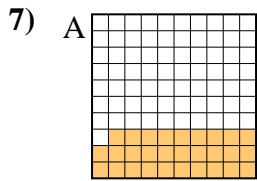
piccolo _____

grande _____



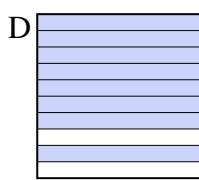
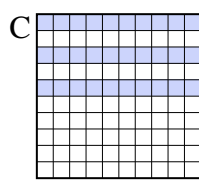
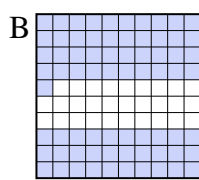
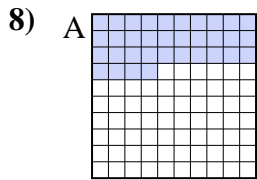
piccolo _____

grande _____



piccolo _____

grande _____



piccolo _____

grande _____

1. _____
2. _____
3. _____
4. _____
5. _____
6. _____
7. _____
8. _____



Metti in ordine i seguenti schemi dal più piccolo al più grande, in base alle parti colorate

Es)	A	B	C	D	piccolo $\frac{0.2 - B}{0.6 - D}$	
					grande $\frac{0.91 - A}{0.91 - A}$	
1)	A	B	C	D	piccolo $\frac{0.31 - A}{0.8 - B}$	
					grande $\frac{0.86 - C}{0.86 - C}$	
2)	A	B	C	D	piccolo $\frac{0.09 - D}{0.37 - B}$	
					grande $\frac{0.6 - A}{0.8 - C}$	
3)	A	B	C	D	piccolo $\frac{0.16 - D}{0.45 - A}$	
					grande $\frac{0.58 - B}{0.7 - C}$	
4)	A	B	C	D	piccolo $\frac{0.2 - D}{0.32 - C}$	
					grande $\frac{0.5 - A}{0.8 - B}$	
5)	A	B	C	D	piccolo $\frac{0.5 - C}{0.59 - D}$	
					grande $\frac{0.6 - B}{0.7 - A}$	
6)	A	B	C	D	piccolo $\frac{0.1 - C}{0.7 - D}$	
					grande $\frac{0.9 - A}{0.96 - B}$	
7)	A	B	C	D	piccolo $\frac{0.03 - D}{0.08 - C}$	
					grande $\frac{0.1 - B}{0.29 - A}$	
8)	A	B	C	D	piccolo $\frac{0.3 - C}{0.34 - A}$	
					grande $\frac{0.71 - B}{0.8 - D}$	

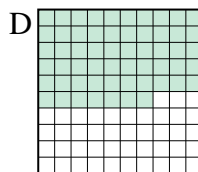
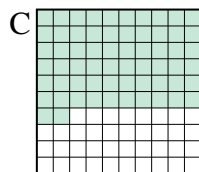
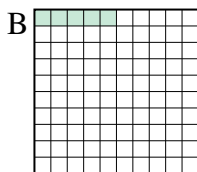
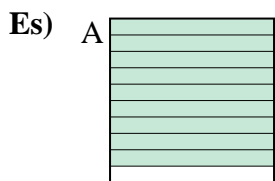
Risposte

- Es. B,D,C,A
1. A,B,B,C
2. D,B,A,C
3. D,A,B,C
4. D,C,A,B
5. C,D,B,A
6. C,D,A,B
7. D,C,B,A
8. C,A,B,D



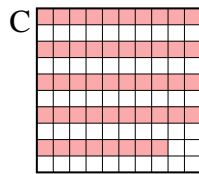
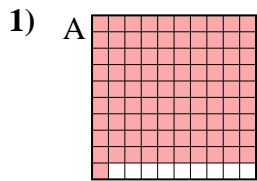
Metti in ordine i seguenti schemi dal più piccolo al più grande, in base alle parti colorate

Risposte

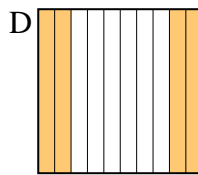
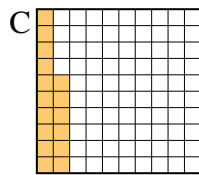
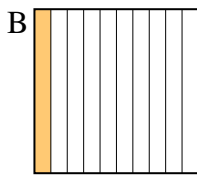
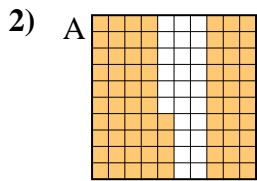


piccolo 0.05 - B
0.57 - D
0.62 - C
grande 0.9 - A

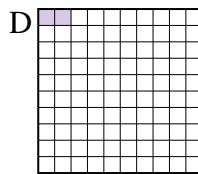
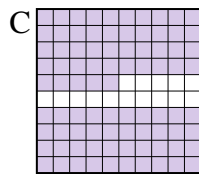

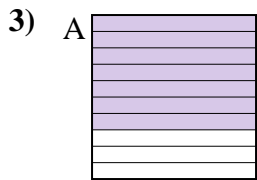
Es. **B,D,C,A**



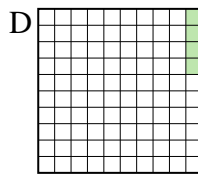
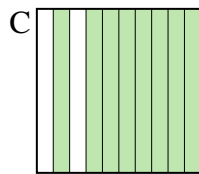
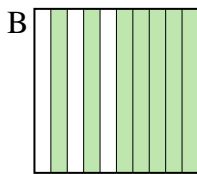
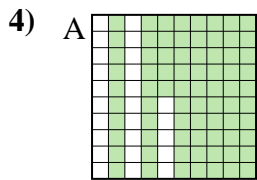
piccolo _____
grande _____



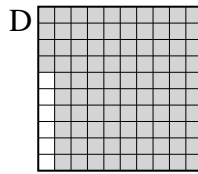
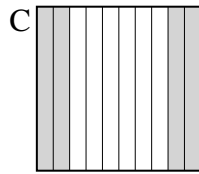
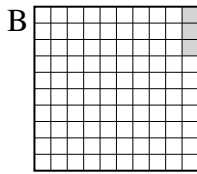
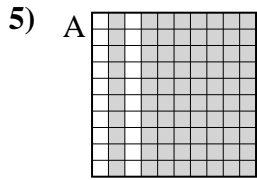
piccolo _____
grande _____



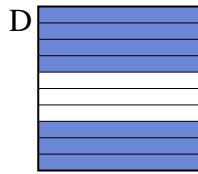
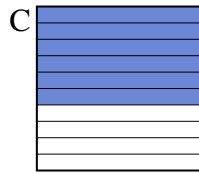
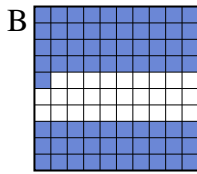
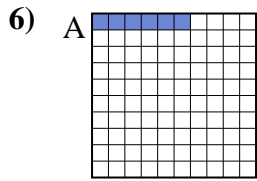
piccolo _____
grande _____



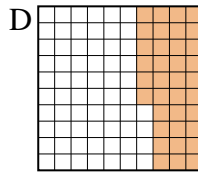
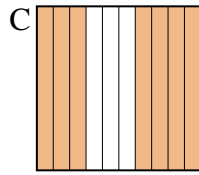
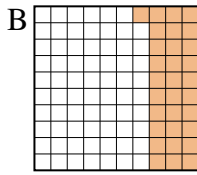
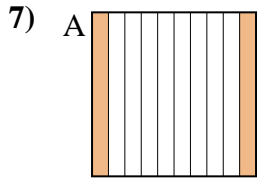
piccolo _____
grande _____



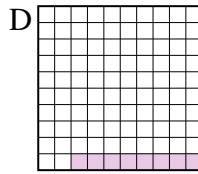
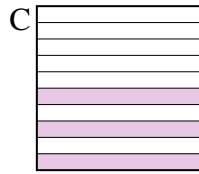
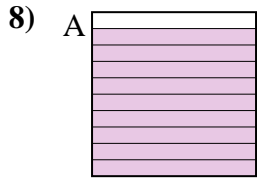
piccolo _____
grande _____



piccolo _____
grande _____



piccolo _____
grande _____



piccolo _____
grande _____

1. _____
2. _____
3. _____
4. _____
5. _____
6. _____
7. _____
8. _____



Metti in ordine i seguenti schemi dal più piccolo al più grande, in base alle parti colorate

Es)	A	B	C	D	piccolo $\frac{0.05 - B}{0.57 - D}$	
					grande $\frac{0.62 - C}{0.9 - A}$	
1)	A	B	C	D	piccolo $\frac{0.48 - C}{0.5 - B}$	
					grande $\frac{0.6 - D}{0.91 - A}$	
2)	A	B	C	D	piccolo $\frac{0.1 - B}{0.16 - C}$	
					grande $\frac{0.4 - D}{0.74 - A}$	
3)	A	B	C	D	piccolo $\frac{0.02 - D}{0.1 - B}$	
					grande $\frac{0.7 - A}{0.85 - C}$	
4)	A	B	C	D	piccolo $\frac{0.04 - D}{0.7 - B}$	
					grande $\frac{0.75 - A}{0.8 - C}$	
5)	A	B	C	D	piccolo $\frac{0.03 - B}{0.4 - C}$	
					grande $\frac{0.8 - A}{0.94 - D}$	
6)	A	B	C	D	piccolo $\frac{0.06 - A}{0.6 - C}$	
					grande $\frac{0.7 - D}{0.71 - B}$	
7)	A	B	C	D	piccolo $\frac{0.2 - A}{0.31 - B}$	
					grande $\frac{0.36 - D}{0.7 - C}$	
8)	A	B	C	D	piccolo $\frac{0.08 - D}{0.3 - C}$	
					grande $\frac{0.4 - B}{0.9 - A}$	

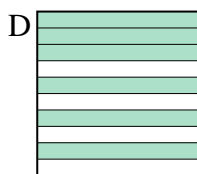
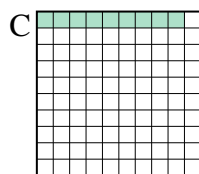
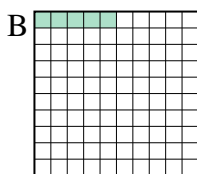
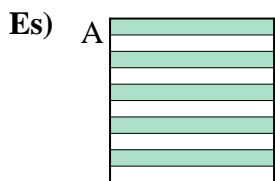
Risposte

- Es. **B,D,C,A**
1. **C,B,D,A**
2. **B,C,D,A**
3. **D,B,A,C**
4. **D,B,A,C**
5. **B,C,A,D**
6. **A,C,D,B**
7. **A,B,D,C**
8. **D,C,B,A**



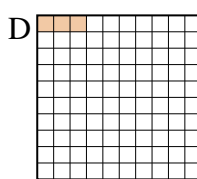
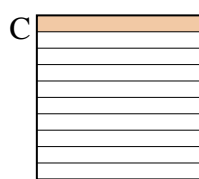
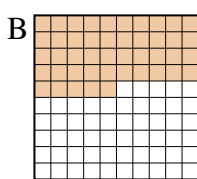
Metti in ordine i seguenti schemi dal più piccolo al più grande, in base alle parti colorate

Risposte



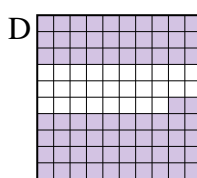
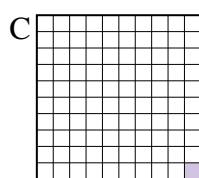
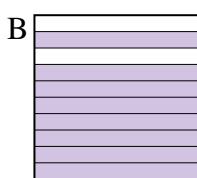
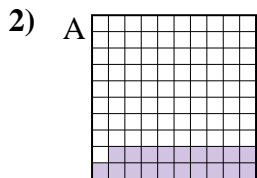
piccolo 0.05 - B
0.09 - C
0.5 - A
grande 0.6 - D

Es. **B,C,A,D**



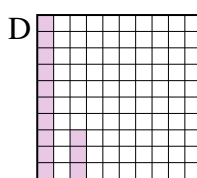
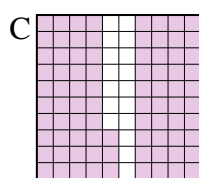
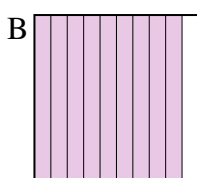
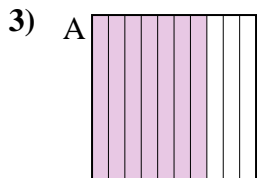
piccolo _____

grande _____



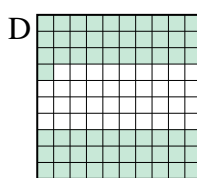
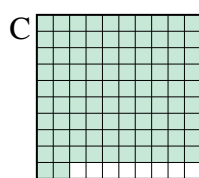

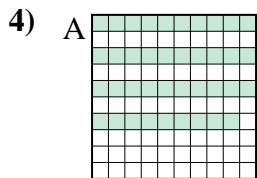
piccolo _____

grande _____



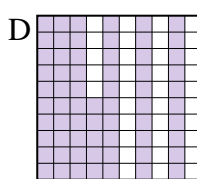
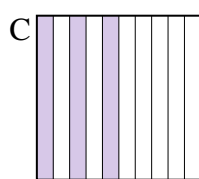
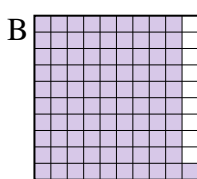
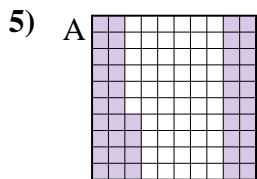
piccolo _____

grande _____



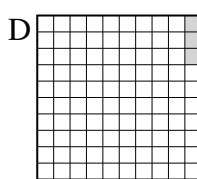
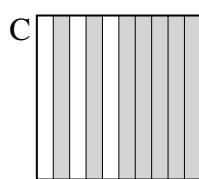
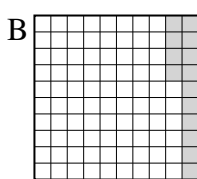
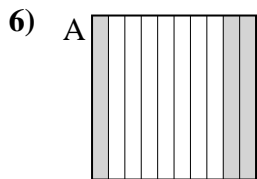
piccolo _____

grande _____



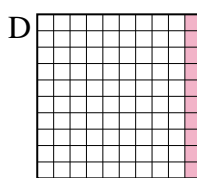
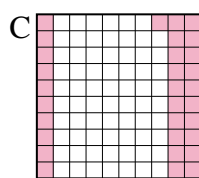
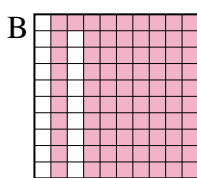
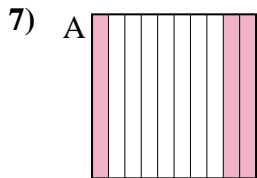
piccolo _____

grande _____




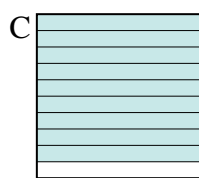
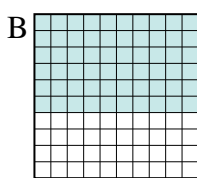
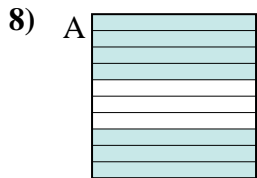
piccolo _____

grande _____



piccolo _____

grande _____




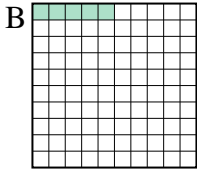
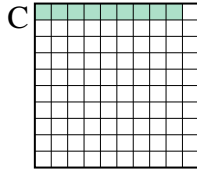
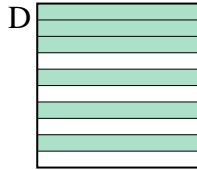

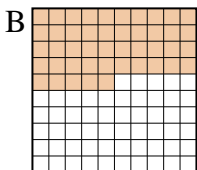

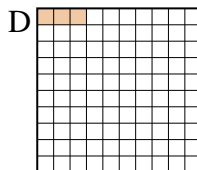
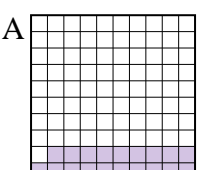
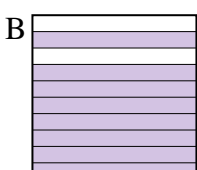
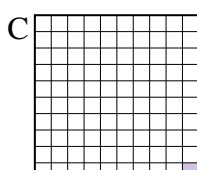
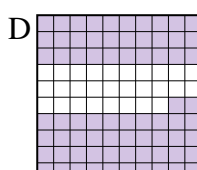
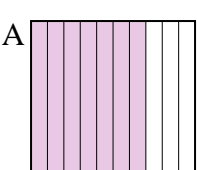
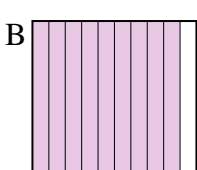
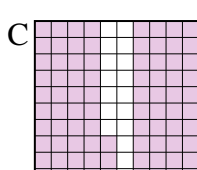
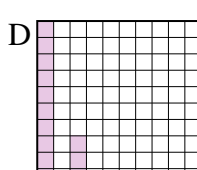
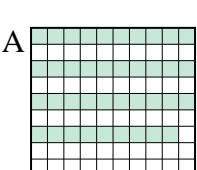
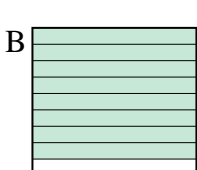
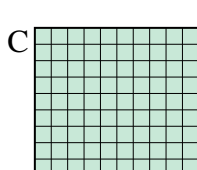
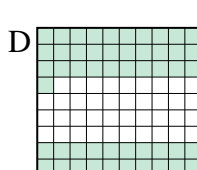
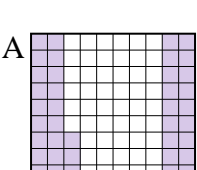
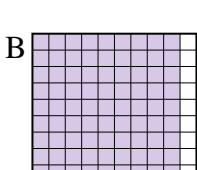
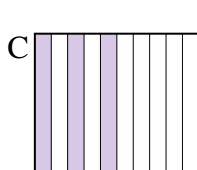
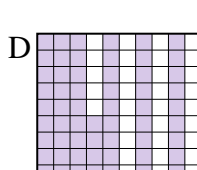
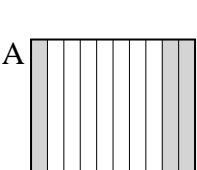
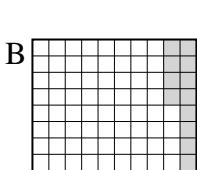
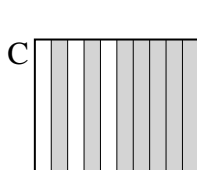
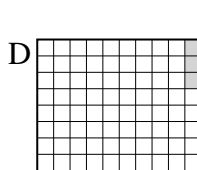
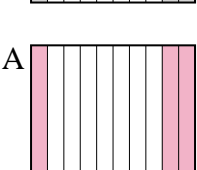
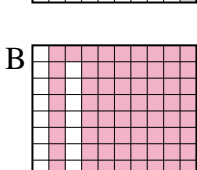
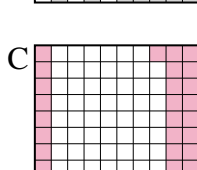
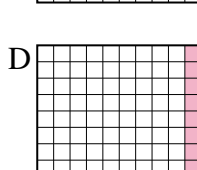

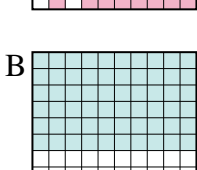
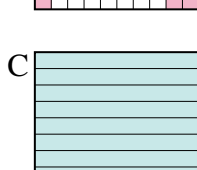

piccolo _____

grande _____

1. _____
2. _____
3. _____
4. _____
5. _____
6. _____
7. _____
8. _____



Metti in ordine i seguenti schemi dal più piccolo al più grande, in base alle parti colorate

Es)	A 	B 	C 	D 	piccolo $\frac{0.05 - B}{0.09 - C}$	
					grande $\frac{0.5 - A}{0.6 - D}$	
1)	A 	B 	C 	D 	piccolo $\frac{0.03 - D}{0.1 - C}$	
					grande $\frac{0.4 - A}{0.45 - B}$	
2)	A 	B 	C 	D 	piccolo $\frac{0.01 - C}{0.19 - A}$	
					grande $\frac{0.72 - D}{0.8 - B}$	
3)	A 	B 	C 	D 	piccolo $\frac{0.13 - D}{0.7 - A}$	
					grande $\frac{0.83 - C}{0.9 - B}$	
4)	A 	B 	C 	D 	piccolo $\frac{0.39 - A}{0.61 - D}$	
					grande $\frac{0.8 - B}{0.92 - C}$	
5)	A 	B 	C 	D 	piccolo $\frac{0.3 - C}{0.44 - A}$	
					grande $\frac{0.65 - D}{0.91 - B}$	
6)	A 	B 	C 	D 	piccolo $\frac{0.03 - D}{0.14 - B}$	
					grande $\frac{0.3 - A}{0.7 - C}$	
7)	A 	B 	C 	D 	piccolo $\frac{0.1 - D}{0.3 - A}$	
					grande $\frac{0.31 - C}{0.81 - B}$	
8)	A 	B 	C 	D 	piccolo $\frac{0.1 - D}{0.6 - B}$	
					grande $\frac{0.7 - A}{0.9 - C}$	

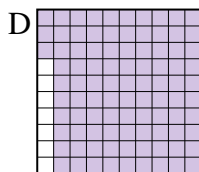
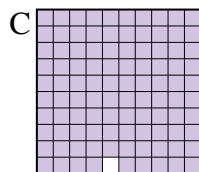
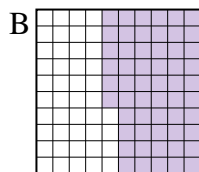
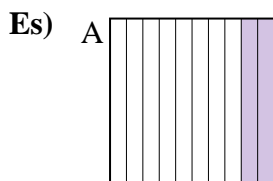
Risposte

- Es. B,C,A,D
1. D,C,A,B
2. C,A,D,B
3. D,A,C,B
4. A,D,B,C
5. C,A,D,B
6. D,B,A,C
7. D,A,C,B
8. D,B,A,C



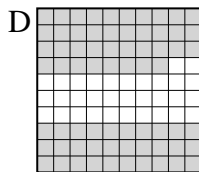

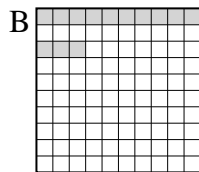
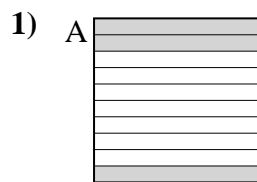
Metti in ordine i seguenti schemi dal più piccolo al più grande, in base alle parti colorate

Risposte



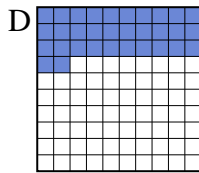
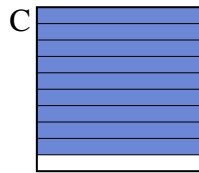

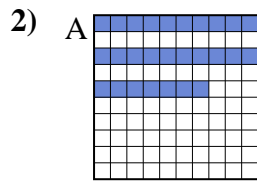
piccolo 0.2 - A
0.56 - B
0.93 - D
grande 0.99 - C

Es. **A,B,D,C**



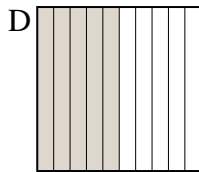
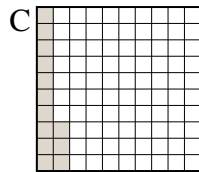
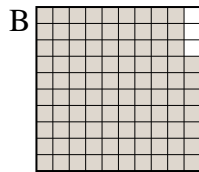
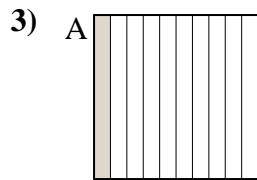
piccolo _____

grande _____



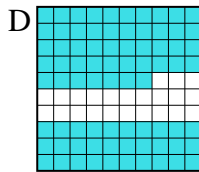
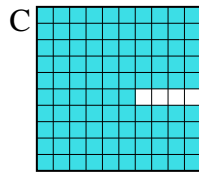
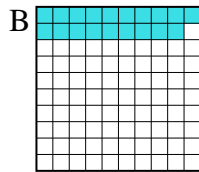
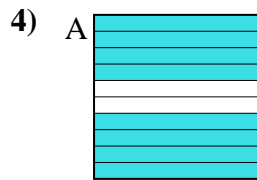
piccolo _____

grande _____



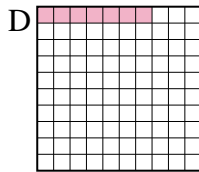
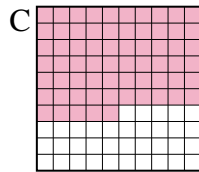
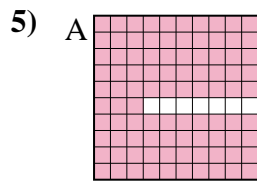
piccolo _____

grande _____



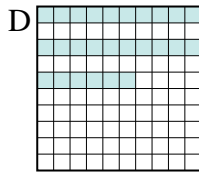

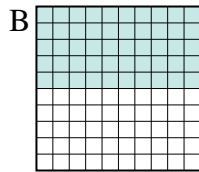
piccolo _____

grande _____



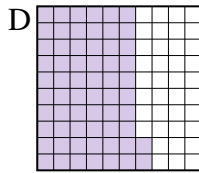
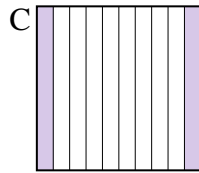
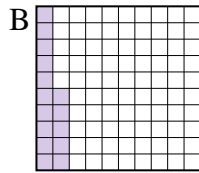
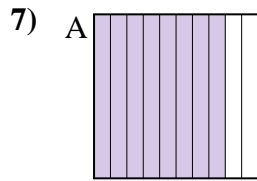
piccolo _____

grande _____



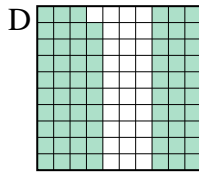
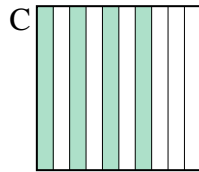
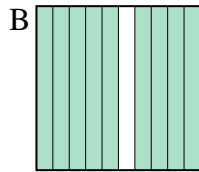
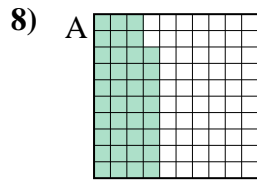
piccolo _____

grande _____



piccolo _____

grande _____



piccolo _____

grande _____

1. _____
2. _____
3. _____
4. _____
5. _____
6. _____
7. _____
8. _____



Metti in ordine i seguenti schemi dal più piccolo al più grande, in base alle parti colorate

Es)	A	B	C	D	piccolo $\frac{0.2 - A}{0.56 - B}$	
					grande $\frac{0.93 - D}{0.99 - C}$	
1)	A	B	C	D	piccolo $\frac{0.13 - B}{0.3 - A}$	
					grande $\frac{0.4 - C}{0.68 - D}$	
2)	A	B	C	D	piccolo $\frac{0.27 - A}{0.3 - B}$	
					grande $\frac{0.32 - D}{0.9 - C}$	
3)	A	B	C	D	piccolo $\frac{0.1 - A}{0.13 - C}$	
					grande $\frac{0.5 - D}{0.97 - B}$	
4)	A	B	C	D	piccolo $\frac{0.19 - B}{0.77 - D}$	
					grande $\frac{0.8 - A}{0.96 - C}$	
5)	A	B	C	D	piccolo $\frac{0.07 - D}{0.5 - B}$	
					grande $\frac{0.65 - C}{0.93 - A}$	
6)	A	B	C	D	piccolo $\frac{0.26 - D}{0.4 - C}$	
					grande $\frac{0.5 - A}{0.5 - A}$	
7)	A	B	C	D	piccolo $\frac{0.15 - B}{0.2 - C}$	
					grande $\frac{0.62 - D}{0.8 - A}$	
8)	A	B	C	D	piccolo $\frac{0.38 - A}{0.4 - C}$	
					grande $\frac{0.69 - D}{0.9 - B}$	

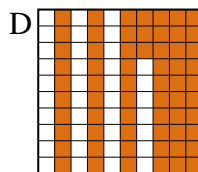
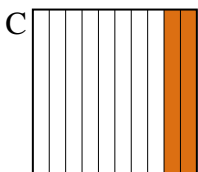
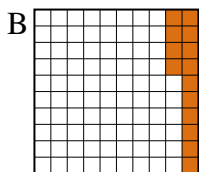
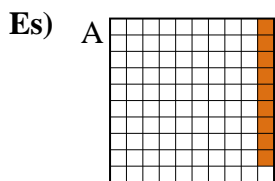
Risposte

- Es. A,B,D,C
1. B,A,C,D
2. A,B,D,C
3. A,C,D,B
4. B,D,A,C
5. D,B,C,A
6. D,C,A,A
7. B,C,D,A
8. A,C,D,B



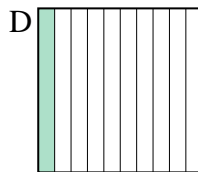
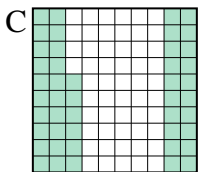
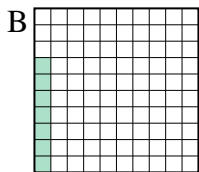
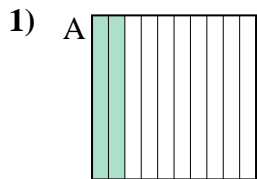
Metti in ordine i seguenti schemi dal più piccolo al più grande, in base alle parti colorate

Risposte



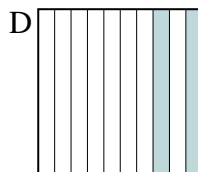
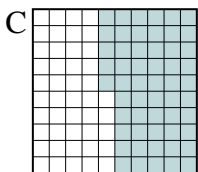
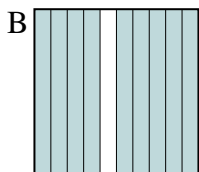
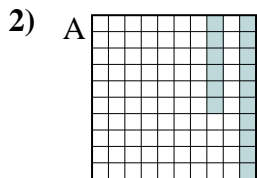
piccolo 0.09 - A
0.14 - B
0.2 - C
grande 0.63 - D

Es. A,B,C,D



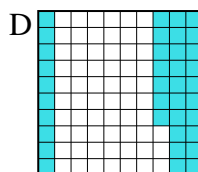
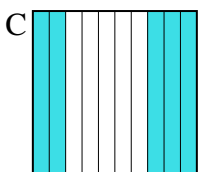
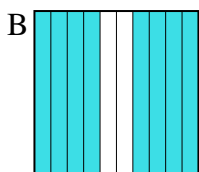
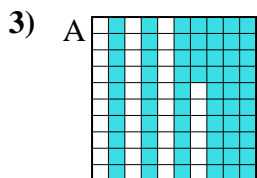
piccolo _____

grande _____



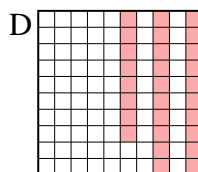
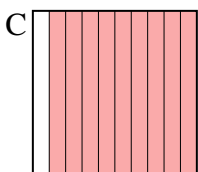
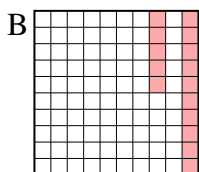
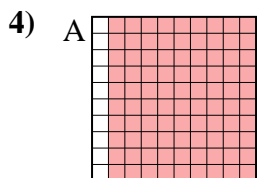
piccolo _____

grande _____



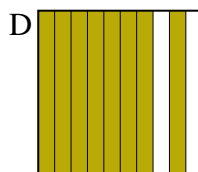
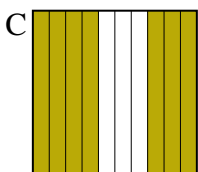
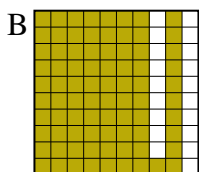
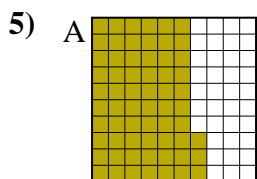
piccolo _____

grande _____




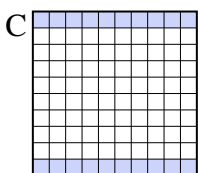

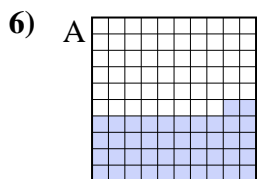
piccolo _____

grande _____




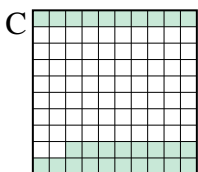

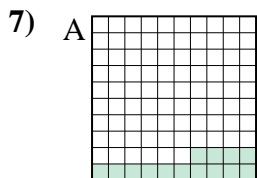
piccolo _____

grande _____



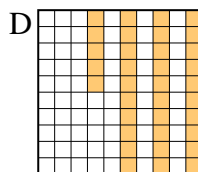
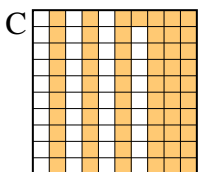
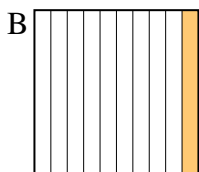
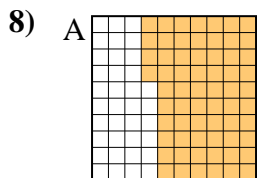
piccolo _____

grande _____



piccolo _____

grande _____



piccolo _____

grande _____

1. _____
2. _____
3. _____
4. _____
5. _____
6. _____
7. _____
8. _____



Metti in ordine i seguenti schemi dal più piccolo al più grande, in base alle parti colorate

Es)	A	B	C	D	piccolo $\frac{0.09 - A}{0.14 - B}$	
					grande $\frac{0.2 - C}{0.63 - D}$	
1)	A	B	C	D	piccolo $\frac{0.07 - B}{0.1 - D}$	
					grande $\frac{0.2 - A}{0.46 - C}$	
2)	A	B	C	D	piccolo $\frac{0.16 - A}{0.2 - D}$	
					grande $\frac{0.55 - C}{0.9 - B}$	
3)	A	B	C	D	piccolo $\frac{0.37 - D}{0.5 - C}$	
					grande $\frac{0.64 - A}{0.8 - B}$	
4)	A	B	C	D	piccolo $\frac{0.15 - B}{0.28 - D}$	
					grande $\frac{0.9 - A}{0.9 - A}$	
5)	A	B	C	D	piccolo $\frac{0.63 - A}{0.7 - C}$	
					grande $\frac{0.8 - D}{0.81 - B}$	
6)	A	B	C	D	piccolo $\frac{0.1 - B}{0.2 - C}$	
					grande $\frac{0.42 - A}{0.9 - D}$	
7)	A	B	C	D	piccolo $\frac{0.14 - A}{0.2 - B}$	
					grande $\frac{0.28 - C}{0.8 - D}$	
8)	A	B	C	D	piccolo $\frac{0.1 - B}{0.35 - D}$	
					grande $\frac{0.61 - C}{0.64 - A}$	


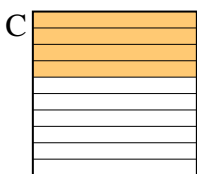
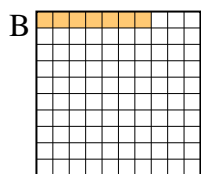
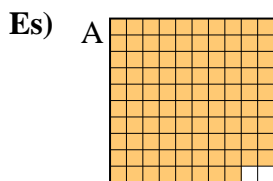
Risposte

- Es. A,B,C,D
1. B,D,A,C
2. A,D,C,B
3. D,C,A,B
4. B,D,A,A
5. A,C,D,B
6. B,C,A,D
7. A,B,C,D
8. B,D,C,A



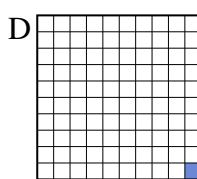
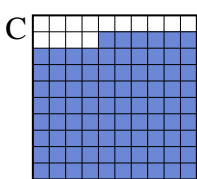
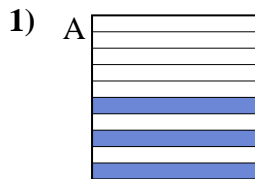
Metti in ordine i seguenti schemi dal più piccolo al più grande, in base alle parti colorate

Risposte



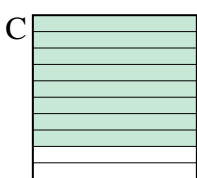
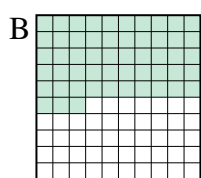
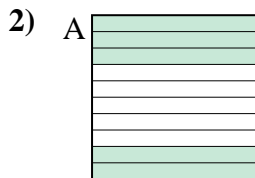
piccolo 0.07 - B
0.1 - D
0.4 - C
grande 0.98 - A

Es. **B,D,C,A**



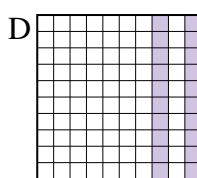
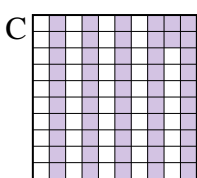
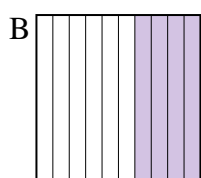
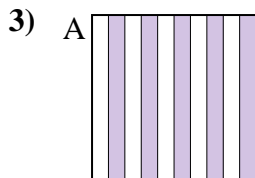
piccolo _____

grande _____




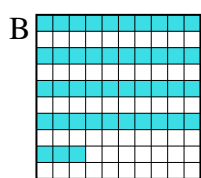
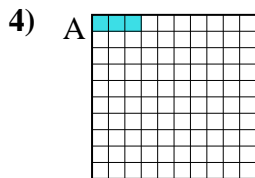
piccolo _____

grande _____



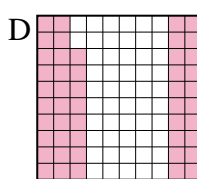
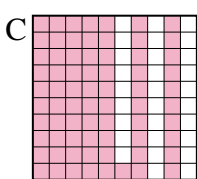
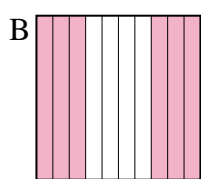
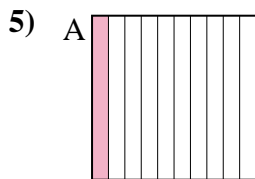
piccolo _____

grande _____



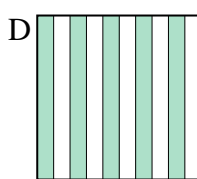
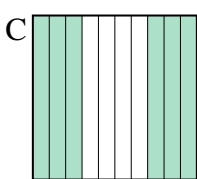
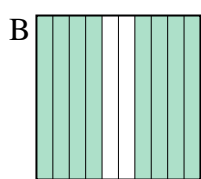
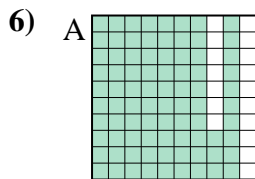
piccolo _____

grande _____



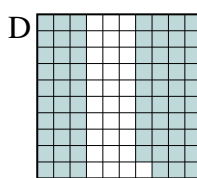
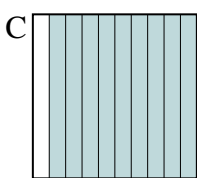
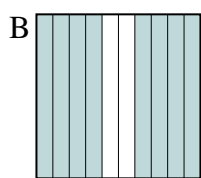
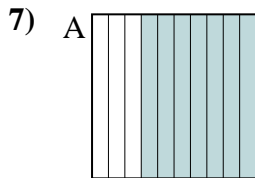
piccolo _____

grande _____



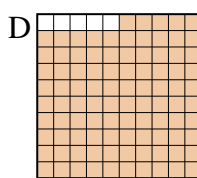
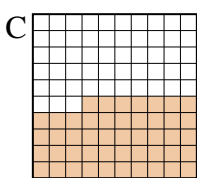
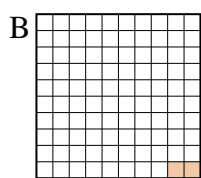
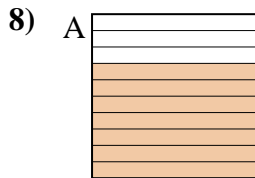
piccolo _____

grande _____



piccolo _____

grande _____



piccolo _____

grande _____

1. _____
2. _____
3. _____
4. _____
5. _____
6. _____
7. _____
8. _____



Metti in ordine i seguenti schemi dal più piccolo al più grande, in base alle parti colorate

Es)	A	B	C	D	piccolo $\frac{0.07 - B}{0.1 - D}$	
						grande $\frac{0.4 - C}{0.98 - A}$
1)	A	B	C	D	piccolo $\frac{0.01 - D}{0.3 - A}$	
						grande $\frac{0.86 - C}{0.9 - B}$
2)	A	B	C	D	piccolo $\frac{0.1 - D}{0.5 - A}$	
						grande $\frac{0.53 - B}{0.8 - C}$
3)	A	B	C	D	piccolo $\frac{0.2 - D}{0.4 - B}$	
						grande $\frac{0.5 - A}{0.52 - C}$
4)	A	B	C	D	piccolo $\frac{0.03 - A}{0.2 - C}$	
						grande $\frac{0.43 - B}{0.9 - D}$
5)	A	B	C	D	piccolo $\frac{0.1 - A}{0.48 - D}$	
						grande $\frac{0.6 - B}{0.71 - C}$
6)	A	B	C	D	piccolo $\frac{0.5 - D}{0.6 - C}$	
						grande $\frac{0.8 - B}{0.83 - A}$
7)	A	B	C	D	piccolo $\frac{0.69 - D}{0.7 - A}$	
						grande $\frac{0.8 - B}{0.9 - C}$
8)	A	B	C	D	piccolo $\frac{0.02 - B}{0.47 - C}$	
						grande $\frac{0.7 - A}{0.95 - D}$

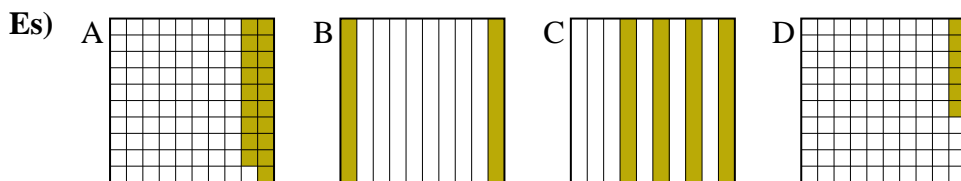
Risposte

- Es. B,D,C,A
1. D,A,C,B
2. D,A,B,C
3. D,B,A,C
4. A,C,B,D
5. A,D,B,C
6. D,C,B,A
7. D,A,B,C
8. B,C,A,D



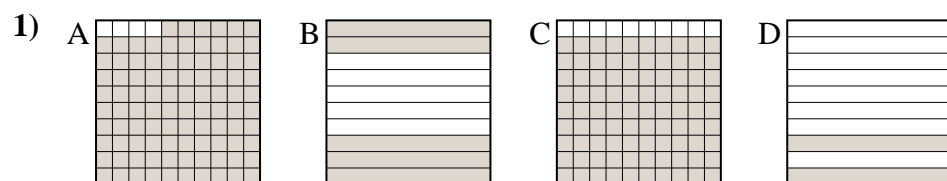
Metti in ordine i seguenti schemi dal più piccolo al più grande, in base alle parti colorate

Risposte



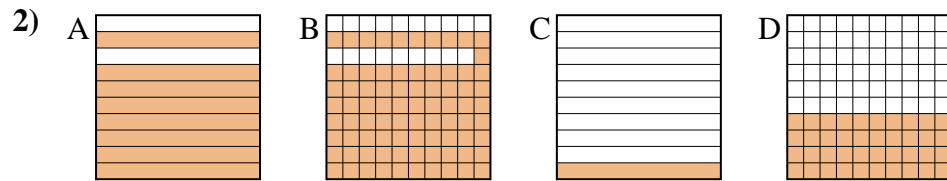
piccolo 0.06 - D
0.19 - A
0.2 - B
grande 0.4 - C

Es. **D,A,B,C**



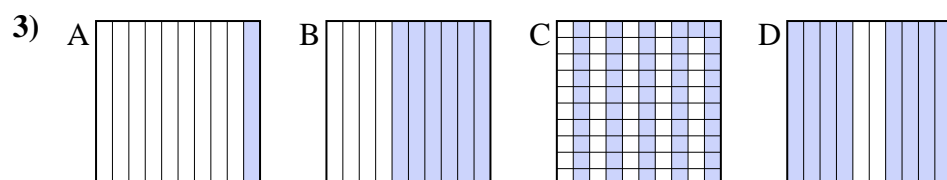
piccolo _____

grande _____



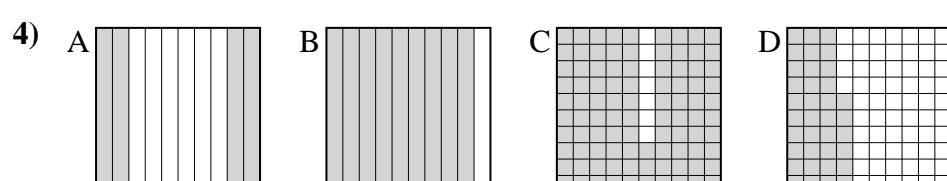
piccolo _____

grande _____



piccolo _____

grande _____



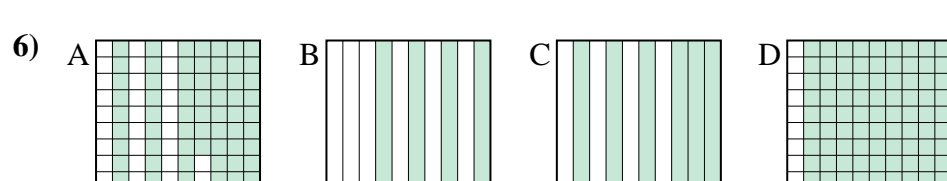
piccolo _____

grande _____



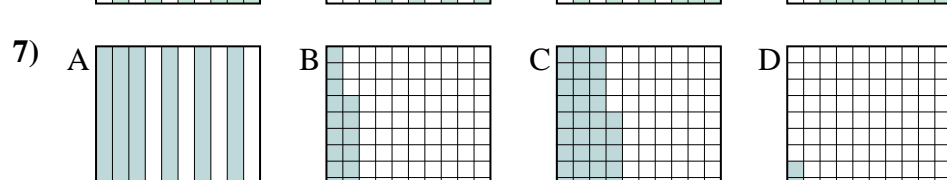
piccolo _____

grande _____



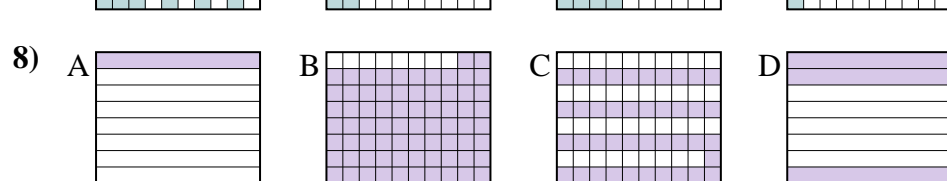
piccolo _____

grande _____



piccolo _____

grande _____



piccolo _____

grande _____

1. _____
2. _____
3. _____
4. _____
5. _____
6. _____
7. _____
8. _____



Metti in ordine i seguenti schemi dal più piccolo al più grande, in base alle parti colorate

Es)	A	B	C	D	piccolo $\frac{0.06 - D}{0.19 - A}$	
					grande $\frac{0.4 - C}$	
1)	A	B	C	D	piccolo $\frac{0.2 - D}{0.5 - B}$	
					grande $\frac{0.96 - A}$	
2)	A	B	C	D	piccolo $\frac{0.1 - C}{0.4 - D}$	
					grande $\frac{0.81 - B}{0.8 - A}$	
3)	A	B	C	D	piccolo $\frac{0.1 - A}{0.51 - C}$	
					grande $\frac{0.6 - B}{0.8 - D}$	
4)	A	B	C	D	piccolo $\frac{0.36 - D}{0.4 - A}$	
					grande $\frac{0.9 - B}{0.93 - C}$	
5)	A	B	C	D	piccolo $\frac{0.19 - D}{0.29 - A}$	
					grande $\frac{0.6 - B}{0.8 - C}$	
6)	A	B	C	D	piccolo $\frac{0.4 - B}{0.6 - C}$	
					grande $\frac{0.67 - A}{0.89 - D}$	
7)	A	B	C	D	piccolo $\frac{0.03 - D}{0.17 - B}$	
					grande $\frac{0.36 - C}{0.6 - A}$	
8)	A	B	C	D	piccolo $\frac{0.2 - A}{0.5 - D}$	
					grande $\frac{0.61 - C}{0.92 - B}$	

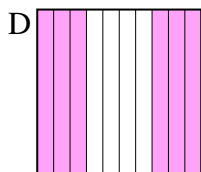
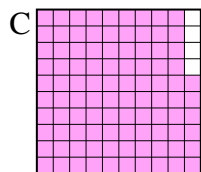
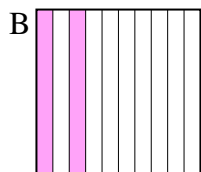
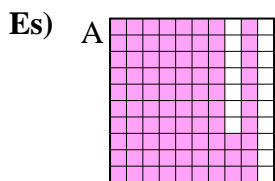
Risposte

- Es. D,A,B,C
1. D,B,C,A
2. C,D,A,B
3. A,C,B,D
4. D,A,B,C
5. D,A,B,C
6. B,C,A,D
7. D,B,C,A
8. A,D,C,B



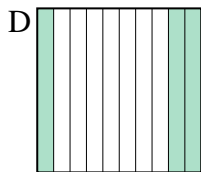
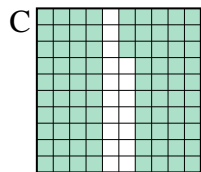
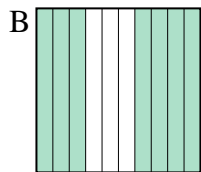
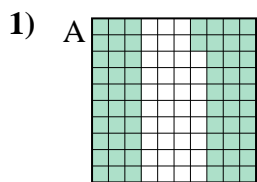
Metti in ordine i seguenti schemi dal più piccolo al più grande, in base alle parti colorate

Risposte



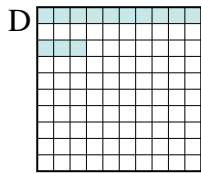
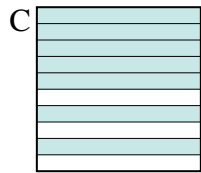
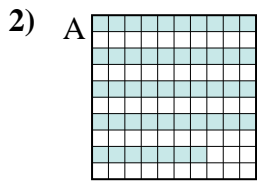
piccolo 0.2 - B
0.6 - D
0.83 - A
grande 0.96 - C

Es. **B,D,A,C**



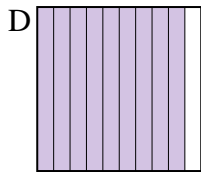
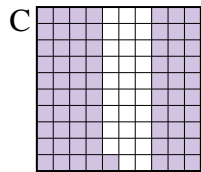
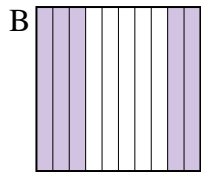
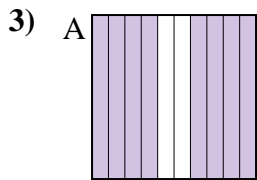
piccolo _____

grande _____



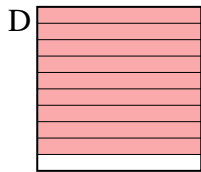

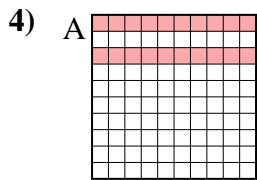
piccolo _____

grande _____



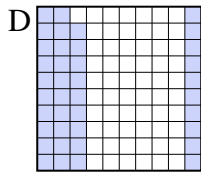
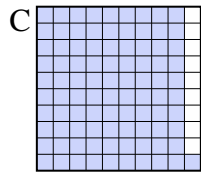
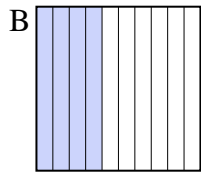
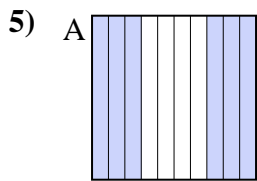
piccolo _____

grande _____



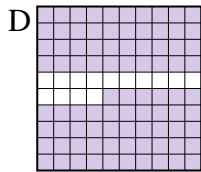
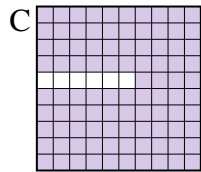
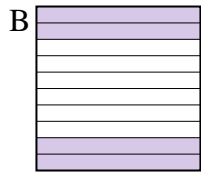
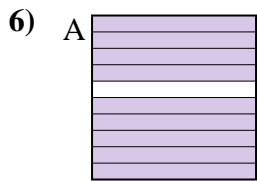
piccolo _____

grande _____



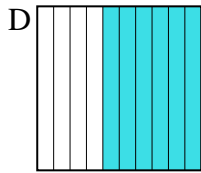
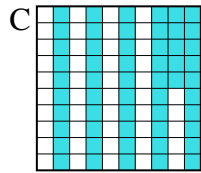
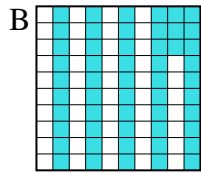
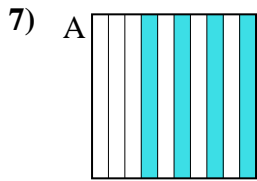
piccolo _____

grande _____



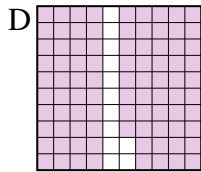
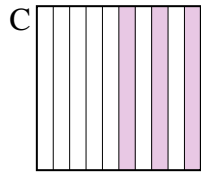
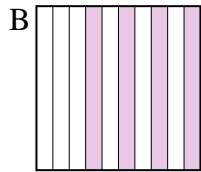
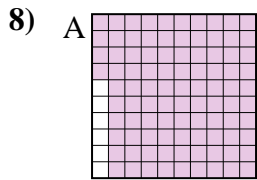
piccolo _____

grande _____



piccolo _____

grande _____



piccolo _____

grande _____

1. _____
2. _____
3. _____
4. _____
5. _____
6. _____
7. _____
8. _____



Metti in ordine i seguenti schemi dal più piccolo al più grande, in base alle parti colorate

Es)	A	B	C	D	piccolo $\frac{0.2 - B}{0.6 - D}$	
					grande $\frac{0.83 - A}{0.96 - C}$	
1)	A	B	C	D	piccolo $\frac{0.3 - D}{0.62 - A}$	
					grande $\frac{0.7 - B}{0.83 - C}$	
2)	A	B	C	D	piccolo $\frac{0.13 - D}{0.4 - B}$	
					grande $\frac{0.47 - A}{0.7 - C}$	
3)	A	B	C	D	piccolo $\frac{0.5 - B}{0.71 - C}$	
					grande $\frac{0.8 - A}{0.9 - D}$	
4)	A	B	C	D	piccolo $\frac{0.1 - C}{0.2 - A}$	
					grande $\frac{0.6 - B}{0.9 - D}$	
5)	A	B	C	D	piccolo $\frac{0.39 - D}{0.4 - B}$	
					grande $\frac{0.6 - A}{0.91 - C}$	
6)	A	B	C	D	piccolo $\frac{0.4 - B}{0.86 - D}$	
					grande $\frac{0.9 - A}{0.94 - C}$	
7)	A	B	C	D	piccolo $\frac{0.4 - A}{0.53 - B}$	
					grande $\frac{0.55 - C}{0.6 - D}$	
8)	A	B	C	D	piccolo $\frac{0.3 - C}{0.4 - B}$	
					grande $\frac{0.88 - D}{0.94 - A}$	

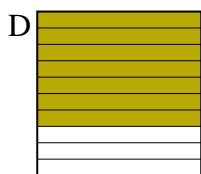
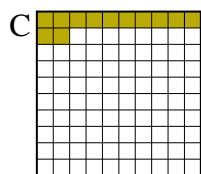
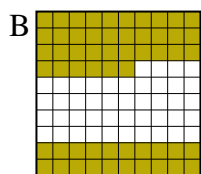
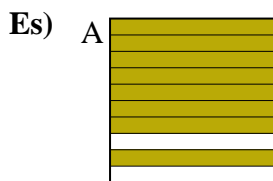
Risposte

- Es. B,D,A,C
1. D,A,B,C
2. D,B,A,C
3. B,C,A,D
4. C,A,B,D
5. D,B,A,C
6. B,D,A,C
7. A,B,C,D
8. C,B,D,A



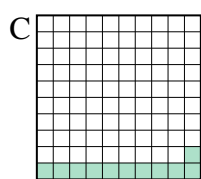

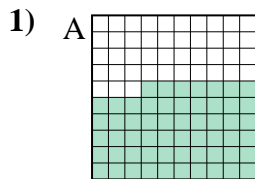
Metti in ordine i seguenti schemi dal più piccolo al più grande, in base alle parti colorate

Risposte



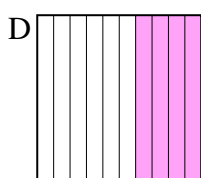
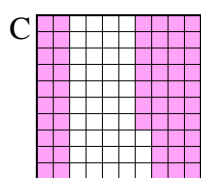
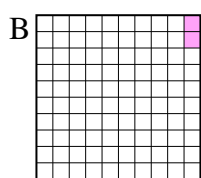
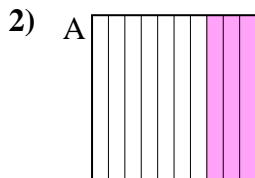
piccolo 0.12 - C
0.56 - B
0.7 - D
grande 0.8 - A

Es. C,B,D,A



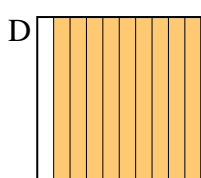
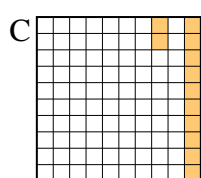
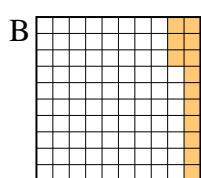
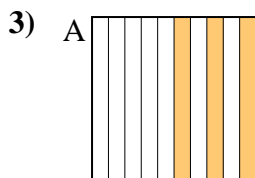
piccolo _____

grande _____



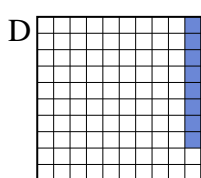
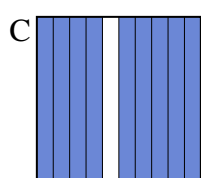
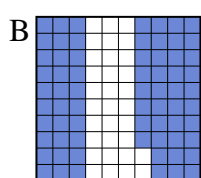
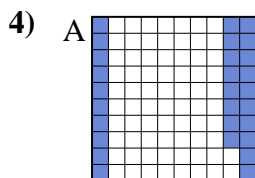
piccolo _____

grande _____



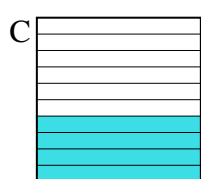
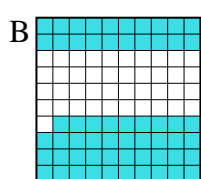
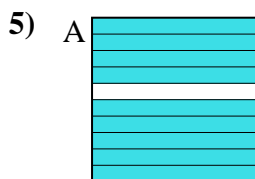
piccolo _____

grande _____



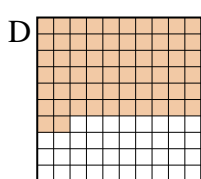
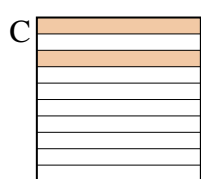
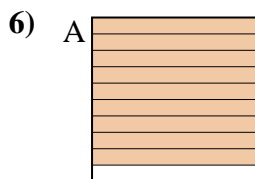
piccolo _____

grande _____



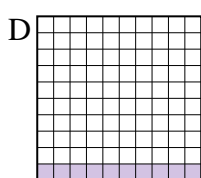
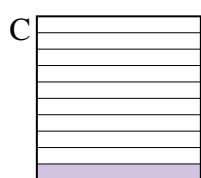
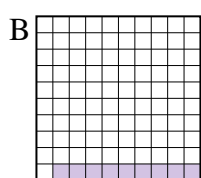
piccolo _____

grande _____



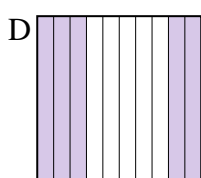
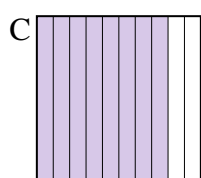
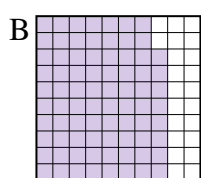
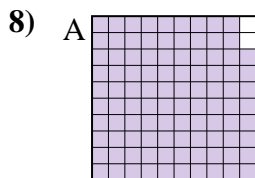
piccolo _____

grande _____



piccolo _____

grande _____



piccolo _____

grande _____

1. _____
2. _____
3. _____
4. _____
5. _____
6. _____
7. _____
8. _____



Metti in ordine i seguenti schemi dal più piccolo al più grande, in base alle parti colorate

Es)	A	B	C	D	piccolo $\frac{0.12 - C}{0.56 - B}$
					grande $\frac{0.7 - D}{0.8 - A}$
1)	A	B	C	D	piccolo $\frac{0.11 - C}{0.57 - A}$
					grande $\frac{0.7 - D}{0.9 - B}$
2)	A	B	C	D	piccolo $\frac{0.02 - B}{0.3 - A}$
					grande $\frac{0.4 - D}{0.57 - C}$
3)	A	B	C	D	piccolo $\frac{0.12 - C}{0.13 - B}$
					grande $\frac{0.3 - A}{0.9 - D}$
4)	A	B	C	D	piccolo $\frac{0.08 - D}{0.28 - A}$
					grande $\frac{0.68 - B}{0.9 - C}$
5)	A	B	C	D	piccolo $\frac{0.3 - D}{0.4 - C}$
					grande $\frac{0.59 - B}{0.9 - A}$
6)	A	B	C	D	piccolo $\frac{0.2 - C}{0.6 - B}$
					grande $\frac{0.62 - D}{0.9 - A}$
7)	A	B	C	D	piccolo $\frac{0.09 - B}{0.1 - C}$
					grande $\frac{0.1 - C}{0.6 - A}$
8)	A	B	C	D	piccolo $\frac{0.5 - D}{0.78 - B}$
					grande $\frac{0.8 - C}{0.98 - A}$


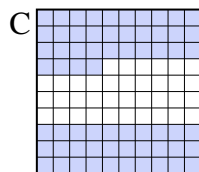

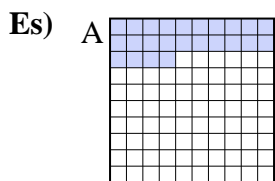
Risposte

- Es. C,B,D,A
1. C,A,D,B
2. B,A,D,C
3. C,B,A,D
4. D,A,B,C
5. D,C,B,A
6. C,B,D,A
7. B,C,C,A
8. D,B,C,A



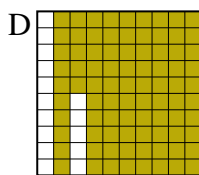
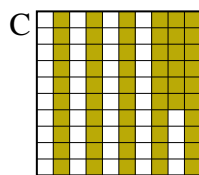
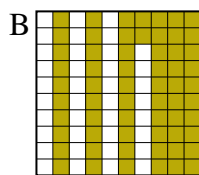
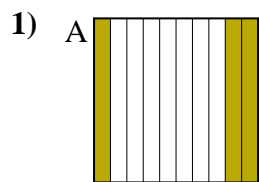
Metti in ordine i seguenti schemi dal più piccolo al più grande, in base alle parti colorate

Risposte

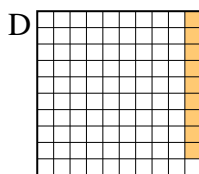
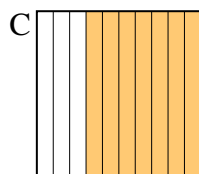
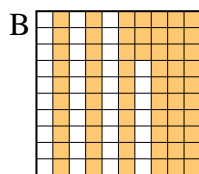
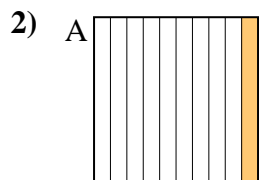


piccolo 0.2 - D
0.24 - A
0.4 - B
 grande 0.64 - C

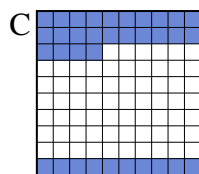

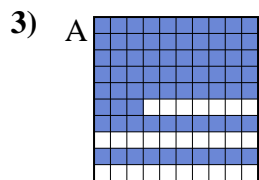
Es. **D,A,B,C**



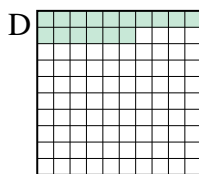


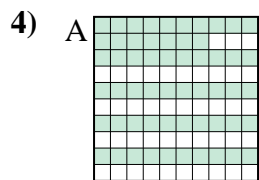
piccolo _____
 grande _____



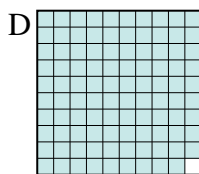
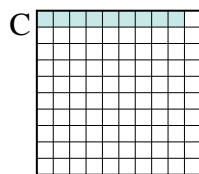

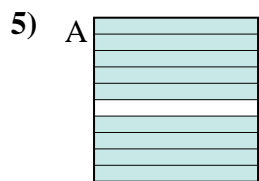
piccolo _____
 grande _____



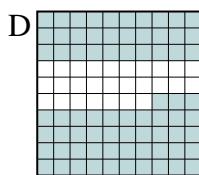
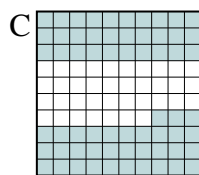

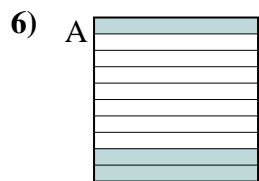
piccolo _____
 grande _____



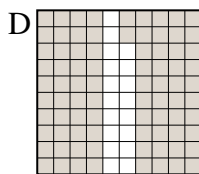
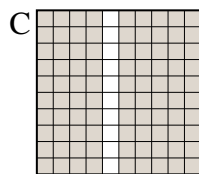
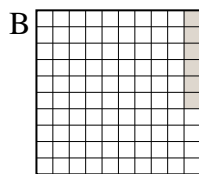
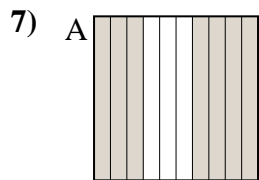
piccolo _____
 grande _____



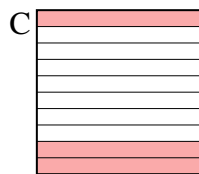
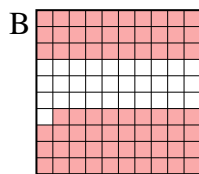
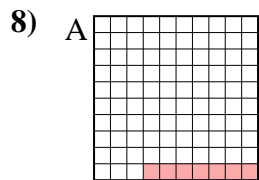
piccolo _____
 grande _____



piccolo _____
 grande _____



piccolo _____
 grande _____



piccolo _____
 grande _____

- 1. _____
- 2. _____
- 3. _____
- 4. _____
- 5. _____
- 6. _____
- 7. _____
- 8. _____



Metti in ordine i seguenti schemi dal più piccolo al più grande, in base alle parti colorate

Es)	A	B	C	D	piccolo $\frac{0.2 - D}{0.24 - A}$	
					grande $\frac{0.4 - B}{0.64 - C}$	
1)	A	B	C	D	piccolo $\frac{0.3 - A}{0.56 - C}$	
					grande $\frac{0.62 - B}{0.85 - D}$	
2)	A	B	C	D	piccolo $\frac{0.09 - D}{0.1 - A}$	
					grande $\frac{0.63 - B}{0.7 - C}$	
3)	A	B	C	D	piccolo $\frac{0.3 - B}{0.34 - C}$	
					grande $\frac{0.7 - D}{0.73 - A}$	
4)	A	B	C	D	piccolo $\frac{0.16 - D}{0.4 - B}$	
					grande $\frac{0.57 - A}{0.9 - C}$	
5)	A	B	C	D	piccolo $\frac{0.09 - C}{0.3 - B}$	
					grande $\frac{0.9 - A}{0.99 - D}$	
6)	A	B	C	D	piccolo $\frac{0.3 - A}{0.4 - B}$	
					grande $\frac{0.63 - C}{0.73 - D}$	
7)	A	B	C	D	piccolo $\frac{0.06 - B}{0.7 - A}$	
					grande $\frac{0.82 - D}{0.9 - C}$	
8)	A	B	C	D	piccolo $\frac{0.07 - A}{0.2 - D}$	
					grande $\frac{0.3 - C}{0.69 - B}$	

Risposte

- Es. **D,A,B,C**
1. **A,C,B,D**
2. **D,A,B,C**
3. **B,C,D,A**
4. **D,B,A,C**
5. **C,B,A,D**
6. **A,B,C,D**
7. **B,A,D,C**
8. **A,D,C,B**