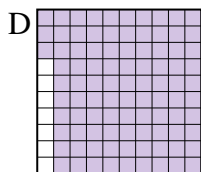
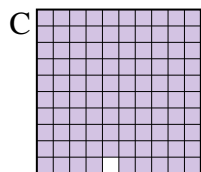
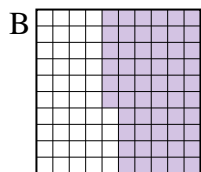
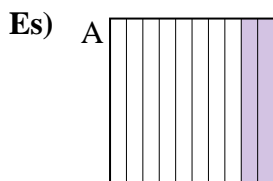




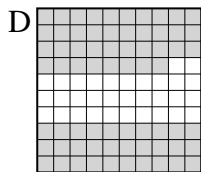

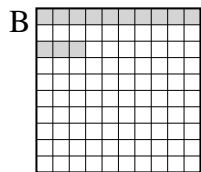
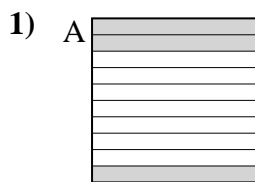
Metti in ordine i seguenti schemi dal più piccolo al più grande, in base alle parti colorate

**Risposte**

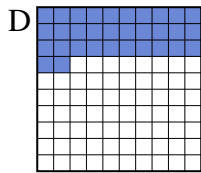
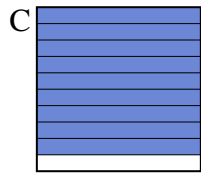

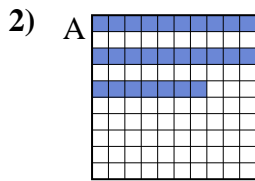


piccolo 0.2 - A  
0.56 - B  
0.93 - D  
grande 0.99 - C

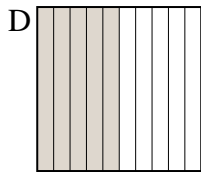
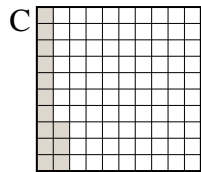
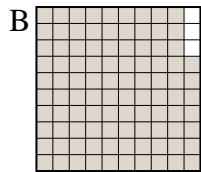
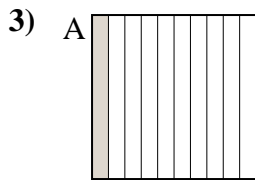
Es. **A,B,D,C**



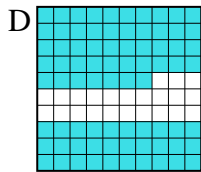
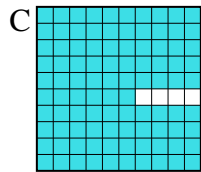
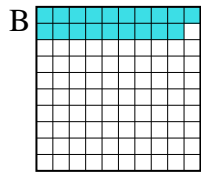
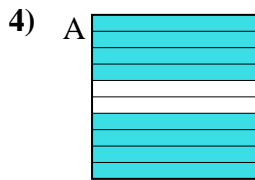
piccolo \_\_\_\_\_  
\_\_\_\_\_  
grande \_\_\_\_\_



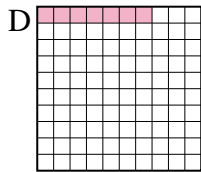
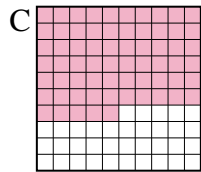
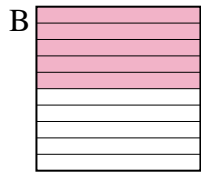
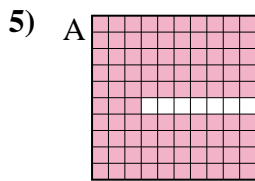
piccolo \_\_\_\_\_  
\_\_\_\_\_  
grande \_\_\_\_\_



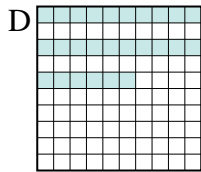

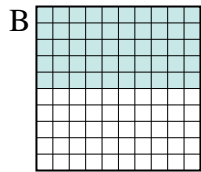
piccolo \_\_\_\_\_  
\_\_\_\_\_  
grande \_\_\_\_\_



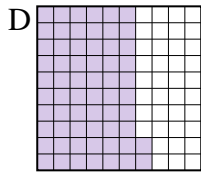
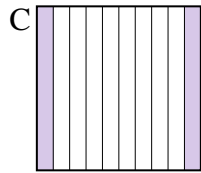
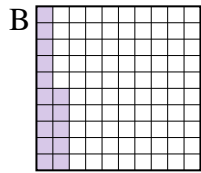
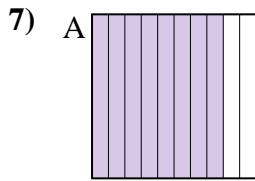
piccolo \_\_\_\_\_  
\_\_\_\_\_  
grande \_\_\_\_\_



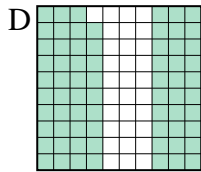
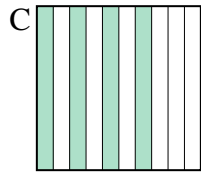
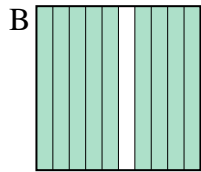
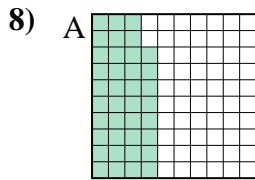
piccolo \_\_\_\_\_  
\_\_\_\_\_  
grande \_\_\_\_\_



piccolo \_\_\_\_\_  
\_\_\_\_\_  
grande \_\_\_\_\_



piccolo \_\_\_\_\_  
\_\_\_\_\_  
grande \_\_\_\_\_



piccolo \_\_\_\_\_  
\_\_\_\_\_  
grande \_\_\_\_\_

1. \_\_\_\_\_
2. \_\_\_\_\_
3. \_\_\_\_\_
4. \_\_\_\_\_
5. \_\_\_\_\_
6. \_\_\_\_\_
7. \_\_\_\_\_
8. \_\_\_\_\_



Metti in ordine i seguenti schemi dal più piccolo al più grande, in base alle parti colorate

Es)	A	B	C	D	piccolo $\frac{0.2 - A}{0.56 - B}$	
					grande $\frac{0.99 - C}{0.93 - D}$	
1)	A	B	C	D	piccolo $\frac{0.13 - B}{0.3 - A}$	
					grande $\frac{0.68 - D}{0.4 - C}$	
2)	A	B	C	D	piccolo $\frac{0.27 - A}{0.3 - B}$	
					grande $\frac{0.32 - D}{0.9 - C}$	
3)	A	B	C	D	piccolo $\frac{0.1 - A}{0.13 - C}$	
					grande $\frac{0.97 - B}{0.5 - D}$	
4)	A	B	C	D	piccolo $\frac{0.19 - B}{0.77 - D}$	
					grande $\frac{0.8 - A}{0.96 - C}$	
5)	A	B	C	D	piccolo $\frac{0.07 - D}{0.5 - B}$	
					grande $\frac{0.65 - C}{0.93 - A}$	
6)	A	B	C	D	piccolo $\frac{0.26 - D}{0.4 - C}$	
					grande $\frac{0.5 - A}{0.5 - A}$	
7)	A	B	C	D	piccolo $\frac{0.15 - B}{0.2 - C}$	
					grande $\frac{0.62 - D}{0.8 - A}$	
8)	A	B	C	D	piccolo $\frac{0.38 - A}{0.4 - C}$	
					grande $\frac{0.69 - D}{0.9 - B}$	

**Risposte**

- Es. A,B,D,C
1. B,A,C,D
2. A,B,D,C
3. A,C,D,B
4. B,D,A,C
5. D,B,C,A
6. D,C,A,A
7. B,C,D,A
8. A,C,D,B