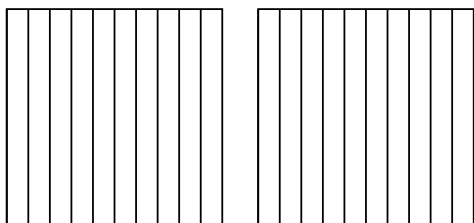


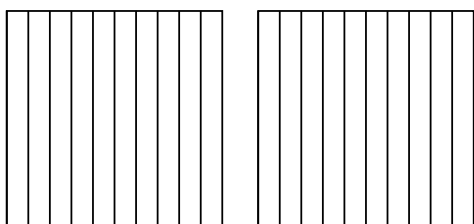


Usa il modello visivo per risolvere ogni problema.

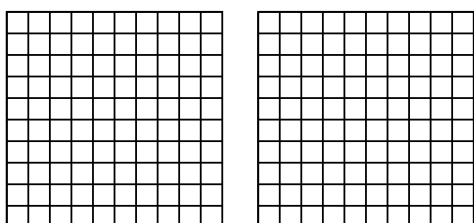
1) $2 \times 0,9 =$




2) $2 \times 0,3 =$



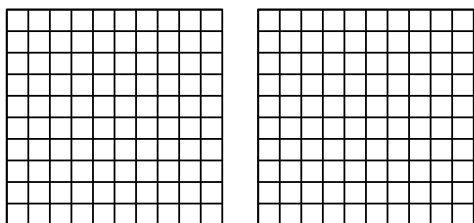
3) $2 \times 0,46 =$



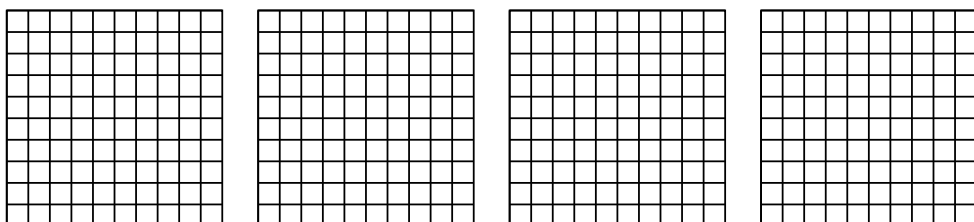
4) $3 \times 0,2 =$



5) $2 \times 0,96 =$



6) $4 \times 0,30 =$



Risposte

1. _____

2. _____

3. _____

4. _____

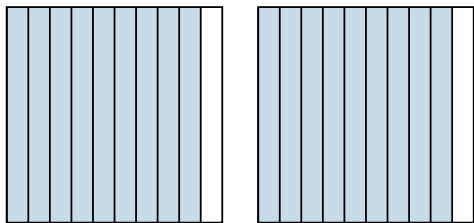
5. _____

6. _____

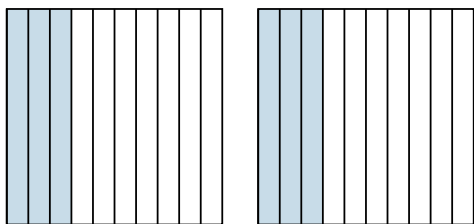


Usa il modello visivo per risolvere ogni problema.

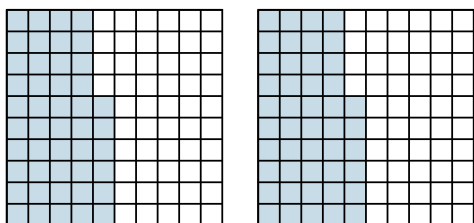
1) $2 \times 0,9 =$




2) $2 \times 0,3 =$



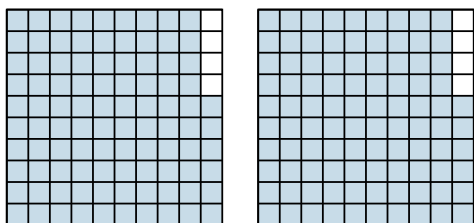
3) $2 \times 0,46 =$



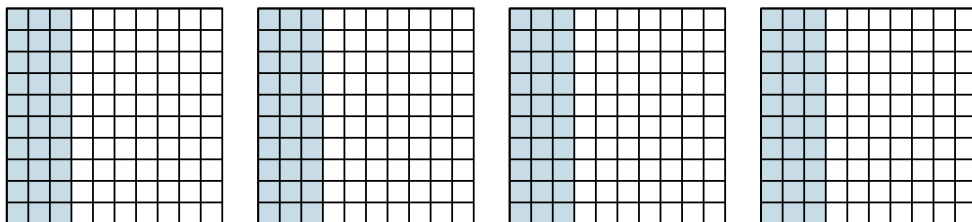
4) $3 \times 0,2 =$



5) $2 \times 0,96 =$



6) $4 \times 0,30 =$



Risposte

1. $\frac{18}{10} = 1,8$

2. $\frac{6}{10} = 0,6$

3. $\frac{92}{100} = 0,92$

4. $\frac{6}{10} = 0,6$

5. $\frac{192}{100} = 1,92$

6. $\frac{120}{100} = 1,2$