





Usa il modello visivo per risolvere ogni problema.


1) $0,5 \times 0,6 =$




2) $0,9 \times 0,6 =$




3) $0,1 \times 0,7 =$




4) $0,1 \times 0,3 =$




5) $0,7 \times 0,3 =$




6) $0,1 \times 0,2 =$




7) $0,6 \times 0,9 =$




8) $0,9 \times 0,3 =$




9) $0,5 \times 0,2 =$




10) $0,4 \times 0,6 =$




11) $0,5 \times 0,3 =$




12) $0,3 \times 0,3 =$




13) $0,5 \times 0,4 =$



14) $0,3 \times 0,1 =$



15) $0,4 \times 0,1 =$



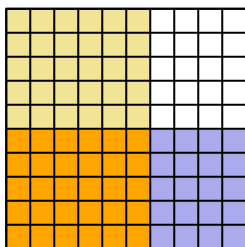
Risposte

1. _____
2. _____
3. _____
4. _____
5. _____
6. _____
7. _____
8. _____
9. _____
10. _____
11. _____
12. _____
13. _____
14. _____
15. _____

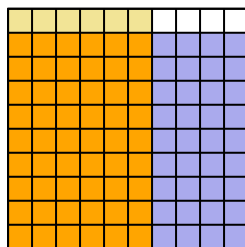


Usa il modello visivo per risolvere ogni problema.

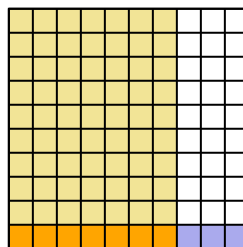
1) $0,5 \times 0,6 =$



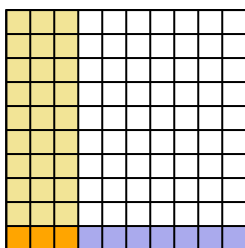
2) $0,9 \times 0,6 =$



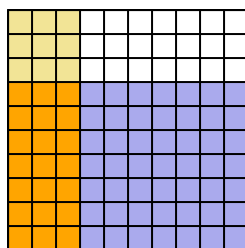
3) $0,1 \times 0,7 =$



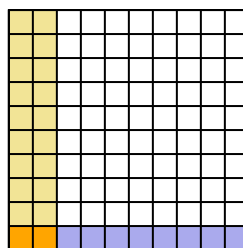
4) $0,1 \times 0,3 =$



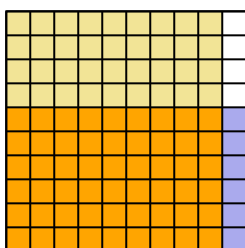
5) $0,7 \times 0,3 =$



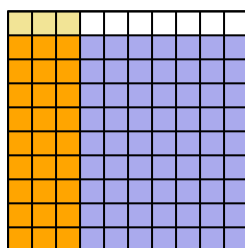
6) $0,1 \times 0,2 =$



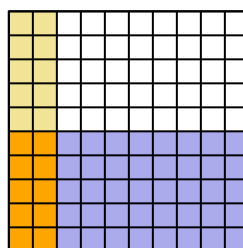
7) $0,6 \times 0,9 =$



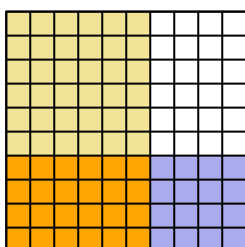
8) $0,9 \times 0,3 =$



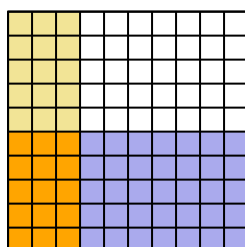
9) $0,5 \times 0,2 =$



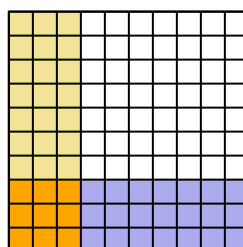
10) $0,4 \times 0,6 =$



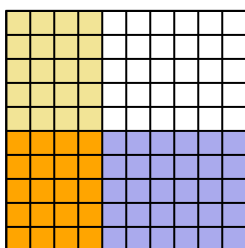
11) $0,5 \times 0,3 =$



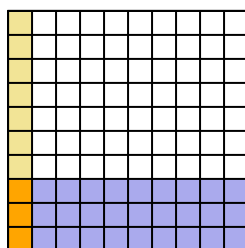
12) $0,3 \times 0,3 =$



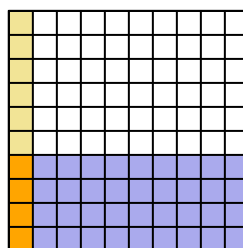
13) $0,5 \times 0,4 =$



14) $0,3 \times 0,1 =$



15) $0,4 \times 0,1 =$



Risposte

1. $\frac{30}{100} = 0,3$

2. $\frac{54}{100} = 0,54$

3. $\frac{7}{100} = 0,07$

4. $\frac{3}{100} = 0,03$

5. $\frac{21}{100} = 0,21$

6. $\frac{2}{100} = 0,02$

7. $\frac{54}{100} = 0,54$

8. $\frac{27}{100} = 0,27$

9. $\frac{10}{100} = 0,1$

10. $\frac{24}{100} = 0,24$

11. $\frac{15}{100} = 0,15$

12. $\frac{9}{100} = 0,09$

13. $\frac{20}{100} = 0,2$

14. $\frac{3}{100} = 0,03$

15. $\frac{4}{100} = 0,04$