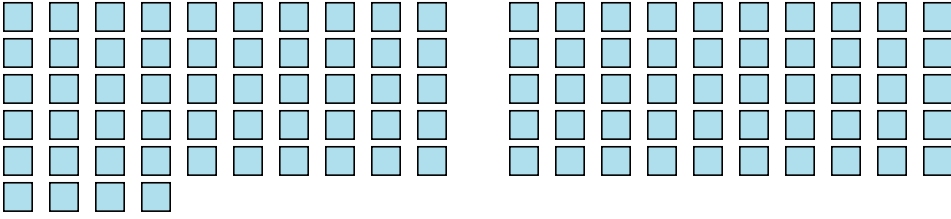


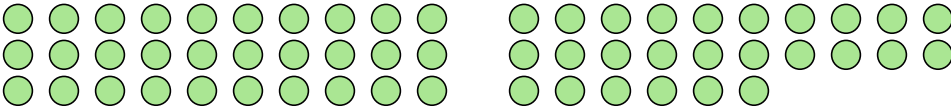


Conta il numero di forme mostrate.

1) 

2) 

3) 

4) 

5) 

**Risposte**

1. \_\_\_\_\_

2. \_\_\_\_\_

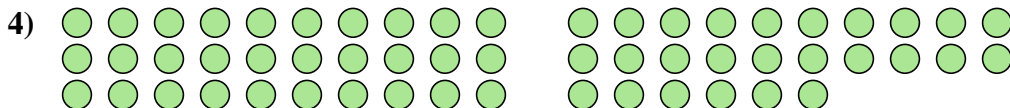
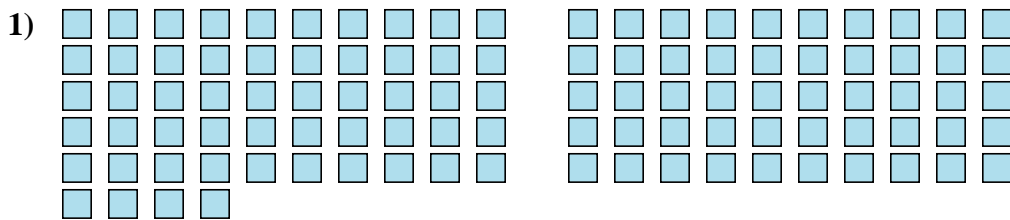
3. \_\_\_\_\_

4. \_\_\_\_\_

5. \_\_\_\_\_



Conta il numero di forme mostrate.



**Risposte**

1. 104

2. 69

3. 17

4. 56

5. 25